

**Join Telegram More Update Note: All previous year Exam paper provides Question Paper Preview**



कर्मचारी राज्य बीमा निगम  
Employees' State Insurance Corporation  
(Ministry of Labour & Employment, Government of India)

**Notations :**

- Options shown in green color and with ✓ icon are correct.
- Options shown in red color and with ✗ icon are incorrect.

**Question Paper Name:** Upper Division Clerks Shift 8  
**Subject Name:** UPPER DIVISION CLERK UDC  
**Creation Date:** 2016-03-27 11:05:29  
**Duration:** 120  
**Total Marks:** 200  
**Display Marks:** Yes

Upper Division Clerks Shift 1

Group Number : 1  
Group Id : 73681538  
Group Maximum Duration : 0  
Group Minimum Duration : 120  
Revisit allowed for view? : No  
Revisit allowed for edit? : No  
Break time: 0  
Mandatory Break time: No  
Group Marks: 200

Numerical Ability

Section Id : 736815145  
Section Number : 1  
Section type : Online  
Mandatory or Optional: Mandatory  
Number of Questions: 50  
Number of Questions to be attempted: 50  
Section Marks: 50  
Display Number Panel: Yes  
Group All Questions: No

Sub-Section Number: 1  
Sub-Section Id: 736815219  
Question Shuffling Allowed : Yes

**Question Number : 1 Question Id : 7368157475 Question Type : MCQ Option Shuffling : Yes Display Question Number : Yes**  
**Single Line Question Option : No Option Orientation : Vertical**

**Correct : 1 Wrong : 0.25**

Convert 91 into a binary number.

**Options :**

- ✓ 1011011

**visit this website [studytosuccess.in](http://studytosuccess.in)**

2. ✘ 1100110

3. ✘ 1001100

4. ✘ 1101101

Question Number : 1 Question Id : 7368157475 Question Type : MCQ Option Shuffling : Yes Display Question Number : Yes  
Single Line Question Option : No Option Orientation : Vertical

Correct : 1 Wrong : 0.25

91 को बाइनरी संख्या में परिवर्तित करें।

Options :

1. ✔ 1011011

2. ✘ 1100110

3. ✘ 1001100

4. ✘ 1101101

Question Number : 2 Question Id : 7368157476 Question Type : MCQ Option Shuffling : Yes Display Question Number : Yes  
Single Line Question Option : No Option Orientation : Vertical

Correct : 1 Wrong : 0.25

The number of prime factors in  $(28)^{12} \times (36)^{18} \times (15)^9$  are:

Options :

1. ✘ 136

2. ✔ 126

3. ✘ 152

4. ✘ 119

Question Number : 2 Question Id : 7368157476 Question Type : MCQ Option Shuffling : Yes Display Question Number : Yes  
Single Line Question Option : No Option Orientation : Vertical

Correct : 1 Wrong : 0.25

$(28)^{12} \times (36)^{18} \times (15)^9$  में अभाज्य गुणांकों की संख्या \_\_\_\_\_ है।

Options :

1. ✘ 136

2. ✔ 126

3. ✘ 152

4. ✘ 119

Question Number : 3 Question Id : 7368157477 Question Type : MCQ Option Shuffling : Yes Display Question Number : Yes  
Single Line Question Option : No Option Orientation : Vertical

Correct : 1 Wrong : 0.25

What least value must be assigned to \* so that the number  $500*629$  is divisible by 9?

Options :

1. ✘ 7

2. ✘ 6

3. ✔ 5

4. ✘ 2

Question Number : 3 Question Id : 7368157477 Question Type : MCQ Option Shuffling : Yes Display Question Number : Yes  
Single Line Question Option : No Option Orientation : Vertical

Correct : 1 Wrong : 0.25

\* को कौन सा न्यूनतम मान दिया जाना चाहिए, ताकि संख्या  $500 \times 629$ , 9 से विभाज्य हो?

Options :

1. ✘ 7

2. ✘ 6

3. ✔ 5

4. ✘ 2

Question Number : 4 Question Id : 7368157478 Question Type : MCQ Option Shuffling : Yes Display Question Number : Yes  
Single Line Question Option : No Option Orientation : Vertical

Correct : 1 Wrong : 0.25

Compute:  $1213 \times 9999 + 1213$

Options :

1. ✘ 12130009

2. ✘ 12139999

3. ✘ 13219999

4. ✔ 12130000

Question Number : 4 Question Id : 7368157478 Question Type : MCQ Option Shuffling : Yes Display Question Number : Yes  
Single Line Question Option : No Option Orientation : Vertical

Correct : 1 Wrong : 0.25

गणना करें :  $1213 \times 9999 + 1213$ .

Options :

1. ✘ 12130009

2. ✘ 12139999

3. ✘ 13219999

4. ✔ 12130000

Question Number : 5 Question Id : 7368157479 Question Type : MCQ Option Shuffling : Yes Display Question Number : Yes  
Single Line Question Option : No Option Orientation : Vertical

Correct : 1 Wrong : 0.25

Find the units digit in  $(2015)^{2016} + (2011)^{2016}$

Options :

1. ✘ 5

2. ✘ 3

3. ✘ 2

4. ✔ 6

Question Number : 5 Question Id : 7368157479 Question Type : MCQ Option Shuffling : Yes Display Question Number : Yes  
Single Line Question Option : No Option Orientation : Vertical

Correct : 1 Wrong : 0.25

$(2015)^{2016} + (2011)^{2016}$  में इकाई का अंक ज्ञात करें।

Options :

1. ✘ 5
2. ✘ 3
3. ✘ 2
4. ✔ 6

Question Number : 6 Question Id : 7368157480 Question Type : MCQ Option Shuffling : Yes Display Question Number : Yes  
Single Line Question Option : No Option Orientation : Vertical

Correct : 1 Wrong : 0.25

गणना करें :  $504 \times 625 + 625$ .

Options :

1. ✘ 315565
2. ✔ 315625
3. ✘ 356125
4. ✘ 315665

Question Number : 6 Question Id : 7368157480 Question Type : MCQ Option Shuffling : Yes Display Question Number : Yes  
Single Line Question Option : No Option Orientation : Vertical

Correct : 1 Wrong : 0.25

Compute:  $504 \times 625 + 625$

Options :

1. ✘ 315565
2. ✔ 315625
3. ✘ 356125
4. ✘ 315665

Question Number : 7 Question Id : 7368157481 Question Type : MCQ Option Shuffling : Yes Display Question Number : Yes  
Single Line Question Option : No Option Orientation : Vertical

Correct : 1 Wrong : 0.25

Prakash studies for  $9\frac{2}{3}$  hours daily. He devotes  $4\frac{1}{6}$  hours of his time for

Science. How much time does he devote for other subjects?

Options :

1. ✔  $5\frac{1}{2}$  hrs
2. ✘  $5\frac{7}{10}$  hrs
3. ✘  $5\frac{3}{10}$  hrs



4. ✘  $5\frac{5}{6}$  hrs

Question Number : 7 Question Id : 7368157481 Question Type : MCQ Option Shuffling : Yes Display Question Number : Yes  
Single Line Question Option : No Option Orientation : Vertical

Correct : 1 Wrong : 0.25

प्रकाश प्रतिदिन  $9\frac{2}{3}$  घंटे तक अध्ययन करता है। वह अपने समय के  $4\frac{1}{6}$  घंटे विज्ञान को देता है। वह अन्य विषयों को कितना समय देता है?

Options :

1. ✔  $5\frac{1}{2}$  घंटे

2. ✘  $5\frac{7}{10}$  घंटे

3. ✘  $5\frac{3}{10}$  घंटे

4. ✘  $5\frac{5}{6}$  घंटे

Question Number : 8 Question Id : 7368157482 Question Type : MCQ Option Shuffling : Yes Display Question Number : Yes  
Single Line Question Option : No Option Orientation : Vertical

Correct : 1 Wrong : 0.25

Shlok and Vikram together bought a water bottle that contained 10 litres of water. Shlok consumed  $\frac{3}{8}$  of the water. Remaining water was consumed by Vikram. Find the amount of water consumed by Shlok in litres?

Options :

1. ✔ 3.75 L

2. ✘ 4.5 L

3. ✘ 5.75 L

4. ✘ 3.25 L

Question Number : 8 Question Id : 7368157482 Question Type : MCQ Option Shuffling : Yes Display Question Number : Yes  
Single Line Question Option : No Option Orientation : Vertical

Correct : 1 Wrong : 0.25

श्लोक और विक्रम ने एक साथ पानी की बोतल खरीदी जिसमें 10 लीटर पानी था। श्लोक ने  $\frac{3}{8}$  पानी पिया बाकी का पानी विक्रम ने पिया। श्लोक ने कितने लीटर पानी पिया?

Options :

1. ✔ 3.75 लीटर

2. ✘ 4.5 लीटर

3. ✘ 5.75 लीटर

4. ✘ 3.25 लीटर

Question Number : 9 Question Id : 7368157483 Question Type : MCQ Option Shuffling : Yes Display Question Number : Yes  
Single Line Question Option : No Option Orientation : Vertical

Correct : 1 Wrong : 0.25

Revathi, Karthika, Devyani and Apoorva finished coloring a picture in  $\frac{6}{7}$  hour,  $\frac{5}{6}$  hour,  $\frac{4}{5}$  hour and  $\frac{3}{4}$  hour respectively. Who among the following finished their coloring last?

Options :

1. ✘ Karthika
2. ✘ Apoorva
3. ✔ Revathi
4. ✘ Devyani

Question Number : 9 Question Id : 7368157483 Question Type : MCQ Option Shuffling : Yes Display Question Number : Yes Single Line Question Option : No Option Orientation : Vertical

Correct : 1 Wrong : 0.25

रेवती, कार्तिका, देवयानी और अपूर्वा ने क्रमशः  $\frac{6}{7}$  घंटे,  $\frac{5}{6}$  घंटे,  $\frac{4}{5}$  घंटे और  $\frac{3}{4}$  घंटे में तस्वीर में रंग भरने का काम पूरा किया। निम्नलिखित में से किसने सबसे आखिरी में रंग भरना समाप्त किया?

Options :

1. ✘ कार्तिका
2. ✘ अपूर्वा
3. ✔ रेवती
4. ✘ देवयानी

Question Number : 10 Question Id : 7368157484 Question Type : MCQ Option Shuffling : Yes Display Question Number : Yes Single Line Question Option : No Option Orientation : Vertical

Correct : 1 Wrong : 0.25

Which among the following is the smallest?

$\frac{4}{9}$ ,  $\frac{5}{7}$ ,  $\frac{6}{11}$ ,  $\frac{7}{12}$

Options :

1. ✘  $\frac{5}{7}$
2. ✔  $\frac{4}{9}$
3. ✘  $\frac{6}{11}$
4. ✘  $\frac{7}{12}$

Question Number : 10 Question Id : 7368157484 Question Type : MCQ Option Shuffling : Yes Display Question Number : Yes Single Line Question Option : No Option Orientation : Vertical

Correct : 1 Wrong : 0.25

निम्नलिखित में से सबसे छोटी संख्या कौन सी है?

$$\frac{4}{9}, \frac{5}{7}, \frac{6}{11}, \frac{7}{12}$$

Options :

1. ✘  $\frac{5}{7}$
2. ✔  $\frac{4}{9}$
3. ✘  $\frac{6}{11}$
4. ✘  $\frac{7}{12}$

Question Number : 11 Question Id : 7368157485 Question Type : MCQ Option Shuffling : Yes Display Question Number : Yes  
Single Line Question Option : No Option Orientation : Vertical

Correct : 1 Wrong : 0.25

The difference of two numbers is 22 and three-fifth of their sum is 18. Find the largest number.

Options :

1. ✘ 35
2. ✘ 45
3. ✘ 28
4. ✔ 26

Question Number : 11 Question Id : 7368157485 Question Type : MCQ Option Shuffling : Yes Display Question Number : Yes  
Single Line Question Option : No Option Orientation : Vertical

Correct : 1 Wrong : 0.25

दो अंकों का अंतर 22 है और उनके योग का  $\frac{3}{5}$  हिस्सा 18 है, सबसे बड़ी संख्या का पता लगाएं।

Options :

1. ✘ 35
2. ✘ 45
3. ✘ 28
4. ✔ 26

Question Number : 12 Question Id : 7368157486 Question Type : MCQ Option Shuffling : Yes Display Question Number : Yes  
Single Line Question Option : No Option Orientation : Vertical

Correct : 1 Wrong : 0.25

The difference between a number and its four-seventh is 6. What is the number?

Options :

1. ✘ 10
2. ✘ 15
3. ✔ 14

4. ✖ 20

Question Number : 12 Question Id : 7368157486 Question Type : MCQ Option Shuffling : Yes Display Question Number : Yes  
Single Line Question Option : No Option Orientation : Vertical

Correct : 1 Wrong : 0.25

एक संख्या और इसके  $4/7$  के बीच का अंतर 6 है, तो यह संख्या कौन सी है?

Options :

1. ✖ 10
2. ✖ 15
3. ✔ 14
4. ✖ 20

Question Number : 13 Question Id : 7368157487 Question Type : MCQ Option Shuffling : Yes Display Question Number : Yes  
Single Line Question Option : No Option Orientation : Vertical

Correct : 1 Wrong : 0.25

Find the value of  $(-3)^5 \times (3)^{-5} \times (3)^5$

Options :

1. ✔ -243
2. ✖ 27
3. ✖ -27
4. ✖ -108

Question Number : 13 Question Id : 7368157487 Question Type : MCQ Option Shuffling : Yes Display Question Number : Yes  
Single Line Question Option : No Option Orientation : Vertical

Correct : 1 Wrong : 0.25

$(-3)^5 \times (3)^{-5} \times (3)^5$  का मान ज्ञात करें :

Options :

1. ✔ -243
2. ✖ 27
3. ✖ -27
4. ✖ -108

Question Number : 14 Question Id : 7368157488 Question Type : MCQ Option Shuffling : Yes Display Question Number : Yes  
Single Line Question Option : No Option Orientation : Vertical

Correct : 1 Wrong : 0.25

यदि  $59X3-4Y98=1065$  है, तो निम्नलिखित में से Y के स्थान पर क्या आना चाहिए?

Options :

1. ✖ 5
2. ✖ 6
3. ✔ 8
4. ✖ 3

Question Number : 14 Question Id : 7368157488 Question Type : MCQ Option Shuffling : Yes Display Question Number : Yes  
Single Line Question Option : No Option Orientation : Vertical

Correct : 1 Wrong : 0.25

If  $59X3-4Y98=1065$ , then which of the following should come in place of Y?

Options :

1. ✘ 5
2. ✘ 6
3. ✔ 8
4. ✘ 3

Question Number : 15 Question Id : 7368157489 Question Type : MCQ Option Shuffling : Yes Display Question Number : Yes  
Single Line Question Option : No Option Orientation : Vertical

Correct : 1 Wrong : 0.25

Solve :  $\frac{(684+359)^2+(684-359)^2}{684 \times 684+359 \times 359}$

Options :

1. ✘ 156489
2. ✔ 2
3. ✘ 534685
4. ✘ 4543555

Question Number : 15 Question Id : 7368157489 Question Type : MCQ Option Shuffling : Yes Display Question Number : Yes  
Single Line Question Option : No Option Orientation : Vertical

Correct : 1 Wrong : 0.25

हल करें :  $\frac{(684+359)^2+(684-359)^2}{684 \times 684+359 \times 359}$

Options :

1. ✘ 156489
2. ✔ 2
3. ✘ 534685
4. ✘ 4543555

Question Number : 16 Question Id : 7368157490 Question Type : MCQ Option Shuffling : Yes Display Question Number : Yes  
Single Line Question Option : No Option Orientation : Vertical

Correct : 1 Wrong : 0.25

The present salary of Gireesh is Rs.16800. This will be increased by 11% in the next year.  
What will be the increased salary of Gireesh?

Options :

1. ✘ Rs.19958
2. ✘ Rs.17850
3. ✔ Rs.18648
4. ✘ Rs.17950

Question Number : 16 Question Id : 7368157490 Question Type : MCQ Option Shuffling : Yes Display Question Number : Yes  
Single Line Question Option : No Option Orientation : Vertical



Correct : 1 Wrong : 0.25

गिरीश का वर्तमान वेतन रु. 16800 है अगले वर्ष 11% की वृद्धि होगी। वृद्धि के बाद गिरीश का बढ़ा हुआ वेतन कितना होगा?

Options :

1. ✘ रु. 19958
2. ✘ रु. 17850
3. ✔ रु. 18648
4. ✘ रु. 17950

Question Number : 17 Question Id : 7368157491 Question Type : MCQ Option Shuffling : Yes Display Question Number : Yes Single Line Question Option : No Option Orientation : Vertical

Correct : 1 Wrong : 0.25

In an examination, 92% of the candidates passed and 1600 failed. How many candidates appeared for the examination?

Options :

1. ✔ 20000
2. ✘ 14000
3. ✘ 12000
4. ✘ 12500

Question Number : 17 Question Id : 7368157491 Question Type : MCQ Option Shuffling : Yes Display Question Number : Yes Single Line Question Option : No Option Orientation : Vertical

Correct : 1 Wrong : 0.25

एक परीक्षा में, 92% परीक्षार्थी उत्तीर्ण और 1600 अनुत्तीर्ण हुए। परीक्षा में कितने परीक्षार्थी उपस्थित थे?

Options :

1. ✔ 20000
2. ✘ 14000
3. ✘ 12000
4. ✘ 12500

Question Number : 18 Question Id : 7368157492 Question Type : MCQ Option Shuffling : Yes Display Question Number : Yes Single Line Question Option : No Option Orientation : Vertical

Correct : 1 Wrong : 0.25

What percent of  $1\frac{2}{3}$  hours is 360 seconds?

Options :

1. ✘ 5.5%
2. ✘ 5%
3. ✘ 6.55%
4. ✔ 6%



Question Number : 18 Question Id : 7368157492 Question Type : MCQ Option Shuffling : Yes Display Question Number : Yes  
Single Line Question Option : No Option Orientation : Vertical

Correct : 1 Wrong : 0.25

$1\frac{2}{3}$  घंटे का कितना प्रतिशत 360 सेकंड होता है?

Options :

1. ✘ 5.5%
2. ✘ 5%
3. ✘ 6.55%
4. ✔ 6%

Question Number : 19 Question Id : 7368157493 Question Type : MCQ Option Shuffling : Yes Display Question Number : Yes  
Single Line Question Option : No Option Orientation : Vertical

Correct : 1 Wrong : 0.25

55 पैसे : रु. 2 20 पैसे को इसके सरलतम रूप में दर्शाएँ।

Options :

1. ✘ 1:8
2. ✔ 1:4
3. ✘ 4:5
4. ✘ 5:4

Question Number : 19 Question Id : 7368157493 Question Type : MCQ Option Shuffling : Yes Display Question Number : Yes  
Single Line Question Option : No Option Orientation : Vertical

Correct : 1 Wrong : 0.25

Express 55 paise:2 rupee 20paise in its simplest form.

Options :

1. ✘ 1:8
2. ✔ 1:4
3. ✘ 4:5
4. ✘ 5:4

Question Number : 20 Question Id : 7368157494 Question Type : MCQ Option Shuffling : Yes Display Question Number : Yes  
Single Line Question Option : No Option Orientation : Vertical

Correct : 1 Wrong : 0.25

Two numbers are in ratio 5:6. If 4 is subtracted from each, the ratio becomes 4:5. Find the smallest number.

Options :

1. ✘ 26
2. ✔ 20
3. ✘ 24
4. ✘ 15

Question Number : 20 Question Id : 7368157494 Question Type : MCQ Option Shuffling : Yes Display Question Number : Yes  
Single Line Question Option : No Option Orientation : Vertical

Correct : 1 Wrong : 0.25

दो अंक 5:6 के अनुपात में हैं यदि प्रत्येक में से 4 घटाया जाए, तो अनुपात 4:5 हो जाता

है। सबसे छोटी संख्या ज्ञात करें।

Options :

1. ✘ 26
2. ✔ 20
3. ✘ 24
4. ✘ 15

Question Number : 21 Question Id : 7368157495 Question Type : MCQ Option Shuffling : Yes Display Question Number : Yes  
Single Line Question Option : No Option Orientation : Vertical

Correct : 1 Wrong : 0.25

A bag contains 50paise, 25paise and 10paise coins in the ratio 4:6:3 amounting to Rs.76/-.

Find the number of 25paise coins.

Options :

1. ✘ 115
2. ✘ 110
3. ✔ 120
4. ✘ 150

Question Number : 21 Question Id : 7368157495 Question Type : MCQ Option Shuffling : Yes Display Question Number : Yes  
Single Line Question Option : No Option Orientation : Vertical

Correct : 1 Wrong : 0.25

एक थैले में 50, 25 और 10 पैसे के सिक्के क्रमशः 4:6:3 के अनुपात में हैं जिनका कुल मान रु. 76/- है, तो 25 पैसे के सिक्कों की संख्या ज्ञात करें।

Options :

1. ✘ 115
2. ✘ 110
3. ✔ 120
4. ✘ 150

Question Number : 22 Question Id : 7368157496 Question Type : MCQ Option Shuffling : Yes Display Question Number : Yes  
Single Line Question Option : No Option Orientation : Vertical

Correct : 1 Wrong : 0.25

Find the average of 101,284,250,463,102.

Options :

1. ✘ 450
2. ✘ 1225
3. ✘ 1220
4. ✔ 240

Question Number : 22 Question Id : 7368157496 Question Type : MCQ Option Shuffling : Yes Display Question Number : Yes  
Single Line Question Option : No Option Orientation : Vertical

Correct : 1 Wrong : 0.25

101, 284, 250, 463, 102 का औसत ज्ञात करें।

Options :

1. ✘ 450
2. ✘ 1225
3. ✘ 1220
4. ✔ 240

Question Number : 23 Question Id : 7368157497 Question Type : MCQ Option Shuffling : Yes Display Question Number : Yes Single Line Question Option : No Option Orientation : Vertical

Correct : 1 Wrong : 0.25

The average of 6 quantities is 7. The average of four of them is 7. What is the average of remaining quantities?

Options :

1. ✔ 7
2. ✘ 15
3. ✘ 42
4. ✘ 30

Question Number : 23 Question Id : 7368157497 Question Type : MCQ Option Shuffling : Yes Display Question Number : Yes Single Line Question Option : No Option Orientation : Vertical

Correct : 1 Wrong : 0.25

6 संख्याओं का औसत 7 है। इनमें से 4 संख्याओं का औसत 7 है | शेष संख्याओं का औसत कितना होगा?

Options :

1. ✔ 7
2. ✘ 15
3. ✘ 42
4. ✘ 30

Question Number : 24 Question Id : 7368157498 Question Type : MCQ Option Shuffling : Yes Display Question Number : Yes Single Line Question Option : No Option Orientation : Vertical

Correct : 1 Wrong : 0.25

The average monthly income of L and M is Rs.26000. The average monthly income of L and N is Rs.25000 and the average monthly income of M and N is Rs.24000. The monthly income of L is

Options :

1. ✘ Rs.25000
2. ✘ Rs.25500
3. ✔ Rs.27000
4. ✘ Rs.28000

Question Number : 24 Question Id : 7368157498 Question Type : MCQ Option Shuffling : Yes Display Question Number : Yes  
Single Line Question Option : No Option Orientation : Vertical

Correct : 1 Wrong : 0.25

L और M की औसत मासिक आय रु. 26000 है, L और N की औसत मासिक आय रु. 25000 है और M और N की औसत मासिक आय रु. 24000 है, तो L की मासिक आय कितनी होगी?

Options :

1. ✘ रु. 25000
2. ✘ रु. 25500
3. ✔ रु. 27000
4. ✘ रु. 28000

Question Number : 25 Question Id : 7368157499 Question Type : MCQ Option Shuffling : Yes Display Question Number : Yes  
Single Line Question Option : No Option Orientation : Vertical

Correct : 1 Wrong : 0.25

Find the amount at simple interest on Rs.3200 for 4 years 6 months at 10% per annum.

Options :

1. ✘ Rs.3500
2. ✔ Rs.4640
3. ✘ Rs.3800
4. ✘ Rs.3900

Question Number : 25 Question Id : 7368157499 Question Type : MCQ Option Shuffling : Yes Display Question Number : Yes  
Single Line Question Option : No Option Orientation : Vertical

Correct : 1 Wrong : 0.25

4 साल 6 महीने के लिए प्रति वर्ष 10% की दर से रु. 3200 पर साधारण ब्याज की राशि ज्ञात करें।

Options :

1. ✘ रु. 3500
2. ✔ रु. 4640
3. ✘ रु. 3800
4. ✘ रु. 3900

Question Number : 26 Question Id : 7368157500 Question Type : MCQ Option Shuffling : Yes Display Question Number : Yes  
Single Line Question Option : No Option Orientation : Vertical

Correct : 1 Wrong : 0.25

Simple interest on a certain sum is  $\frac{49}{4}$  of the sum. Find the time, if both time and rate percent are numerically equal.

Options :

1. ✘  $15\frac{1}{2}$  years
2. ✘  $12\frac{1}{15}$  years



3. ✘ 25years

4. ✔ 35years

Question Number : 26 Question Id : 7368157500 Question Type : MCQ Option Shuffling : Yes Display Question Number : Yes  
Single Line Question Option : No Option Orientation : Vertical

Correct : 1 Wrong : 0.25

एक निश्चित राशि साधारण ब्याज की राशी का  $\frac{49}{4}$  है। यदि संख्या के अनुसार समय और प्रतिशत दर एक समान हैं, तो समय का पता लगाएं।

Options :

1. ✘  $15\frac{1}{2}$  वर्ष

2. ✘  $12\frac{1}{15}$  वर्ष

3. ✘ 25 वर्ष

4. ✔ 35 वर्ष

Question Number : 27 Question Id : 7368157501 Question Type : MCQ Option Shuffling : Yes Display Question Number : Yes  
Single Line Question Option : No Option Orientation : Vertical

Correct : 1 Wrong : 0.25

Simple interest for a sum of Rs.6100 for 2 years is Rs.80 more than the simple interest for Rs.5600 for the same duration. Find the rate of interest.

Options :

1. ✔ 8%

2. ✘ 5%

3. ✘ 4%

4. ✘ 3%

Question Number : 27 Question Id : 7368157501 Question Type : MCQ Option Shuffling : Yes Display Question Number : Yes  
Single Line Question Option : No Option Orientation : Vertical

Correct : 1 Wrong : 0.25

2 वर्ष के लिए रु. 6100 की राशि पर साधारण ब्याज और इसी अवधि के लिए रु. 5600 पर साधारण ब्याज की तुलना में सिर्फ रु. 80 से ज्यादा है, तो ब्याज की दर ज्ञात करें।

Options :

1. ✔ 8%

2. ✘ 5%

3. ✘ 4%

4. ✘ 3%

Question Number : 28 Question Id : 7368157502 Question Type : MCQ Option Shuffling : Yes Display Question Number : Yes  
Single Line Question Option : No Option Orientation : Vertical

Correct : 1 Wrong : 0.25

A watch costing Rs.1000 has been sold for Rs.1650. The percentage of profit was?

Options :

1. ✘ 45%
2. ✘ 55%
3. ✔ 65%
4. ✘ 60%

Question Number : 28 Question Id : 7368157502 Question Type : MCQ Option Shuffling : Yes Display Question Number : Yes  
Single Line Question Option : No Option Orientation : Vertical

Correct : 1 Wrong : 0.25

रु. 1000 की लागत वाली घड़ी को रु. 1650 में बेचा। लाभ कितना प्रतिशत था?

Options :

1. ✘ 45%
2. ✘ 55%
3. ✔ 65%
4. ✘ 60%

Question Number : 29 Question Id : 7368157503 Question Type : MCQ Option Shuffling : Yes Display Question Number : Yes  
Single Line Question Option : No Option Orientation : Vertical

Correct : 1 Wrong : 0.25

Sunanda sells a washing machine for Rs.16000. She loses 20% in the bargain. What was the price at which she bought it?

Options :

1. ✔ Rs.20000
2. ✘ Rs.19000
3. ✘ Rs.18500
4. ✘ Rs.19500

Question Number : 29 Question Id : 7368157503 Question Type : MCQ Option Shuffling : Yes Display Question Number : Yes  
Single Line Question Option : No Option Orientation : Vertical

Correct : 1 Wrong : 0.25

सुनंदा ने रु. 16000 में एक वाशिंग मशीन खरीदी। उसे सौदेबाज़ी में 20% का नुकसान हुआ। उसने वह मशीन किस कीमत पर खरीदी थी?

Options :

1. ✔ रु. 20000
2. ✘ रु. 19000
3. ✘ रु. 18500
4. ✘ रु. 19500

Question Number : 30 Question Id : 7368157504 Question Type : MCQ Option Shuffling : Yes Display Question Number : Yes  
Single Line Question Option : No Option Orientation : Vertical

Correct : 1 Wrong : 0.25



Sandhya bought an article for Rs.2652. Due to some defects in it, she had to pay Rs.348 to the mechanic for its repair. Then, she sold it for Rs.2500. Find her loss percent.

Options :

1. ✘ 15.5%
2. ✘ 12.46%
3. ✔ 16.66%
4. ✘ 12.5%

Question Number : 30 Question Id : 7368157504 Question Type : MCQ Option Shuffling : Yes Display Question Number : Yes Single Line Question Option : No Option Orientation : Vertical

Correct : 1 Wrong : 0.25

संध्या ने रु. 2652 में एक वस्तु खरीदी। उसमें किसी दोष के कारण, उसने मरम्मत के लिए एक मैकेनिक को रु. 348 दिए, फिर उसने उसे रु. 2500 में बेच दिया; उसे कितने प्रतिशत हानि हुई?

Options :

1. ✘ 15.5%
2. ✘ 12.46%
3. ✔ 16.66%
4. ✘ 12.5%

Question Number : 31 Question Id : 7368157505 Question Type : MCQ Option Shuffling : Yes Display Question Number : Yes Single Line Question Option : No Option Orientation : Vertical

Correct : 1 Wrong : 0.25

An item is sold at Rs.492 by allowing a discount of 18% on its marked price. The marked price of the item is

Options :

1. ✔ Rs.600
2. ✘ Rs.590
3. ✘ Rs.700
4. ✘ Rs.650

Question Number : 31 Question Id : 7368157505 Question Type : MCQ Option Shuffling : Yes Display Question Number : Yes Single Line Question Option : No Option Orientation : Vertical

Correct : 1 Wrong : 0.25

एक वस्तु को उसकी अंकित कीमत पर 18% की छूट देकर रु. 492 पर बेचा गया। उस वस्तु पर अंकित कीमत कितनी थी?

Options :

1. ✔ रु. 600
2. ✘ रु. 590
3. ✘ रु. 700
4. ✘ रु. 650

Question Number : 32 Question Id : 7368157506 Question Type : MCQ Option Shuffling : Yes Display Question Number : Yes  
Single Line Question Option : No Option Orientation : Vertical

Correct : 1 Wrong : 0.25

What is a single discount equivalent to a discount series of 13% and 10%?

Options :

1. ✘ 24.5%
2. ✔ 21.7%
3. ✘ 25%
4. ✘ 26%

Question Number : 32 Question Id : 7368157506 Question Type : MCQ Option Shuffling : Yes Display Question Number : Yes  
Single Line Question Option : No Option Orientation : Vertical

Correct : 1 Wrong : 0.25

13% और 10% की छूट श्रृंखला के बराबर एकल छूट कितनी है?

Options :

1. ✘ 24.5%
2. ✔ 21.7%
3. ✘ 25%
4. ✘ 26%

Question Number : 33 Question Id : 7368157507 Question Type : MCQ Option Shuffling : Yes Display Question Number : Yes  
Single Line Question Option : No Option Orientation : Vertical

Correct : 1 Wrong : 0.25

The marked price of a bicycle is Rs.2052. A shopkeeper allows a discount of 14% and get a profit of 14%. Find the cost price of the bicycle.

Options :

1. ✔ Rs.1548
2. ✘ Rs.1000
3. ✘ Rs.1900
4. ✘ Rs.1950

Question Number : 33 Question Id : 7368157507 Question Type : MCQ Option Shuffling : Yes Display Question Number : Yes  
Single Line Question Option : No Option Orientation : Vertical

Correct : 1 Wrong : 0.25

एक साइकिल पर अंकित कीमत रु. 2052 है। इसे दुकानदार द्वारा 14% की छूट देकर बेचने पर भी 14% का लाभ होता है। साइकिल की लागत मूल्य ज्ञात करें।

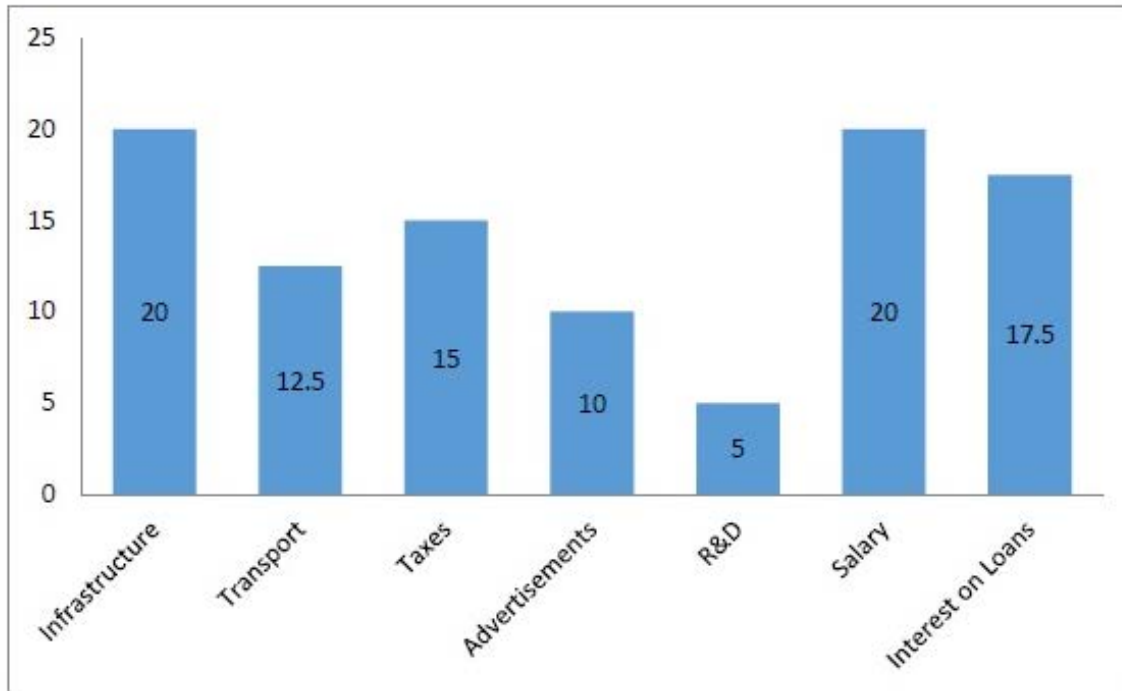
Options :

1. ✔ रु. 1548
2. ✘ रु. 1000
3. ✘ रु. 1900
4. ✘ रु. 1950

Correct : 1 Wrong : 0.25

Study the following table carefully and answer the question that follows.

The below graph shows the percentage distribution of total expenditure of a company.



If the total expenditure is Rs.25,00,000, then what amount is spent on Taxes?

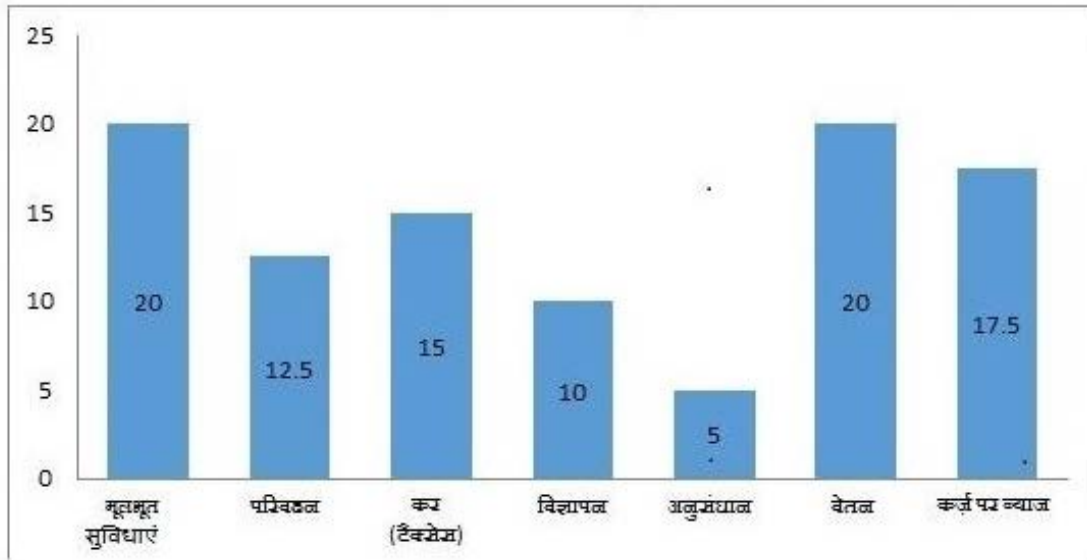
Options :

- ✘ Rs.3,70,000
- ✔ Rs.3,75,000
- ✘ Rs.3,74,000
- ✘ Rs.3,73,000

Correct : 1 Wrong : 0.25

नीचे दिये गए ग्राफ का ध्यान से अध्ययन कीजिये और निम्नलिखित प्रश्न का उत्तर दीजिये :

नीचे दिया गया ग्राफ कंपनी के कुल व्यय का प्रतिशत वितरण दर्शाता है



यदि कुल व्यय रु. 25,00,000 है, तो कर पर कितनी राशि खर्च की गई है?

Options :

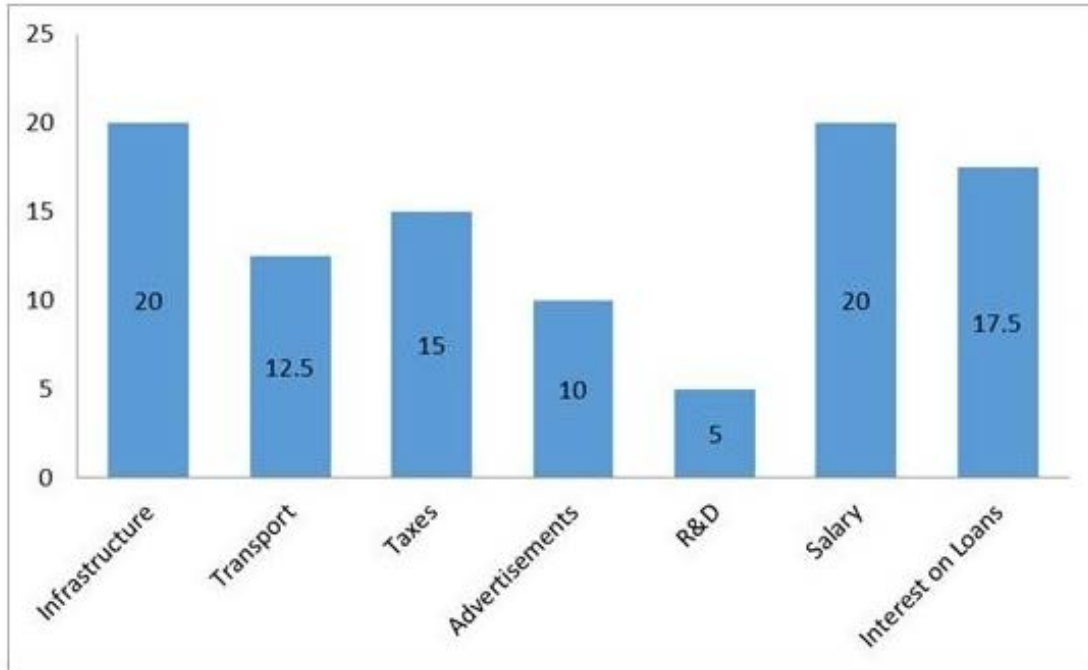
1. ✘ रु. 3,70,000
2. ✔ रु. 3,75,000
3. ✘ रु. 3,74,000
4. ✘ रु. 3,73,000

Question Number : 35 Question Id : 7368157509 Question Type : MCQ Option Shuffling : Yes Display Question Number : Yes Single Line Question Option : No Option Orientation : Vertical

Correct : 1 Wrong : 0.25

Study the following table carefully and answer the question that follows.

The below graph shows the percentage distribution of total expenditure of a company.



If the total expenditure is Rs.15,00,000, then what amount is spent on Transport?

Options :

1. ✘ Rs.1,67,500
2. ✘ Rs.1,97,500
3. ✘ Rs.1,77,500
4. ✔ Rs.1,87,500

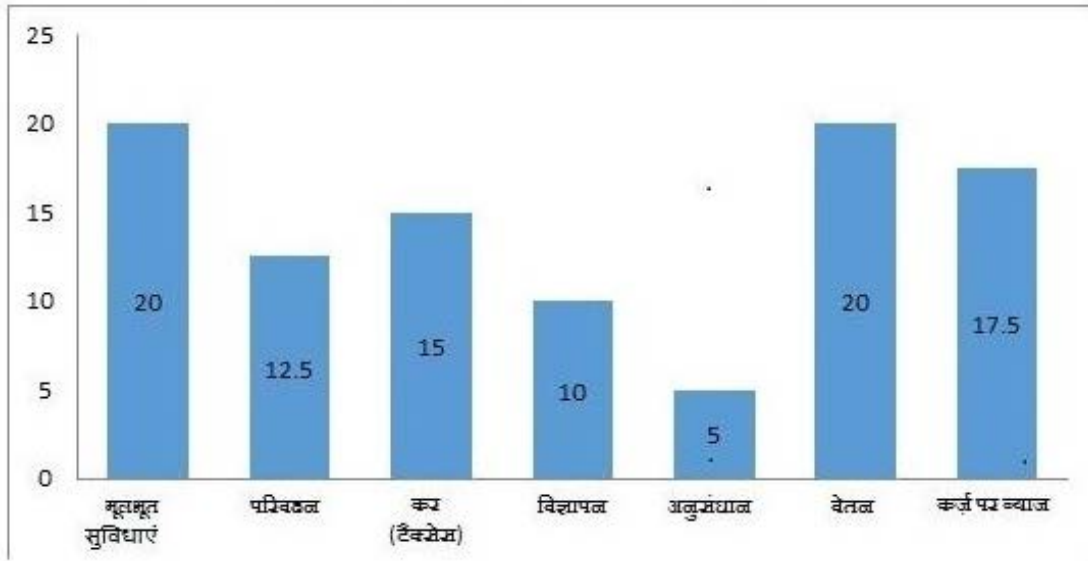
Question Number : 35 Question Id : 7368157509 Question Type : MCQ Option Shuffling : Yes Display Question Number : Yes  
Single Line Question Option : No Option Orientation : Vertical

Correct : 1 Wrong : 0.25



नीचे दिये गए ग्राफ का ध्यान से अध्ययन कीजिये और निम्नलिखित प्रश्न का उत्तर दीजिये :

नीचे दिया गया ग्राफ कंपनी के कुल व्यय का प्रतिशित वितरण दर्शाता है



यदि कुल व्यय रु.15,00,000 है, तो परिवहन पर कितनी राशि खर्च की गई है?

Options :

1. ✘ रु. 1,67,500
2. ✘ रु. 1,97,500
3. ✘ रु. 1,77,500
4. ✔ रु. 1,87,500

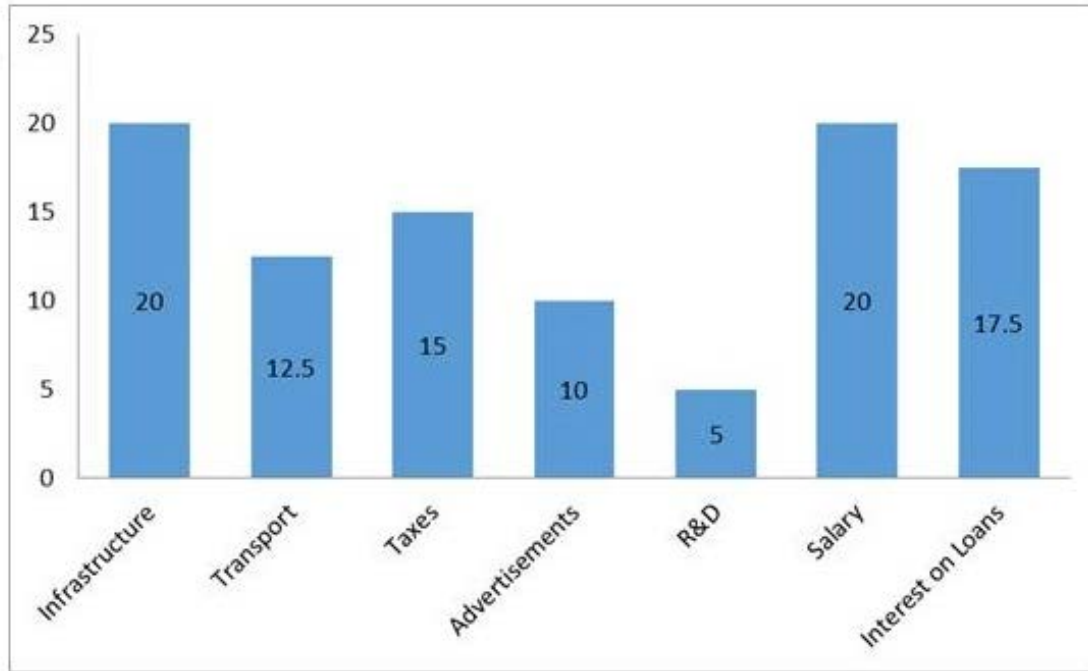
Question Number : 36 Question Id : 7368157510 Question Type : MCQ Option Shuffling : Yes Display Question Number : Yes Single Line Question Option : No Option Orientation : Vertical

Correct : 1 Wrong : 0.25



**Join Telegram More Update Note: All previous year Exam paper provides**  
Study the following table carefully and answer the question that follows.

The below graph shows the percentage distribution of total expenditure of a company.



Which of the following constitute half of the company's expenditure?

Options :

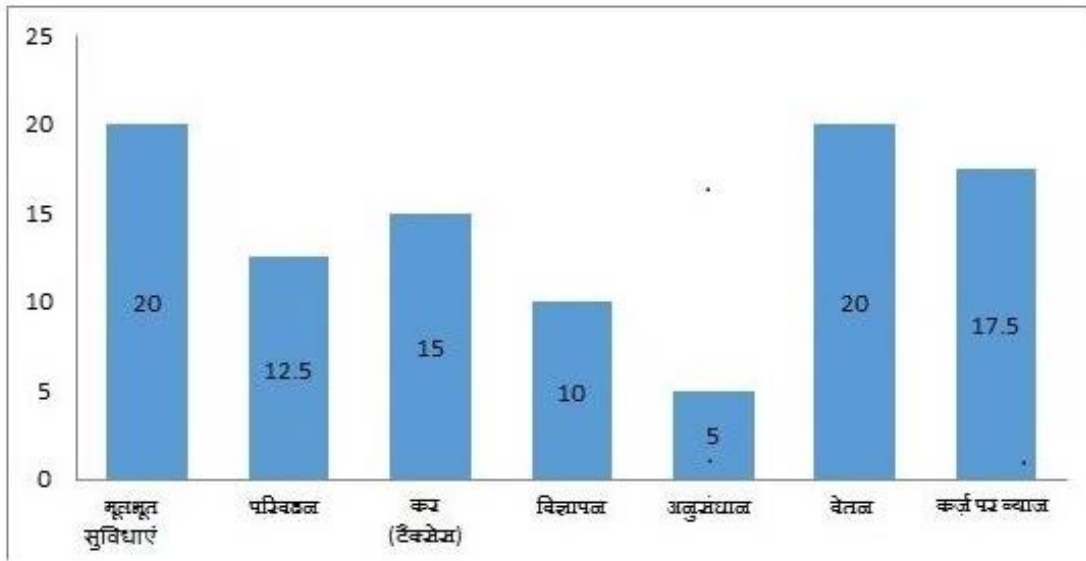
- ✘ Taxes+Salary+Interests on Loans
- ✔ Salary+Infrastructure+Advertisements
- ✘ R&D+Transport+Salary
- ✘ Transport+Interests on Loans+Advertisements

Question Number : 36 Question Id : 7368157510 Question Type : MCQ Option Shuffling : Yes Display Question Number : Yes  
Single Line Question Option : No Option Orientation : Vertical

Correct : 1 Wrong : 0.25

नीचे दिये गए ग्राफ का ध्यान से अध्ययन कीजिये और निम्नलिखित प्रश्न का उत्तर दीजिये :

नीचे दिया गया ग्राफ कंपनी के कुल व्यय का प्रतिशित वितरण दर्शाता है



कंपनी के कुल व्यय का आधा खर्च निम्नलिखित में से किस पर किया जाता है?

Options :

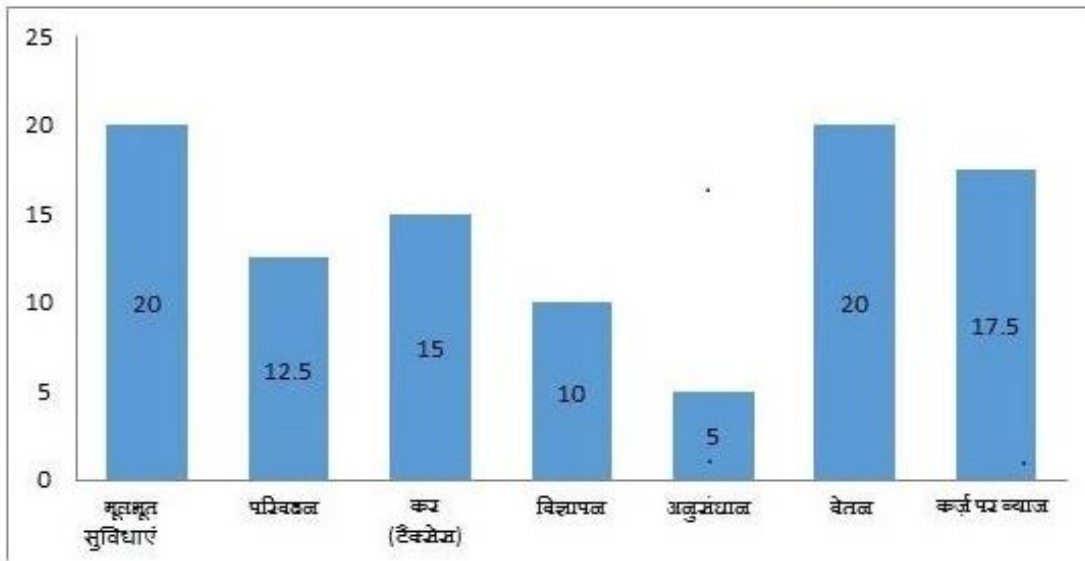
- ✘ कर+वेतन+कर्ज पर ब्याज
- ✔ वेतन+मूलभूत सुविधाएं+विज्ञापन
- ✘ अनुसंधान+परिवहन+वेतन
- ✘ परिवहन+कर्ज पर ब्याज+विज्ञापन

Question Number : 37 Question Id : 7368157511 Question Type : MCQ Option Shuffling : Yes Display Question Number : Yes Single Line Question Option : No Option Orientation : Vertical

Correct : 1 Wrong : 0.25

नीचे दिये गए ग्राफ का ध्यान से अध्ययन कीजिये और निम्नलिखित प्रश्न का उत्तर दीजिये :

नीचे दिया गया ग्राफ कंपनी के कुल व्यय का प्रतिशित वितरण दर्शाता है



यदि कुल व्यय रु.18,50,000 है, तो कर्ज पर ब्याज में कितनी राशि खर्च की गई?

Options :

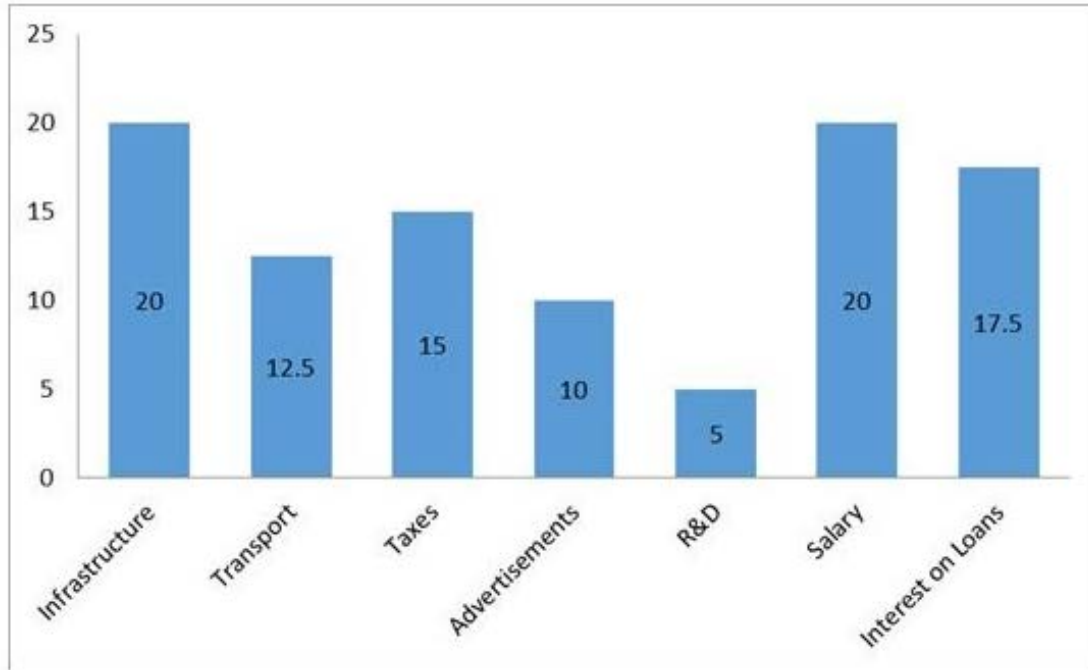
- ✘ रु. 3,24,750
- ✔ रु. 3,23,750
- ✘ रु. 3,22,750
- ✘ रु. 3,25,750

Question Number : 37 Question Id : 7368157511 Question Type : MCQ Option Shuffling : Yes Display Question Number : Yes Single Line Question Option : No Option Orientation : Vertical

Correct : 1 Wrong : 0.25

Study the following table carefully and answer the question that follows.

The below graph shows the percentage distribution of total expenditure of a company.



If the total expenditure is Rs.18,50,000, then what amount is spent on Interests on Loans?

Options :

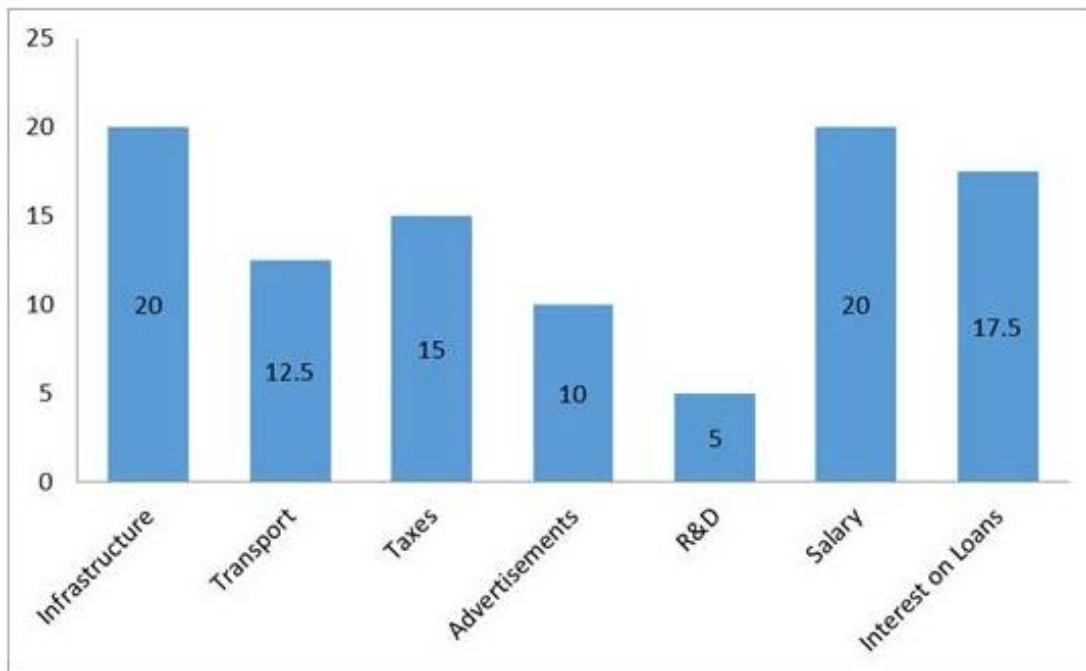
1. ✘ Rs.3,24,750
2. ✔ Rs.3,23,750
3. ✘ Rs.3,22,750
4. ✘ Rs.3,25,750

Question Number : 38 Question Id : 7368157512 Question Type : MCQ Option Shuffling : Yes Display Question Number : Yes Single Line Question Option : No Option Orientation : Vertical

Correct : 1 Wrong : 0.25

Study the following table carefully and answer the question that follows.

The below graph shows the percentage distribution of total expenditure of a company.



If the total expenditure is Rs.20,50,000, then what amount is spent on Infrastructure?

Options :

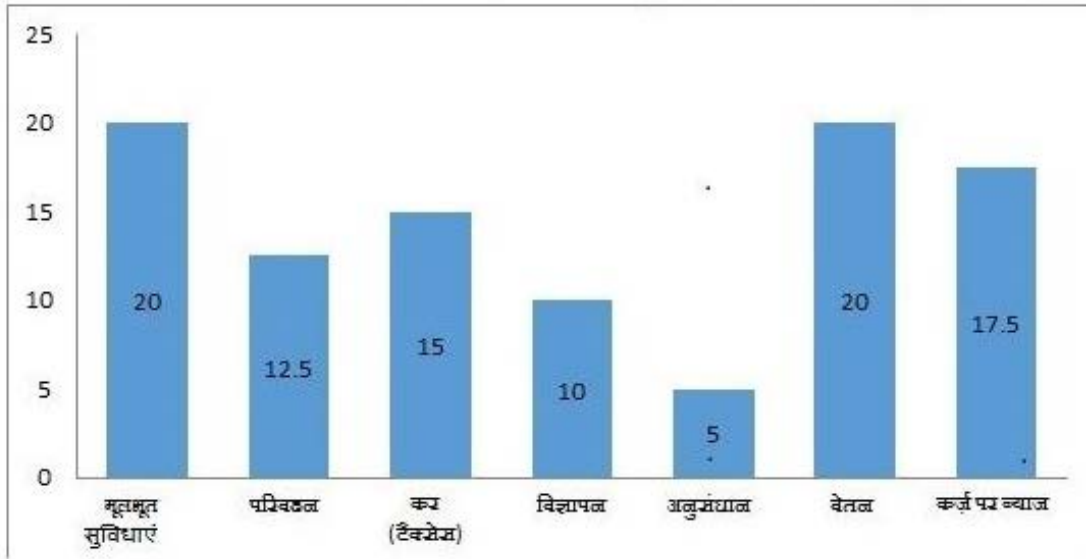
1. ✘ Rs.4,20,000
2. ✘ Rs.4,15,000
3. ✔ Rs.4,10,000
4. ✘ Rs.4,05,000

Question Number : 38 Question Id : 7368157512 Question Type : MCQ Option Shuffling : Yes Display Question Number : Yes  
Single Line Question Option : No Option Orientation : Vertical

Correct : 1 Wrong : 0.25

नीचे दिये गए ग्राफ का ध्यान से अध्ययन कीजिये और निम्नलिखित प्रश्न का उत्तर दीजिये :

नीचे दिया गया ग्राफ कंपनी के कुल व्यय का प्रतिशित वितरण दर्शाता है



यदि कुल व्यय रु. 20,50,000 है, तो मूलभूत सुविधाओं पर कितनी राशि खर्च की गई?

Options :

- ✘ रु. 4,20,000
- ✘ रु. 4,15,000
- ✔ रु. 4,10,000
- ✘ रु. 4,05,000

Question Number : 39 Question Id : 7368157513 Question Type : MCQ Option Shuffling : Yes Display Question Number : Yes Single Line Question Option : No Option Orientation : Vertical

Correct : 1 Wrong : 0.25

The area of a square field is  $\frac{13}{4}$  hectare. Find the length of its diagonal in metres.

Options :

- ✘ 50mts
- ✘  $50\sqrt{2}$  mts
- ✘  $40\sqrt{2}$  mts
- ✔  $50\sqrt{26}$  mts

Question Number : 39 Question Id : 7368157513 Question Type : MCQ Option Shuffling : Yes Display Question Number : Yes Single Line Question Option : No Option Orientation : Vertical

Correct : 1 Wrong : 0.25

एक वर्गाकार खेत का क्षेत्रफल  $\frac{13}{4}$  हेक्टेयर है, तो इसके विकर्ण की लंबाई कितने मीटर है?

Options :

- ✘ 50 मीटर



2. ✘  $50\sqrt{2}$  मीटर
3. ✘  $40\sqrt{2}$  मीटर
4. ✔  $50\sqrt{26}$  मीटर

Question Number : 40 Question Id : 7368157514 Question Type : MCQ Option Shuffling : Yes Display Question Number : Yes  
Single Line Question Option : No Option Orientation : Vertical

Correct : 1 Wrong : 0.25

The area of an equilateral triangle is  $63\sqrt{3}cm^2$ . Find the length of its side.

Options :

1. ✘  $4cm$
2. ✔  $6\sqrt{7}cm$
3. ✘  $4.45cm$
4. ✘  $6\sqrt{3}cm$

Question Number : 40 Question Id : 7368157514 Question Type : MCQ Option Shuffling : Yes Display Question Number : Yes  
Single Line Question Option : No Option Orientation : Vertical

Correct : 1 Wrong : 0.25

एक समभुज त्रिकोण का क्षेत्रफल  $63\sqrt{3}$  घन से.मी. है, तो इसकी भुजा की लंबाई ज्ञात करें।

Options :

1. ✘ 4 से.मी.
2. ✔  $6\sqrt{7}$  से.मी.
3. ✘ 4.45 से.मी.
4. ✘  $6\sqrt{3}$  से.मी.

Question Number : 41 Question Id : 7368157515 Question Type : MCQ Option Shuffling : Yes Display Question Number : Yes  
Single Line Question Option : No Option Orientation : Vertical

Correct : 1 Wrong : 0.25

The diameter of the wheel of a car is 84cm. How many revolutions will it make to travel 7.92km?

Options :

1. ✘ 4600
2. ✘ 6000
3. ✔ 3000
4. ✘ 4500

Question Number : 41 Question Id : 7368157515 Question Type : MCQ Option Shuffling : Yes Display Question Number : Yes  
Single Line Question Option : No Option Orientation : Vertical

Correct : 1 Wrong : 0.25

एक कार के पहिया का व्यास 84 से.मी. है। कितने चक्र में यह 7.92 किलो मीटर की दूरी तय करेगा?

Options :

1. ✘ 4600
2. ✘ 6000
3. ✔ 3000
4. ✘ 4500

Question Number : 42 Question Id : 7368157516 Question Type : MCQ Option Shuffling : Yes Display Question Number : Yes Single Line Question Option : No Option Orientation : Vertical

Correct : 1 Wrong : 0.25

A car travels 750km in 12hours and another 950km in 8hours. Find the average speed of the car.

Options :

1. ✔ 85km/h
2. ✘ 75km/h
3. ✘ 78km/h
4. ✘ 48km/h

Question Number : 42 Question Id : 7368157516 Question Type : MCQ Option Shuffling : Yes Display Question Number : Yes Single Line Question Option : No Option Orientation : Vertical

Correct : 1 Wrong : 0.25

एक कार 12 घंटे में 750 किलो मीटर और 8 घंटे में अन्य 950 किलो मीटर की दूरी तय करती है। कार की औसत गति का ज्ञात करें।

Options :

1. ✔ 85 कि.मी./घंटा
2. ✘ 75 कि.मी./घंटा
3. ✘ 78 कि.मी./घंटा
4. ✘ 48 कि.मी./घंटा

Question Number : 43 Question Id : 7368157517 Question Type : MCQ Option Shuffling : Yes Display Question Number : Yes Single Line Question Option : No Option Orientation : Vertical

Correct : 1 Wrong : 0.25

A vehicle travels at 30km/h. How many meters will it travel in 30minutes?

Options :

1. ✘ 17550mts
2. ✘ 15700mts
3. ✔ 15000mts
4. ✘ 17570mts

Question Number : 43 Question Id : 7368157517 Question Type : MCQ Option Shuffling : Yes Display Question Number : Yes Single Line Question Option : No Option Orientation : Vertical

Correct : 1 Wrong : 0.25

एक वाहन 30 कि.मी./घंटा की गति से दौड़ता है। यह 30 मिनट में कितने मीटर की दूरी तय करेगा?

Options :

1. ✘ 17550 मीटर
2. ✘ 15700 मीटर
3. ✔ 15000 मीटर
4. ✘ 17570 मीटर

Question Number : 44 Question Id : 7368157518 Question Type : MCQ Option Shuffling : Yes Display Question Number : Yes Single Line Question Option : No Option Orientation : Vertical

Correct : 1 Wrong : 0.25

Ashok can cover a certain distance in 3hr 45min by covering two-third of the distance at 4kmph and the rest at 5kmph. Find the total distance.

Options :

1. ✘ 16.41km
2. ✔ 16.07km
3. ✘ 16.52km
4. ✘ 16.6km

Question Number : 44 Question Id : 7368157518 Question Type : MCQ Option Shuffling : Yes Display Question Number : Yes Single Line Question Option : No Option Orientation : Vertical

Correct : 1 Wrong : 0.25

अशोक एक निश्चित दूरी 3 घंटे 45 मिनट में पूरी कर सकता है। जिसमें से दो-तिहाई 4 कि.मी./घंटा की गति से और शेष 5 कि.मी./घंटा की गति से तय करता है। कुल दूरी ज्ञात करें।

Options :

1. ✘ 16.41 किलो मीटर
2. ✔ 16.07 किलो मीटर
3. ✘ 16.52 किलो मीटर
4. ✘ 16.6 किलो मीटर

Question Number : 45 Question Id : 7368157519 Question Type : MCQ Option Shuffling : Yes Display Question Number : Yes Single Line Question Option : No Option Orientation : Vertical

Correct : 1 Wrong : 0.25

Uma takes 81minutes to reach school from home. Sneha takes 45minutes to cover the same distance. Find the ratio of time taken by Uma to the time taken by Sneha.

Options :

1. ✘ 3:2
2. ✘ 4:9
3. ✘ 2:5

4. ✓ 9:5

Question Number : 45 Question Id : 7368157519 Question Type : MCQ Option Shuffling : Yes Display Question Number : Yes  
Single Line Question Option : No Option Orientation : Vertical

Correct : 1 Wrong : 0.25

ऊमा को घर से स्कूल पहुंचने में 81 मिनट लगते हैं। स्नेहा इतनी ही दूरी को पूरा करने के लिये 45 मिनट लेती है। ऊमा और स्नेहा द्वारा लिये गए समय का अनुपात ज्ञात करें।

Options :

1. ✗ 3:2
2. ✗ 4:9
3. ✗ 2:5
4. ✓ 9:5

Question Number : 46 Question Id : 7368157520 Question Type : MCQ Option Shuffling : Yes Display Question Number : Yes  
Single Line Question Option : No Option Orientation : Vertical

Correct : 1 Wrong : 0.25

Priyanka works in office for 8hours and Jaya works for 6hours 20minutes in her office.  
Find the ratio of their working hours.

Options :

1. ✗ 14:15
2. ✗ 15:14
3. ✓ 24:19
4. ✗ 16:17

Question Number : 46 Question Id : 7368157520 Question Type : MCQ Option Shuffling : Yes Display Question Number : Yes  
Single Line Question Option : No Option Orientation : Vertical

Correct : 1 Wrong : 0.25

प्रियंका एक कार्यालय में 8 घंटे और जया 6 घंटे 20 मिनट काम करती है। उनके काम के घंटे का अनुपात ज्ञात करें।

Options :

1. ✗ 14:15
2. ✗ 15:14
3. ✓ 24:19
4. ✗ 16:17

Question Number : 47 Question Id : 7368157521 Question Type : MCQ Option Shuffling : Yes Display Question Number : Yes  
Single Line Question Option : No Option Orientation : Vertical

Correct : 1 Wrong : 0.25

The ratio of times taken by A and B to finish a piece of work is 1:6. If A completes the work in 13days, then find the time taken by B to complete the work.

Options :



1. ✘ 52days
2. ✔ 78days
3. ✘ 20days
4. ✘ 48days

Question Number : 47 Question Id : 7368157521 Question Type : MCQ Option Shuffling : Yes Display Question Number : Yes  
Single Line Question Option : No Option Orientation : Vertical

Correct : 1 Wrong : 0.25

A और B द्वारा काम पूरा करने के लिए, लिये गए समय का अनुपात 1:6 है, यदि A उस काम को 13 दिन में पूरा करता है, तो उस काम को पूरा करने के लिए B को कितना समय लगेगा?

Options :

1. ✘ 52 दिन
2. ✔ 78 दिन
3. ✘ 20 दिन
4. ✘ 48 दिन

Question Number : 48 Question Id : 7368157522 Question Type : MCQ Option Shuffling : Yes Display Question Number : Yes  
Single Line Question Option : No Option Orientation : Vertical

Correct : 1 Wrong : 0.25

Nikitha can do a work in 3days and Krithika is 15% more expert than Nikitha to complete the same work, then find the total time taken to complete the work by Krithika.

Options :

1. ✘  $5\frac{1}{2}$  days
2. ✘  $4\frac{1}{2}$  days
3. ✘ 4days
4. ✔  $2\frac{14}{23}$  days

Question Number : 48 Question Id : 7368157522 Question Type : MCQ Option Shuffling : Yes Display Question Number : Yes  
Single Line Question Option : No Option Orientation : Vertical

Correct : 1 Wrong : 0.25

निकिता 3 दिन में एक काम पूरा कर सकती है और कृत्तिका उसी काम को निकिता की तुलना में 15% ज्यादा दक्षता से कर सकती है, तो उस काम को पूरा करने के लिए कृत्तिका द्वारा लिया गया कुल समय ज्ञात करें।

Options :

1. ✘  $5\frac{1}{2}$  दिन



2. ✘  $4\frac{1}{2}$  दिन  
3. ✘ 4 दिन  
4. ✔  $2\frac{14}{23}$  दिन

Question Number : 49 Question Id : 7368157523 Question Type : MCQ Option Shuffling : Yes Display Question Number : Yes  
Single Line Question Option : No Option Orientation : Vertical

Correct : 1 Wrong : 0.25

If A can do a piece of work in 4days, B can do the same in 12days and C can do the same work in 14days, then working together, how many days will they take to complete the work?

Options :

1. ✘  $2\frac{2}{11}$  days  
2. ✘ 9days  
3. ✔  $2\frac{8}{17}$  days  
4. ✘ 24days

Question Number : 49 Question Id : 7368157523 Question Type : MCQ Option Shuffling : Yes Display Question Number : Yes  
Single Line Question Option : No Option Orientation : Vertical

Correct : 1 Wrong : 0.25

यदि A, 4 दिन में एक काम कर सकता है, B वही काम 6 दिन में और C, 2 दिन में कर सकता है, तो उन्हें साथमिलकर उस काम को पूरा करने के लिए कितने दिन लगेंगे?

Options :

1. ✘  $2\frac{2}{11}$  दिन  
2. ✘ 9 दिन  
3. ✔  $2\frac{8}{17}$  दिन  
4. ✘ 24 दिन

Question Number : 50 Question Id : 7368157524 Question Type : MCQ Option Shuffling : Yes Display Question Number : Yes  
Single Line Question Option : No Option Orientation : Vertical

Correct : 1 Wrong : 0.25

45 men can complete a work in 24days. 8days after they started working, 10 more men joined them. How many days will they now take to complete the remaining work?

Options :

1. ✘  $6\frac{2}{3}$  days  
2. ✘  $6\frac{1}{5}$  days  
3. ✔  $13\frac{1}{11}$  days

4. ✘  $8\frac{1}{4}$  days

Question Number : 50 Question Id : 7368157524 Question Type : MCQ Option Shuffling : Yes Display Question Number : Yes  
Single Line Question Option : No Option Orientation : Vertical

Correct : 1 Wrong : 0.25

45 पुरुष 24 दिनों में एक काम को पूरा कर सकते हैं। काम शुरू करने के 8 दिन बाद उनमें 10 और पुरुष शामिल हो जाते हैं। अब वे शेष कितने दिनों में इस काम को पूरा करेंगे?

Options :

1. ✘  $6\frac{2}{3}$  दिन

2. ✘  $6\frac{1}{5}$  दिन

3. ✔  $13\frac{1}{11}$  दिन

4. ✘  $8\frac{1}{4}$  दिन

#### English Language

Section Id :	736815146
Section Number :	2
Section type :	Online
Mandatory or Optional:	Mandatory
Number of Questions:	32
Number of Questions to be attempted:	32
Section Marks:	50
Display Number Panel:	Yes
Group All Questions:	No

Sub-Section Number:	1
Sub-Section Id:	736815220
Question Shuffling Allowed :	No

Question Id : 7368157525 Question Type : COMPREHENSION Sub Question Shuffling Allowed : No Group Comprehension Questions : No

Question Numbers : (51 to 60)

Question Label : Comprehension

Read the passage given below and answer the questions that follow it by choosing the best option for each:

In the 1920s American research on *eugenics* {Please see the definition at the end of the passage.} was so sophisticated that it became the envy of the Germans. The U.S. Immigration Act of 1924 earned praise from no less than Hitler in "Mein Kampf." The nation was swept up in a mania for eugenics in the 1910s. Part of the obsession was driven by *xenophobia* [hatred of foreigners]: Nativists feared that the sudden influx of immigrants from southern and Eastern Europe would make thin gruel of hearty American stock. Eugenicists believed "the character of a nation is determined primarily by its racial qualities; that is the hereditary physical, mental, and moral or temperamental traits of its people." They hoped "better breeding" could rid America of its flaws

Henry Goddard, who was also a prominent member of the eugenics movement, is often called the father of American intelligence testing. He introduced a measurement for it to the United States. At the time, psychologists lumped people with cognitive disabilities in three broad categories: "idiot," "imbecile" and "feeble-minded", the last being the least severe. Goddard thought the label 'feebleminded' was imprecise and unscientific, so he created a replacement.

Borrowing a Greek root meaning "dull" or "foolish," he coined the term "moron."

Goddard wanted to ensure there were no "morons" among the immigrants. In 1913, he sent female assistants to Ellis Island – a federal immigration station – to recognize the "feeble-minded" by sight (women were more intuitive at this, he thought) and administer his tests. His methods revealed an astounding result: 40 percent of the Jews, Italians and Hungarians tested qualified as "morons."

The following year deportations for "feeble-mindedness" doubled.

{*eugenics* -- the science of improving a population by controlled breeding to increase the occurrence of desirable heritable characteristics}.

#### Sub questions

Question Number : 51 Question Id : 7368157526 Question Type : MCQ Option Shuffling : Yes Display Question Number : Yes Single Line Question Option : No Option Orientation : Vertical

Correct : 1 Wrong : 0.25

The most appropriate title for this passage is

Options :

1. ✓ Role of IQ in Eugenics and Immigration Control
2. ✗ What Hitler could have learnt from the U.S.A.
3. ✗ Keep the morons out: Eugenicists' Motto
4. ✗ Gate Keeping through Intelligence Tests

Question Number : 52 Question Id : 7368157527 Question Type : MCQ Option Shuffling : Yes Display Question Number : Yes Single Line Question Option : No Option Orientation : Vertical

Correct : 1 Wrong : 0.25



“...make thin gruel of hearty American stock” in paragraph 1 is used to capture

Americans’

Options :

1. ✘ imagination and the use of common everyday terms
2. ✘ fear of immigrants’ racial origins
3. ✘ anxiety about preserving racial purity
4. ✔ rustic way of indicating unwelcome racial intermingling

Question Number : 53 Question Id : 7368157528 Question Type : MCQ Option Shuffling : Yes Display Question Number : Yes  
Single Line Question Option : No Option Orientation : Vertical

Correct : 1 Wrong : 0.25

The first paragraph mentions Hitler and Mein Kampf to

Options :

1. ✘ convey the dislike for eugenics
2. ✔ create the intended attitude to eugenics
3. ✘ show the real origin of eugenics
4. ✘ provide a glimpse into American history

Question Number : 54 Question Id : 7368157529 Question Type : MCQ Option Shuffling : Yes Display Question Number : Yes  
Single Line Question Option : No Option Orientation : Vertical

Correct : 1 Wrong : 0.25

Goddard coined ‘moron’ as a new term because

Options :

1. ✘ he had discovered a new category of ‘dull’ people
2. ✘ the earlier term was too specific and unhelpful
3. ✔ the new term helped filter ‘dull’ immigrants better
4. ✘ he was an eugenicist and not merely a psychologist

Question Number : 55 Question Id : 7368157530 Question Type : MCQ Option Shuffling : Yes Display Question Number : Yes  
Single Line Question Option : No Option Orientation : Vertical

Correct : 1 Wrong : 0.25

Goddard employed women to isolate the ‘feeble-minded’ as

Options :

1. ✘ women hate immigrants more than men
2. ✘ women have innate detection powers
3. ✘ women are more observant
4. ✔ women’s perception and instinct are infallible

Question Number : 56 Question Id : 7368157531 Question Type : MCQ Option Shuffling : Yes Display Question Number : Yes  
Single Line Question Option : No Option Orientation : Vertical

Correct : 1 Wrong : 0.25

Goddard’s new term was a successful one because

Options :

1. ✘ it sifted a significant number of ‘morons’ from idiots

2. ✘ the American immigration department accepted it
3. ✔ the number of deportees increased in the following year
4. ✘ a moron could now easily be distinguished from an idiot and an imbecile

Question Number : 57 Question Id : 7368157532 Question Type : MCQ Option Shuffling : Yes Display Question Number : Yes  
Single Line Question Option : No Option Orientation : Vertical

Correct : 1 Wrong : 0.25

The measurement in intelligence testing introduced by Goddard, mentioned here in the passage,

Options :

1. ✔ used labels for categories
2. ✘ used grades for categories
3. ✘ awarded marks and grade-points
4. ✘ awarded percentile scores

Question Number : 58 Question Id : 7368157533 Question Type : MCQ Option Shuffling : Yes Display Question Number : Yes  
Single Line Question Option : No Option Orientation : Vertical

Correct : 1 Wrong : 0.25

The synonym for 'sophisticated' as used in the passage is

Options :

1. ✔ advanced
2. ✘ refined
3. ✘ fashionable
4. ✘ cultured

Question Number : 59 Question Id : 7368157534 Question Type : MCQ Option Shuffling : Yes Display Question Number : Yes  
Single Line Question Option : No Option Orientation : Vertical

Correct : 1 Wrong : 0.25

A dictionary gives 'stock' the following meanings. Choose a meaning of stock that will not be relevant to the topics discussed in the passage:

Options :

1. ✔ stored merchandise
2. ✘ the original (as a person, race, or language) from which others derive :
3. ✘ a stem in which a bud or shoot is inserted.
4. ✘ the trunk of a tree

Question Number : 60 Question Id : 7368157535 Question Type : MCQ Option Shuffling : Yes Display Question Number : Yes  
Single Line Question Option : No Option Orientation : Vertical

Correct : 1 Wrong : 0.25

Choose the antonym of influx:

Options :

1. ✘ outflow
2. ✔ exodus
3. ✘ drainage
4. ✘ loss



**Join Telegram More Update Note: All previous year Exam paper provides**

Question Id : 7368157525 Question Type : COMPREHENSION Sub Question Shuffling Allowed : No Group Comprehension Questions : No

Question Numbers : (51 to 60)

Question Label : Comprehension

Read the passage given below and answer the questions that follow it by choosing the best option for each:

In the 1920s American research on *eugenics* {Please see the definition at the end of the passage.} was so sophisticated that it became the envy of the Germans. The U.S. Immigration Act of 1924 earned praise from no less than Hitler in "Mein Kampf." The nation was swept up in a mania for eugenics in the 1910s. Part of the obsession was driven by *xenophobia* [hatred of foreigners]: Nativists feared that the sudden influx of immigrants from southern and Eastern Europe would make thin gruel of hearty American stock. Eugenacists believed "the character of a nation is determined primarily by its racial qualities; that is the hereditary physical, mental, and moral or temperamental traits of its people." They hoped "better breeding" could rid America of its flaws.

Henry Goddard, who was also a prominent member of the eugenics movement, is often called the father of American intelligence testing. He introduced a measurement for it to the United States. At the time, psychologists lumped people with cognitive disabilities in three broad categories: "idiot," "imbecile" and "feeble-minded", the last being the least severe. Goddard thought the label 'feebleminded' was imprecise and unscientific, so he created a replacement.

Borrowing a Greek root meaning "dull" or "foolish," he coined the term "moron."

Goddard wanted to ensure there were no "morons" among the immigrants. In 1913, he sent female assistants to Ellis Island - a federal immigration station - to recognize the "feeble-minded" by sight (women were more intuitive at this, he thought) and administer his tests. His methods revealed an astounding result: 40 percent of the Jews, Italians and Hungarians tested qualified as "morons."

The following year deportations for "feeble-mindedness" doubled.

{*eugenics* -- the science of improving a population by controlled breeding to increase the occurrence of desirable heritable characteristics}.

Question Number : 51 Question Id : 7368157526 Question Type : MCQ Option Shuffling : Yes Display Question Number : Yes  
Single Line Question Option : No Option Orientation : Vertical

Correct : 1 Wrong : 0.25

The most appropriate title for this passage is

Options :

1.  Role of IQ in Eugenics and Immigration Control
2.  What Hitler could have learnt from the U.S.A.
3.  Keep the morons out: Eugenicists' Motto
4.  Gate Keeping through Intelligence Tests

Question Number : 52 Question Id : 7368157527 Question Type : MCQ Option Shuffling : Yes Display Question Number : Yes  
Single Line Question Option : No Option Orientation : Vertical

Correct : 1 Wrong : 0.25

"....make thin gruel of hearty American stock" in paragraph 1 is used to capture Americans'

Options :

1.  imagination and the use of common everyday terms
2.  fear of immigrants' racial origins
3.  anxiety about preserving racial purity
4.  rustic way of indicating unwelcome racial intermingling

Question Number : 53 Question Id : 7368157528 Question Type : MCQ Option Shuffling : Yes Display Question Number : Yes  
Single Line Question Option : No Option Orientation : Vertical

Correct : 1 Wrong : 0.25

The first paragraph mentions Hitler and *Mein Kampf* to

Options :

1.  convey the dislike for eugenics
2.  create the intended attitude to eugenics
3.  show the real origin of eugenics
4.  provide a glimpse into American history

Question Number : 54 Question Id : 7368157529 Question Type : MCQ Option Shuffling : Yes Display Question Number : Yes  
Single Line Question Option : No Option Orientation : Vertical

Correct : 1 Wrong : 0.25

Goddard coined 'moron' as a new term because

Options :

1.  he had discovered a new category of 'dull' people
2.  the earlier term was too specific and unhelpful
3.  the new term helped filter 'dull' immigrants better
4.  he was an eugenicist and not merely a psychologist

Question Number : 55 Question Id : 7368157530 Question Type : MCQ Option Shuffling : Yes Display Question Number : Yes  
Single Line Question Option : No Option Orientation : Vertical

Correct : 1 Wrong : 0.25



**Join Telegram More Update Note: All previous year Exam paper provides**  
Goddard employed women to isolate the 'feeble-minded' as

Options :

1. ✘ women hate immigrants more than men
2. ✘ women have innate detection powers
3. ✘ women are more observant
4. ✔ women's perception and instinct are infallible

Question Number : 56 Question Id : 7368157531 Question Type : MCQ Option Shuffling : Yes Display Question Number : Yes  
Single Line Question Option : No Option Orientation : Vertical

Correct : 1 Wrong : 0.25

Goddard's new term was a successful one because

Options :

1. ✘ it sifted a significant number of 'morons' from idiots
2. ✘ the American immigration department accepted it
3. ✔ the number of deportees increased in the following year
4. ✘ a moron could now easily be distinguished from an idiot and an imbecile

Question Number : 57 Question Id : 7368157532 Question Type : MCQ Option Shuffling : Yes Display Question Number : Yes  
Single Line Question Option : No Option Orientation : Vertical

Correct : 1 Wrong : 0.25

The measurement in intelligence testing introduced by Goddard, mentioned here in the passage,

Options :

1. ✔ used labels for categories
2. ✘ used grades for categories
3. ✘ awarded marks and grade-points
4. ✘ awarded percentile scores

Question Number : 58 Question Id : 7368157533 Question Type : MCQ Option Shuffling : Yes Display Question Number : Yes  
Single Line Question Option : No Option Orientation : Vertical

Correct : 1 Wrong : 0.25

The synonym for 'sophisticated' as used in the passage is

Options :

1. ✔ advanced
2. ✘ refined
3. ✘ fashionable
4. ✘ cultured

Question Number : 59 Question Id : 7368157534 Question Type : MCQ Option Shuffling : Yes Display Question Number : Yes  
Single Line Question Option : No Option Orientation : Vertical

Correct : 1 Wrong : 0.25

A dictionary gives 'stock' the following meanings. Choose a meaning of stock that will not be relevant to the topics discussed in the passage:

Options :

**visit this website [studytosuccess.in](http://studytosuccess.in)**

1.  stored merchandise
2.  the original (as a person, race, or language) from which others derive :
3.  a stem in which a bud or shoot is inserted
4.  the trunk of a tree

Question Number : 60 Question Id : 7368157535 Question Type : MCQ Option Shuffling : Yes Display Question Number : Yes  
Single Line Question Option : No Option Orientation : Vertical

Correct : 1 Wrong : 0.25

Choose the antonym of influx:

Options :

1.  outflow
2.  exodus
3.  drainage
4.  loss

Sub-Section Number:	2
Sub-Section Id:	736815221
Question Shuffling Allowed :	No

Question Id : 7368157536 Question Type : COMPREHENSION Sub Question Shuffling Allowed : No Group Comprehension  
Questions : No

Question Numbers : (61 to 70)

Question Label : Comprehension

Given below is a passage with ten blanks, numbered from 11 to 20. Fill in the blanks by choosing the correct option given against the corresponding question number:

The Chinese belief in ghosts was heavily influenced by their practice of ancestor worship and the belief that the departed continued to exert a powerful influence on people's lives. As in the other cultures, the spirits of the \_\_\_\_\_ (11) could benefit the living unless there had been \_\_\_\_\_ (12) in burial or funeral rites; they could \_\_\_\_\_ (13) the dispensation from heaven to return to right a \_\_\_\_\_ (14)! The Ghost Festival, to honour and appease the \_\_\_\_\_ (15), continues to be held on the fifteenth day \_\_\_\_\_ (16) the seventh month of the year. Known as the "Ghost Month", this \_\_\_\_\_ (17) is thought to be when the \_\_\_\_\_ (18) between the realm of the living and that of the dead is thinnest and the dead can \_\_\_\_\_ (19) cross over. During the Ghost Festival, people leave out food and gifts for the dead to \_\_\_\_\_ (20) and honour them in the hope that they will remain in their own realm and not trouble the living.

Sub questions

Question Number : 61 Question Id : 7368157537 Question Type : MCQ Option Shuffling : Yes Display Question Number : Yes  
Single Line Question Option : No Option Orientation : Vertical

Correct : 1 Wrong : 0.25

Fill in the blanks by choosing the correct option given against the corresponding question number:

Options :

1.  ancestors



2. ✘ elders
3. ✘ living
4. ✔ dead

Question Number : 62 Question Id : 7368157538 Question Type : MCQ Option Shuffling : Yes Display Question Number : Yes  
Single Line Question Option : No Option Orientation : Vertical

Correct : 1 Wrong : 0.25

Fill in the blanks by choosing the correct option given against the corresponding question number:

Options :

1. ✘ joy
2. ✔ impropriety
3. ✘ development
4. ✘ civility

Question Number : 63 Question Id : 7368157539 Question Type : MCQ Option Shuffling : Yes Display Question Number : Yes  
Single Line Question Option : No Option Orientation : Vertical

Correct : 1 Wrong : 0.25

Fill in the blanks by choosing the correct option given against the corresponding question number:

Options :

1. ✘ be
2. ✔ have
3. ✘ has
4. ✘ are

Question Number : 64 Question Id : 7368157540 Question Type : MCQ Option Shuffling : Yes Display Question Number : Yes  
Single Line Question Option : No Option Orientation : Vertical

Correct : 1 Wrong : 0.25

Fill in the blanks by choosing the correct option given against the corresponding question number:

Options :

1. ✔ wrong
2. ✘ left
3. ✘ mistake
4. ✘ speech

Question Number : 65 Question Id : 7368157541 Question Type : MCQ Option Shuffling : Yes Display Question Number : Yes  
Single Line Question Option : No Option Orientation : Vertical

Correct : 1 Wrong : 0.25

Fill in the blanks by choosing the correct option given against the corresponding question number:

Options :

1. ✔ departed
2. ✘ living
3. ✘ greedy

4. ✘ sad

Question Number : 66 Question Id : 7368157542 Question Type : MCQ Option Shuffling : Yes Display Question Number : Yes  
Single Line Question Option : No Option Orientation : Vertical

Correct : 1 Wrong : 0.25

Fill in the blanks by choosing the correct option given against the corresponding question number:

Options :

1. ✘ off
2. ✔ of
3. ✘ in
4. ✘ by

Question Number : 67 Question Id : 7368157543 Question Type : MCQ Option Shuffling : Yes Display Question Number : Yes  
Single Line Question Option : No Option Orientation : Vertical

Correct : 1 Wrong : 0.25

Fill in the blanks by choosing the correct option given against the corresponding question number:

Options :

1. ✘ moment
2. ✘ hour
3. ✘ second
4. ✔ time

Question Number : 68 Question Id : 7368157544 Question Type : MCQ Option Shuffling : Yes Display Question Number : Yes  
Single Line Question Option : No Option Orientation : Vertical

Correct : 1 Wrong : 0.25

Fill in the blanks by choosing the correct option given against the corresponding question number:

Options :

1. ✔ veil
2. ✘ wrap
3. ✘ coat
4. ✘ visor

Question Number : 69 Question Id : 7368157545 Question Type : MCQ Option Shuffling : Yes Display Question Number : Yes  
Single Line Question Option : No Option Orientation : Vertical

Correct : 1 Wrong : 0.25

Fill in the blanks by choosing the correct option given against the corresponding question number:

Options :

1. ✔ easily
2. ✘ badly
3. ✘ honestly
4. ✘ justly

Question Number : 70 Question Id : 7368157546 Question Type : MCQ Option Shuffling : Yes Display Question Number : Yes  
Single Line Question Option : No Option Orientation : Vertical

Correct : 1 Wrong : 0.25

Fill in the blanks by choosing the correct option given against the corresponding question number:

Options :

1. ✓ appease
2. ✗ mend
3. ✗ irritate
4. ✗ inflame

Question Id : 7368157536 Question Type : COMPREHENSION Sub Question Shuffling Allowed : No Group Comprehension Questions : No

Question Numbers : (61 to 70)

Question Label : Comprehension

Given below is a passage with ten blanks, numbered from 11 to 20. Fill in the blanks by choosing the correct option given against the corresponding question number:

The Chinese belief in ghosts was heavily influenced by their practice of ancestor worship and the belief that the departed continued to exert a powerful influence on people's lives. As in the other cultures, the spirits of the \_\_\_\_\_ (11) could benefit the living unless there had been \_\_\_\_\_ (12) in burial or funeral rites; they could \_\_\_\_\_ (13) the dispensation from heaven to return to right a \_\_\_\_\_ (14)! The Ghost Festival, to honour and appease the \_\_\_\_\_ (15), continues to be held on the fifteenth day \_\_\_\_\_ (16) the seventh month of the year. Known as the "Ghost Month", this \_\_\_\_\_ (17) is thought to be when the \_\_\_\_\_ (18) between the realm of the living and that of the dead is thinnest and the dead can \_\_\_\_\_ (19) cross over. During the Ghost Festival, people leave out food and gifts for the dead to \_\_\_\_\_ (20) and honour them in the hope that they will remain in their own realm and not trouble the living.

Sub questions

Question Number : 61 Question Id : 7368157537 Question Type : MCQ Option Shuffling : Yes Display Question Number : Yes Single Line Question Option : No Option Orientation : Vertical

Correct : 1 Wrong : 0.25

Fill in the blanks by choosing the correct option given against the corresponding question number:

Options :

1. ✗ ancestors
2. ✗ elders



3. ✘ living

4. ✔ dead

Question Number : 62 Question Id : 7368157538 Question Type : MCQ Option Shuffling : Yes Display Question Number : Yes  
Single Line Question Option : No Option Orientation : Vertical

Correct : 1 Wrong : 0.25

Fill in the blanks by choosing the correct option given against the corresponding question number:

Options :

1. ✘ joy

2. ✔ impropriety

3. ✘ development

4. ✘ civility

Question Number : 63 Question Id : 7368157539 Question Type : MCQ Option Shuffling : Yes Display Question Number : Yes  
Single Line Question Option : No Option Orientation : Vertical

Correct : 1 Wrong : 0.25

Fill in the blanks by choosing the correct option given against the corresponding question number:

Options :

1. ✘ be

2. ✔ have

3. ✘ has

4. ✘ are

Question Number : 64 Question Id : 7368157540 Question Type : MCQ Option Shuffling : Yes Display Question Number : Yes  
Single Line Question Option : No Option Orientation : Vertical

Correct : 1 Wrong : 0.25

Fill in the blanks by choosing the correct option given against the corresponding question number:

Options :

1. ✔ wrong

2. ✘ left

3. ✘ mistake

4. ✘ speech

Question Number : 65 Question Id : 7368157541 Question Type : MCQ Option Shuffling : Yes Display Question Number : Yes  
Single Line Question Option : No Option Orientation : Vertical

Correct : 1 Wrong : 0.25

Fill in the blanks by choosing the correct option given against the corresponding question number:

Options :

1. ✔ departed

2. ✘ living

3. ✘ greedy

4. ✘ sad

Question Number : 66 Question Id : 7368157542 Question Type : MCQ Option Shuffling : Yes Display Question Number : Yes  
Single Line Question Option : No Option Orientation : Vertical

Correct : 1 Wrong : 0.25

Fill in the blanks by choosing the correct option given against the corresponding question number:

Options :

1. ✘ off

2. ✔ of

3. ✘ in

4. ✘ by

Question Number : 67 Question Id : 7368157543 Question Type : MCQ Option Shuffling : Yes Display Question Number : Yes  
Single Line Question Option : No Option Orientation : Vertical

Correct : 1 Wrong : 0.25

Fill in the blanks by choosing the correct option given against the corresponding question number:

Options :

1. ✘ moment

2. ✘ hour

3. ✘ second

4. ✔ time

Question Number : 68 Question Id : 7368157544 Question Type : MCQ Option Shuffling : Yes Display Question Number : Yes  
Single Line Question Option : No Option Orientation : Vertical

Correct : 1 Wrong : 0.25

Fill in the blanks by choosing the correct option given against the corresponding question number:

Options :

1. ✔ veil

2. ✘ wrap

3. ✘ coat

4. ✘ visor

Question Number : 69 Question Id : 7368157545 Question Type : MCQ Option Shuffling : Yes Display Question Number : Yes  
Single Line Question Option : No Option Orientation : Vertical

Correct : 1 Wrong : 0.25

Fill in the blanks by choosing the correct option given against the corresponding question number:

Options :

1. ✔ easily

2. ✘ badly



3. ✘ honestly

4. ✘ justly

Question Number : 70 Question Id : 7368157546 Question Type : MCQ Option Shuffling : Yes Display Question Number : Yes  
Single Line Question Option : No Option Orientation : Vertical

Correct : 1 Wrong : 0.25

Fill in the blanks by choosing the correct option given against the corresponding question number:

Options :

1. ✔ appease

2. ✘ mend

3. ✘ irritate

4. ✘ inflame

Sub-Section Number:	3
Sub-Section Id:	736815222
Question Shuffling Allowed :	Yes

Question Number : 71 Question Id : 7368157547 Question Type : MCQ Option Shuffling : Yes Display Question Number : Yes  
Single Line Question Option : No Option Orientation : Vertical

Correct : 1 Wrong : 0.25

Given below is a set of five sentences, numbered 1 to 5, which are not in a meaningful order. Choose from the options given, the order which will be acceptable and meaningful:

1. On December 25th, some three years after taking over as China's leader, Xi Jinping posted his first tweet.
2. For a man clearly rattled by the rapid spread of social media, and grimly determined to tame them, the venue was fitting.
3. His new-year greeting was not to China's more than 660m internet users, but to the armed forces—most of whose members are banned from tweeting.
4. Mr. Xi Jinping is the first Chinese leader to come to power amid the rapid growth of a middle class, a majority of whom are net-savvy.
5. Uniformed military officials stood around as he typed his message into a computer in the office of an army-run newspaper.

Options :

1. ✘ 5,3,2,4,1

2. ✘ 4,5,1,3,2

3. ✔ 4,1,5,2,3

4. ✘ 4,1,5,3,2

Question Number : 71 Question Id : 7368157547 Question Type : MCQ Option Shuffling : Yes Display Question Number : Yes  
Single Line Question Option : No Option Orientation : Vertical

Correct : 1 Wrong : 0.25

Given below is a set of five sentences, numbered 1 to 5, which are not in a meaningful order. Choose from the options given, the order which will be acceptable and meaningful:

1. On December 25th, some three years after taking over as China's leader, Xi Jinping posted his first tweet.
2. For a man clearly rattled by the rapid spread of social media, and grimly determined to tame them, the venue was fitting.
3. His new-year greeting was not to China's more than 660m internet users, but to the armed forces—most of whose members are banned from tweeting.
4. Mr. Xi Jinping is the first Chinese leader to come to power amid the rapid growth of a middle class, a majority of whom are net-savvy.
5. Uniformed military officials stood around as he typed his message into a computer in the office of an army-run newspaper.

Options :

1. ✘ 5,3,2,4,1
2. ✘ 4,5,1,3,2
3. ✔ 4,1,5,2,3
4. ✘ 4,1,5,3,2

Question Number : 72 Question Id : 7368157548 Question Type : MCQ Option Shuffling : Yes Display Question Number : Yes Single Line Question Option : No Option Orientation : Vertical

Correct : 1 Wrong : 0.25

Given below is a set of five sentences, numbered 1 to 5, which are not in a meaningful order. Choose from the options given, the order which will be acceptable and meaningful:

1. Diners sit in a gloomy, yet magnificent 500 sq metre storehouse; with gridded concrete ceilings and brick walls, eating on long communal tables on mismatched furniture.
2. Eight professional chefs volunteer throughout the week, cooking up leftover food collected from *Rungis*, a huge wholesale food market on the outskirts of the city.
3. Paris isn't the kind of city you associate with vegan food but "zero waste" canteen Freegan Pony, which opened last year, is there to challenge expectations.
4. The menu changes daily, based on the food the team can find and though it couldn't be further from your typical Parisian bistro.
5. The restaurant was conceived by 32-year-old Aladdin Charni and brought to life with the help of a group of volunteers, all focused on raising awareness about food waste.

Options :



1. ✘ 3,5,2,1,4
2. ✘ 3,2,5,4,1
3. ✔ 3,5,2,4,1
4. ✘ 3,4,5,1,2

Question Number : 72 Question Id : 7368157548 Question Type : MCQ Option Shuffling : Yes Display Question Number : Yes  
Single Line Question Option : No Option Orientation : Vertical

Correct : 1 Wrong : 0.25

Given below is a set of five sentences, numbered 1 to 5, which are not in a meaningful order. Choose from the options given, the order which will be acceptable and meaningful:

1. Diners sit in a gloomy, yet magnificent 500 sq metre storehouse; with gridded concrete ceilings and brick walls, eating on long communal tables on mismatched furniture.
2. Eight professional chefs volunteer throughout the week, cooking up leftover food collected from *Rungis*, a huge wholesale food market on the outskirts of the city.
3. Paris isn't the kind of city you associate with vegan food but "zero waste" canteen Freegan Pony, which opened last year, is there to challenge expectations.
4. The menu changes daily, based on the food the team can find and though it couldn't be further from your typical Parisian bistro.
5. The restaurant was conceived by 32-year-old Aladdin Charni and brought to life with the help of a group of volunteers, all focused on raising awareness about food waste.

Options :

1. ✘ 3,5,2,1,4
2. ✘ 3,2,5,4,1
3. ✔ 3,5,2,4,1
4. ✘ 3,4,5,1,2

Question Number : 73 Question Id : 7368157549 Question Type : MCQ Option Shuffling : Yes Display Question Number : Yes  
Single Line Question Option : No Option Orientation : Vertical

Correct : 1 Wrong : 0.25

Given below is a set of five sentences, numbered 1 to 5, which are not in a meaningful order. Choose from the options given, the order which will be acceptable and meaningful:

1. And when a teacher is confronted with a large class of widely varying abilities, interests and needs, no other testing instrument insures more consistency and permits more free time to work with individual students and parents.
2. When a teacher wants to assess a student's grasp of all the topics covered in a semester or a school year, there is no more practical, comprehensive measure than a multiple-choice review.
3. We must never reach the point where a student's classroom grade, college or graduate future depends solely on standardized testing.
4. Not all multiple-choice tests at the elementary or secondary level approach the thoroughly researched national examinations for which I've been preparing students for the last 50 years.
5. When hundreds of thousands of applicants from high schools with diverse standards and grading systems apply to college, there is no fairer, more efficient way of measuring their performance than a standardized test.

Options :

1. ✘ 5,1,2,4,3
2. ✔ 5,2,1,4,3
3. ✘ 5,2,1,3,4
4. ✘ 5,4,3,1,2

Question Number : 73 Question Id : 7368157549 Question Type : MCQ Option Shuffling : Yes Display Question Number : Yes  
Single Line Question Option : No Option Orientation : Vertical

Correct : 1 Wrong : 0.25



Given below is a set of five sentences, numbered 1 to 5, which are not in a meaningful order. Choose from the options given, the order which will be acceptable and meaningful:

1. And when a teacher is confronted with a large class of widely varying abilities, interests and needs, no other testing instrument insures more consistency and permits more free time to work with individual students and parents.
2. When a teacher wants to assess a student's grasp of all the topics covered in a semester or a school year, there is no more practical, comprehensive measure than a multiple-choice review.
3. We must never reach the point where a student's classroom grade, college or graduate future depends solely on standardized testing.
4. Not all multiple-choice tests at the elementary or secondary level approach the thoroughly researched national examinations for which I've been preparing students for the last 50 years.
5. When hundreds of thousands of applicants from high schools with diverse standards and grading systems apply to college, there is no fairer, more efficient way of measuring their performance than a standardized test.

Options :

1. ✘ 5,1,2,4,3
2. ✔ 5,2,1,4,3
3. ✘ 5,2,1,3,4
4. ✘ 5,4,3,1,2

Question Number : 74 Question Id : 7368157550 Question Type : MCQ Option Shuffling : Yes Display Question Number : Yes  
Single Line Question Option : No Option Orientation : Vertical

Correct : 1 Wrong : 0.25



Given below is a famous saying, the words of which have been jumbled up and numbered.

Choose the right order from the given options:

**hell/ good / is paved with / to / intentions / the road**

**1      2                  3      4      5                  6**

Options :

1. ✘ 6,1,4,3,2,5
2. ✔ 6,4,1,3,2,5
3. ✘ 6,4,3,1,2,5
4. ✘ 6,4,1,3,5,2

Question Number : 74 Question Id : 7368157550 Question Type : MCQ Option Shuffling : Yes Display Question Number : Yes  
Single Line Question Option : No Option Orientation : Vertical

Correct : 1 Wrong : 0.25

Given below is a famous saying, the words of which have been jumbled up and numbered. Choose the right order from the given options:

**hell / good / is paved with / to / intentions / the road**

**1      2                  3                  4      5                  6**

Options :

1. ✘ 6,1,4,3,2,5
2. ✔ 6,4,1,3,2,5
3. ✘ 6,4,3,1,2,5
4. ✘ 6,4,1,3,5,2

Question Number : 75 Question Id : 7368157551 Question Type : MCQ Option Shuffling : Yes Display Question Number : Yes  
Single Line Question Option : No Option Orientation : Vertical

Correct : 1 Wrong : 0.25

Given below is a famous saying, the words of which have been jumbled up and numbered. Choose the right order from the given options:

**thinking about / a good listener / something else / is usually**

**1                  2                  3                  4**

Options :

1. ✘ 2,3,4,1
2. ✘ 4,3,2,1
3. ✘ 1,2,3,4
4. ✔ 2,4,1,3

Question Number : 75 Question Id : 7368157551 Question Type : MCQ Option Shuffling : Yes Display Question Number : Yes  
Single Line Question Option : No Option Orientation : Vertical

Correct : 1 Wrong : 0.25

Given below is a famous saying, the words of which have been jumbled up and numbered. Choose the right order from the given options:

**thinking about / a good listener / something else / is usually**

1

2

3

4

Options :

1. ✘ 2,3,4,1
2. ✘ 4,3,2,1
3. ✘ 1,2,3,4
4. ✔ 2,4,1,3

Question Number : 76 Question Id : 7368157552 Question Type : MCQ Option Shuffling : Yes Display Question Number : Yes Single Line Question Option : No Option Orientation : Vertical

Correct : 1 Wrong : 0.25

Given below is an ungrammatical, defective, sentence and there are 4 options given. One of them is the correct and improved form of the sentence. Choose the one which improves the given sentence:

**Leaving much before the scheduled time, many passengers missed the train.**

Options :

1. ✘ As the train has left much before the scheduled time, many passengers missed it.
2. ✘ As the train had left much before the scheduled time, many passengers missed it.
3. ✔ Leaving much before the scheduled time, the train left behind many passengers.
4. ✘ Leaving much before the scheduled time, many passengers had to miss the train.

Question Number : 76 Question Id : 7368157552 Question Type : MCQ Option Shuffling : Yes Display Question Number : Yes Single Line Question Option : No Option Orientation : Vertical

Correct : 1 Wrong : 0.25

Given below is an ungrammatical, defective, sentence and there are 4 options given. One of them is the correct and improved form of the sentence. Choose the one which improves the given sentence:

**Leaving much before the scheduled time, many passengers missed the train.**

Options :

1. ✘ As the train has left much before the scheduled time, many passengers missed it.
2. ✘ As the train had left much before the scheduled time, many passengers missed it.



3. ✓ passengers.

Leaving much before the scheduled time, many passengers had to miss

4. ✗ the train.

Question Number : 77 Question Id : 7368157553 Question Type : MCQ Option Shuffling : Yes Display Question Number : Yes  
Single Line Question Option : No Option Orientation : Vertical

Correct : 1 Wrong : 0.25

Given below is an ungrammatical, defective, sentence and there are 4 options given. One of them is the correct and improved form of the sentence. Choose the one which improves the given sentence:

**The average North American consumes more than 400 Africans.**

Options :

1. ✗ The average North American devours more than 400 Africans.

2. ✓ The average North American consumes more than 400 Africans do.

3. ✗ The average North American consumers are more than 400 Africans.

4. ✗ The average North American consumes 400 Africans.

Question Number : 77 Question Id : 7368157553 Question Type : MCQ Option Shuffling : Yes Display Question Number : Yes  
Single Line Question Option : No Option Orientation : Vertical

Correct : 1 Wrong : 0.25

Given below is an ungrammatical, defective, sentence and there are 4 options given. One of them is the correct and improved form of the sentence. Choose the one which improves the given sentence:

**The average North American consumes more than 400 Africans.**

Options :

1. ✗ The average North American devours more than 400 Africans.

2. ✓ The average North American consumes more than 400 Africans do.

3. ✗ The average North American consumers are more than 400 Africans.

4. ✗ The average North American consumes 400 Africans.

Question Number : 78 Question Id : 7368157554 Question Type : MCQ Option Shuffling : Yes Display Question Number : Yes  
Single Line Question Option : No Option Orientation : Vertical

Correct : 1 Wrong : 0.25

Given below is an ungrammatical, defective, sentence and there are 4 options given. One of them is the correct and improved form of the sentence. Choose the one which improves the given sentence:

**Night-time temperatures has shown them to be sensitive to climate change.**

Options :

1. ✘ Night-time temperature has shown them to be sensitive to climate change.
2. ✘ Night-time temperatures has shown themselves to be sensitive to climate change.
3. ✔ Night-time temperatures have shown themselves to be sensitive to climate change.
4. ✘ Night-time temperatures have shown they to be sensitive to climatic change.

Question Number : 78 Question Id : 7368157554 Question Type : MCQ Option Shuffling : Yes Display Question Number : Yes  
Single Line Question Option : No Option Orientation : Vertical

Correct : 1 Wrong : 0.25

Given below is an ungrammatical, defective, sentence and there are 4 options given. One of them is the correct and improved form of the sentence. Choose the one which improves the given sentence:

**Night-time temperatures has shown them to be sensitive to climate change.**

Options :

1. ✘ Night-time temperature has shown them to be sensitive to climate change.  
Night-time temperatures has shown themselves to be sensitive to climate change.
2. ✘ change.  
Night-time temperatures have shown themselves to be sensitive to climate change.
3. ✔ change.  
Night-time temperatures have shown they to be sensitive to climatic change.
4. ✘ change.

Question Number : 79 Question Id : 7368157555 Question Type : MCQ Option Shuffling : Yes Display Question Number : Yes  
Single Line Question Option : No Option Orientation : Vertical

Correct : 1 Wrong : 0.25

Given below is an ungrammatical, defective, sentence and there are 4 options given. One of them is the correct and improved form of the sentence. Choose the one which improves the given sentence:

**Too much or too little sleep linked with an increasingly risk of certain types of cardiovascular disease.**

Options :

1. ✘ Too much or too little sleep is linked with an increased risks of certain type of cardiovascular diseases.
2. ✘ Too much or too little sleep is linked with an increased risk of certain types of cardiovascular disease.
3. ✘ Too much or too little sleep is linked with an increasingly risk of certain types of cardiovascular diseases.



Too much or too little sleep is linked with an increased risk of certain types of

4. ✓ cardiovascular diseases.

Question Number : 79 Question Id : 7368157555 Question Type : MCQ Option Shuffling : Yes Display Question Number : Yes  
Single Line Question Option : No Option Orientation : Vertical

Correct : 1 Wrong : 0.25

Given below is an ungrammatical, defective, sentence and there are 4 options given. One of them is the correct and improved form of the sentence. Choose the one which improves the given sentence:

**Too much or too little sleep linked with an increasingly risk of certain types of cardiovascular disease.**

Options :

- Too much or too little sleep is linked with an increased risks of
1. ✗ certain type of cardiovascular diseases.
- Too much or too little sleep is linked with an increased risk of certain
2. ✗ types of cardiovascular disease.
- Too much or too little sleep is linked with an increasingly risk of certain
3. ✗ types of cardiovascular diseases.
- Too much or too little sleep is linked with an increased risk of certain
4. ✓ types of cardiovascular diseases.

Question Number : 80 Question Id : 7368157556 Question Type : MCQ Option Shuffling : Yes Display Question Number : Yes  
Single Line Question Option : No Option Orientation : Vertical

Correct : 1 Wrong : 0.25

Given below is an ungrammatical, defective, sentence and there are 4 options given. One of them is the correct and improved form of the sentence. Choose the one which improves the given sentence:

**Emergency room of hospitals are overwhelmed by noninsured patients seek basis medical care.**

Options :

- Emergency room of hospitals are overwhelmed by uninsured patients seeking basic
1. ✗ medical care.
- Emergency rooms of hospitals are overwhelmed by uninsured patients seeking basic
2. ✓ medical care.
- Emergency rooms of hospitals are overwhelmed by noninsured patients seeking basic
3. ✗ medical care.
- Emergency rooms of hospital are overwhelmed by uninsured patients seeking basis
4. ✗ medical care.

Correct : 1 Wrong : 0.25

Given below is an ungrammatical, defective, sentence and there are 4 options given. One of them is the correct and improved form of the sentence. Choose the one which improves the given sentence:

**Emergency room of hospitals are overwhelmed by noninsured patients seek basis medical care.**

Options :

1. ✘ Emergency room of hospitals are overwhelmed by uninsured patients seeking basic medical care.
2. ✔ Emergency rooms of hospitals are overwhelmed by uninsured patients seeking basic medical care.
3. ✘ Emergency rooms of hospitals are overwhelmed by noninsured patients seeking basic medical care.
4. ✘ Emergency rooms of hospital are overwhelmed by uninsured patients seeking basis medical care.

Question Number : 81 Question Id : 7368157557 Question Type : MCQ Option Shuffling : Yes Display Question Number : Yes  
Single Line Question Option : No Option Orientation : Vertical

Correct : 1 Wrong : 0.25

Given below is a sentence which is to be transformed and rewritten as indicated in brackets and there are four options given. Choose the one which 'correctly' transforms the given sentence :

**The Masai Mara remains one of the major tourist attractions in Kenya.**

{Ask a question which will get the highlighted phrase as its answer.}

Options :

1. ✘ Where remains one of the major tourist attractions in Kenya?
2. ✔ Which does remain as one of the major tourist attractions in Kenya?
3. ✘ Whom remains as one of the major tourist attractions in Kenya?
4. ✘ Why does the Masai Mara remain as one of the major tourist attractions in Kenya?

Question Number : 81 Question Id : 7368157557 Question Type : MCQ Option Shuffling : Yes Display Question Number : Yes  
Single Line Question Option : No Option Orientation : Vertical

Correct : 1 Wrong : 0.25



Given below is a sentence which is to be transformed and rewritten as indicated in brackets and there are four options given. Choose the one which 'correctly' transforms the given sentence :

***The Masai Mara* remains one of the major tourist attractions in Kenya.**

**{Ask a question which will get the highlighted phrase as its answer.}**

Options :

1. ✘ Where remains one of the major tourist attractions in Kenya?
2. ✔ Which does remain as one of the major tourist attractions in Kenya?
3. ✘ Whom remains as one of the major tourist attractions in Kenya?  
Why does the Masai Mara remain as one of the major tourist attractions
4. ✘ in Kenya?

Question Number : 82 Question Id : 7368157558 Question Type : MCQ Option Shuffling : Yes Display Question Number : Yes  
Single Line Question Option : No Option Orientation : Vertical

Correct : 1 Wrong : 0.25

Given below is a sentence which is to be transformed and rewritten as indicated in brackets and there are four options given. Choose the one which 'correctly' transforms the given sentence :

**Technology is playing an increasing role in helping professional athletes.**

**{Into passive voice}**

Options :

1. ✘ An increasing role in helping professional athletes are placed by technology.
2. ✘ An increasing role in helping professional athletes is played by technology.
3. ✘ An increasing role in helping professional athletes are being played by technology.
4. ✔ An increasing role in helping professional athletes is being played by technology.

Question Number : 82 Question Id : 7368157558 Question Type : MCQ Option Shuffling : Yes Display Question Number : Yes  
Single Line Question Option : No Option Orientation : Vertical

Correct : 1 Wrong : 0.25

Given below is a sentence which is to be transformed and rewritten as indicated in brackets and there are four options given. Choose the one which 'correctly' transforms the given sentence :

**Technology is playing an increasing role in helping professional athletes. {Into passive voice}**

Options :

An increasing role in helping professional athletes are placed by

1. ✘ technology.
2. ✘ An increasing role in helping professional athletes is played by technology.  
An increasing role in helping professional athletes are being played by
3. ✘ technology.
4. ✔ An increasing role in helping professional athletes is being played by  
technology.

Question Number : 83 Question Id : 7368157559 Question Type : MCQ Option Shuffling : Yes Display Question Number : Yes  
Single Line Question Option : No Option Orientation : Vertical

Correct : 1 Wrong : 0.25

Given below is a sentence which is to be transformed and rewritten as indicated in brackets and there are four options given. Choose the one which 'correctly' transforms the given sentence :

**What we eat affects our moods as much as our body shape. {As simple sentences}**

Options :

1. ✔ What we eat affects our moods. It also affects our body shape.
2. ✘ What we eat affects our moods. It also does our body shape.
3. ✘ What we eat affects our moods. They also affect our body shape.
4. ✘ What we eat affects our moods; They do our body shape too.

Question Number : 83 Question Id : 7368157559 Question Type : MCQ Option Shuffling : Yes Display Question Number : Yes  
Single Line Question Option : No Option Orientation : Vertical

Correct : 1 Wrong : 0.25

Given below is a sentence which is to be transformed and rewritten as indicated in brackets and there are four options given. Choose the one which 'correctly' transforms the given sentence :

**What we eat affects our moods as much as our body shape. {As simple sentences}**

Options :

1. ✔ What we eat affects our moods. It also affects our body shape.
2. ✘ What we eat affects our moods. It also does our body shape.
3. ✘ What we eat affects our moods. They also affect our body shape.
4. ✘ What we eat affects our moods; They do our body shape too.

Question Number : 84 Question Id : 7368157560 Question Type : MCQ Option Shuffling : Yes Display Question Number : Yes  
Single Line Question Option : No Option Orientation : Vertical

Correct : 1 Wrong : 0.25



Read the sentence given below. Pay attention to the words / phrases / segments in *italics*.

Choose the appropriate substitutes for the phrases and clauses *italicized*:

He is a virtual \_\_\_\_\_: *a book that contains information on various subjects*

Options :

1. ✘ dictionary
2. ✔ encyclopaedia
3. ✘ thesaurus
4. ✘ bible

Question Number : 84 Question Id : 7368157560 Question Type : MCQ Option Shuffling : Yes Display Question Number : Yes  
Single Line Question Option : No Option Orientation : Vertical

Correct : 1 Wrong : 0.25

Read the sentence given below. Pay attention to the words / phrases / segments in *italics*. Choose the appropriate substitutes for the phrases and clauses *italicized*.

He is a virtual \_\_\_\_\_: *a book that contains information on various subjects*

Options :

1. ✘ dictionary
2. ✔ encyclopaedia
3. ✘ thesaurus
4. ✘ bible

Question Number : 85 Question Id : 7368157561 Question Type : MCQ Option Shuffling : Yes Display Question Number : Yes  
Single Line Question Option : No Option Orientation : Vertical

Correct : 1 Wrong : 0.25

Read the sentence given below. Pay attention to the words / phrases / segments in *italics*.  
Choose the appropriate substitutes for the phrases and clauses *italicized*:

The working lady put her child in a *nursery where children are cared for while their parents are at work*.

Options :

1. ✔ crèche
2. ✘ school
3. ✘ kindergarten
4. ✘ convent

Question Number : 85 Question Id : 7368157561 Question Type : MCQ Option Shuffling : Yes Display Question Number : Yes  
Single Line Question Option : No Option Orientation : Vertical

Correct : 1 Wrong : 0.25

Read the sentence given below. Pay attention to the words / phrases / segments in *italics*. Choose the appropriate substitutes for the phrases and clauses *italicized*.

The working lady put her child in a *nursery where children are cared for while their parents are at work*.

Options :

1. ✓ crèche
2. ✗ school
3. ✗ kindergarten
4. ✗ convent

Question Number : 86 Question Id : 7368157562 Question Type : MCQ Option Shuffling : Yes Display Question Number : Yes Single Line Question Option : No Option Orientation : Vertical

Correct : 1 Wrong : 0.25

Given below is a sentence which divided into four parts labelled A, B, C, and D. One of these parts contains an error. Choose the part that has the error:

**Money is / a powerful force only / when there's huge / number of it.**

**A B C D**

Options :

1. ✗ A
2. ✗ B
3. ✗ C
4. ✓ D

Question Number : 86 Question Id : 7368157562 Question Type : MCQ Option Shuffling : Yes Display Question Number : Yes Single Line Question Option : No Option Orientation : Vertical

Correct : 1 Wrong : 0.25

Given below is a sentence which divided into four parts labelled A, B, C, and D. One of these parts contains an error. Choose the part that has the error:

**Money is / a powerful force only / when there's huge / number of it.**

**A B C D**

Options :

1. ✗ A
2. ✗ B
3. ✗ C
4. ✓ D

Question Number : 87 Question Id : 7368157563 Question Type : MCQ Option Shuffling : Yes Display Question Number : Yes  
Single Line Question Option : No Option Orientation : Vertical

Correct : 1 Wrong : 0.25

Given below is a sentence which divided into four parts labelled A, B, C, and D. One of these parts contains an error. Choose the part that has the error:

**Learned women / are ridiculed / though they put to shame / unlearned men.**

**A**

**B**

**C**

**D**

Options :

1. ✘ A

2. ✘ B

3. ✔ C

4. ✘ D

Question Number : 87 Question Id : 7368157563 Question Type : MCQ Option Shuffling : Yes Display Question Number : Yes  
Single Line Question Option : No Option Orientation : Vertical

Correct : 1 Wrong : 0.25

Given below is a sentence which divided into four parts labelled A, B, C, and D. One of these parts contains an error. Choose the part that has the error:

**Learned women / are ridiculed / though they put to shame / unlearned men.**

**A**

**B**

**C**

**D**

Options :

1. ✘ A

2. ✘ B

3. ✔ C

4. ✘ D

Question Number : 88 Question Id : 7368157564 Question Type : MCQ Option Shuffling : Yes Display Question Number : Yes  
Single Line Question Option : No Option Orientation : Vertical

Correct : 1 Wrong : 0.25

Given below is a sentence which divided into four parts labelled A, B, C, and D. One of these parts contains an error. Choose the part that has the error:

**The safest way/ to double your money is/ to fold it under / and put it in your pocket.**

**A**

**B**

**C**

**D**

Options :

1. ✘ A

2. ✘ B

3. ✔ C

4. ✘ D



Correct : 1 Wrong : 0.25

Given below is a sentence which divided into four parts labelled A, B, C, and D. One of these parts contains an error. Choose the part that has the error:

The safest way/ to double your money is/ to fold it under/ and put it in your pocket.

A

B

C

D

Options :

1. ✘ A

2. ✘ B

3. ✔ C

4. ✘ D

Question Number : 89 Question Id : 7368157565 Question Type : MCQ Option Shuffling : Yes Display Question Number : Yes  
Single Line Question Option : No Option Orientation : Vertical

Correct : 1 Wrong : 0.25

Fill in the blanks with the correct form of idioms /proverbs by choosing the correct option given :

Already a \_\_\_\_\_ bones, she turned \_\_\_\_\_ sheet when she heard the bad news.

Options :

1. ✔ bag of; white as a

2. ✘ clutch of; red as a

3. ✘ group of; blue as a

4. ✘ packet of; blank as a

Question Number : 89 Question Id : 7368157565 Question Type : MCQ Option Shuffling : Yes Display Question Number : Yes  
Single Line Question Option : No Option Orientation : Vertical

Correct : 1 Wrong : 0.25

Fill in the blanks with the correct form of idioms /proverbs by choosing the correct option given:

Already a \_\_\_\_\_ bones, she turned \_\_\_\_\_ sheet when she heard the bad news.

Options :

1. ✔ bag of; white as a

2. ✘ clutch of; red as a

3. ✘ group of; blue as a

4. ✘ packet of; blank as a



Question Number : 90 Question Id : 7368157566 Question Type : MCQ Option Shuffling : Yes Display Question Number : Yes  
Single Line Question Option : No Option Orientation : Vertical

Correct : 1 Wrong : 0.25

Fill in the blanks with the correct form of idioms /proverbs by choosing the correct option given :

He was not only \_\_\_\_\_ but he was used to making claims that \_\_\_\_\_.

Options :

1. ✘ an eye on the face; he was an ear on the face
2. ✘ a leg in the team; he was the boots of the team.
3. ✘ a fool in his head; his head was designed especially for him.
4. ✔ a pain in the neck; didn't have a leg to stand on.

Question Number : 90 Question Id : 7368157566 Question Type : MCQ Option Shuffling : Yes Display Question Number : Yes  
Single Line Question Option : No Option Orientation : Vertical

Correct : 1 Wrong : 0.25

Fill in the blanks with the correct form of idioms /proverbs by choosing the correct option given :

He was not only \_\_\_\_\_ but he was used to making claims that \_\_\_\_\_.

Options :

1. ✘ an eye on the face; he was an ear on the face
2. ✘ a leg in the team; he was the boots of the team.
3. ✘ a fool in his head; his head was designed especially for him.
4. ✔ a pain in the neck; didn't have a leg to stand on.

Question Number : 91 Question Id : 7368157567 Question Type : MCQ Option Shuffling : Yes Display Question Number : Yes  
Single Line Question Option : No Option Orientation : Vertical

Correct : 1 Wrong : 0.25

Complete the sentence below by choosing one related pair of words that will fill in the blanks:

One's \_\_\_\_\_ are what one is, one's \_\_\_\_\_ is what one becomes.

Options :

1. ✔ eyes; mouth
2. ✘ face; nose
3. ✘ ears; ear-rings
4. ✘ nose; moustache

Correct : 1 Wrong : 0.25

Complete the sentence below by choosing one related pair of words that will fill in the blanks:

One's \_\_\_\_\_ are what one is, one's \_\_\_\_\_ is what one becomes.

Options :

1. ✓ eyes; mouth
2. ✗ face; nose
3. ✗ ears; ear-rings
4. ✗ nose; moustache

Question Number : 92 Question Id : 7368157568 Question Type : MCQ Option Shuffling : Yes Display Question Number : Yes  
Single Line Question Option : No Option Orientation : Vertical

Correct : 1 Wrong : 0.25

Complete the sentence below by choosing one related pair of words that will fill in the blanks:

If you'd know the value of \_\_\_\_\_, go and \_\_\_\_\_ some.

Options :

1. ✗ friends; find
2. ✗ mother; see
3. ✓ money; borrow
4. ✗ time; lend

Question Number : 92 Question Id : 7368157568 Question Type : MCQ Option Shuffling : Yes Display Question Number : Yes  
Single Line Question Option : No Option Orientation : Vertical

Correct : 1 Wrong : 0.25

Complete the sentence below by choosing one related pair of words that will fill in the blanks:

If you'd know the value of \_\_\_\_\_, go and \_\_\_\_\_ some.

Options :

1. ✗ friends; find
2. ✗ mother; see
3. ✓ money; borrow
4. ✗ time; lend

Question Number : 93 Question Id : 7368157569 Question Type : MCQ Option Shuffling : Yes Display Question Number : Yes  
Single Line Question Option : No Option Orientation : Vertical

Correct : 1 Wrong : 0.25

A key word is given below. Choose the word closest to it in its meaning {synonym}. Pay attention to how the word would be used to, if required:

*Compose*

Options :

1. ✓ Write
2. ✗ Soothe
3. ✗ Allay
4. ✗ Cool

Question Number : 93 Question Id : 7368157569 Question Type : MCQ Option Shuffling : Yes Display Question Number : Yes  
Single Line Question Option : No Option Orientation : Vertical

Correct : 1 Wrong : 0.25

A key word is given below. Choose the word closest to it in its meaning {synonym}. Pay attention to how the word would be used to, if required:

*Compose*

Options :

1. ✓ Write
2. ✗ Soothe
3. ✗ Allay
4. ✗ Cool

Question Number : 94 Question Id : 7368157570 Question Type : MCQ Option Shuffling : Yes Display Question Number : Yes  
Single Line Question Option : No Option Orientation : Vertical

Correct : 1 Wrong : 0.25

A key word is given below. Choose the word closest to it in its meaning {synonym}. Pay attention to how the word would be used to, if required:

*Barren*

Options :

1. ✓ Arid
2. ✗ Ravage
3. ✗ Vapid
4. ✗ Clear

Question Number : 94 Question Id : 7368157570 Question Type : MCQ Option Shuffling : Yes Display Question Number : Yes  
Single Line Question Option : No Option Orientation : Vertical

Correct : 1 Wrong : 0.25



A key word is given below. Choose the word closest to it in its meaning {synonym}. Pay attention to how the word would be used to, if required:

***Barren***

Options :

1. ✓ Arid
2. ✗ Ravage
3. ✗ Vapid
4. ✗ Clear

Question Number : 95 Question Id : 7368157571 Question Type : MCQ Option Shuffling : Yes Display Question Number : Yes Single Line Question Option : No Option Orientation : Vertical

Correct : 1 Wrong : 0.25

A key word is given below. Choose the word closest to it in its meaning {synonym}. Pay attention to how the word would be used to, if required:

***Coarse***

Options :

1. ✗ Dull
2. ✗ Cruel
3. ✓ Indelicate
4. ✗ Underdone

Question Number : 95 Question Id : 7368157571 Question Type : MCQ Option Shuffling : Yes Display Question Number : Yes Single Line Question Option : No Option Orientation : Vertical

Correct : 1 Wrong : 0.25

A key word is given below. Choose the word closest to it in its meaning {synonym}. Pay attention to how the word would be used to, if required:

***Coarse***

Options :

1. ✗ Dull
2. ✗ Cruel
3. ✓ Indelicate
4. ✗ Underdone

Question Number : 96 Question Id : 7368157572 Question Type : MCQ Option Shuffling : Yes Display Question Number : Yes Single Line Question Option : No Option Orientation : Vertical

Correct : 1 Wrong : 0.25

A key word is given below. Choose the word which indicates the contradictory or opposite meaning {antonym} of the key word:

***Conflict***

Options :

**visit this website [studytosuccess.in](http://studytosuccess.in)**

1. ✘ Serene
2. ✔ Harmony
3. ✘ Yield
4. ✘ Permanence

Question Number : 96 Question Id : 7368157572 Question Type : MCQ Option Shuffling : Yes Display Question Number : Yes  
Single Line Question Option : No Option Orientation : Vertical

Correct : 1 Wrong : 0.25

A key word is given below. Choose the word which indicates the contradictory or opposite meaning {antonym} of the key word:

***Conflict***

Options :

1. ✘ Serene
2. ✔ Harmony
3. ✘ Yield
4. ✘ Permanence

Question Number : 97 Question Id : 7368157573 Question Type : MCQ Option Shuffling : Yes Display Question Number : Yes  
Single Line Question Option : No Option Orientation : Vertical

Correct : 1 Wrong : 0.25

A key word is given below. Choose the word which indicates the contradictory or opposite meaning {antonym} of the key word:

***Accurate***

Options :

1. ✔ Approximate
2. ✘ Immoral
3. ✘ Bogus
4. ✘ Mistaken

Question Number : 97 Question Id : 7368157573 Question Type : MCQ Option Shuffling : Yes Display Question Number : Yes  
Single Line Question Option : No Option Orientation : Vertical

Correct : 1 Wrong : 0.25

A key word is given below. Choose the word which indicates the contradictory or opposite meaning {antonym} of the key word:

***Accurate***

Options :

1. ✔ Approximate
2. ✘ Immoral
3. ✘ Bogus

4. ✘ Mistaken

Question Number : 98 Question Id : 7368157574 Question Type : MCQ Option Shuffling : Yes Display Question Number : Yes  
Single Line Question Option : No Option Orientation : Vertical

Correct : 1 Wrong : 0.25

Given below is a set of four words. One of the four words is spelled wrongly. Choose the word that has been spelled wrongly.

Options :

1. ✘ Angular
2. ✔ Anular
3. ✘ Burglar
4. ✘ Jocular

Question Number : 98 Question Id : 7368157574 Question Type : MCQ Option Shuffling : Yes Display Question Number : Yes  
Single Line Question Option : No Option Orientation : Vertical

Correct : 1 Wrong : 0.25

Given below is a set of four words. One of the four words is spelled wrongly. Choose the word that has been spelled wrongly.

Options :

1. ✘ Angular
2. ✔ Anular
3. ✘ Burglar
4. ✘ Jocular

Question Number : 99 Question Id : 7368157575 Question Type : MCQ Option Shuffling : Yes Display Question Number : Yes  
Single Line Question Option : No Option Orientation : Vertical

Correct : 1 Wrong : 0.25

Given below is a set of four words. One of the four words is spelled wrongly. Choose the word that has been spelled wrongly.

Options :

1. ✔ Diviance
2. ✘ Distance
3. ✘ Elegance
4. ✘ Entrance

Question Number : 99 Question Id : 7368157575 Question Type : MCQ Option Shuffling : Yes Display Question Number : Yes  
Single Line Question Option : No Option Orientation : Vertical

Correct : 1 Wrong : 0.25

Given below is a set of four words. One of the four words is spelled wrongly. Choose the word that has been spelled wrongly.

Options :

1. ✔ Diviance



2. ✘ Distance
3. ✘ Elegance
4. ✘ Entrance

Question Number : 100 Question Id : 7368157576 Question Type : MCQ Option Shuffling : Yes Display Question Number : Yes  
Single Line Question Option : No Option Orientation : Vertical

Correct : 1 Wrong : 0.25

Given below is a set of four words. Choose the word with the CORRECT spelling:

Options :

1. ✘ Corect
2. ✔ Direct
3. ✘ Resurrect
4. ✘ Errect

Question Number : 100 Question Id : 7368157576 Question Type : MCQ Option Shuffling : Yes Display Question Number : Yes  
Single Line Question Option : No Option Orientation : Vertical

Correct : 1 Wrong : 0.25

Given below is a set of four words. Choose the word with the CORRECT spelling.

Options :

1. ✘ Corect
2. ✔ Direct
3. ✘ Resurrect
4. ✘ Errect

#### General Intelligence

Section Id :	736815147
Section Number :	3
Section type :	Online
Mandatory or Optional:	Mandatory
Number of Questions:	50
Number of Questions to be attempted:	50
Section Marks:	50
Display Number Panel:	Yes
Group All Questions:	No

Sub-Section Number:	1
Sub-Section Id:	736815223
Question Shuffling Allowed :	Yes

Question Number : 101 Question Id : 7368157577 Question Type : MCQ Option Shuffling : Yes Display Question Number : Yes  
Single Line Question Option : No Option Orientation : Vertical

Correct : 1 Wrong : 0.25

Read the following information carefully and then answer the questions given below it.

Following are the conditions for selecting coordinator for a training programmer on Labor Relations. The candidate must:

- A. Be a post-graduate in Psychology or in Personnel Management
- B. Have worked as Personnel Manager in an organization for at least 10 years or been teaching in a university/an institute for at least 6 years
- C. Have worked as guest speaker in similar programme
- D. Not be less than 40 years as on 1st April, 1994.

The case of candidate who satisfies all the conditions except:

- I. at B above but has obtained Ph.D in one of the fields A and has at least 5 years work experience of 3 years experience should be referred to Deputy Director
- II. at C above but has more than 7 years teaching experience should be referred to Director
- III. at D above but has working experience of at least 5 years in an American company may be selected.

These cases are given to you as on 1st April, 1994.

Q: Pushpa Osha is Ph.D in Personnel Management and has been teaching in an Institute for last 10 years. She has worked as a guest speaker in a similar programme and was born on 26th Aug, 1951.

Options :

- 1. ✘ Refer to Director
- 2. ✘ Refer to Deputy Director
- 3. ✘ Do not select
- 4. ✔ Do nothing

Question Number : 101 Question Id : 7368157577 Question Type : MCQ Option Shuffling : Yes Display Question Number : Yes Single Line Question Option : No Option Orientation : Vertical

Correct : 1 Wrong : 0.25

निम्नलिखित वाक्यांश को ध्यानपूर्वक पढ़िए और दिये गए प्रश्नों के उत्तर दीजिये:

श्रम संबंधों के प्रशिक्षण प्रोग्रामर में समन्वयक के चयन के लिए निम्नलिखित शर्तें दी गई हैं :

- A. मनोविज्ञान में या कार्मिक प्रबंधन में स्नातकोत्तर होना चाहिए।
  - B. किसी संगठन में कार्मिक प्रबंधक के तौर पर 10 साल अनुभव या किसी महाविद्यालय में 6 साल पढ़ाने का अनुभव होना चाहिए।
  - C. समान कार्यक्रम में अतिथि वक्ता के रूप में कार्य किया हो।
  - D. 1 अप्रैल 1994, तक 40 वर्ष से कम उम्र ना हो।
- पदाभिलाषी को इन शर्तों के अतिरिक्त निम्नलिखित शर्तोंको भी को संतुष्ट करना चाहिए।
- I. ऊपर दिये गए B परन्तु A में से किसी भी एक क्षेत्र में पी.एच.डी. हासिल की हो, उसे उप संचालक के पास भेजा जाए
  - II. ऊपर दिए गए C परन्तु 7 साल से ज्यादा के अध्यापन अनुभव कि स्थिति में संचालक के पास भेजा जाए
  - III. ऊपर दिये गए D परन्तु अमरीकी कंपनी में कम से कम 5 साल के कार्यानुभव की स्थिति में उसे चुना जाए

ये सभी जानकारियाँ आपको 1 अप्रैल 1994 को प्रदान की गई हैं

Q: पुष्पा ओशा ने कार्मिक प्रबंधन में पी.एच.डी. की है और वह एक संस्था में पिछले 10 सालों से पढ़ा रही हैं। उन्होंने इस प्रकार कार्यक्रमों में अतिथि वक्ता के रूप में कार्य किया है एवं उनका जन्म 26 अगस्त 1951 को हुआ था।

Options :

1. ✘ निदेशक के पास भेजा जाए
2. ✘ उप निदेशक के पास भेजा जाए
3. ✘ चुना नहीं जाए
4. ✔ कुछ मत करें

Question Number : 102 Question Id : 7368157578 Question Type : MCQ Option Shuffling : Yes Display Question Number : Yes Single Line Question Option : No Option Orientation : Vertical

Correct : 1 Wrong : 0.25



Read the following information carefully and then answer the questions given below it.

Following are the conditions for selecting coordinator for a training programmer on Labor Relations. The candidate must:

- A. Be a post-graduate in Psychology or in Personnel Management
- B. Have worked as Personnel Manager in an organization for at least 10 years or been teaching in a university/an institute for at least 6 years
- C. Have worked as guest speaker in similar programme
- D. Not be less than 40 years as on 1st April, 1994.

The case of candidate who satisfies all the conditions except:

- I. at B above but has obtained Ph.D in one of the fields A and has at least 5 years work experience of 3 years experience should be referred to Deputy Director
- II. at C above but has more than 7 years teaching experience should be referred to Director
- III. at D above but has working experience of at least 5 years in an American company may be selected.

These cases are given to you as on 1st April, 1994.

Q: Sushree Sangita is a post-graduate in Psychology and has been teaching for last 15 years. She has not worked as guest speaker in similar programmes in the past.

Options :

- 1. ✓ Data inadequate
- 2. ✗ Select
- 3. ✗ Refer to Director
- 4. ✗ Don't select

Question Number : 102 Question Id : 7368157578 Question Type : MCQ Option Shuffling : Yes Display Question Number : Yes  
Single Line Question Option : No Option Orientation : Vertical

Correct : 1 Wrong : 0.25

निम्नलिखित वाक्यांश को ध्यानपूर्वक पढ़िए और दिये गए प्रश्नों के उत्तर दीजिये:

श्रम संबंधों के प्रशिक्षण प्रोग्रामर में समन्वयक के चयन के लिए निम्नलिखित शर्तें दी गई हैं :

- A. मनोविज्ञान में या कार्मिक प्रबंधन में स्नातकोत्तर होना चाहिए।
  - B. किसी संगठन में कार्मिक प्रबंधक के तौर पर 10 साल अनुभव या किसी महाविद्यालय में 6 साल पढ़ाने का अनुभव होना चाहिए।
  - C. समान कार्यक्रम में अतिथि वक्ता के रूप में कार्य किया हो।
  - D. 1 अप्रैल 1994, तक 40 वर्ष से कम उम्र ना हो।
- पदाभिलाषी को इन शर्तों के अतिरिक्त निम्नलिखित शर्तोंको भी को संतुष्ट करना चाहिए।
- I. ऊपर दिये गए B परन्तु A में से किसी भी एक क्षेत्र में पी.एच.डी. हासिल की हो, उसे उप संचालक के पास भेजा जाए।
  - II. ऊपर दिए गए C परन्तु 7 साल से ज्यादा के अध्यापन अनुभव कि स्थिति में संचालक के पास भेजा जाए।
  - III. ऊपर दिये गए D परन्तु अमरीकी कंपनी में कम से कम 5 साल के कार्यानुभव की स्थिति में उसे चुना जाए।

Q: सुश्री संगीता मनोविज्ञान में स्नातकोत्तर हैं और पिछले 15 साल से पढ़ा रही हैं। उन्होंने इस प्रकार के कार्यक्रमों में अतिथि वक्ता के रूप में कार्य नहीं किया है।

Options :

- 1. ✓ अपर्याप्त जानकारी
- 2. ✗ चुनी जाए
- 3. ✗ निदेशक के पास भेजा जाए
- 4. ✗ चुनी नहीं जाए

Question Number : 103 Question Id : 7368157579 Question Type : MCQ Option Shuffling : Yes Display Question Number : Yes  
Single Line Question Option : No Option Orientation : Vertical

Correct : 1 Wrong : 0.25



Read the following information carefully and then answer the questions given below it.

Following are the conditions for selecting coordinator for a training programmer on Labor Relations. The candidate must:

- A. Be a post-graduate in Psychology or in Personnel Management
- B. Have worked as Personnel Manager in an organization for at least 10 years or been teaching in a university/an institute for at least 6 years
- C. Have worked as guest speaker in similar programme
- D. Not be less than 40 years as on 1st April, 1994.

The case of candidate who satisfies all the conditions except:

- I. at B above but has obtained Ph.D in one of the fields A and has at least 5 years work experience of 3 years experience should be referred to Deputy Director
- II. at C above but has more than 7 years teaching experience should be referred to Director
- III. at D above but has working experience of at least 5 years in an American company may be selected.

These cases are given to you as on 1st April, 1994.

Q: Abhishek Sinha is Ph.D in Psychology and has been working in an organization for last 6 years as a Personnel Manager and has worked as guest speaker in similar programmes in the past. His date of birth is 27th June, 1952.

Options :

- 1. ✘ Refer to Director
- 2. ✘ Select
- 3. ✔ Refer to Deputy Director
- 4. ✘ Don't select

Question Number : 103 Question Id : 7368157579 Question Type : MCQ Option Shuffling : Yes Display Question Number : Yes  
Single Line Question Option : No Option Orientation : Vertical

Correct : 1 Wrong : 0.25



निम्नलिखित वाक्यांश को ध्यानपूर्वक पढ़िए और दिये गए प्रश्नों के उत्तर दीजिये:

श्रम संबंधों के प्रशिक्षण प्रोग्रामर में समन्वयक के चयन के लिए निम्नलिखित शर्तें दी गई हैं :

- A. मनोविज्ञान में या कार्मिक प्रबंधन में स्नातकोत्तर होना चाहिए।
  - B. किसी संगठन में कार्मिक प्रबंधक के तौर पर 10 साल अनुभव या किसी महाविद्यालय में 6 साल पढ़ाने का अनुभव होना चाहिए।
  - C. समान कार्यक्रम में अतिथि वक्ता के रूप में कार्य किया हो।
  - D. 1 अप्रैल 1994, तक 40 वर्ष से कम उम्र ना हो।
- पदाभिलाषी को इन शर्तों के अतिरिक्त निम्नलिखित शर्तोंको भी को संतुष्ट करना चाहिए।
- I. ऊपर दिये गए B परन्तु A में से किसी भी एक क्षेत्र में पी.एच.डी. हासिल की हो, उसे उप संचालक के पास भेजा जाए।
  - II. ऊपर दिए गए C परन्तु 7 साल से ज्यादा के अध्यापन अनुभव कि स्थिति में संचालक के पास भेजा जाए।
  - III. ऊपर दिये गए D परन्तु अमरीकी कंपनी में कम से कम 5 साल के कार्यानुभव की स्थिति में उसे चुना जाए।

ये सभी जानकारियाँ आपको 1 अप्रैल 1994 को प्रदान की गई हैं।

Q: अभिषेक सिन्हा ने मनोविज्ञान में पीएचडी की है एवं एक संस्था में पिछले 6 सालों से एक कार्मिक प्रबंधक के रूप में कार्यरत हैं और पहले भी इसी प्रकार के कार्यक्रमों में अतिथि वक्ता के रूप में भी कार्य कर चुके हैं। उनकी जन्मतिथि 27 जून 1952 है।

Options :

1. ✘ निदेशक के पास भेजे
2. ✘ चुना जाए
3. ✔ उप निदेशक के पास भेजे
4. ✘ चुना नहीं जाए

Question Number : 104 Question Id : 7368157580 Question Type : MCQ Option Shuffling : Yes Display Question Number : Yes  
Single Line Question Option : No Option Orientation : Vertical

Correct : 1 Wrong : 0.25

Read the following information carefully and then answer the questions given below it.

Following are the conditions for selecting coordinator for a training programmer on Labor Relations. The candidate must:

- A. Be a post-graduate in Psychology or in Personnel Management
- B. Have worked as Personnel Manager in an organization for at least 10 years or been teaching in a university/an institute for at least 6 years
- C. Have worked as guest speaker in similar programme
- D. Not be less than 40 years as on 1st April, 1994.

The case of candidate who satisfies all the conditions except:

- I. at B above but has obtained Ph.D in one of the fields A and has at least 5 years work experience of 3 years experience should be referred to Deputy Director
- II. at C above but has more than 7 years teaching experience should be referred to Director
- III. at D above but has working experience of at least 5 years in an American company may be selected.

These cases are given to you as on 1st April, 1994.

Q: Pulkit Samrat is a Post-graduate in Personnel Management and was born on 15th Jan, 1950. He has been working in a company for the last 12 years as Personnel Manager.

Options :

- 1. ✘ Refer to Director
- 2. ✘ Refer to Deputy Director
- 3. ✘ Select
- 4. ✔ Do nothing

Question Number : 104 Question Id : 7368157580 Question Type : MCQ Option Shuffling : Yes Display Question Number : Yes  
Single Line Question Option : No Option Orientation : Vertical

Correct : 1 Wrong : 0.25



निम्नलिखित वाक्यांश को ध्यानपूर्वक पढ़िए और दिये गए प्रश्नों के उत्तर दीजिये:

श्रम संबंधों के प्रशिक्षण प्रोग्रामर में समन्वयक के चयन के लिए निम्नलिखित शर्तें दी गई हैं :

- A. मनोविज्ञान में या कार्मिक प्रबंधन में स्नातकोत्तर होना चाहिए।
  - B. किसी संगठन में कार्मिक प्रबंधक के तौर पर 10 साल अनुभव या किसी महाविद्यालय में 6 साल पढ़ाने का अनुभव होना चाहिए।
  - C. समान कार्यक्रम में अतिथि वक्ता के रूप में कार्य किया हो।
  - D. 1 अप्रैल 1994, तक 40 वर्ष से कम उम्र ना हो।
- पदाभिलाषी को इन शर्तों के अतिरिक्त निम्नलिखित शर्तोंको भी को संतुष्ट करना चाहिए।
- I. ऊपर दिये गए B परन्तु A में से किसी भी एक क्षेत्र में पी.एच.डी. हासिल की हो, उसे उप संचालक के पास भेजा जाए।
  - II. ऊपर दिए गए C परन्तु 7 साल से ज्यादा के अध्यापन अनुभव कि स्थिति में संचालक के पास भेजा जाए।
  - III. ऊपर दिये गए D परन्तु अमरीकी कंपनी में कम से कम 5 साल के कार्यानुभव की स्थिति में उसे चुना जाए।

ये सभी जानकारियाँ आपको 1 अप्रैल 1994 को प्रदान की गई हैं।

Q: पुलकित सम्राट कार्मिक प्रबंधन में स्नातकोत्तर हैं एवं उनका जन्म 15 जनवरी 1950 को हुआ। वे एक कंपनी में पिछले 12 सालों से कार्मिक प्रबंधक के रूप में कार्यरत हैं।

Options :

1. ✘ निदेशक के पास भेजा जाए
2. ✘ उप निदेशक के पास भेजा जाए
3. ✘ चुना जाए
4. ✔ कुछ मत करें

Question Number : 105 Question Id : 7368157581 Question Type : MCQ Option Shuffling : Yes Display Question Number : Yes Single Line Question Option : No Option Orientation : Vertical

Correct : 1 Wrong : 0.25

Statement: Private jobs in rural areas have more reward and incentive system?

Argument 1: Rewards and incentives are essential for attracting people there.

Argument 2: Rural areas are already cheaper, hence no requirement of rewards and other incentives.

Options :

1. ✔ Argument 1 is strong



2. ✘ Argument 2 is strong
3. ✘ Both the Arguments are strong
4. ✘ Neither of the Arguments are strong

Question Number : 105 Question Id : 7368157581 Question Type : MCQ Option Shuffling : Yes Display Question Number : Yes  
Single Line Question Option : No Option Orientation : Vertical

Correct : 1 Wrong : 0.25

कथन: ग्रामीण क्षेत्रों में निजी नौकरियों में पुरस्कार और प्रोत्साहन प्रणाली ज्यादा होती है।

तर्क 1: वहाँ पर पुरस्कार और प्रोत्साहन लोगों को आकर्षित करने के लिए आवश्यक हैं।

तर्क 2: ग्रामीण क्षेत्र पहले से ही सस्ते हैं इसलिए पुरस्कार और अन्य प्रोत्साहन की कोई जरूरत नहीं है।

Options :

1. ✔ तर्क 1 ठोस है
2. ✘ तर्क 2 ठोस है
3. ✘ दोनों तर्क ठोस हैं
4. ✘ कोई भी तर्क ठोस नहीं हैं

Question Number : 106 Question Id : 7368157582 Question Type : MCQ Option Shuffling : Yes Display Question Number : Yes  
Single Line Question Option : No Option Orientation : Vertical

Correct : 1 Wrong : 0.25

Statement: Information Technology should be made a compulsory subject for all the students in school?

Argument 1: We need not follow Western practice.

Argument 2: We cannot compete in the society without equipping our children with knowledge of IT.

Options :

1. ✘ Argument 1 is strong
2. ✔ Argument 2 is strong
3. ✘ Both the Arguments are strong
4. ✘ Neither of the Arguments are strong

Question Number : 106 Question Id : 7368157582 Question Type : MCQ Option Shuffling : Yes Display Question Number : Yes  
Single Line Question Option : No Option Orientation : Vertical

Correct : 1 Wrong : 0.25

कथन: क्या सूचना प्रौद्योगिकी (Information Technology) को विद्यालयों में सभी छात्रों के लिए एक अनिवार्य विषय बनाया जाना चाहिए?

तर्क 1: हमें पश्चिमी सभ्यता का पालन करने की जरूरत नहीं है।

तर्क 2: हम समाज में प्रतिस्पर्धा तब तक नहीं कर सकते जब तक हम अपने बच्चों को आई.टी. का पूरा ज्ञान नहीं दे देते।

Options :

1. ✘ तर्क 1 ठोस है
2. ✔ तर्क 2 ठोस है
3. ✘ दोनों तर्क ठोस हैं
4. ✘ कोई भी तर्क ठोस नहीं है

Question Number : 107 Question Id : 7368157583 Question Type : MCQ Option Shuffling : Yes Display Question Number : Yes Single Line Question Option : No Option Orientation : Vertical

Correct : 1 Wrong : 0.25

कथन: एकल परिवार संयुक्त परिवारों से ज्यादा लाभदायक होते हैं?

तर्क 1: संयुक्त परिवारों में सुरक्षा की अधिक चेतनता होती है।

तर्क 2: एकल परिवारों में आजादी की अधिक चेतनता होती है।

Options :

1. ✘ तर्क 1 ठोस है
2. ✘ तर्क 2 ठोस है
3. ✔ दोनों तर्क ठोस हैं
4. ✘ कोई भी तर्क ठोस नहीं है

Question Number : 107 Question Id : 7368157583 Question Type : MCQ Option Shuffling : Yes Display Question Number : Yes Single Line Question Option : No Option Orientation : Vertical

Correct : 1 Wrong : 0.25

Statement: Nuclear families have a better advantage over joint families?

Argument 1: There is more sense of security in joint families.

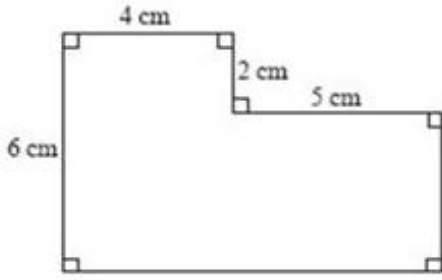
Argument 2: There is more sense of freedom in nuclear families.

Options :

1. ✘ Argument 1 is strong
2. ✘ Argument 2 is strong
3. ✔ Both the Arguments are strong
4. ✘ Neither of the Arguments are strong

Correct : 1 Wrong : 0.25

Find the area of the below figure.



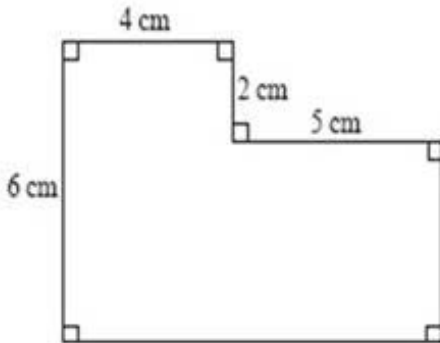
Options :

1. ✓ 35 cm<sup>2</sup>
2. ✗ 40 cm<sup>2</sup>
3. ✗ 44 cm<sup>2</sup>
4. ✗ 41 cm<sup>2</sup>

Note: For this question, discrepancy is found in question/answer. Full Marks is being awarded to all candidates.

Correct : 1 Wrong : 0.25

दी गई आकृति का क्षेत्रफल ज्ञात कीजिये:



Options :

1. ✓ 35 वर्ग से.मी.
2. ✗ 40 वर्ग से.मी.
3. ✗ 44 वर्ग से.मी.
4. ✗ 41 वर्ग से.मी.

Note: For this question, discrepancy is found in question/answer. Full Marks is being awarded to all candidates.

Correct : 1 Wrong : 0.25

Ms. Toshalika likes to let her students choose who their partners will be; however, no pair of students may work together more than seven class periods in a row.

Akash and Bijay have studied together seven class periods in a row. Carter and Dave have worked together three class periods in a row. Carter does not want to work with Akash.

Who should be assigned to work with Bijay?

Options :

[visit this website studytosuccess.in](http://studytosuccess.in)



1. ✓ Carter
2. ✗ Akash
3. ✗ Dave
4. ✗ Toshalika

Question Number : 109 Question Id : 7368157585 Question Type : MCQ Option Shuffling : Yes Display Question Number : Yes  
Single Line Question Option : No Option Orientation : Vertical

Correct : 1 Wrong : 0.25

कु. तोशिलिका अपने छात्रों को अपना साथी चुनने का अवसर प्रदान करती है; मगर छात्रों की कोई भी जोड़ी लगातार सात से ज्यादा कक्षा अवधि (class periods) में कार्य नहीं कर पाती।

आकाश और विजय ने लगातार सात कक्षा अवधि में पढ़ाई की। कार्टर और देव ने एक साथ तीन कक्षा अवधि तक ही कार्य किया। कार्टर आकाश के साथ काम नहीं करना चाहता। विजय के साथ काम करने के लिए किसे चुना जाना चाहिए?

Options :

1. ✓ कार्टर
2. ✗ आकाश
3. ✗ देव
4. ✗ तोशिलिका

Question Number : 110 Question Id : 7368157586 Question Type : MCQ Option Shuffling : Yes Display Question Number : Yes  
Single Line Question Option : No Option Orientation : Vertical

Correct : 1 Wrong : 0.25

Find the area of the semicircle whose radius is 30cm?

Options :

1. ✗ 3789 cm<sup>2</sup>
2. ✗ 2300 cm<sup>2</sup>
3. ✗ 2410 cm<sup>2</sup>
4. ✓ 1410 cm<sup>2</sup>

Question Number : 110 Question Id : 7368157586 Question Type : MCQ Option Shuffling : Yes Display Question Number : Yes  
Single Line Question Option : No Option Orientation : Vertical

Correct : 1 Wrong : 0.25

उस अर्धवृत्त का क्षेत्रफल ज्ञात करें जिसकी त्रिज्या 30 से.मी. है।

Options :

1. ✗ 3789 वर्ग से.मी.
2. ✗ 2300 वर्ग से.मी.
3. ✗ 2410 वर्ग से.मी.
4. ✓ 1410 वर्ग से.मी.

Question Number : 111 Question Id : 7368157587 Question Type : MCQ Option Shuffling : Yes Display Question Number : Yes  
Single Line Question Option : No Option Orientation : Vertical

Correct : 1 Wrong : 0.25

If quotient is 603, divisor is 324 and remainder is 57 then what will be the dividend?

Options :

1. ✓ 195429
2. ✗ 189665
3. ✗ 186000
4. ✗ 106783

Question Number : 111 Question Id : 7368157587 Question Type : MCQ Option Shuffling : Yes Display Question Number : Yes  
Single Line Question Option : No Option Orientation : Vertical

Correct : 1 Wrong : 0.25

अगर भागफल 603, भाजक 324 और शेषफल 57 है, तो भाज्य क्या होगा?

Options :

1. ✓ 195429
2. ✗ 189665
3. ✗ 186000
4. ✗ 106783

Question Number : 112 Question Id : 7368157588 Question Type : MCQ Option Shuffling : Yes Display Question Number : Yes  
Single Line Question Option : No Option Orientation : Vertical

Correct : 1 Wrong : 0.25

If bag is called grey, green is called blue, blue is called plant, plant is called yellow, yellow is called water and water is called pink, then what is the color of leaf?

Options :

1. ✓ Blue
2. ✗ Plant
3. ✗ Yellow
4. ✗ Water

Question Number : 112 Question Id : 7368157588 Question Type : MCQ Option Shuffling : Yes Display Question Number : Yes  
Single Line Question Option : No Option Orientation : Vertical

Correct : 1 Wrong : 0.25

अगर बैग को भूरा, हरे को नीला, नीले को पौधा, पौधे को पीला, पीले को पानी और पानी को गुलाबी कहते हैं, तो पत्ते का रंग क्या होगा?

Options :

1. ✓ नीला
2. ✗ पौधा
3. ✗ पीला
4. ✗ पानी

Question Number : 113 Question Id : 7368157589 Question Type : MCQ Option Shuffling : Yes Display Question Number : Yes  
Single Line Question Option : No Option Orientation : Vertical

Correct : 1 Wrong : 0.25

You locate an unconscious old man under a table during a fire. What should you do?

Options :

1. ✘ Reassure the old man
2. ✘ Call other people for assistance in the building
3. ✔ Carry the old man outside
4. ✘ See if the old man is breathing

Question Number : 113 Question Id : 7368157589 Question Type : MCQ Option Shuffling : Yes Display Question Number : Yes  
Single Line Question Option : No Option Orientation : Vertical

Correct : 1 Wrong : 0.25

आगजनी की स्थिति में आपको टेबल के नीचे एक वृद्ध आदमी बेहोशी की अवस्था में मिलता है। आपको क्या करना चाहिये?

Options :

1. ✘ वृद्ध आदमी को आश्वस्त करें
2. ✘ सहायता के लिए इमारत में मौजूद अन्य लोगों को बुलाएं
3. ✔ वृद्ध आदमी को बाहर ले जाएं
4. ✘ देखें कि वृद्ध आदमी सास ले रहा है या नहीं

Question Number : 114 Question Id : 7368157590 Question Type : MCQ Option Shuffling : Yes Display Question Number : Yes  
Single Line Question Option : No Option Orientation : Vertical

Correct : 1 Wrong : 0.25

During a flood, the superior officer asks a junior level officer to use a certain type of rescue boat. The junior level officer feels that a different type of rescue boat should be used. What should he do?

Options :

1. ✘ Use the rescue boat that he himself thinks is right for the job
2. ✘ Ask the officer to explain why they chose that type of rescue boat
3. ✔ Follow orders and once the flood situations become good, ask for an explanation
4. ✘ Tell the senior officer that they should have chosen the other rescue boat

Question Number : 114 Question Id : 7368157590 Question Type : MCQ Option Shuffling : Yes Display Question Number : Yes  
Single Line Question Option : No Option Orientation : Vertical

Correct : 1 Wrong : 0.25



बाढ़ के दौरान, एक उच्च-अधिकारी ने कनिष्ठ स्तर के अधिकारी को किसी विशेष तरह की बचाव नौका के प्रयोग के लिए कहा। कनिष्ठ स्तर के अधिकारी को लगता है कि किसी अन्य प्रकार की नौका का इस्तेमाल किया जाना चाहिए। ऐसी स्थिति में उसे क्या करना चाहिए?

Options :

1. ✘ उसी बचाव नौका का प्रयोग करे जो उसे इस काम के लिए सही लगे
2. ✘ अधिकारी से पूछे कि उन्होंने इस तरह की बचाव नौका का चयन क्यों किया
3. ✔ निर्देश का पालन करें और जैसे ही बाढ़ की स्थिति सही हो जाए, स्पष्टीकरण मांगें
4. ✘ उच्च अधिकारी से कहें कि उन्हें दूसरी बचाव नौका का चुनाव करना चाहिए था

Question Number : 115 Question Id : 7368157591 Question Type : MCQ Option Shuffling : Yes Display Question Number : Yes  
Single Line Question Option : No Option Orientation : Vertical

Correct : 1 Wrong : 0.25

Find the value of X.

$$X^2+1245=5879$$

Options :

1. ✘ A. 67.09
2. ✘ B. 65.89
3. ✔ C. 68.07
4. ✘ D. 63.12

Question Number : 115 Question Id : 7368157591 Question Type : MCQ Option Shuffling : Yes Display Question Number : Yes  
Single Line Question Option : No Option Orientation : Vertical

Correct : 1 Wrong : 0.25

X का मान ज्ञात करें:

$$X^2+1245=5879$$

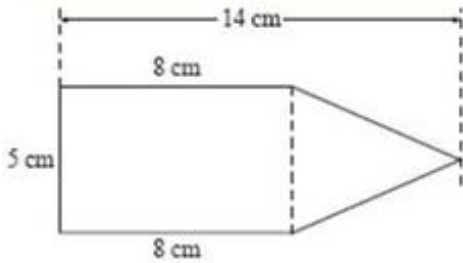
Options :

1. ✘ 67.09
2. ✘ 65.89
3. ✔ 68.07
4. ✘ 63.12

Question Number : 116 Question Id : 7368157592 Question Type : MCQ Option Shuffling : Yes Display Question Number : Yes  
Single Line Question Option : No Option Orientation : Vertical

Correct : 1 Wrong : 0.25

**Join Telegram More Update Note: All previous year Exam paper provides**  
Calculate the area of the following figure:



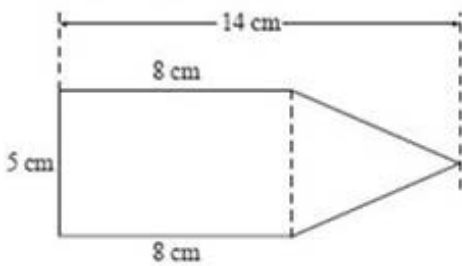
Options :

1. ✘  $51 \text{ cm}^2$
2. ✘  $50 \text{ cm}^2$
3. ✘  $38 \text{ cm}^2$
4. ✔  $55 \text{ cm}^2$

Question Number : 116 Question Id : 7368157592 Question Type : MCQ Option Shuffling : Yes Display Question Number : Yes  
Single Line Question Option : No Option Orientation : Vertical

Correct : 1 Wrong : 0.25

नीचे दी गई आकृति का क्षेत्रफल ज्ञात कीजिये :



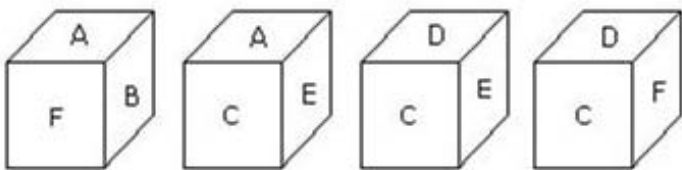
Options :

1. ✘ 51 वर्ग से.मी.
2. ✘ 50 वर्ग से.मी.
3. ✘ 38 वर्ग से.मी.
4. ✔ 55 वर्ग से.मी.

Question Number : 117 Question Id : 7368157593 Question Type : MCQ Option Shuffling : Yes Display Question Number : Yes  
Single Line Question Option : No Option Orientation : Vertical

Correct : 1 Wrong : 0.25

Carefully observe the given four positions of cubes and find which alphabet will be on the face opposite to the face marked as 'A'?



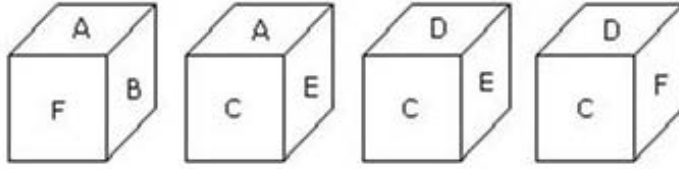
Options :

1. ✔ D
2. ✘ B
3. ✘ C

Question Number : 117 Question Id : 7368157593 Question Type : MCQ Option Shuffling : Yes Display Question Number : Yes  
Single Line Question Option : No Option Orientation : Vertical

Correct : 1 Wrong : 0.25

दिये गए घन की चार स्थितियों को ध्यान से देखिये और A से चिन्हित पृष्ठ के विपरीत पृष्ठ पर आने वाले अक्षर को ज्ञात कीजिये:



Options :

1. ✔ D
2. ✘ B
3. ✘ C
4. ✘ F

Question Number : 118 Question Id : 7368157594 Question Type : MCQ Option Shuffling : Yes Display Question Number : Yes  
Single Line Question Option : No Option Orientation : Vertical

Correct : 1 Wrong : 0.25

A dice is numbered from G to L in different ways.

If G is adjacent to H, J and L, then which of the following statements is necessarily true?

Options :

1. ✘ H is opposite to L
2. ✘ G is adjacent to I
3. ✔ I is adjacent to K
4. ✘ I is opposite to K

Question Number : 118 Question Id : 7368157594 Question Type : MCQ Option Shuffling : Yes Display Question Number : Yes  
Single Line Question Option : No Option Orientation : Vertical

Correct : 1 Wrong : 0.25

एक पासे (dice) में G से L तक की संख्याओं को अलग अलग तरीकों से अंकित किया गया है, यदि G, H के और J, L के बगल में है, तो दिये गए वाक्यांशों में से कौनसा कथन आवश्यक रूप से सत्य है?

Options :

1. ✘ H, L के विपरीत है
2. ✘ G, I के बगल में है
3. ✔ I, K के बगल में है
4. ✘ I, K के विपरीत है



Correct : 1 Wrong : 0.25

Choose the correct number from the below given alternatives that will complete the series by replacing the?

8, 13, 13, 23, 18, 33, ?

Options :

1. ✘ 24
2. ✘ 25
3. ✔ 23
4. ✘ 27

Question Number : 119 Question Id : 7368157595 Question Type : MCQ Option Shuffling : Yes Display Question Number : Yes  
Single Line Question Option : No Option Orientation : Vertical

Correct : 1 Wrong : 0.25

दिये गए विकल्पों में से उस विकल्प का चयन कीजिये जो नीचे दी हुई श्रेणी में '?' को प्रतिस्थापित करके इसे पूर्ण करे:

8, 13, 13, 23, 18, 33, ?

Options :

1. ✘ 24
2. ✘ 25
3. ✔ 23
4. ✘ 27

Question Number : 120 Question Id : 7368157596 Question Type : MCQ Option Shuffling : Yes Display Question Number : Yes  
Single Line Question Option : No Option Orientation : Vertical

Correct : 1 Wrong : 0.25

Choose the correct number from the below given alternatives that will complete the series by replacing the?

1, 2, 6, 24, ?

Options :

1. ✘ 60
2. ✘ 95
3. ✔ 120
4. ✘ 150

Question Number : 120 Question Id : 7368157596 Question Type : MCQ Option Shuffling : Yes Display Question Number : Yes  
Single Line Question Option : No Option Orientation : Vertical

Correct : 1 Wrong : 0.25

दिये गए विकल्पों में से उस विकल्प का चयन कीजिये जो नीचे दी हुई श्रेणी में '?' को प्रतिस्थापित करके इसे पूर्ण करे:

1, 2, 6, 24, ?

Options :

1. ✘ 60
2. ✘ 95
3. ✔ 120
4. ✘ 150

Question Number : 121 Question Id : 7368157597 Question Type : MCQ Option Shuffling : Yes Display Question Number : Yes  
Single Line Question Option : No Option Orientation : Vertical

Correct : 1 Wrong : 0.25

Introducing a woman, Jaggu said, "She is the only daughter of the mother of my mother." How is Jaggu related to the woman?

Options :

1. ✘ Father
2. ✘ Brother
3. ✔ Nephew
4. ✘ Maternal Uncle

Question Number : 121 Question Id : 7368157597 Question Type : MCQ Option Shuffling : Yes Display Question Number : Yes  
Single Line Question Option : No Option Orientation : Vertical

Correct : 1 Wrong : 0.25

एक औरत का परिचय कराते हुए, जग्गू ने कहा, "ये मेरी माँ की माँ की एकलौती बेटी है"।  
जग्गू का उस औरत से क्या रिश्ता है?

Options :

1. ✘ पिता
2. ✘ भाई
3. ✔ भांजा (Nephew)
4. ✘ मामा

Question Number : 122 Question Id : 7368157598 Question Type : MCQ Option Shuffling : Yes Display Question Number : Yes  
Single Line Question Option : No Option Orientation : Vertical

Correct : 1 Wrong : 0.25

Pointing to Raj, Nakul says, "I am the son of the only son of his grandfather." How Nakul is related to Raj?

Options :

1. ✘ Nephew
2. ✘ Son
3. ✔ Brother
4. ✘ Father

Question Number : 122 Question Id : 7368157598 Question Type : MCQ Option Shuffling : Yes Display Question Number : Yes  
Single Line Question Option : No Option Orientation : Vertical

Correct : 1 Wrong : 0.25

राज की तरफ इशारा करते हुए, नकुल कहता है, "मैं उनके दादा के एकलौते बेटे का बेटा हूँ।" नकुल का राज से क्या रिश्ता है?

Options :

1. ✘ भांजा (Nephew)
2. ✘ बेटा
3. ✔ भाई
4. ✘ पिता

Question Number : 123 Question Id : 7368157599 Question Type : MCQ Option Shuffling : Yes Display Question Number : Yes Single Line Question Option : No Option Orientation : Vertical

Correct : 1 Wrong : 0.25

In a certain code language, if ANGRY is coded as 36974 and DROP is coded as 2715, then DRAGON will be coded as?

Options :

1. ✘ 619327
2. ✔ 273916
3. ✘ 273961
4. ✘ 172396

Question Number : 123 Question Id : 7368157599 Question Type : MCQ Option Shuffling : Yes Display Question Number : Yes Single Line Question Option : No Option Orientation : Vertical

Correct : 1 Wrong : 0.25

किसी सांकेतिक भाषा में यदि ANGRY को 36974 लिखा जाता है और DROP को 2715 लिखा जाता है, तो DRAGON को किस प्रकार लिखा जाएगा?

Options :

1. ✘ 619327
2. ✔ 273916
3. ✘ 273961
4. ✘ 172396

Question Number : 124 Question Id : 7368157600 Question Type : MCQ Option Shuffling : Yes Display Question Number : Yes Single Line Question Option : No Option Orientation : Vertical

Correct : 1 Wrong : 0.25

In a certain code language, if SEVEN is coded as 35756 and FIVE is coded as 8405 and THREE is coded as 21955, then THIRTEEN will be coded as?

Options :

1. ✔ 21492556
2. ✘ 14926552
3. ✘ 21429655
4. ✘ 21465529



Correct : 1 Wrong : 0.25

किसी सांकेतिक भाषा में यदि SEVEN को 35756, FIVE को 8405 और THREE को 21955 लिखा जाता है तो THIRTEEN को किस प्रकार लिखा जाएगा?

Options :

1. ✓ 21492556
2. ✗ 14926552
3. ✗ 21429655
4. ✗ 21465529

Question Number : 125 Question Id : 7368157601 Question Type : MCQ Option Shuffling : Yes Display Question Number : Yes  
Single Line Question Option : No Option Orientation : Vertical

Correct : 1 Wrong : 0.25

Consider the following information :

Let  $\times$  stands for 'addition',  $\div$  stands for 'subtraction',  $+$  stands for 'multiplication' and  $-$  stands for 'division',

Value of  $10 \times 4 \div 4 - 2 + 1 = ?$

Options :

1. ✗ 80
2. ✗ 25
3. ✓ 12
4. ✗ 5

Question Number : 125 Question Id : 7368157601 Question Type : MCQ Option Shuffling : Yes Display Question Number : Yes  
Single Line Question Option : No Option Orientation : Vertical

Correct : 1 Wrong : 0.25

निम्नलिखित जानकारी पर विचार करें:

मान लीजिये यदि ' $\times$ ' को जोड़ने के लिए, ' $\div$ ' को घटाने के लिये, ' $+$ ' को गुणा के लिये और ' $-$ ' को विभाजन के लिये प्रयोग किये जाए, तो  $10 \times 4 \div 4 - 2 + 1 = ?$  का मान क्या होगा?

Options :

1. ✗ 80
2. ✗ 25
3. ✓ 12
4. ✗ 5

Question Number : 126 Question Id : 7368157602 Question Type : MCQ Option Shuffling : Yes Display Question Number : Yes  
Single Line Question Option : No Option Orientation : Vertical

Correct : 1 Wrong : 0.25

Consider the following information:

Let  $-$  means  $\times$ ,  $\times$  means  $+$ ,  $+$  means  $\div$  and  $\div$  means  $-$ ,

Then find the value of  $20 \times 6 + 3 - 7 \div 40$

Options :

visit this website [studytosuccess.in](http://studytosuccess.in)

1. ✓ 7
2. ✗ 3
3. ✗ 2
4. ✗ 1

Note: For this question, discrepancy is found in question/answer. Full Marks is being awarded to all candidates.

Question Number : 126 Question Id : 7368157602 Question Type : MCQ Option Shuffling : Yes Display Question Number : Yes  
Single Line Question Option : No Option Orientation : Vertical

Correct : 1 Wrong : 0.25

निम्नलिखित जानकारी पर विचार करें:

मान लीजिये यदि '-' का अर्थ 'x' है, 'x' का अर्थ '+' है, '+' का अर्थ '÷' है और '÷' का अर्थ '-' है, तो  $20 \times 6 + 3 - 7 \div 40 = ?$  का मान ज्ञात करें:

Options :

1. ✓ 7
2. ✗ 3
3. ✗ 2
4. ✗ 1

Note: For this question, discrepancy is found in question/answer. Full Marks is being awarded to all candidates.

Question Number : 127 Question Id : 7368157603 Question Type : MCQ Option Shuffling : Yes Display Question Number : Yes  
Single Line Question Option : No Option Orientation : Vertical

Correct : 1 Wrong : 0.25

Alisha, Bill, Ginny, Dave, Elina, Ipsha and Smita are sitting in a row facing North

Ipsha is to the immediate right of Elina.

Elina is 4th to the right of Smita.

Ginny is the neighbour of Bill and Dave.

Person who is third to the left of Dave is at one of ends.

Who are to the left of Ginny?

Options :

1. ✗ Only Bill
2. ✗ Ginny, Bill and Dave
3. ✓ Smita and Bill
4. ✗ Dave, Elina, Ipsha and Alisha

Question Number : 127 Question Id : 7368157603 Question Type : MCQ Option Shuffling : Yes Display Question Number : Yes  
Single Line Question Option : No Option Orientation : Vertical

Correct : 1 Wrong : 0.25

अलीशा, बिल, गिन्नी, डेव, एलीना, इप्सा और स्मिता उत्तर की तरफ देखते हुए एक

पंक्ति में बैठे हैं :

इप्सा, एलीना के ठीक दायें तरफ है

एलीना, स्मिता के दायें से चौथे स्थान पर है

गिन्नी, बिल और डेव की पड़ोसी है

डेव के बाएं से तीसरे स्थान पर बैठा हुआ व्यक्ति एक कोने पर है

तो गिन्नी के बाएं तरफ कौन है?

Options :

1. ✘ सिर्फ बिल
2. ✘ गिन्नी, बिल और डेव
3. ✔ स्मिता, बिल और डेव
4. ✘ डेव, एलीना, इप्सा और अलीशा

Question Number : 128 Question Id : 7368157604 Question Type : MCQ Option Shuffling : Yes Display Question Number : Yes  
Single Line Question Option : No Option Orientation : Vertical

Correct : 1 Wrong : 0.25

Alisha, Bill, Ginny, Dave, Elina, Ipsha and Smita are sitting in a row facing North:

Ipsha is to the immediate right of Elina.

Elina is 4th to the right of Smita.

Ginny is the neighbour of Bill and Dave.

Person who is third to the left of Dave is at one of ends.

Which of the following statement is not true?

Options :

1. ✔ Elina is to the immediate left of Dave
2. ✘ Alisha is at one of the ends
3. ✘ Smita is to the immediate left of Bill
4. ✘ Ipsha is second to the right of Dave

Question Number : 128 Question Id : 7368157604 Question Type : MCQ Option Shuffling : Yes Display Question Number : Yes  
Single Line Question Option : No Option Orientation : Vertical

Correct : 1 Wrong : 0.25

अलीशा, बिल, गिन्नी, डेव, एलीना, इप्सा और स्मिता उत्तर की तरफ देखते हुए एक

पंक्ति में बैठे हैं :

इप्सा, एलीना के ठीक दायें तरफ है

एलीना, स्मिता के दायें से चौथे स्थान पर है

गिन्नी, बिल और डेव की पड़ोसी है

डेव के बाएं से तीसरे स्थान पर बैठा हुआ व्यक्ति एक कोने पर है

निम्नलिखित में से कौनसा कथन असत्य है?

Options :



1. ✓ एलीना, डेव के ठीक बाएं तरफ है
2. ✗ अलीशा एक कोने में है
3. ✗ स्मिता बिल के ठीक बाएं तरफ है
4. ✗ इप्सा, डेव के बाएं तरफ से दूसरे स्थान पर है

Question Number : 129 Question Id : 7368157605 Question Type : MCQ Option Shuffling : Yes Display Question Number : Yes  
Single Line Question Option : No Option Orientation : Vertical

Correct : 1 Wrong : 0.25

Alisha, Bill, Ginny, Dave, Elina, Ipsha and Smita are sitting in a row facing North:

Ipsha is to the immediate right of Elina.

Elina is 4th to the right of Smita.

Ginny is the neighbour of Bill and Dave.

Person who is third to the left of Dave is at one of ends.

Who are the neighbours of Bill?

Options :

1. ✗ Ginny and Dave
2. ✓ Ginny and Smita
3. ✗ Smita and Ipsha
4. ✗ Ginny and Elina

Question Number : 129 Question Id : 7368157605 Question Type : MCQ Option Shuffling : Yes Display Question Number : Yes  
Single Line Question Option : No Option Orientation : Vertical

Correct : 1 Wrong : 0.25

अलीशा, बिल, गिन्नी, डेव, एलीना, इप्सा और स्मिता उत्तर की तरफ देखते हुए एक पंक्ति में बैठे हैं:

इप्सा, एलीना के ठीक दायें तरफ है

एलीना, स्मिता के दायें से चौथे स्थान पर है

गिन्नी, बिल और डेव की पड़ोसी है

डेव के बाएं से तीसरे स्थान पर बैठा हुआ व्यक्ति एक कोने पर है

बिल के अगल बगल कौन हैं?

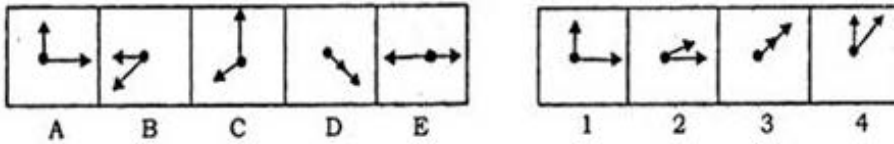
Options :

1. ✗ गिन्नी और डेव
2. ✓ गिन्नी और स्मिता
3. ✗ स्मिता और इप्सा
4. ✗ गिन्नी और एलीना

Question Number : 130 Question Id : 7368157606 Question Type : MCQ Option Shuffling : Yes Display Question Number : Yes  
Single Line Question Option : No Option Orientation : Vertical

Correct : 1 Wrong : 0.25

From the below given alternatives (1),(2),(3) and (4), select a figure that will complete the pattern (A)(B)(C)(D)(E)



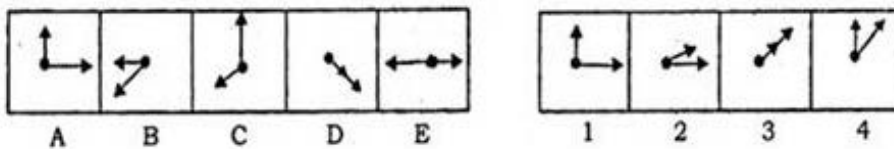
Options :

1. ✘ 1
2. ✘ 2
3. ✘ 3
4. ✔ 4

Question Number : 130 Question Id : 7368157606 Question Type : MCQ Option Shuffling : Yes Display Question Number : Yes Single Line Question Option : No Option Orientation : Vertical

Correct : 1 Wrong : 0.25

नीचे दिये गए विकल्प (1), (2), (3) और (4) में से, उस आकृति का चयन करें जो (A) (B) (C) (D) (E) के प्रतिरूप को पूर्ण करे:



Options :

1. ✘ 1
2. ✘ 2
3. ✘ 3
4. ✔ 4

Question Number : 131 Question Id : 7368157607 Question Type : MCQ Option Shuffling : Yes Display Question Number : Yes Single Line Question Option : No Option Orientation : Vertical

Correct : 1 Wrong : 0.25

Four pair of words are given below, out of which three are alike in some manner and one pair is different.

Which pair is different from the rest?

Options :

1. ✘ Pascal : Pressure
2. ✘ Watt : Power
3. ✘ Ampere : Current
4. ✔ Radian : Degree

Question Number : 131 Question Id : 7368157607 Question Type : MCQ Option Shuffling : Yes Display Question Number : Yes Single Line Question Option : No Option Orientation : Vertical

Correct : 1 Wrong : 0.25

नीचे शब्दों के चार जोड़े दिये गए हैं, जिनमें से तीन किसी विशेष प्रकार से समान हैं और एक असमान है। कौनसा जोड़ा बाकी जोड़ों से अलग है?

Options :

1. ✘ पास्कल : दाब
2. ✘ वाट : शक्ति
3. ✘ एम्पीयर : धारा
4. ✔ रेडियन : डिग्री

Question Number : 132 Question Id : 7368157608 Question Type : MCQ Option Shuffling : Yes Display Question Number : Yes  
Single Line Question Option : No Option Orientation : Vertical

Correct : 1 Wrong : 0.25

Four pair of words are given below, out of which three are alike in some manner and one pair is different. Which pair is different from the rest?

Options :

1. ✘ Stamp : Letter
2. ✘ Ticket : Train
3. ✘ Ink : Pen
4. ✔ Car : Engine

Question Number : 132 Question Id : 7368157608 Question Type : MCQ Option Shuffling : Yes Display Question Number : Yes  
Single Line Question Option : No Option Orientation : Vertical

Correct : 1 Wrong : 0.25

नीचे शब्दों के चार जोड़े दिये गए हैं, जिनमें से तीन किसी विशेष प्रकार से समान हैं और एक असमान है। कौनसा जोड़ा बाकी जोड़ों से अलग है?

Options :

1. ✘ मुहर : पत्र
2. ✘ टिकट : रेल गाडी
3. ✘ स्याही : कलम
4. ✔ कार : इंजन

Question Number : 133 Question Id : 7368157609 Question Type : MCQ Option Shuffling : Yes Display Question Number : Yes  
Single Line Question Option : No Option Orientation : Vertical

Correct : 1 Wrong : 0.25

Four pair of words are given below, out of which three are alike in some manner and one pair is different. Which pair is different from the rest?

Options :

1. ✘ Husband : Wife
2. ✘ Lion : Fox
3. ✘ Dog : Cat



4. ✓ King : Minister

Question Number : 133 Question Id : 7368157609 Question Type : MCQ Option Shuffling : Yes Display Question Number : Yes  
Single Line Question Option : No Option Orientation : Vertical

Correct : 1 Wrong : 0.25

नीचे शब्दों के चार जोड़े दिये गए हैं, जिनमें से तीन किसी विशेष प्रकार से समान हैं और एक असमान है। कौनसा जोड़ा बाकी जोड़ों से अलग है?

Options :

1. ✗ पति : पत्नी
2. ✗ शेर : लोमड़ी
3. ✗ कुत्ता : बिल्ली
4. ✓ राजा : मंत्री

Question Number : 134 Question Id : 7368157610 Question Type : MCQ Option Shuffling : Yes Display Question Number : Yes  
Single Line Question Option : No Option Orientation : Vertical

Correct : 1 Wrong : 0.25

Four pair of words are given below, out of which three are alike in some manner and one pair is different. Which pair is different from the rest?

Options :

1. ✗ Shopkeeper : Customer
2. ✗ Doctor : Patient
3. ✗ Lawyer : Client
4. ✓ Clerk : File

Question Number : 134 Question Id : 7368157610 Question Type : MCQ Option Shuffling : Yes Display Question Number : Yes  
Single Line Question Option : No Option Orientation : Vertical

Correct : 1 Wrong : 0.25

नीचे शब्दों के चार जोड़े दिये गए हैं, जिनमें से तीन किसी विशेष प्रकार से समान हैं और एक असमान है। कौनसा जोड़ा बाकी जोड़ों से अलग है?

Options :

1. ✗ दुकानदार : ग्राहक
2. ✗ चिकित्सक : मरीज़
3. ✗ वकील : मुवक्किल
4. ✓ लिपिक : फ़ाइल

Question Number : 135 Question Id : 7368157611 Question Type : MCQ Option Shuffling : Yes Display Question Number : Yes  
Single Line Question Option : No Option Orientation : Vertical

Correct : 1 Wrong : 0.25

Choose the correct number from the below given alternatives that will complete the series by replacing the?

13, 35, 57, 79, 911, ?

Options :

1. ✘ 1038
2. ✘ 1231
3. ✘ 1112
4. ✔ 1110

Question Number : 135 Question Id : 7368157611 Question Type : MCQ Option Shuffling : Yes Display Question Number : Yes Single Line Question Option : No Option Orientation : Vertical

Correct : 1 Wrong : 0.25

दिये गए विकल्पों में से उस विकल्प का चयन कीजिये जो नीचे दी हुई श्रंखला में '?' की जगह आकर उसे पूर्ण करे:

13, 35, 57, 79, 911, ?

Options :

1. ✘ 1038
2. ✘ 1231
3. ✘ 1112
4. ✔ 1110

Question Number : 136 Question Id : 7368157612 Question Type : MCQ Option Shuffling : Yes Display Question Number : Yes Single Line Question Option : No Option Orientation : Vertical

Correct : 1 Wrong : 0.25

Choose the correct number from the below given alternatives that will complete the series by replacing the?

567, 189, 63, 21, ?

Options :

1. ✘ 6
2. ✔ 7
3. ✘ 5
4. ✘ 4

Question Number : 136 Question Id : 7368157612 Question Type : MCQ Option Shuffling : Yes Display Question Number : Yes Single Line Question Option : No Option Orientation : Vertical

Correct : 1 Wrong : 0.25

दिये गए विकल्पों में से उस विकल्प का चयन कीजिये जो नीचे दी हुई श्रंखला में '?' की जगह आकर उसे पूर्ण करे:

567, 189, 63, 21, ?

Options :

1. ✘ 6
2. ✔ 7

3. ✘ 5

4. ✘ 4

Question Number : 137 Question Id : 7368157613 Question Type : MCQ Option Shuffling : Yes Display Question Number : Yes  
Single Line Question Option : No Option Orientation : Vertical

Correct : 1 Wrong : 0.25

Introducing a man, Meherin said, "He is the father of the only daughter of my son." How that man is related to Meherin?

Options :

1. ✔ Son

2. ✘ Brother-in-law

3. ✘ Husband

4. ✘ Son-in-law

Question Number : 137 Question Id : 7368157613 Question Type : MCQ Option Shuffling : Yes Display Question Number : Yes  
Single Line Question Option : No Option Orientation : Vertical

Correct : 1 Wrong : 0.25

एक आदमी का परिचय कराते हुए मेहरीन ने कहा, "वह मेरे बेटे की एकलौती बेटी का पिता है"। उस आदमी का मेहरीन से क्या रिश्ता है?

Options :

1. ✔ बेटा

2. ✘ साला

3. ✘ पति

4. ✘ दामाद

Question Number : 138 Question Id : 7368157614 Question Type : MCQ Option Shuffling : Yes Display Question Number : Yes  
Single Line Question Option : No Option Orientation : Vertical

Correct : 1 Wrong : 0.25

Pointing to a photograph Aradhya said, "He is the son of the only son of my grandfather." How is the man in the photograph related to Aradhya?

Options :

1. ✔ Brother

2. ✘ Uncle

3. ✘ Son

4. ✘ Father

Question Number : 138 Question Id : 7368157614 Question Type : MCQ Option Shuffling : Yes Display Question Number : Yes  
Single Line Question Option : No Option Orientation : Vertical

Correct : 1 Wrong : 0.25

एक तस्वीर की तरफ इशारा करते हुए, अराध्या ने कहा, "वह मेरे दादा के एकलौते बेटे का बेटा है" तस्वीर में जो पुरुष है उसका अराध्या से क्या रिश्ता है?

Options :

1. ✔ भाई

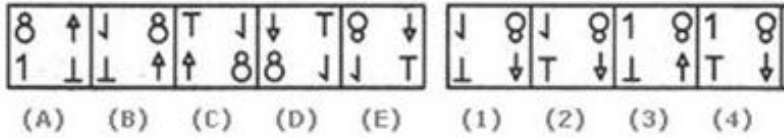


2. ✘ चाचा
3. ✘ बेटा
4. ✘ पिता

Question Number : 139 Question Id : 7368157615 Question Type : MCQ Option Shuffling : Yes Display Question Number : Yes Single Line Question Option : No Option Orientation : Vertical

Correct : 1 Wrong : 0.25

From the below given alternatives (1),(2),(3) and (4), select a figure that will complete the pattern (A)(B)(C)(D)(E)



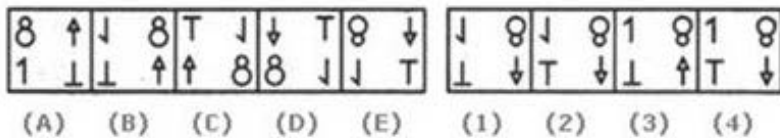
Options :

1. ✘ 1
2. ✘ 2
3. ✘ 3
4. ✔ 4

Question Number : 139 Question Id : 7368157615 Question Type : MCQ Option Shuffling : Yes Display Question Number : Yes Single Line Question Option : No Option Orientation : Vertical

Correct : 1 Wrong : 0.25

नीचे दिए गए विकल्प (1), (2), (3) और (4) में से, उस आकृति का चयन करें जो (A) (B) (C) (D) (E) के पैटर्न को पूरा करे :



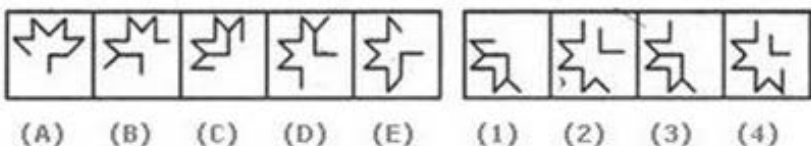
Options :

1. ✘ 1
2. ✘ 2
3. ✘ 3
4. ✔ 4

Question Number : 140 Question Id : 7368157616 Question Type : MCQ Option Shuffling : Yes Display Question Number : Yes Single Line Question Option : No Option Orientation : Vertical

Correct : 1 Wrong : 0.25

From the below given alternatives (1),(2),(3) and (4), select a figure that will complete the pattern (A)(B)(C)(D)(E)



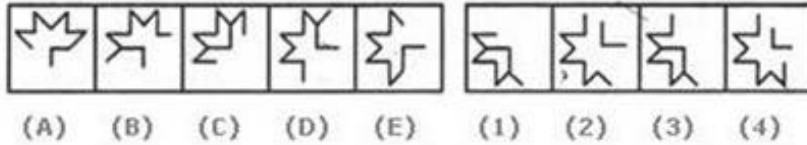
Options :

1. ✘ 1
2. ✘ 2
3. ✔ 3
4. ✘ 4

Question Number : 140 Question Id : 7368157616 Question Type : MCQ Option Shuffling : Yes Display Question Number : Yes  
Single Line Question Option : No Option Orientation : Vertical

Correct : 1 Wrong : 0.25

नीचे दिये गए विकल्प (1), (2), (3) और (4) में से, उस आकृति का चयन करें जो (A) (B) (C) (D) (E) के प्रतिरूप को पूरा करे:



Options :

1. ✘ 1
2. ✘ 2
3. ✔ 3
4. ✘ 4

Question Number : 141 Question Id : 7368157617 Question Type : MCQ Option Shuffling : Yes Display Question Number : Yes  
Single Line Question Option : No Option Orientation : Vertical

Correct : 1 Wrong : 0.25

Consider the following information:

Let if + means  $\div$ ,  $\times$  means  $-$ ,  $\div$  means  $\times$  and  $-$  means  $+$ , then find the value of  $120 + 12 \times 6 \div 3 - 2$

Options :

1. ✘ -12
2. ✔ -6
3. ✘ 12
4. ✘ 20/3

Question Number : 141 Question Id : 7368157617 Question Type : MCQ Option Shuffling : Yes Display Question Number : Yes  
Single Line Question Option : No Option Orientation : Vertical

Correct : 1 Wrong : 0.25

निम्नलिखित जानकारी पर विचार कीजिये:

मान लीजिये यदि '+' का अर्थ ' $\div$ ', 'x' का अर्थ '-', ' $\div$ ' का अर्थ 'x' और '-' का अर्थ '+' है, तो  $120 + 12 \times 6 \div 3 - 2 = ?$  का मान क्या होगा?

Options :

1. ✘ -12
2. ✔ -6
3. ✘ 12

4. ✖ 20/3

Question Number : 142 Question Id : 7368157618 Question Type : MCQ Option Shuffling : Yes Display Question Number : Yes  
Single Line Question Option : No Option Orientation : Vertical

Correct : 1 Wrong : 0.25

Consider the following information:

Let if '+' means 'x', '-' means '÷', 'x' means '-' and '÷' means '+', then what will be the value of  $12 \div 48 - 8 \times 4 + 4 = ?$

Options :

1. ✖ 4
2. ✖ 20
3. ✖ 6
4. ✔ 2

Question Number : 142 Question Id : 7368157618 Question Type : MCQ Option Shuffling : Yes Display Question Number : Yes  
Single Line Question Option : No Option Orientation : Vertical

Correct : 1 Wrong : 0.25

निम्नलिखित जानकारी पर विचार कीजिये :

मान लीजिये यदि '+' का अर्थ 'x', '-' का अर्थ '÷', 'x' का अर्थ '-' और '÷' का अर्थ '+' है, तो  $12 \div 48 - 8 \times 4 + 4 = ?$  का मान ज्ञात कीजिये?

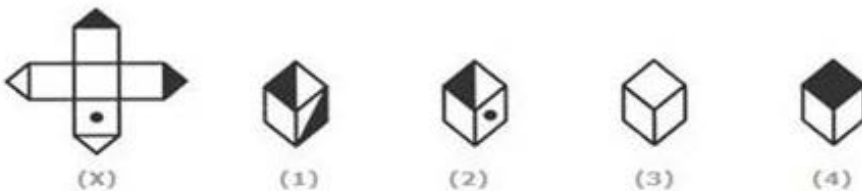
Options :

1. ✖ 4
2. ✖ 20
3. ✖ 6
4. ✔ 2

Question Number : 143 Question Id : 7368157619 Question Type : MCQ Option Shuffling : Yes Display Question Number : Yes  
Single Line Question Option : No Option Orientation : Vertical

Correct : 1 Wrong : 0.25

Carefully observe the given sheet of paper (X). You need to find out the cube from the given alternatives that is formed by using given paper (X)



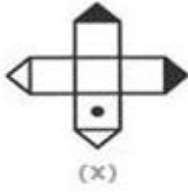
Options :

1. ✖ 1 and 2 only
2. ✖ 2 and 4 only
3. ✔ 2 and 3 only
4. ✖ 1 and 4 only

Question Number : 143 Question Id : 7368157619 Question Type : MCQ Option Shuffling : Yes Display Question Number : Yes  
Single Line Question Option : No Option Orientation : Vertical



कागज़ के ताव (X) को ध्यान से देखिये। आपको दिये गए विकल्पों में से उस घन का पता लगाना है जो ताव (X) के प्रयोग से बना हो?



Options :

1. ✘ केवल 1 और 2
2. ✘ केवल 2 और 4
3. ✔ केवल 2 और 3
4. ✘ केवल 1 और 4

Question Number : 144 Question Id : 7368157620 Question Type : MCQ Option Shuffling : Yes Display Question Number : Yes Single Line Question Option : No Option Orientation : Vertical

Correct : 1 Wrong : 0.25

Consider the following information:

Let if '+' means 'x', '-' means '÷', '÷' means '+' and 'x' means '-', then what will be the value of  $16 \div 64 - 4 \times 4 + 3 = ?$

Options :

1. ✔ 20
2. ✘ 15
3. ✘ 52
4. ✘ 12

Question Number : 144 Question Id : 7368157620 Question Type : MCQ Option Shuffling : Yes Display Question Number : Yes Single Line Question Option : No Option Orientation : Vertical

Correct : 1 Wrong : 0.25

निम्नलिखित जानकारी पर विचार कीजिये :

मान लीजिये यदि '+' का अर्थ 'x', '-' का अर्थ '÷', '÷' का अर्थ '+' और 'x' का अर्थ '-' है, तो  $16 \div 64 - 4 \times 4 + 3 = ?$  का मान ज्ञात कीजिये?

Options :

1. ✔ 20
2. ✘ 15
3. ✘ 52
4. ✘ 12

Question Number : 145 Question Id : 7368157621 Question Type : MCQ Option Shuffling : Yes Display Question Number : Yes Single Line Question Option : No Option Orientation : Vertical

Correct : 1 Wrong : 0.25

Consider the following information:

Let  $\times$  means  $\div$ ,  $-$  means  $\times$ ,  $\div$  means  $+$  and  $+$  means  $-$ , then find the value of

$$(3 - 15 \div 19) \times 8 + 6$$

Options :

1. ✘ 8
2. ✘ 4
3. ✔ 2
4. ✘ -1

Question Number : 145 Question Id : 7368157621 Question Type : MCQ Option Shuffling : Yes Display Question Number : Yes Single Line Question Option : No Option Orientation : Vertical

Correct : 1 Wrong : 0.25

निम्नलिखित जानकारी पर विचार कीजिये :

यदि 'x' का अर्थ ' $\div$ ', '-' का अर्थ ' $\times$ ', ' $\div$ ' का अर्थ '+' और '+' का अर्थ '-' है,

तो  $(3 - 15 \div 19) \times 8 + 6 = ?$  का मान ज्ञात कीजिये?

Options :

1. ✘ 8
2. ✘ 4
3. ✔ 2
4. ✘ -1

Question Number : 146 Question Id : 7368157622 Question Type : MCQ Option Shuffling : Yes Display Question Number : Yes Single Line Question Option : No Option Orientation : Vertical

Correct : 1 Wrong : 0.25

If radius is 5 inch and height is 8 inch, calculate the lateral surface area of cylinder.

Options :

1. ✘ 248.88 sq.inch
2. ✘ 435.23 sq.inch
3. ✔ 251.33 sq.inch
4. ✘ 320 sq.inch

Question Number : 146 Question Id : 7368157622 Question Type : MCQ Option Shuffling : Yes Display Question Number : Yes Single Line Question Option : No Option Orientation : Vertical

Correct : 1 Wrong : 0.25

यदि त्रिज्या 5 इंच है और ऊंचाई 8 इंच है, तो एक बेलन का पार्श्व सतह क्षेत्रफल ज्ञात कीजिये?

Options :

1. ✘ 248.88 वर्ग इंच
2. ✘ 435.23 वर्ग इंच
3. ✔ 251.33 वर्ग इंच

4. ✘ 320 वर्ग इच

Question Number : 147 Question Id : 7368157623 Question Type : MCQ Option Shuffling : Yes Display Question Number : Yes Single Line Question Option : No Option Orientation : Vertical

Correct : 1 Wrong : 0.25

Choose the correct number from the below given alternatives that will complete the series by replacing the ?

5, 12, 26, 54, 110, ?

Options :

1. ✘ 128

2. ✘ 144

3. ✘ 192

4. ✔ 222

Question Number : 147 Question Id : 7368157623 Question Type : MCQ Option Shuffling : Yes Display Question Number : Yes Single Line Question Option : No Option Orientation : Vertical

Correct : 1 Wrong : 0.25

दिए हुए विकल्पों में से उस विकल्प का चयन कीजिये जो नीचे दी हुई श्रंखला में '?' की जगह आकर इसे पूर्ण करे:

5, 12, 26, 54, 110, ?

Options :

1. ✘ 128

2. ✘ 144

3. ✘ 192

4. ✔ 222

Question Number : 148 Question Id : 7368157624 Question Type : MCQ Option Shuffling : Yes Display Question Number : Yes Single Line Question Option : No Option Orientation : Vertical

Correct : 1 Wrong : 0.25

Choose the correct number from the below given alternatives that will complete the series by replacing the ?

34, 33, 49, 74, ?

Options :

1. ✘ 124

2. ✔ 110

3. ✘ 177

4. ✘ 118

Question Number : 148 Question Id : 7368157624 Question Type : MCQ Option Shuffling : Yes Display Question Number : Yes Single Line Question Option : No Option Orientation : Vertical

Correct : 1 Wrong : 0.25



दिए हुए विकल्पों में से उस विकल्प का चयन कीजिये जो नीचे दी हुई श्रृंखला में '?' की

जगह आकर इसे पूर्ण करे:

34, 33, 49, 74, ?

Options :

1. ✘ 124
2. ✔ 110
3. ✘ 177
4. ✘ 118

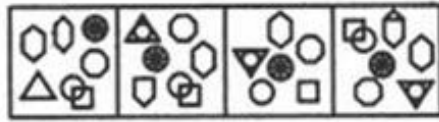
Question Number : 149 Question Id : 7368157625 Question Type : MCQ Option Shuffling : Yes Display Question Number : Yes Single Line Question Option : No Option Orientation : Vertical

Correct : 1 Wrong : 0.25

There are few pieces shown in figure (X). You have to find all those components present from a particular alternative (1),(2),(3),(4) given.



(X)



(1) (2) (3) (4)

Options :

1. ✘ 1
2. ✔ 2
3. ✘ 3
4. ✘ 4

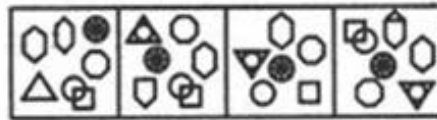
Question Number : 149 Question Id : 7368157625 Question Type : MCQ Option Shuffling : Yes Display Question Number : Yes Single Line Question Option : No Option Orientation : Vertical

Correct : 1 Wrong : 0.25

आकृति (X) में कुछ भाग दिखाए गए हैं। आपको दिए गए (1), (2), (3), (4) विकल्पों में से उस विकल्प को चुनना है जिसमें (X) के सभी भाग हों।



(X)



(1) (2) (3) (4)

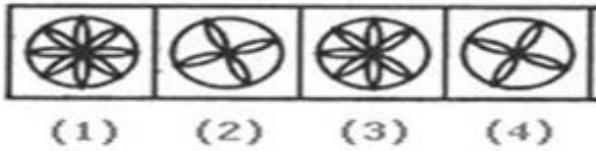
Options :

1. ✘ 1
2. ✔ 2
3. ✘ 3
4. ✘ 4

Question Number : 150 Question Id : 7368157626 Question Type : MCQ Option Shuffling : Yes Display Question Number : Yes Single Line Question Option : No Option Orientation : Vertical

Correct : 1 Wrong : 0.25

Choose the figure from the given alternatives (1),(2),(3) and (4), which is different from the rest.



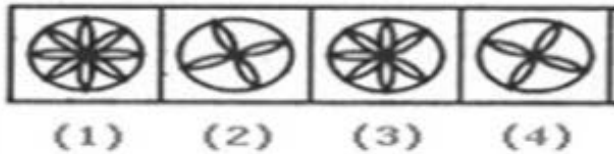
Options :

- 1. ✘ 1
- 2. ✘ 2
- 3. ✔ 3
- 4. ✘ 4

Question Number : 150 Question Id : 7368157626 Question Type : MCQ Option Shuffling : Yes Display Question Number : Yes Single Line Question Option : No Option Orientation : Vertical

Correct : 1 Wrong : 0.25

(1) (2) (3) (4) विकल्पों में से उस आकृति को चुनिये जो दूसरों से भिन्न है:



Options :

- 1. ✘ 1
- 2. ✘ 2
- 3. ✔ 3
- 4. ✘ 4

#### General Awareness

Section Id :	736815148
Section Number :	4
Section type :	Online
Mandatory or Optional:	Mandatory
Number of Questions:	50
Number of Questions to be attempted:	50
Section Marks:	50
Display Number Panel:	Yes
Group All Questions:	No

Sub-Section Number:	1
Sub-Section Id:	736815224
Question Shuffling Allowed :	Yes

Question Number : 151 Question Id : 7368157627 Question Type : MCQ Option Shuffling : Yes Display Question Number : Yes Single Line Question Option : No Option Orientation : Vertical

Correct : 1 Wrong : 0.25

Which article of Indian constitution is about the fundamental duties of a citizen?

Options :

1. ✘ 50A
2. ✔ 51A
3. ✘ 50B
4. ✘ 51B

Question Number : 151 Question Id : 7368157627 Question Type : MCQ Option Shuffling : Yes Display Question Number : Yes Single Line Question Option : No Option Orientation : Vertical

Correct : 1 Wrong : 0.25

भारतीय संविधान का कौन सा अनुच्छेद, नागरिक के मौलिक कर्तव्यों से संबंधित है?

Options :

1. ✘ 50ए
2. ✔ 51ए
3. ✘ 50बी
4. ✘ 51बी

Question Number : 152 Question Id : 7368157628 Question Type : MCQ Option Shuffling : Yes Display Question Number : Yes Single Line Question Option : No Option Orientation : Vertical

Correct : 1 Wrong : 0.25

How many languages have been recognized as official languages by the Indian constitution?

Options :

1. ✘ 25
2. ✔ 22
3. ✘ 18
4. ✘ 29

Question Number : 152 Question Id : 7368157628 Question Type : MCQ Option Shuffling : Yes Display Question Number : Yes Single Line Question Option : No Option Orientation : Vertical

Correct : 1 Wrong : 0.25

भारतीय संविधान द्वारा कितनी भाषाओं को आधिकारिक भाषाओं के रूप में मान्यता दी गई है?

Options :

1. ✘ 25
2. ✔ 22
3. ✘ 18
4. ✘ 29

Question Number : 153 Question Id : 7368157629 Question Type : MCQ Option Shuffling : Yes Display Question Number : Yes Single Line Question Option : No Option Orientation : Vertical

Correct : 1 Wrong : 0.25

The maximum strength of Rajya Sabha can be extended to



Options :

1. ✘ 350
2. ✘ 552
3. ✔ 250
4. ✘ 500

Question Number : 153 Question Id : 7368157629 Question Type : MCQ Option Shuffling : Yes Display Question Number : Yes  
Single Line Question Option : No Option Orientation : Vertical

Correct : 1 Wrong : 0.25

राज्यसभा के सदस्यों की ताकत (सीटों) को अधिकतम कितना बढ़ाया जा सकता है?

Options :

1. ✘ 350
2. ✘ 552
3. ✔ 250
4. ✘ 500

Question Number : 154 Question Id : 7368157630 Question Type : MCQ Option Shuffling : Yes Display Question Number : Yes  
Single Line Question Option : No Option Orientation : Vertical

Correct : 1 Wrong : 0.25

The maximum number of Anglo-Indians who can be nominated to Lok Sabha is

Options :

1. ✘ 10
2. ✘ 5
3. ✘ 8
4. ✔ 2

Question Number : 154 Question Id : 7368157630 Question Type : MCQ Option Shuffling : Yes Display Question Number : Yes  
Single Line Question Option : No Option Orientation : Vertical

Correct : 1 Wrong : 0.25

लोकसभा के लिए नामांकित किये जा सकने वाले एंग्लो-इंडियंस की अधिकतम संख्या कितनी है?

Options :

1. ✘ 10
2. ✘ 5
3. ✘ 8
4. ✔ 2

Question Number : 155 Question Id : 7368157631 Question Type : MCQ Option Shuffling : Yes Display Question Number : Yes  
Single Line Question Option : No Option Orientation : Vertical

Correct : 1 Wrong : 0.25

Who administers the oath of office to the President?

Options :

1. ✔ Chief Justice of India

2. ✘ Speaker of the Lok Sabha

3. ✘ Vice-President

4. ✘ Prime Minister

Question Number : 155 Question Id : 7368157631 Question Type : MCQ Option Shuffling : Yes Display Question Number : Yes  
Single Line Question Option : No Option Orientation : Vertical

Correct : 1 Wrong : 0.25

राष्ट्रपति पद की शपथ को कौन दिलाता है?

Options :

1. ✔ भारत के मुख्य न्यायाधीश

2. ✘ लोकसभा का स्पीकर

3. ✘ उप राष्ट्रपति

4. ✘ प्रधान मंत्री

Question Number : 156 Question Id : 7368157632 Question Type : MCQ Option Shuffling : Yes Display Question Number : Yes  
Single Line Question Option : No Option Orientation : Vertical

Correct : 1 Wrong : 0.25

Who was the first Indian to win an individual medal in Olympics?

Options :

1. ✘ Karanam Malleshwari

2. ✘ P.T.Usha

3. ✔ K.D.Jadhav

4. ✘ Rajvardhan Singh Rathore

Question Number : 156 Question Id : 7368157632 Question Type : MCQ Option Shuffling : Yes Display Question Number : Yes  
Single Line Question Option : No Option Orientation : Vertical

Correct : 1 Wrong : 0.25

ओलंपिक में व्यक्तिगत पदक जीतने वाला पहला भारतीय कौन था?

Options :

1. ✘ कर्णम मल्लेश्वरी

2. ✘ पी. टी. उषा

3. ✔ के. डी. जाधव

4. ✘ राजवर्धन सिंह राठोड़

Question Number : 157 Question Id : 7368157633 Question Type : MCQ Option Shuffling : Yes Display Question Number : Yes  
Single Line Question Option : No Option Orientation : Vertical

Correct : 1 Wrong : 0.25

Who was the first Miss India to participate in Miss Universe contest?

Options :

1. ✘ Aishwarya Rai

2. ✓ Indrani Rehman

3. ✗ Diana Hayden

4. ✗ Sushmita Sen

Question Number : 157 Question Id : 7368157633 Question Type : MCQ Option Shuffling : Yes Display Question Number : Yes  
Single Line Question Option : No Option Orientation : Vertical

Correct : 1 Wrong : 0.25

मिस यूनिवर्स प्रतियोगिता में भाग लेने वाली पहली मिस इंडिया कौन थी?

Options :

1. ✗ ऐश्वर्या राय

2. ✓ इंद्राणी रहमान

3. ✗ डायना हेडन

4. ✗ सुष्मिता सेन

Question Number : 158 Question Id : 7368157634 Question Type : MCQ Option Shuffling : Yes Display Question Number : Yes  
Single Line Question Option : No Option Orientation : Vertical

Correct : 1 Wrong : 0.25

Which playback singer among the following is honored with Bharat Ratna Award?

Options :

1. ✗ Kishore Kumar

2. ✗ Asha Bhonsle

3. ✗ Mohammad Rafi

4. ✓ Lata Mangeshkar

Question Number : 158 Question Id : 7368157634 Question Type : MCQ Option Shuffling : Yes Display Question Number : Yes  
Single Line Question Option : No Option Orientation : Vertical

Correct : 1 Wrong : 0.25

निम्नलिखित में से किस पार्श्व गायक को भारत रत्न पुरस्कार से सम्मानित किया गया था?

Options :

1. ✗ किशोर कुमार

2. ✗ आशा भोंसले

3. ✗ मोहम्मद रफी

4. ✓ लता मंगेशकर

Question Number : 159 Question Id : 7368157635 Question Type : MCQ Option Shuffling : Yes Display Question Number : Yes  
Single Line Question Option : No Option Orientation : Vertical

Correct : 1 Wrong : 0.25

In how many fields is the Nobel Prize awarded?

Options :



1. ✓ Five
2. ✗ Three
3. ✗ Seven
4. ✗ Four

Question Number : 159 Question Id : 7368157635 Question Type : MCQ Option Shuffling : Yes Display Question Number : Yes  
Single Line Question Option : No Option Orientation : Vertical

Correct : 1 Wrong : 0.25

नोबेल पुरस्कार कितने क्षेत्रों में दिया जाता है?

Options :

1. ✓ पांच
2. ✗ तीन
3. ✗ सात
4. ✗ चार

Question Number : 160 Question Id : 7368157636 Question Type : MCQ Option Shuffling : Yes Display Question Number : Yes  
Single Line Question Option : No Option Orientation : Vertical

Correct : 1 Wrong : 0.25

Who was the first Indian to win the 'Booker Prize'?

Options :

1. ✗ Chetan Bhagat
2. ✗ Arvind Adiga
3. ✗ Vikram Seth
4. ✓ Salman Rushdie

Question Number : 160 Question Id : 7368157636 Question Type : MCQ Option Shuffling : Yes Display Question Number : Yes  
Single Line Question Option : No Option Orientation : Vertical

Correct : 1 Wrong : 0.25

'बुकर पुरस्कार' जीतने वाला पहला भारतीय कौन था?

Options :

1. ✗ चेतन भगत
2. ✗ अरविन्द अडिग
3. ✗ विक्रम सेठ
4. ✓ सलमान रश्दी

Question Number : 161 Question Id : 7368157637 Question Type : MCQ Option Shuffling : Yes Display Question Number : Yes  
Single Line Question Option : No Option Orientation : Vertical

Correct : 1 Wrong : 0.25

Who is the author of the book 'Mother India'?

Options :

1. ✗ Sister Nivedita

2. ❌ Annie Besant
3. ❌ Sarojini Naidu
4. ✔️ Catherine Mayo

Question Number : 161 Question Id : 7368157637 Question Type : MCQ Option Shuffling : Yes Display Question Number : Yes  
Single Line Question Option : No Option Orientation : Vertical

Correct : 1 Wrong : 0.25

'मदर इंडिया' पुस्तक के लेखक कौन है?

Options :

1. ❌ सिस्टर निवेदिता
2. ❌ एनी बेसेंट
3. ❌ सरोजनी नायडू
4. ✔️ कैथरीन मेयो

Question Number : 162 Question Id : 7368157638 Question Type : MCQ Option Shuffling : Yes Display Question Number : Yes  
Single Line Question Option : No Option Orientation : Vertical

Correct : 1 Wrong : 0.25

The book 'India Remembered' was written by?

Options :

1. ✔️ Pamela Mountbatten
2. ❌ Sister Nivedita
3. ❌ Amitav Ghosh
4. ❌ Sarojini Naidu

Question Number : 162 Question Id : 7368157638 Question Type : MCQ Option Shuffling : Yes Display Question Number : Yes  
Single Line Question Option : No Option Orientation : Vertical

Correct : 1 Wrong : 0.25

'इंडिया रिमेम्बर्ड' किताब किसने लिखी है?

Options :

1. ✔️ पामेला माउंटबैटन
2. ❌ सिस्टर निवेदिता
3. ❌ अमिताव घोष
4. ❌ सरोजनी नायडू

Question Number : 163 Question Id : 7368157639 Question Type : MCQ Option Shuffling : Yes Display Question Number : Yes  
Single Line Question Option : No Option Orientation : Vertical

Correct : 1 Wrong : 0.25

Who is the author of the book 'Conquest Of The Self'?

Options :

1. ❌ Kushwanth Singh

2. ✘ I.K. Gujral
3. ✘ Sarojini Naidu
4. ✔ Mahatma Gandhi

Question Number : 163 Question Id : 7368157639 Question Type : MCQ Option Shuffling : Yes Display Question Number : Yes  
Single Line Question Option : No Option Orientation : Vertical

Correct : 1 Wrong : 0.25

'स्वयं की विजय' (Conquest Of The Self) पुस्तक के लेखक कौन है?

Options :

1. ✘ खुशवंत सिंह
2. ✘ आई. के. गुजराल
3. ✘ सरोजनी नायडू
4. ✔ महात्मा गांधी

Question Number : 164 Question Id : 7368157640 Question Type : MCQ Option Shuffling : Yes Display Question Number : Yes  
Single Line Question Option : No Option Orientation : Vertical

Correct : 1 Wrong : 0.25

Who is the author of the book 'My Presidential Years'?

Options :

1. ✔ R. Venkataraman
2. ✘ V.V. Giri
3. ✘ C. Rajagopala Chary
4. ✘ Pranab Mukherjee

Question Number : 164 Question Id : 7368157640 Question Type : MCQ Option Shuffling : Yes Display Question Number : Yes  
Single Line Question Option : No Option Orientation : Vertical

Correct : 1 Wrong : 0.25

'मेरे राष्ट्रपति पद के वर्ष' (My Presidential Years) पुस्तक के लेखक कौन है?

Options :

1. ✔ आर. वेंकटरमण
2. ✘ वी. वी. गिरी
3. ✘ सी. राजगोपालाचारी
4. ✘ प्रणब मुखर्जी

Question Number : 165 Question Id : 7368157641 Question Type : MCQ Option Shuffling : Yes Display Question Number : Yes  
Single Line Question Option : No Option Orientation : Vertical

Correct : 1 Wrong : 0.25

The book 'A Tale Of Two Revolts' was written by

Options :



1. ✘ Indira Gandhi
2. ✔ Rajmohan Gandhi
3. ✘ Vikram Seth
4. ✘ Bhagat Singh

Question Number : 165 Question Id : 7368157641 Question Type : MCQ Option Shuffling : Yes Display Question Number : Yes  
Single Line Question Option : No Option Orientation : Vertical

Correct : 1 Wrong : 0.25

पुस्तक 'दो विद्रोहियों की कहानी' (A Tale Of Two Revolts) किसने लिखी है?

Options :

1. ✘ इंदिरा गांधी
2. ✔ राजमोहन गांधी
3. ✘ विक्रम सेठ
4. ✘ भगत सिंह

Question Number : 166 Question Id : 7368157642 Question Type : MCQ Option Shuffling : Yes Display Question Number : Yes  
Single Line Question Option : No Option Orientation : Vertical

Correct : 1 Wrong : 0.25

Which one of the following is a folk dance?

Options :

1. ✔ Garba
2. ✘ Kathak
3. ✘ Bharatanatyam
4. ✘ Kathakali

Question Number : 166 Question Id : 7368157642 Question Type : MCQ Option Shuffling : Yes Display Question Number : Yes  
Single Line Question Option : No Option Orientation : Vertical

Correct : 1 Wrong : 0.25

निम्नलिखित में से कौन सा एक लोक नृत्य है?

Options :

1. ✔ गरबा
2. ✘ कथक
3. ✘ भरतनाट्यम
4. ✘ कथकली

Question Number : 167 Question Id : 7368157643 Question Type : MCQ Option Shuffling : Yes Display Question Number : Yes  
Single Line Question Option : No Option Orientation : Vertical

Correct : 1 Wrong : 0.25

The term 'Ayurveda' literally means?

Options :

1. ✘ First Aid

2. ✓ Science of Life
3. ✗ Science of Surgery
4. ✗ Science of Medicine

Question Number : 167 Question Id : 7368157643 Question Type : MCQ Option Shuffling : Yes Display Question Number : Yes  
Single Line Question Option : No Option Orientation : Vertical

Correct : 1 Wrong : 0.25

'आयुर्वेद' शब्द का शाब्दिक अर्थ क्या है?

Options :

1. ✗ प्राथमिक चिकित्सा
2. ✓ जीवन का विज्ञान
3. ✗ शल्यचिकित्सा विज्ञान
4. ✗ चिकित्सा विज्ञान

Question Number : 168 Question Id : 7368157644 Question Type : MCQ Option Shuffling : Yes Display Question Number : Yes  
Single Line Question Option : No Option Orientation : Vertical

Correct : 1 Wrong : 0.25

The theory of classical music was discussed in

Options :

1. ✓ Sama Veda
2. ✗ Rig Veda
3. ✗ Atharava Veda
4. ✗ Yajur Veda

Question Number : 168 Question Id : 7368157644 Question Type : MCQ Option Shuffling : Yes Display Question Number : Yes  
Single Line Question Option : No Option Orientation : Vertical

Correct : 1 Wrong : 0.25

शास्त्रीय संगीत के सिद्धांत की चर्चा किस में की गई है?

Options :

1. ✓ सामवेद
2. ✗ ऋग्वेद
3. ✗ अथर्ववेद
4. ✗ यजुर्वेद

Question Number : 169 Question Id : 7368157645 Question Type : MCQ Option Shuffling : Yes Display Question Number : Yes  
Single Line Question Option : No Option Orientation : Vertical

Correct : 1 Wrong : 0.25

M.S. Subba Lakshmi is famous in the field of

Options :

1. ✗ Poetry

2. ✘ Dance
3. ✔ Music
4. ✘ Painting

Question Number : 169 Question Id : 7368157645 Question Type : MCQ Option Shuffling : Yes Display Question Number : Yes  
Single Line Question Option : No Option Orientation : Vertical

Correct : 1 Wrong : 0.25

एम. एस. सुब्बूलक्ष्मी किस क्षेत्र में प्रसिद्ध है?

Options :

1. ✘ कविता
2. ✘ नृत्य
3. ✔ संगीत
4. ✘ चित्र

Question Number : 170 Question Id : 7368157646 Question Type : MCQ Option Shuffling : Yes Display Question Number : Yes  
Single Line Question Option : No Option Orientation : Vertical

Correct : 1 Wrong : 0.25

The words 'Satyameva Jayate' inscribed below the base of National emblem of India are taken from which of the following ancient scriptures?

Options :

1. ✔ Mundaka Upanishad
2. ✘ Taittiriya Upanishad
3. ✘ Chandogya Upanishad
4. ✘ Aittreya Upanishad

Question Number : 170 Question Id : 7368157646 Question Type : MCQ Option Shuffling : Yes Display Question Number : Yes  
Single Line Question Option : No Option Orientation : Vertical

Correct : 1 Wrong : 0.25

भारत के राष्ट्रीय प्रतीक के नीचे लिखे शब्द 'सत्यमेव जयते' किस प्राचीन शास्त्र से लिया गया है?

Options :

1. ✔ मुंडका उपनिषद
2. ✘ तैत्रिया उपनिषद
3. ✘ चंडोग उपनिषद
4. ✘ ऐत्रेय उपनिषद

Question Number : 171 Question Id : 7368157647 Question Type : MCQ Option Shuffling : Yes Display Question Number : Yes  
Single Line Question Option : No Option Orientation : Vertical

Correct : 1 Wrong : 0.25

Who was the first Director of Central Bureau of Investigation (CBI)?



Options :

1. ✘ Narahari Rao
2. ✘ Manekshaw
3. ✔ D.P. Kohli
4. ✘ Brijesh Mishra

Question Number : 171 Question Id : 7368157647 Question Type : MCQ Option Shuffling : Yes Display Question Number : Yes  
Single Line Question Option : No Option Orientation : Vertical

Correct : 1 Wrong : 0.25

केंद्रीय जांच ब्यूरो (सीबीआई) के प्रथम निर्देशक कौन थे?

Options :

1. ✘ नरहरि राव
2. ✘ माणिक शॉ
3. ✔ डी.पी. कोहली
4. ✘ ब्रिजेश मिश्रा

Question Number : 172 Question Id : 7368157648 Question Type : MCQ Option Shuffling : Yes Display Question Number : Yes  
Single Line Question Option : No Option Orientation : Vertical

Correct : 1 Wrong : 0.25

Which former Prime Minister's autobiography is titled as 'The Insider'?

Options :

1. ✔ P.V. Narasimha Rao
2. ✘ Manmohan Singh
3. ✘ Rajiv Gandhi
4. ✘ Dewe Gowda

Question Number : 172 Question Id : 7368157648 Question Type : MCQ Option Shuffling : Yes Display Question Number : Yes  
Single Line Question Option : No Option Orientation : Vertical

Correct : 1 Wrong : 0.25

किस पूर्व प्रधानमंत्री की आत्मकथा का शीर्षक 'द इनसाइडर' है?

Options :

1. ✔ पी. वी. नरसिम्हा राव
2. ✘ मनमोहन सिंह
3. ✘ राजीव गांधी
4. ✘ देवे गौड़ा

Question Number : 173 Question Id : 7368157649 Question Type : MCQ Option Shuffling : Yes Display Question Number : Yes  
Single Line Question Option : No Option Orientation : Vertical

Correct : 1 Wrong : 0.25

'My Country My Life' is the title of autobiography of which of the following Indian Politicians?

Options :

1. ✘ Rajnath Singh
2. ✘ Mulayam Singh Yadav
3. ✘ Rajiv Gandhi
4. ✔ L.K. Advani

Question Number : 173 Question Id : 7368157649 Question Type : MCQ Option Shuffling : Yes Display Question Number : Yes  
Single Line Question Option : No Option Orientation : Vertical

Correct : 1 Wrong : 0.25

'माय कंट्री माय लाइफ' नामक आत्मकथा निम्नलिखित में से किस भारतीय राजनेता की है?

Options :

1. ✘ राजनाथ सिंह
2. ✘ मुलायम सिंह यादव
3. ✘ राजीव गांधी
4. ✔ एल. के. अडवाणी

Question Number : 174 Question Id : 7368157650 Question Type : MCQ Option Shuffling : Yes Display Question Number : Yes  
Single Line Question Option : No Option Orientation : Vertical

Correct : 1 Wrong : 0.25

Vasundhara Raje is the first woman Chief Minister of which Indian State?

Options :

1. ✔ Rajasthan
2. ✘ Maharashtra
3. ✘ Goa
4. ✘ Madhya Pradesh

Question Number : 174 Question Id : 7368157650 Question Type : MCQ Option Shuffling : Yes Display Question Number : Yes  
Single Line Question Option : No Option Orientation : Vertical

Correct : 1 Wrong : 0.25

वसुंधरा राजे किस भारतीय राज्य की पहली महिला मुख्यमंत्री हैं?

Options :

1. ✔ राजस्थान
2. ✘ महाराष्ट्र
3. ✘ गोवा
4. ✘ मध्य प्रदेश

Correct : 1 Wrong : 0.25

Who was the minister of Railways from 2004 to 2009 in the UPA Government?

Options :

1. ✘ Suresh Prabhu
2. ✘ Sushma Swaraj
3. ✘ Uma Bharathi
4. ✔ Laloo Prasad Yadav

Question Number : 175 Question Id : 7368157651 Question Type : MCQ Option Shuffling : Yes Display Question Number : Yes  
Single Line Question Option : No Option Orientation : Vertical

Correct : 1 Wrong : 0.25

यूपीए सरकार में 2004-2009 में रेल मंत्री कौन था?

Options :

1. ✘ सुरेश प्रभु
2. ✘ सुषमा स्वराज
3. ✘ उमा भारती
4. ✔ लालू प्रसाद यादव

Question Number : 176 Question Id : 7368157652 Question Type : MCQ Option Shuffling : Yes Display Question Number : Yes  
Single Line Question Option : No Option Orientation : Vertical

Correct : 1 Wrong : 0.25

Who is the present Director of Indian cricket team?

Options :

1. ✘ Gary Kirsten
2. ✔ Ravi Shastri
3. ✘ Kapil Dev
4. ✘ Rahul Dravid

Question Number : 176 Question Id : 7368157652 Question Type : MCQ Option Shuffling : Yes Display Question Number : Yes  
Single Line Question Option : No Option Orientation : Vertical

Correct : 1 Wrong : 0.25

भारतीय क्रिकेट टीम के वर्तमान निर्देशक कौन हैं?

Options :

1. ✘ गैरी कस्टर्न
2. ✔ रवि शास्त्री
3. ✘ कपिल देव
4. ✘ राहुल द्रविड़



Correct : 1 Wrong : 0.25

Who among the following has been elected as the new president of FIFA?

Options :

1. ✘ Chris Havell
2. ✘ Thomas Blake
3. ✔ Gianni Infantino
4. ✘ Gen Thorpe

Question Number : 177 Question Id : 7368157653 Question Type : MCQ Option Shuffling : Yes Display Question Number : Yes  
Single Line Question Option : No Option Orientation : Vertical

Correct : 1 Wrong : 0.25

निम्नलिखित में से फीफा के नए अध्यक्ष के रूप में किसे निर्वाचित किया गया है?

Options :

1. ✘ क्रिस हैवेल (Chris Havell)
2. ✘ थॉमस ब्लेक (Thomas Blake)
3. ✔ गिआनी इन्फैंटिनो (Gianni Infantino)
4. ✘ गेन थोर्प (Gen Thorpe)

Question Number : 178 Question Id : 7368157654 Question Type : MCQ Option Shuffling : Yes Display Question Number : Yes  
Single Line Question Option : No Option Orientation : Vertical

Correct : 1 Wrong : 0.25

The railway budget of 2016 announced set up of which of the following research center?

Options :

1. ✘ RAGHA
2. ✘ MEGHA
3. ✘ NIN
4. ✔ SHRESTHA

Question Number : 178 Question Id : 7368157654 Question Type : MCQ Option Shuffling : Yes Display Question Number : Yes  
Single Line Question Option : No Option Orientation : Vertical

Correct : 1 Wrong : 0.25

2016 के रेल बजट में किस शोध केंद्र की स्थापना की घोषणा की गई है?

Options :

1. ✘ राघा (RAGHA)
2. ✘ मेघा (MEGHA)
3. ✘ एनआईएन (NIN)
4. ✔ श्रेष्ठ (SHRESTHA)

Correct : 1 Wrong : 0.25

Which state has recently launched 'Niramaya' scheme which involves free distribution of medicines to people?

Options :

1. ✓ Odisha
2. ✗ Telangana
3. ✗ Andhra Pradesh
4. ✗ Uttar Pradesh

Question Number : 179 Question Id : 7368157655 Question Type : MCQ Option Shuffling : Yes Display Question Number : Yes  
Single Line Question Option : No Option Orientation : Vertical

Correct : 1 Wrong : 0.25

किस राज्य ने हाल ही में 'निरामया' योजना शुरू की है जिसमें लोगों को निशुल्क दवाएं वितरित की जाती हैं?

Options :

1. ✓ ओडिशा
2. ✗ तेलंगाना
3. ✗ आंध्र प्रदेश
4. ✗ उत्तर प्रदेश

Question Number : 180 Question Id : 7368157656 Question Type : MCQ Option Shuffling : Yes Display Question Number : Yes  
Single Line Question Option : No Option Orientation : Vertical

Correct : 1 Wrong : 0.25

Who has been appointed as the Chairman of National Human Rights Commission?

Options :

1. ✗ Shekhar Das
2. ✓ H.L. Dattu
3. ✗ Muthuraj Kumar
4. ✗ Prashanth Iyer

Question Number : 180 Question Id : 7368157656 Question Type : MCQ Option Shuffling : Yes Display Question Number : Yes  
Single Line Question Option : No Option Orientation : Vertical

Correct : 1 Wrong : 0.25

राष्ट्रीय मानवाधिकार आयोग के अध्यक्ष के रूप में किसे नियुक्त किया गया है?

Options :

1. ✗ शेखर दास
2. ✓ एच.एल. दत्तु
3. ✗ मुथुराज कुमार

4. ✘ प्रशात अय्यर

Question Number : 181 Question Id : 7368157657 Question Type : MCQ Option Shuffling : Yes Display Question Number : Yes  
Single Line Question Option : No Option Orientation : Vertical

Correct : 1 Wrong : 0.25

The full form name of automobile manufacturer TVS is

Options :

1. ✔ Trichur Vengaram Sundaram
2. ✘ Trichur Vehicle station
3. ✘ Total Vehicle Showroom
4. ✘ Trigvy Vehicle Station

Question Number : 181 Question Id : 7368157657 Question Type : MCQ Option Shuffling : Yes Display Question Number : Yes  
Single Line Question Option : No Option Orientation : Vertical

Correct : 1 Wrong : 0.25

वाहन निर्माता कंपनी TVS का पूरा नाम क्या है?

Options :

1. ✔ त्रिचूर वेंगाराम सुंदरम
2. ✘ त्रिचूर वेहिकल स्टेशन
3. ✘ टोटल वेहिकल शोरूम
4. ✘ ट्रिग्वी वेहिकल स्टेशन

Question Number : 182 Question Id : 7368157658 Question Type : MCQ Option Shuffling : Yes Display Question Number : Yes  
Single Line Question Option : No Option Orientation : Vertical

Correct : 1 Wrong : 0.25

Where was the first Indian Institute of Management (IIM) established?

Options :

1. ✘ Chennai
2. ✔ Kolkata
3. ✘ Bangalore
4. ✘ Ahmedabad

Question Number : 182 Question Id : 7368157658 Question Type : MCQ Option Shuffling : Yes Display Question Number : Yes  
Single Line Question Option : No Option Orientation : Vertical

Correct : 1 Wrong : 0.25

भारत का पहला इंडियन इंस्टीट्यूट ऑफ मैनेजमेंट (IIM) कहाँ स्थापित किया गया था?

Options :

1. ✘ चेन्नई
2. ✔ कोलकाता
3. ✘ बैंगलोर



4. ✘ अहमदाबाद

Question Number : 183 Question Id : 7368157659 Question Type : MCQ Option Shuffling : Yes Display Question Number : Yes  
Single Line Question Option : No Option Orientation : Vertical

Correct : 1 Wrong : 0.25

The Indian currency, the twenty rupee note depicts scene from which island?

Options :

1. ✔ Andaman and Nicobar
2. ✘ Daman & Diu
3. ✘ Lakshadweep
4. ✘ Willingdon

Question Number : 183 Question Id : 7368157659 Question Type : MCQ Option Shuffling : Yes Display Question Number : Yes  
Single Line Question Option : No Option Orientation : Vertical

Correct : 1 Wrong : 0.25

भारतीय बीस रुपये के नोट में किस द्वीप के दृश्य को दर्शाया गया है?

Options :

1. ✔ अंडमान और निकोबार
2. ✘ दमन और दीव
3. ✘ लक्ष द्वीप
4. ✘ विलिंगडन

Question Number : 184 Question Id : 7368157660 Question Type : MCQ Option Shuffling : Yes Display Question Number : Yes  
Single Line Question Option : No Option Orientation : Vertical

Correct : 1 Wrong : 0.25

The wool obtained from Himalayan Goat is called?

Options :

1. ✘ Angora Wool
2. ✔ Pashmina Wool
3. ✘ Red Wool
4. ✘ Silk Wool

Question Number : 184 Question Id : 7368157660 Question Type : MCQ Option Shuffling : Yes Display Question Number : Yes  
Single Line Question Option : No Option Orientation : Vertical

Correct : 1 Wrong : 0.25

हिमालयी बकरी से प्राप्त ऊन को क्या कहा जाता है?

Options :

1. ✘ अंगोरा ऊन (Angora Wool)
2. ✔ पश्मीना ऊन (Pashmina Wool)
3. ✘ लाल ऊन (Red Wool)

4. ✘ रेशमी ऊन (Silk Wool)

Question Number : 185 Question Id : 7368157661 Question Type : MCQ Option Shuffling : Yes Display Question Number : Yes Single Line Question Option : No Option Orientation : Vertical

Correct : 1 Wrong : 0.25

Which automobile company manufactured the famous 'Ambassador' car?

Options :

1. ✘ Mahindra
2. ✘ Honda
3. ✘ Maruti Suzuki
4. ✔ Hindustan Motors

Question Number : 185 Question Id : 7368157661 Question Type : MCQ Option Shuffling : Yes Display Question Number : Yes Single Line Question Option : No Option Orientation : Vertical

Correct : 1 Wrong : 0.25

किस मशहूर ऑटोमोबाइल कंपनी ने 'एम्बेसडर' कार का निर्माण किया था?

Options :

1. ✘ महिंद्रा
2. ✘ हॉंडा
3. ✘ मारुति सुजुकी
4. ✔ हिंदुस्तान मोटर्स

Question Number : 186 Question Id : 7368157662 Question Type : MCQ Option Shuffling : Yes Display Question Number : Yes Single Line Question Option : No Option Orientation : Vertical

Correct : 1 Wrong : 0.25

First computerized railway reservation was started at

Options :

1. ✘ Calcutta
2. ✘ Bombay
3. ✔ New Delhi
4. ✘ Chennai

Question Number : 186 Question Id : 7368157662 Question Type : MCQ Option Shuffling : Yes Display Question Number : Yes Single Line Question Option : No Option Orientation : Vertical

Correct : 1 Wrong : 0.25

पहला कम्प्यूटरीकृत रेलवे आरक्षण कहाँ पर शुरू किया गया था?

Options :

1. ✘ कलकत्ता
2. ✘ बम्बई
3. ✔ नई दिल्ली

4. ✘ चेन्नई

Question Number : 187 Question Id : 7368157663 Question Type : MCQ Option Shuffling : Yes Display Question Number : Yes Single Line Question Option : No Option Orientation : Vertical

Correct : 1 Wrong : 0.25

The first Indian satellite to be launched is

Options :

1. ✘ Bhaskara-1
2. ✘ INSAT-1A
3. ✘ Rohini
4. ✔ Aryabhata

Question Number : 187 Question Id : 7368157663 Question Type : MCQ Option Shuffling : Yes Display Question Number : Yes Single Line Question Option : No Option Orientation : Vertical

Correct : 1 Wrong : 0.25

भारत का प्रक्षेपित सबसे पहला उपग्रह कौन सा है?

Options :

1. ✘ भास्कर -1
2. ✘ इनसैट -1ए (INSAT-1A)
3. ✘ रोहिणी
4. ✔ आर्यभट्ट

Question Number : 188 Question Id : 7368157664 Question Type : MCQ Option Shuffling : Yes Display Question Number : Yes Single Line Question Option : No Option Orientation : Vertical

Correct : 1 Wrong : 0.25

Which Indian state has the highest number of operating airports?

Options :

1. ✘ Madhya Pradesh
2. ✘ Uttar Pradesh
3. ✔ Maharashtra
4. ✘ Rajasthan

Question Number : 188 Question Id : 7368157664 Question Type : MCQ Option Shuffling : Yes Display Question Number : Yes Single Line Question Option : No Option Orientation : Vertical

Correct : 1 Wrong : 0.25

किस भारतीय राज्य में ऑपरेटिंग हवाई अड्डों की संख्या सबसे ज्यादा है?

Options :

1. ✘ मध्य प्रदेश
2. ✘ उत्तर प्रदेश
3. ✔ महाराष्ट्र



4. ✘ राजस्थान

Question Number : 189 Question Id : 7368157665 Question Type : MCQ Option Shuffling : Yes Display Question Number : Yes  
Single Line Question Option : No Option Orientation : Vertical

Correct : 1 Wrong : 0.25

On the banks of which river is Goa located?

Options :

1. ✘ Sabarmati
2. ✘ Gomti
3. ✘ Kaveri
4. ✔ Mandovi

Question Number : 189 Question Id : 7368157665 Question Type : MCQ Option Shuffling : Yes Display Question Number : Yes  
Single Line Question Option : No Option Orientation : Vertical

Correct : 1 Wrong : 0.25

गोवा किस नदी के तट पर स्थित है?

Options :

1. ✘ साबरमती
2. ✘ गोमती
3. ✘ कावेरी
4. ✔ मांडवी

Question Number : 190 Question Id : 7368157666 Question Type : MCQ Option Shuffling : Yes Display Question Number : Yes  
Single Line Question Option : No Option Orientation : Vertical

Correct : 1 Wrong : 0.25

Which state is known as 'India's Spice Garden'?

Options :

1. ✔ Kerala
2. ✘ Andhra Pradesh
3. ✘ Tamil Nadu
4. ✘ Karnataka

Question Number : 190 Question Id : 7368157666 Question Type : MCQ Option Shuffling : Yes Display Question Number : Yes  
Single Line Question Option : No Option Orientation : Vertical

Correct : 1 Wrong : 0.25

कौनसा राज्य 'भारत के स्पाइस गार्डन' के रूप में जाना जाता है?

Options :

1. ✔ केरल
2. ✘ आंध्र प्रदेश
3. ✘ तमिलनाडु
4. ✘ कर्नाटक

Question Number : 191 Question Id : 7368157667 Question Type : MCQ Option Shuffling : Yes Display Question Number : Yes  
Single Line Question Option : No Option Orientation : Vertical

Correct : 1 Wrong : 0.25

When was Mahatma Gandhi assassinated?

Options :

1. ✘ January 15, 1949
2. ✘ January 30, 1949
3. ✔ January 30, 1948
4. ✘ January 25, 1948

Question Number : 191 Question Id : 7368157667 Question Type : MCQ Option Shuffling : Yes Display Question Number : Yes  
Single Line Question Option : No Option Orientation : Vertical

Correct : 1 Wrong : 0.25

महात्मा गांधी की हत्या कब की गई थी?

Options :

1. ✘ 15 जनवरी 1949
2. ✘ 30 जनवरी 1949
3. ✔ 30 जनवरी 1948
4. ✘ 25 जनवरी 1948

Question Number : 192 Question Id : 7368157668 Question Type : MCQ Option Shuffling : Yes Display Question Number : Yes  
Single Line Question Option : No Option Orientation : Vertical

Correct : 1 Wrong : 0.25

Who gave the slogan 'Jai Jawan Jai Kisan'?

Options :

1. ✘ Vallabh Bhai Patel
2. ✘ Gopal Krishna Gokhale
3. ✘ Mahatma Gandhi
4. ✔ Lal Bahadur Shastri

Question Number : 192 Question Id : 7368157668 Question Type : MCQ Option Shuffling : Yes Display Question Number : Yes  
Single Line Question Option : No Option Orientation : Vertical

Correct : 1 Wrong : 0.25

'जय जवान जय किसान' का नारा किसने दिया था?

Options :

1. ✘ वल्लभभाई पटेल
2. ✘ गोपाल कृष्ण गोखले
3. ✘ महात्मा गांधी
4. ✔ लाल बहादुर शास्त्री

Question Number : 193 Question Id : 7368157669 Question Type : MCQ Option Shuffling : Yes Display Question Number : Yes  
Single Line Question Option : No Option Orientation : Vertical

Correct : 1 Wrong : 0.25

The birth place of Sonia Gandhi is

Options :

1. ✓ Italy
2. ✗ Switzerland
3. ✗ Spain
4. ✗ Russia

Question Number : 193 Question Id : 7368157669 Question Type : MCQ Option Shuffling : Yes Display Question Number : Yes  
Single Line Question Option : No Option Orientation : Vertical

Correct : 1 Wrong : 0.25

सोनिया गांधी का जन्म स्थान कौन सा है?

Options :

1. ✓ इटली
2. ✗ स्विट्जरलैंड
3. ✗ स्पेन
4. ✗ रूस

Question Number : 194 Question Id : 7368157670 Question Type : MCQ Option Shuffling : Yes Display Question Number : Yes  
Single Line Question Option : No Option Orientation : Vertical

Correct : 1 Wrong : 0.25

Who was the president of Indian National congress when India attained Independence?

Options :

1. ✓ Jawaharlal Nehru
2. ✗ Vallabh Bhai Patel
3. ✗ Maulana Azad
4. ✗ W.C. Banerjee

Note: For this question, discrepancy is found in question/answer. Full Marks is being awarded to all candidates.

Question Number : 194 Question Id : 7368157670 Question Type : MCQ Option Shuffling : Yes Display Question Number : Yes  
Single Line Question Option : No Option Orientation : Vertical

Correct : 1 Wrong : 0.25

भारत की आजादी के बाद भारतीय राष्ट्रीय कांग्रेस का अध्यक्ष कौन था?

Options :

1. ✓ जवाहरलाल नेहरू
2. ✗ वल्लभभाई पटेल
3. ✗ मौलाना आजाद
4. ✗ डब्ल्यू. सी. बैनर्जी

Note: For this question, discrepancy is found in question/answer. Full Marks is being awarded to all candidates.



Question Number : 195 Question Id : 7368157671 Question Type : MCQ Option Shuffling : Yes Display Question Number : Yes  
Single Line Question Option : No Option Orientation : Vertical

Correct : 1 Wrong : 0.25

What was the nickname given to Rani Laxmi Bai?

Options :

1. ✓ Manu
2. ✗ Tanu
3. ✗ Renu
4. ✗ Raga

Question Number : 195 Question Id : 7368157671 Question Type : MCQ Option Shuffling : Yes Display Question Number : Yes  
Single Line Question Option : No Option Orientation : Vertical

Correct : 1 Wrong : 0.25

रानी लक्ष्मी बाई को कौन सा उपनाम दिया गया था?

Options :

1. ✓ मनु
2. ✗ तनु
3. ✗ रेणु
4. ✗ रागा

Question Number : 196 Question Id : 7368157672 Question Type : MCQ Option Shuffling : Yes Display Question Number : Yes  
Single Line Question Option : No Option Orientation : Vertical

Correct : 1 Wrong : 0.25

How many gold medals did India win in Olympics so far?

Options :

1. ✗ 15
2. ✓ 9
3. ✗ 20
4. ✗ 3

Question Number : 196 Question Id : 7368157672 Question Type : MCQ Option Shuffling : Yes Display Question Number : Yes  
Single Line Question Option : No Option Orientation : Vertical

Correct : 1 Wrong : 0.25

अब तक भारत ने ओलंपिक में कितने स्वर्ण पदक जीते हैं?

Options :

1. ✗ 15
2. ✓ 9
3. ✗ 20
4. ✗ 3

Question Number : 197 Question Id : 7368157673 Question Type : MCQ Option Shuffling : Yes Display Question Number : Yes  
Single Line Question Option : No Option Orientation : Vertical

Correct : 1 Wrong : 0.25

Ryder Cup is associated with which of the following games?

Options :

1. ✘ Football
2. ✘ Hockey
3. ✔ Golf
4. ✘ Badminton

Question Number : 197 Question Id : 7368157673 Question Type : MCQ Option Shuffling : Yes Display Question Number : Yes Single Line Question Option : No Option Orientation : Vertical

Correct : 1 Wrong : 0.25

निम्नलिखित में से राइडर कप किस खेल के साथ जुड़ा हुआ है?

Options :

1. ✘ फुटबॉल
2. ✘ हॉकी
3. ✔ गोल्फ
4. ✘ बैडमिंटन

Question Number : 198 Question Id : 7368157674 Question Type : MCQ Option Shuffling : Yes Display Question Number : Yes Single Line Question Option : No Option Orientation : Vertical

Correct : 1 Wrong : 0.25

Who was the first batsman to complete 10000 runs in one day cricket?

Options :

1. ✘ Inzamam-ul-Haq
2. ✘ Brian Lara
3. ✘ Ricky Ponting
4. ✔ Sachin Tendulkar

Question Number : 198 Question Id : 7368157674 Question Type : MCQ Option Shuffling : Yes Display Question Number : Yes Single Line Question Option : No Option Orientation : Vertical

Correct : 1 Wrong : 0.25

एक दिवसीय क्रिकेट में 10000 रन पूरे करने वाले पहले बल्लेबाज कौन थे?

Options :

1. ✘ इंजमाम-उल-हक (Inzamam-ul-Haq)
2. ✘ ब्रायन लारा (Brian Lara)
3. ✘ रिकी पॉटिंग (Ricky Ponting)
4. ✔ सचिन तेंडुलकर (Sachin Tendulkar)

Correct : 1 Wrong : 0.25

Who is first Indian tennis player to win a grand slam title?

Options :

1. ✓ Mahesh Bhupathi
2. ✗ Leander Paes
3. ✗ Sania Mirza
4. ✗ Prakash Padukone

Question Number : 199 Question Id : 7368157675 Question Type : MCQ Option Shuffling : Yes Display Question Number : Yes  
Single Line Question Option : No Option Orientation : Vertical

Correct : 1 Wrong : 0.25

टेनिस ग्रैंड स्लैम खिताब जीतने वाला पहला भारतीय खिलाड़ी कौन है?

Options :

1. ✓ महेश भूपति (Mahesh Bhupathi)
2. ✗ लीएंडर पेस (Leander Paes)
3. ✗ सानिया मिर्जा (Sania Mirza)
4. ✗ प्रकाश पादुकोण (Prakash Padukone)

Question Number : 200 Question Id : 7368157676 Question Type : MCQ Option Shuffling : Yes Display Question Number : Yes  
Single Line Question Option : No Option Orientation : Vertical

Correct : 1 Wrong : 0.25

Who is the first Indian bowler to take Hat-trick in test matches?

Options :

1. ✗ Anil Kumble
2. ✓ Harbhajan Singh
3. ✗ Chetan Sharma
4. ✗ Kapil Dev

Question Number : 200 Question Id : 7368157676 Question Type : MCQ Option Shuffling : Yes Display Question Number : Yes  
Single Line Question Option : No Option Orientation : Vertical

Correct : 1 Wrong : 0.25

टेस्ट मैचों में हैट्रिक लेने वाला पहला भारतीय गेंदबाज कौन है?

Options :

1. ✗ अनिल कुंबले
2. ✓ हरभजन सिंह
3. ✗ चेतन शर्मा
4. ✗ कपिल देव