

**Join Telegram More Update Note: All previous year Exam paper provides Question Paper Preview**



कर्मचारी राज्य बीमा निगम  
Employees' State Insurance Corporation  
(Ministry of Labour & Employment, Government of India)

**Notations :**

- Options shown in green color and with ✓ icon are correct.
- Options shown in red color and with ✗ icon are incorrect.

**Question Paper Name:** Upper Division Clerks Shift 7  
**Subject Name:** UPPER DIVISION CLERK UDC  
**Creation Date:** 2016-03-21 14:41:54  
**Duration:** 120  
**Total Marks:** 200  
**Display Marks:** Yes

Upper Division Clerks Shift 1

Group Number : 1  
Group Id : 73681534  
Group Maximum Duration : 0  
Group Minimum Duration : 120  
Revisit allowed for view? : No  
Revisit allowed for edit? : No  
Break time: 0  
Mandatory Break time: No  
Group Marks: 200

Numerical Ability

Section Id : 736815131  
Section Number : 1  
Section type : Online  
Mandatory or Optional: Mandatory  
Number of Questions: 50  
Number of Questions to be attempted: 50  
Section Marks: 50  
Display Number Panel: Yes  
Group All Questions: No

Sub-Section Number: 1  
Sub-Section Id: 736815197  
Question Shuffling Allowed : Yes

**Question Number : 1 Question Id : 7368156667 Question Type : MCQ Option Shuffling : Yes Display Question Number : Yes Single Line Question Option : No Option Orientation : Vertical**

**Correct : 1 Wrong : 0.25**

Convert 57 into a binary number.

**Options :**

- ✗ 100001

**visit this website [studytosuccess.in](http://studytosuccess.in)**

2. ✘ 110011
3. ✘ 100110
4. ✔ 111001

Question Number : 1 Question Id : 7368156667 Question Type : MCQ Option Shuffling : Yes Display Question Number : Yes  
Single Line Question Option : No Option Orientation : Vertical

Correct : 1 Wrong : 0.25

57 को बाइनरी संख्या में परिवर्तित करें।

Options :

1. ✘ 100001
2. ✘ 110011
3. ✘ 100110
4. ✔ 111001

Question Number : 2 Question Id : 7368156668 Question Type : MCQ Option Shuffling : Yes Display Question Number : Yes  
Single Line Question Option : No Option Orientation : Vertical

Correct : 1 Wrong : 0.25

The number of prime factors in  $(4)^{25} \times (7)^{13} \times (15)^9$  is :

Options :

1. ✘ 86
2. ✔ 81
3. ✘ 92
4. ✘ 90

Question Number : 2 Question Id : 7368156668 Question Type : MCQ Option Shuffling : Yes Display Question Number : Yes  
Single Line Question Option : No Option Orientation : Vertical

Correct : 1 Wrong : 0.25

$(4)^{25} \times (7)^{13} \times (15)^9$  में अभाज्य गुणकों की संख्या \_\_\_\_ है।

Options :

1. ✘ 86
2. ✔ 81
3. ✘ 92
4. ✘ 90

Question Number : 3 Question Id : 7368156669 Question Type : MCQ Option Shuffling : Yes Display Question Number : Yes  
Single Line Question Option : No Option Orientation : Vertical

Correct : 1 Wrong : 0.25

What least value must be assigned to \* so that the number  $500*329$  is divisible by 9?

Options :

1. ✔ 8
2. ✘ 9
3. ✘ 0
4. ✘ 1

Question Number : 3 Question Id : 736815669 Question Type : MCQ Option Shuffling : Yes Display Question Number : Yes  
Single Line Question Option : No Option Orientation : Vertical

Correct : 1 Wrong : 0.25

\* के लिए कौन सा कम से कम मूल्य दिया जाना चाहिए, ताकि संख्या  $500 \times 329, 9$  से विभाज्य हो?

Options :

1. ✓ 8
2. ✗ 9
3. ✗ 0
4. ✗ 1

Question Number : 4 Question Id : 7368156670 Question Type : MCQ Option Shuffling : Yes Display Question Number : Yes  
Single Line Question Option : No Option Orientation : Vertical

Correct : 1 Wrong : 0.25

Compute:  $1231 \times 9999 + 1231$ .

Options :

1. ✗ 1239991
2. ✗ 12319999
3. ✓ 12310000
4. ✗ 12300000

Question Number : 4 Question Id : 7368156670 Question Type : MCQ Option Shuffling : Yes Display Question Number : Yes  
Single Line Question Option : No Option Orientation : Vertical

Correct : 1 Wrong : 0.25

गणना करें :  $1231 \times 9999 + 1231$

Options :

1. ✗ 1239991
2. ✗ 12319999
3. ✓ 12310000
4. ✗ 12300000

Question Number : 5 Question Id : 7368156671 Question Type : MCQ Option Shuffling : Yes Display Question Number : Yes  
Single Line Question Option : No Option Orientation : Vertical

Correct : 1 Wrong : 0.25

Find the units digit in  $(2015)^{505} + (2011)^{505}$

Options :

1. ✗ 8
2. ✗ 4
3. ✓ 6
4. ✗ 9

Question Number : 5 Question Id : 7368156671 Question Type : MCQ Option Shuffling : Yes Display Question Number : Yes  
Single Line Question Option : No Option Orientation : Vertical

Correct : 1 Wrong : 0.25

$(2015)^{505} + (2011)^{505}$  में इकाई का अंक ज्ञात करें

Options :

1. ✘ 8
2. ✘ 4
3. ✔ 6
4. ✘ 9

Question Number : 6 Question Id : 7368156672 Question Type : MCQ Option Shuffling : Yes Display Question Number : Yes  
Single Line Question Option : No Option Orientation : Vertical

Correct : 1 Wrong : 0.25

Compute:  $512 \times 625 + 625$ .

Options :

1. ✘ 326025
2. ✘ 360025
3. ✘ 320065
4. ✔ 320625

Question Number : 6 Question Id : 7368156672 Question Type : MCQ Option Shuffling : Yes Display Question Number : Yes  
Single Line Question Option : No Option Orientation : Vertical

Correct : 1 Wrong : 0.25

गणना करें :  $512 \times 625 + 625$ .

Options :

1. ✘ 326025
2. ✘ 360025
3. ✘ 320065
4. ✔ 320625

Question Number : 7 Question Id : 7368156673 Question Type : MCQ Option Shuffling : Yes Display Question Number : Yes  
Single Line Question Option : No Option Orientation : Vertical

Correct : 1 Wrong : 0.25

Lawrence studies for  $7\frac{3}{4}$  hours daily. He devotes  $1\frac{2}{3}$  hours of his time for Science. How much time does he devote for other subjects?

Options :

1. ✘  $6\frac{5}{12}$  hrs
2. ✔  $6\frac{1}{12}$  hrs
3. ✘  $6\frac{3}{10}$  hrs
4. ✘  $6\frac{5}{6}$  hrs

Question Number : 7 Question Id : 7368156673 Question Type : MCQ Option Shuffling : Yes Display Question Number : Yes  
Single Line Question Option : No Option Orientation : Vertical

Correct : 1 Wrong : 0.25



लॉरेस प्रतिदिन  $7\frac{3}{4}$  घंटे तक अध्ययन करता है। वह अपने समय के  $1\frac{2}{3}$

घंटे गणित को देता है। वह अन्य विषयों को कितना समय देता है?

Options :

1. ✘  $6\frac{5}{12}$  घंटे
2. ✔  $6\frac{1}{12}$  घंटे
3. ✘  $6\frac{3}{10}$  घंटे
4. ✘  $6\frac{5}{6}$  घंटे

Question Number : 8 Question Id : 7368156674 Question Type : MCQ Option Shuffling : Yes Display Question Number : Yes  
Single Line Question Option : No Option Orientation : Vertical

Correct : 1 Wrong : 0.25

Bhavesh and Hitesh together bought a water bottle that contained  $8\frac{1}{2}$  litres of water. Bhavesh consumed  $\frac{3}{4}$  of the water. Remaining water was consumed by Hitesh. Find the amount of water consumed by Bhavesh in litres?

Options :

1. ✘ 7.15L
2. ✔ 6.375L
3. ✘ 6.5L
4. ✘ 7.55L

Question Number : 8 Question Id : 7368156674 Question Type : MCQ Option Shuffling : Yes Display Question Number : Yes  
Single Line Question Option : No Option Orientation : Vertical

Correct : 1 Wrong : 0.25

भावेश और हितेश ने साथ मिलकर पानी की एक बोतल खरीदी, जिसमें  $8\frac{1}{2}$  लीटर पानी था। इसमें से भावेश ने  $\frac{3}{4}$  पानी पिया। बाकी का पानी हितेश ने पिया। भावेश ने कुल कितने लीटर पानी पिया?

Options :

1. ✘ 7.15 लीटर
2. ✔ 6.375 लीटर
3. ✘ 6.5 लीटर
4. ✘ 7.55 लीटर

Question Number : 9 Question Id : 7368156675 Question Type : MCQ Option Shuffling : Yes Display Question Number : Yes  
Single Line Question Option : No Option Orientation : Vertical

Correct : 1 Wrong : 0.25

**Join Telegram More Update Note: All previous year Exam paper provides**

Arthi, Bhavana, Sneha and Devi finished coloring a picture in  $\frac{2}{3}$  hour,  $\frac{3}{4}$  hour,  $\frac{1}{2}$  hour

and  $\frac{1}{3}$  hour respectively. Who among the following finished their coloring first?

Options :

1. ✘ Sneha
2. ✘ Arthi
3. ✘ Bhavana
4. ✔ Devi

Question Number : 9 Question Id : 7368156675 Question Type : MCQ Option Shuffling : Yes Display Question Number : Yes  
Single Line Question Option : No Option Orientation : Vertical

Correct : 1 Wrong : 0.25

आरती, भावना, स्नेहा और देवी ने क्रमशः  $\frac{2}{3}$  घंटे,  $\frac{3}{4}$  घंटे,  $\frac{1}{2}$  घंटे और  $\frac{1}{3}$  घंटे में तस्वीर में रंग भरने के कार्य को समाप्त किया। निम्नलिखित में से किसने पहले रंग भरने का कार्य समाप्त किया?

Options :

1. ✘ स्नेहा
2. ✘ आरती
3. ✘ भावना
4. ✔ देवी

Question Number : 10 Question Id : 7368156676 Question Type : MCQ Option Shuffling : Yes Display Question Number : Yes  
Single Line Question Option : No Option Orientation : Vertical

Correct : 1 Wrong : 0.25

Which among the following is the smallest?

$\frac{9}{5}$ ,  $\frac{7}{4}$ ,  $\frac{13}{15}$ ,  $\frac{5}{8}$

Options :

1. ✔  $\frac{5}{8}$
2. ✘  $\frac{7}{4}$
3. ✘  $\frac{9}{5}$
4. ✘  $\frac{13}{15}$

Question Number : 10 Question Id : 7368156676 Question Type : MCQ Option Shuffling : Yes Display Question Number : Yes  
Single Line Question Option : No Option Orientation : Vertical

Correct : 1 Wrong : 0.25

निम्नलिखित में से सबसे छोटा कौनसा है?

$$\frac{9}{5}, \frac{7}{4}, \frac{13}{15}, \frac{5}{8}$$

Options :

1.   $\frac{5}{8}$

2.   $\frac{7}{4}$

3.   $\frac{9}{5}$

4.   $\frac{13}{15}$

Question Number : 11 Question Id : 7368156677 Question Type : MCQ Option Shuffling : Yes Display Question Number : Yes  
Single Line Question Option : No Option Orientation : Vertical

Correct : 1 Wrong : 0.25

The difference of two numbers is 13 and one-fifth of their sum is 11. Find the smallest number.

Options :

1.  35

2.  45

3.  21

4.  15

Question Number : 11 Question Id : 7368156677 Question Type : MCQ Option Shuffling : Yes Display Question Number : Yes  
Single Line Question Option : No Option Orientation : Vertical

Correct : 1 Wrong : 0.25

दो संख्याओं का अंतर 13 और उनके योग का  $\frac{1}{5}$  हिस्सा 11 है, सबसे छोटी संख्या ज्ञात करें।

Options :

1.  35

2.  45

3.  21

4.  15

Question Number : 12 Question Id : 7368156678 Question Type : MCQ Option Shuffling : Yes Display Question Number : Yes  
Single Line Question Option : No Option Orientation : Vertical

Correct : 1 Wrong : 0.25

The difference between a number and its three-fifth is 6. What is the number?

Options :

1.  18

2.  20

3.  16

4.  15

Question Number : 12 Question Id : 7368156678 Question Type : MCQ Option Shuffling : Yes Display Question Number : Yes  
Single Line Question Option : No Option Orientation : Vertical

Correct : 1 Wrong : 0.25

एक संख्या और इसके  $\frac{3}{5}$  के बीच का अंतर 6 है। यह संख्या क्या है?

Options :

1. ✘ 18
2. ✘ 20
3. ✘ 16
4. ✔ 15

Question Number : 13 Question Id : 7368156679 Question Type : MCQ Option Shuffling : Yes Display Question Number : Yes  
Single Line Question Option : No Option Orientation : Vertical

Correct : 1 Wrong : 0.25

Find the value of  $(-3)^5 \times (3)^{-5} \times (2)^5$

Options :

1. ✘ 32
2. ✔ -32
3. ✘ -27
4. ✘ -108

Question Number : 13 Question Id : 7368156679 Question Type : MCQ Option Shuffling : Yes Display Question Number : Yes  
Single Line Question Option : No Option Orientation : Vertical

Correct : 1 Wrong : 0.25

$(-3)^5 \times (3)^{-5} \times (2)^5$  का मान ज्ञात करें।

Options :

1. ✘ 32
2. ✔ -32
3. ✘ -27
4. ✘ -108

Question Number : 14 Question Id : 7368156680 Question Type : MCQ Option Shuffling : Yes Display Question Number : Yes  
Single Line Question Option : No Option Orientation : Vertical

Correct : 1 Wrong : 0.25

If  $44X7-2Y65=1832$ , then which of the following should come in place of X?

Options :

1. ✘ 5
2. ✔ 9
3. ✘ 2
4. ✘ 3

Question Number : 14 Question Id : 7368156680 Question Type : MCQ Option Shuffling : Yes Display Question Number : Yes  
Single Line Question Option : No Option Orientation : Vertical

Correct : 1 Wrong : 0.25

अगर  $44X7-2Y65=1832$  है, तो निम्नलिखित में से X के स्थान पर क्या आना

चाहिए?

Options :

1. ✗ 5
2. ✓ 9
3. ✗ 2
4. ✗ 3

Question Number : 15 Question Id : 7368156681 Question Type : MCQ Option Shuffling : Yes Display Question Number : Yes  
Single Line Question Option : No Option Orientation : Vertical

Correct : 1 Wrong : 0.25

Solve : 
$$\frac{(531+350)^2 + (531-350)^2}{531 \times 531 + 350 \times 350}$$

Options :

1. ✓ 2
2. ✗ 5648
3. ✗ 6245
4. ✗ 8542

Question Number : 15 Question Id : 7368156681 Question Type : MCQ Option Shuffling : Yes Display Question Number : Yes  
Single Line Question Option : No Option Orientation : Vertical

Correct : 1 Wrong : 0.25

हल करें: 
$$\frac{(531+350)^2 + (531-350)^2}{531 \times 531 + 350 \times 350}$$

Options :

1. ✓ 2
2. ✗ 5648
3. ✗ 6245
4. ✗ 8542

Question Number : 16 Question Id : 7368156682 Question Type : MCQ Option Shuffling : Yes Display Question Number : Yes  
Single Line Question Option : No Option Orientation : Vertical

Correct : 1 Wrong : 0.25

The present salary of Mahesh is Rs.15300. This will be increased by 7.5% in the next year.  
What will be the increased salary of Mahesh?

Options :

1. ✗ Rs.16900.5
2. ✗ Rs.16850.5
3. ✓ Rs.16447.5
4. ✗ Rs.16950.5

Question Number : 16 Question Id : 7368156682 Question Type : MCQ Option Shuffling : Yes Display Question Number : Yes  
Single Line Question Option : No Option Orientation : Vertical

Correct : 1 Wrong : 0.25



महेश का वर्तमान वेतन रु. 15300 है। अगले वर्ष इसमें 7.5% की वृद्धि होगी।

वृद्धि के बाद महेश का बढ़ा हुआ वेतन कितना होगा?

Options :

1. ✘ रु. 16900.5
2. ✘ रु. 16850.5
3. ✔ रु. 16447.5
4. ✘ रु. 16950.5

Question Number : 17 Question Id : 7368156683 Question Type : MCQ Option Shuffling : Yes Display Question Number : Yes  
Single Line Question Option : No Option Orientation : Vertical

Correct : 1 Wrong : 0.25

In an examination, 97% of the candidates passed and 600 failed. How many candidates appeared for the examination?

Options :

1. ✘ 13500
2. ✘ 14000
3. ✘ 12000
4. ✔ 20000

Question Number : 17 Question Id : 7368156683 Question Type : MCQ Option Shuffling : Yes Display Question Number : Yes  
Single Line Question Option : No Option Orientation : Vertical

Correct : 1 Wrong : 0.25

एक परीक्षा में 97% परीक्षार्थी उत्तीर्ण हुए और 600 अनुत्तीर्ण हुए। परीक्षा में कितने परीक्षार्थी बैठे थे?

Options :

1. ✘ 13500
2. ✘ 14000
3. ✘ 12000
4. ✔ 20000

Question Number : 18 Question Id : 7368156684 Question Type : MCQ Option Shuffling : Yes Display Question Number : Yes  
Single Line Question Option : No Option Orientation : Vertical

Correct : 1 Wrong : 0.25

What percent of 2 ½ hours is 360 seconds?

Options :

1. ✘ 3.5%
2. ✘ 5%
3. ✔ 4%
4. ✘ 2.5%

Question Number : 18 Question Id : 7368156684 Question Type : MCQ Option Shuffling : Yes Display Question Number : Yes  
Single Line Question Option : No Option Orientation : Vertical

Correct : 1 Wrong : 0.25



2½ घटे का कितना प्रतिशत 360 सेकंड होता है?

Options :

1. ✘ 3.5%
2. ✘ 5%
3. ✔ 4%
4. ✘ 2.5%

Question Number : 19 Question Id : 7368156685 Question Type : MCQ Option Shuffling : Yes Display Question Number : Yes  
Single Line Question Option : No Option Orientation : Vertical

Correct : 1 Wrong : 0.25

Express 40 paise:2 rupee 80paise in its simplest form.

Options :

1. ✘ 1:8
2. ✘ 8:1
3. ✔ 1:7
4. ✘ 5:4

Question Number : 19 Question Id : 7368156685 Question Type : MCQ Option Shuffling : Yes Display Question Number : Yes  
Single Line Question Option : No Option Orientation : Vertical

Correct : 1 Wrong : 0.25

40 पैसे : 2 रु. 80 पैसे को इसके सरलतम रूप में दर्शाएँ

Options :

1. ✘ 1:8
2. ✘ 8:1
3. ✔ 1:7
4. ✘ 5:4

Question Number : 20 Question Id : 7368156686 Question Type : MCQ Option Shuffling : Yes Display Question Number : Yes  
Single Line Question Option : No Option Orientation : Vertical

Correct : 1 Wrong : 0.25

Two numbers are in ratio 6:7. If 3 is subtracted from each, the ratio becomes 5:6. Find the largest number.

Options :

1. ✔ 21
2. ✘ 30
3. ✘ 24
4. ✘ 20

Question Number : 20 Question Id : 7368156686 Question Type : MCQ Option Shuffling : Yes Display Question Number : Yes  
Single Line Question Option : No Option Orientation : Vertical

Correct : 1 Wrong : 0.25

दो अंक 6:7 के अनुपात में है यदि प्रत्येक में से 3 घटाया जाए, तो अनुपात 5:6 हो जाता है। सबसे बड़ी संख्या ज्ञात करें।

Options :

1. ✓ 21
2. ✗ 30
3. ✗ 24
4. ✗ 20

Question Number : 21 Question Id : 7368156687 Question Type : MCQ Option Shuffling : Yes Display Question Number : Yes  
Single Line Question Option : No Option Orientation : Vertical

Correct : 1 Wrong : 0.25

A bag contains 50paise, 25paise and 10paise coins in the ratio 6:4:3 amounting to Rs.129/-. Find the number of 10paise coins.

Options :

1. ✗ 83
2. ✓ 90
3. ✗ 95
4. ✗ 87

Question Number : 21 Question Id : 7368156687 Question Type : MCQ Option Shuffling : Yes Display Question Number : Yes  
Single Line Question Option : No Option Orientation : Vertical

Correct : 1 Wrong : 0.25

एक थैले में 50 पैसे, 25 पैसे और 10 पैसे के सिक्के क्रमशः 6:4:3 के अनुपात में हैं जिनका कुल मान रु.129 है। 10 पैसे के सिक्कों की संख्या ज्ञात करें।

Options :

1. ✗ 83
2. ✓ 90
3. ✗ 95
4. ✗ 87

Question Number : 22 Question Id : 7368156688 Question Type : MCQ Option Shuffling : Yes Display Question Number : Yes  
Single Line Question Option : No Option Orientation : Vertical

Correct : 1 Wrong : 0.25

Find the average of 320,240,125,205,110.

Options :

1. ✗ 450
2. ✗ 1225
3. ✓ 200
4. ✗ 244

Question Number : 22 Question Id : 7368156688 Question Type : MCQ Option Shuffling : Yes Display Question Number : Yes  
Single Line Question Option : No Option Orientation : Vertical

Correct : 1 Wrong : 0.25

320,240,125,205,110 का औसत ज्ञात करें।

Options :

1. ✗ 450
2. ✗ 1225

3. ✓ 200

4. ✗ 244

Question Number : 23 Question Id : 7368156689 Question Type : MCQ Option Shuffling : Yes Display Question Number : Yes Single Line Question Option : No Option Orientation : Vertical

Correct : 1 Wrong : 0.25

The average of 5 quantities is 9. The average of three of them is 9. What is the average of remaining quantities?

Options :

1. ✗ 8

2. ✗ 15

3. ✗ 42

4. ✓ 9

Question Number : 23 Question Id : 7368156689 Question Type : MCQ Option Shuffling : Yes Display Question Number : Yes Single Line Question Option : No Option Orientation : Vertical

Correct : 1 Wrong : 0.25

5 राशियों का औसत 9 है। उनमें से 3 राशियों का औसत 9 है, तो शेष राशियों का औसत कितना होगा?

Options :

1. ✗ 8

2. ✗ 15

3. ✗ 42

4. ✓ 9

Question Number : 24 Question Id : 7368156690 Question Type : MCQ Option Shuffling : Yes Display Question Number : Yes Single Line Question Option : No Option Orientation : Vertical

Correct : 1 Wrong : 0.25

The average monthly income of X and Y is Rs.4500. The average monthly income of X and Z is Rs.3500 and the average monthly income of Y and Z is Rs.4000. The monthly income of X is?

Options :

1. ✗ Rs.4500

2. ✗ Rs.3500

3. ✗ Rs.3125

4. ✓ Rs.4000

Question Number : 24 Question Id : 7368156690 Question Type : MCQ Option Shuffling : Yes Display Question Number : Yes Single Line Question Option : No Option Orientation : Vertical

Correct : 1 Wrong : 0.25

X और Y की औसत मासिक आय रु. 4500 है; X और Z की औसत मासिक आय रु. 3500 है और Y और Z की औसत मासिक आय रु. 4000 है X की औसत मासिक आय कितनी है?

Options :

1. ✘ ₹. 4500
2. ✘ ₹. 3500
3. ✘ ₹. 3125
4. ✔ ₹. 4000

Question Number : 25 Question Id : 7368156691 Question Type : MCQ Option Shuffling : Yes Display Question Number : Yes  
Single Line Question Option : No Option Orientation : Vertical

Correct : 1 Wrong : 0.25

Find the amount at simple interest on Rs.4700 for 3 years 6 months at 10% per annum.

Options :

1. ✘ Rs.6500
2. ✔ Rs.6345
3. ✘ Rs.6800
4. ✘ Rs.6900

Question Number : 25 Question Id : 7368156691 Question Type : MCQ Option Shuffling : Yes Display Question Number : Yes  
Single Line Question Option : No Option Orientation : Vertical

Correct : 1 Wrong : 0.25

10% प्रति वर्ष साधारण ब्याज की दर से 3 वर्ष 6 महीने में रु. 4700 की राशि कितनी हो जाएगी?

Options :

1. ✘ रु. 6500
2. ✔ रु. 6345
3. ✘ रु. 6800
4. ✘ रु. 6900

Question Number : 26 Question Id : 7368156692 Question Type : MCQ Option Shuffling : Yes Display Question Number : Yes  
Single Line Question Option : No Option Orientation : Vertical

Correct : 1 Wrong : 0.25

Simple interest on a certain sum is  $\frac{1}{4}$  of the sum. Find the time, if both time and rate percent are numerically equal.

Options :

1. ✘  $1\frac{1}{2}$  years
2. ✔ 5years
3. ✘ 2years
4. ✘  $2\frac{1}{2}$  years

Question Number : 26 Question Id : 7368156692 Question Type : MCQ Option Shuffling : Yes Display Question Number : Yes  
Single Line Question Option : No Option Orientation : Vertical

Correct : 1 Wrong : 0.25



एक निश्चित राशि पर साधारण ब्याज उस राशि का  $\frac{1}{4}$  है। यदि अवधि

और दर प्रतिशत दोनों संख्यानुसार एक समान हैं, तो अवधि ज्ञात करें।

Options :

1. ✘  $1\frac{1}{2}$  वर्ष
2. ✔ 5 वर्ष
3. ✘ 2 वर्ष
4. ✘  $2\frac{1}{2}$  वर्ष

Question Number : 27 Question Id : 7368156693 Question Type : MCQ Option Shuffling : Yes Display Question Number : Yes  
Single Line Question Option : No Option Orientation : Vertical

Correct : 1 Wrong : 0.25

Simple interest for a sum of Rs.5900 for 2 years is Rs.65 more than the simple interest for Rs.5400 for the same duration. Find the rate of interest.

Options :

1. ✔ 6.5%
2. ✘ 5%
3. ✘ 4.5%
4. ✘ 3%

Question Number : 27 Question Id : 7368156693 Question Type : MCQ Option Shuffling : Yes Display Question Number : Yes  
Single Line Question Option : No Option Orientation : Vertical

Correct : 1 Wrong : 0.25

2 वर्ष के लिए रु. 5900 की राशि पर प्राप्त साधारण ब्याज इसी अवधि के लिए रु. 5400 पर प्राप्त साधारण ब्याज से रु. 65 ज्यादा है। ब्याज की दर ज्ञात करें।

Options :

1. ✔ 6.5%
2. ✘ 5%
3. ✘ 4.5%
4. ✘ 3%

Question Number : 28 Question Id : 7368156694 Question Type : MCQ Option Shuffling : Yes Display Question Number : Yes  
Single Line Question Option : No Option Orientation : Vertical

Correct : 1 Wrong : 0.25

A watch costing Rs.1000 has been sold for Rs.1300. The percentage of profit was?

Options :

1. ✘ 24%
2. ✘ 25%
3. ✔ 30%
4. ✘ 20%

Question Number : 28 Question Id : 7368156694 Question Type : MCQ Option Shuffling : Yes Display Question Number : Yes  
Single Line Question Option : No Option Orientation : Vertical

Correct : 1 Wrong : 0.25

रु.1000 की लागत वाली घड़ी को रु. 1300 में बेचा गया। लाभ का प्रतिशत कितना था?

Options :

1. ✘ 24%
2. ✘ 25%
3. ✔ 30%
4. ✘ 20%

Question Number : 29 Question Id : 7368156695 Question Type : MCQ Option Shuffling : Yes Display Question Number : Yes  
Single Line Question Option : No Option Orientation : Vertical

Correct : 1 Wrong : 0.25

Aparna sells a washing machine for Rs.7200. She loses 60% in the bargain. What was the price at which she bought it?

Options :

1. ✘ Rs.19000
2. ✘ Rs.20000
3. ✘ Rs.21000
4. ✔ Rs.18000

Question Number : 29 Question Id : 7368156695 Question Type : MCQ Option Shuffling : Yes Display Question Number : Yes  
Single Line Question Option : No Option Orientation : Vertical

Correct : 1 Wrong : 0.25

अपर्णा ने रु. 7200 में एक वाशिंग मशीन बेची। उसे इस सौदे में 60% का नुकसान हुआ। उसने वह किस कीमत पर खरीदी थी?

Options :

1. ✘ रु. 19000
2. ✘ रु. 20000
3. ✘ रु. 21000
4. ✔ रु. 18000

Question Number : 30 Question Id : 7368156696 Question Type : MCQ Option Shuffling : Yes Display Question Number : Yes  
Single Line Question Option : No Option Orientation : Vertical

Correct : 1 Wrong : 0.25

Sanjana bought an article for Rs.5652. Due to some defects in it, she had to pay Rs.348 to the mechanic for its repair. Then, she sold it for Rs.5500. Find her loss percent.

Options :

1. ✘ 8.5%
2. ✔ 8.33%
3. ✘ 5%
4. ✘ 7.5%

Question Number : 30 Question Id : 7368156696 Question Type : MCQ Option Shuffling : Yes Display Question Number : Yes  
Single Line Question Option : No Option Orientation : Vertical



Correct : 1 Wrong : 0.25

संजना ने एक वस्तु को रु. 5652 में खरीदी। उसमें किसी दोष के कारण, उसने इसकी मरम्मत के लिए मैकेनिक को रु. 348 दिए। फिर उसने उसे रु. 5500 में बेच दिया। उसे कितना प्रतिशत नुकसान हुआ?

Options :

1. ✘ 8.5%
2. ✔ 8.33%
3. ✘ 5%
4. ✘ 7.5%

Question Number : 31 Question Id : 7368156697 Question Type : MCQ Option Shuffling : Yes Display Question Number : Yes Single Line Question Option : No Option Orientation : Vertical

Correct : 1 Wrong : 0.25

An item is sold at Rs.510 by allowing a discount of 15% on its marked price. The marked price of the item is:

Options :

1. ✘ Rs.700
2. ✘ Rs.590
3. ✘ Rs.650
4. ✔ Rs.600

Question Number : 31 Question Id : 7368156697 Question Type : MCQ Option Shuffling : Yes Display Question Number : Yes Single Line Question Option : No Option Orientation : Vertical

Correct : 1 Wrong : 0.25

एक वस्तु को उसकी अंकित कीमत पर 15% की छूट देकर रु. 510 में बेचा गया। वस्तु की अंकित कीमत कितनी है?

Options :

1. ✘ रु. 700
2. ✘ रु. 590
3. ✘ रु. 650
4. ✔ रु. 600

Question Number : 32 Question Id : 7368156698 Question Type : MCQ Option Shuffling : Yes Display Question Number : Yes Single Line Question Option : No Option Orientation : Vertical

Correct : 1 Wrong : 0.25

What is a single discount equivalent to a discount series of 14% and 13%?

Options :

1. ✘ 24.5%
2. ✘ 23.44%
3. ✔ 25.18%
4. ✘ 26%

Question Number : 32 Question Id : 7368156698 Question Type : MCQ Option Shuffling : Yes Display Question Number : Yes Single Line Question Option : No Option Orientation : Vertical

Correct : 1 Wrong : 0.25

14% और 13% की छूट श्रृंखला के समान एकल छूट क्या है?

Options :

1. ✘ 24.5%
2. ✘ 23.44%
3. ✔ 25.18%
4. ✘ 26%

Question Number : 33 Question Id : 7368156699 Question Type : MCQ Option Shuffling : Yes Display Question Number : Yes Single Line Question Option : No Option Orientation : Vertical

Correct : 1 Wrong : 0.25

The marked price of a bicycle is Rs.1710. A shopkeeper allows a discount of 14% and get a profit of 14%. Find the cost price of the bicycle.

Options :

1. ✔ Rs.1290
2. ✘ Rs.1000
3. ✘ Rs.900
4. ✘ Rs.950

Question Number : 33 Question Id : 7368156699 Question Type : MCQ Option Shuffling : Yes Display Question Number : Yes Single Line Question Option : No Option Orientation : Vertical

Correct : 1 Wrong : 0.25

एक साइकिल की अंकित कीमत रु. 1710 है। एक दुकानदार इस पर 14% की छूट देता है, तो उसे 14% लाभ मिलता है। साइकिल की लागत कीमत ज्ञात करें।

Options :

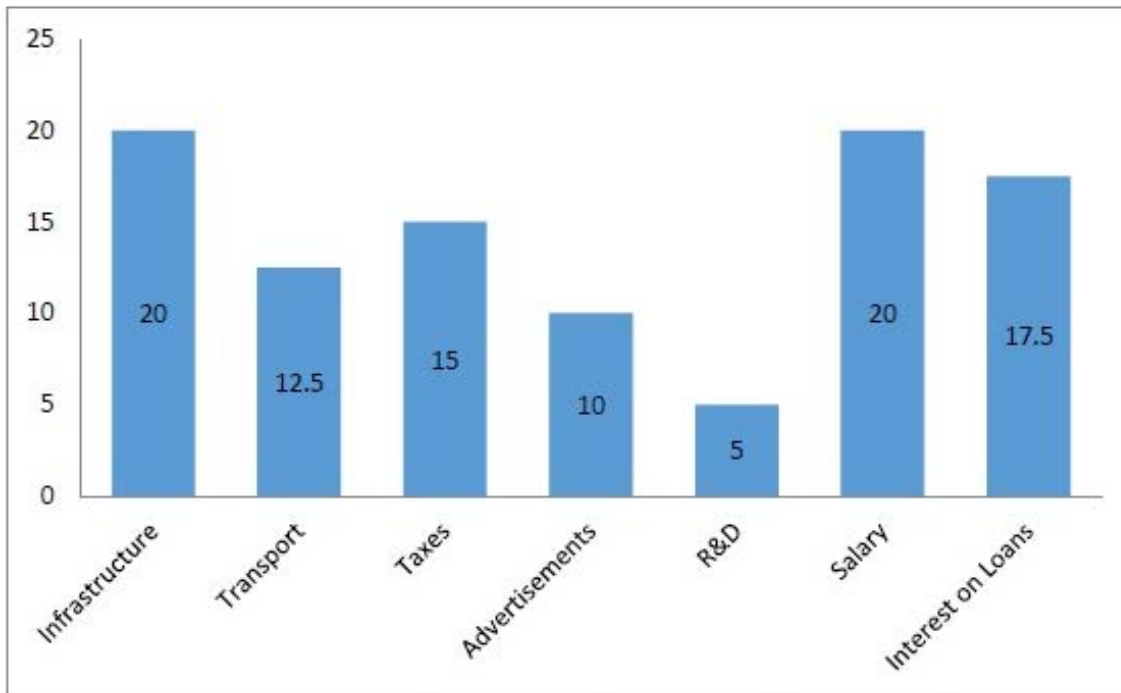
1. ✔ रु.1290
2. ✘ रु.1000
3. ✘ रु.900
4. ✘ रु.950

Question Number : 34 Question Id : 7368156700 Question Type : MCQ Option Shuffling : Yes Display Question Number : Yes Single Line Question Option : No Option Orientation : Vertical

Correct : 1 Wrong : 0.25

Study the following table carefully and answer the question that follows.

The below graph shows the percentage distribution of total expenditure of a company.



If the total expenditure is Rs.15,00,000, then what amount is spent on R&D?

Options :

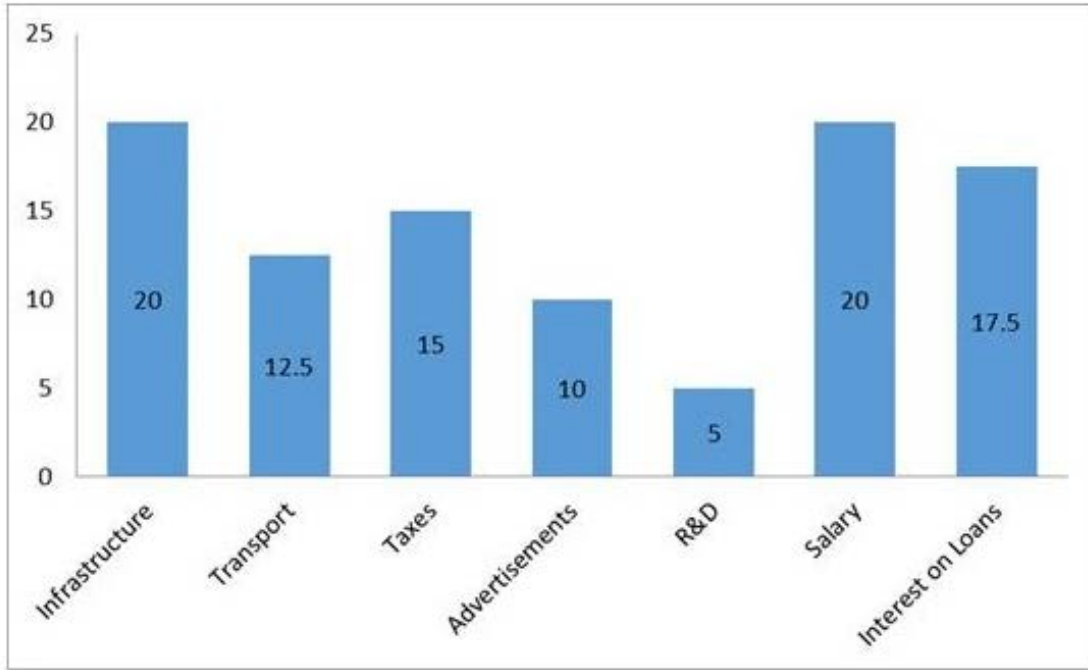
1. ✘ Rs.70,000
2. ✔ Rs.75,000
3. ✘ Rs.74,000
4. ✘ Rs.73,000

Question Number : 34 Question Id : 7368156700 Question Type : MCQ Option Shuffling : Yes Display Question Number : Yes Single Line Question Option : No Option Orientation : Vertical

Correct : 1 Wrong : 0.25

नीचे दिये गए ग्राफ का ध्यान से अध्ययन करें और निम्नलिखित सवाल का जवाब दें।

नीचे दिये गए ग्राफ से कंपनी के कुल खर्च का वितरण प्रतिशत में दर्शाया गया है।



यदि कुल व्यय रु.15,00,000 है, तो अनुसंधान एवं विकास (R&D) पर कितनी राशि खर्च की गई है?

Options :

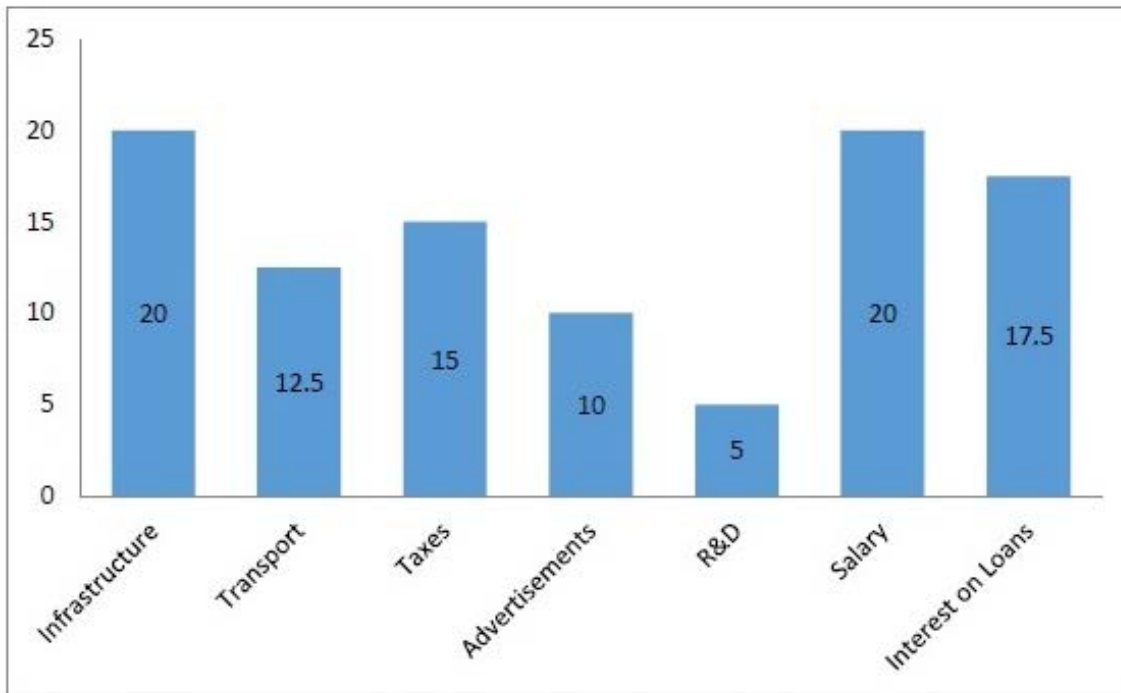
- ✘ रु. 70,000
- ✔ रु. 75,000
- ✘ रु. 74,000
- ✘ रु. 73,000

Question Number : 35 Question Id : 7368156701 Question Type : MCQ Option Shuffling : Yes Display Question Number : Yes Single Line Question Option : No Option Orientation : Vertical

Correct : 1 Wrong : 0.25

Study the following table carefully and answer the question that follows.

The below graph shows the percentage distribution of total expenditure of a company.



If the total expenditure is Rs.1,50,000, then what amount is spent on salary?

Options :

1. ✘ Rs.45,000
2. ✘ Rs.40,000
3. ✘ Rs.35,000
4. ✔ Rs.30,000

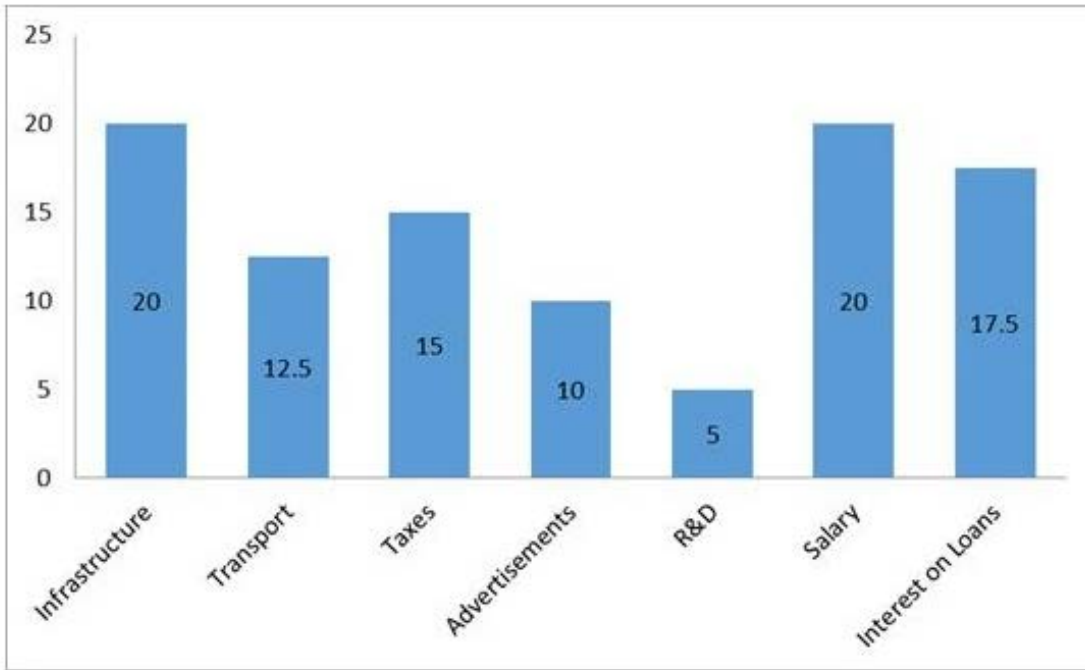
Question Number : 35 Question Id : 7368156701 Question Type : MCQ Option Shuffling : Yes Display Question Number : Yes  
Single Line Question Option : No Option Orientation : Vertical

Correct : 1 Wrong : 0.25



नीचे दिये गए ग्राफ का ध्यान से अध्ययन करे और निम्नलिखित सवाल का जवाब दें।

नीचे दिये गए ग्राफ से कंपनी के कुल खर्च का वितरण प्रतिशत में दर्शाया गया है।



कुल व्यय रु. 1,50,000 है, तो वेतन (Salary) पर कितनी राशि खर्च की गई है?

Options :

1. ✘ रु. 45,000
2. ✘ रु. 40,000
3. ✘ रु. 35,000
4. ✔ रु. 30,000

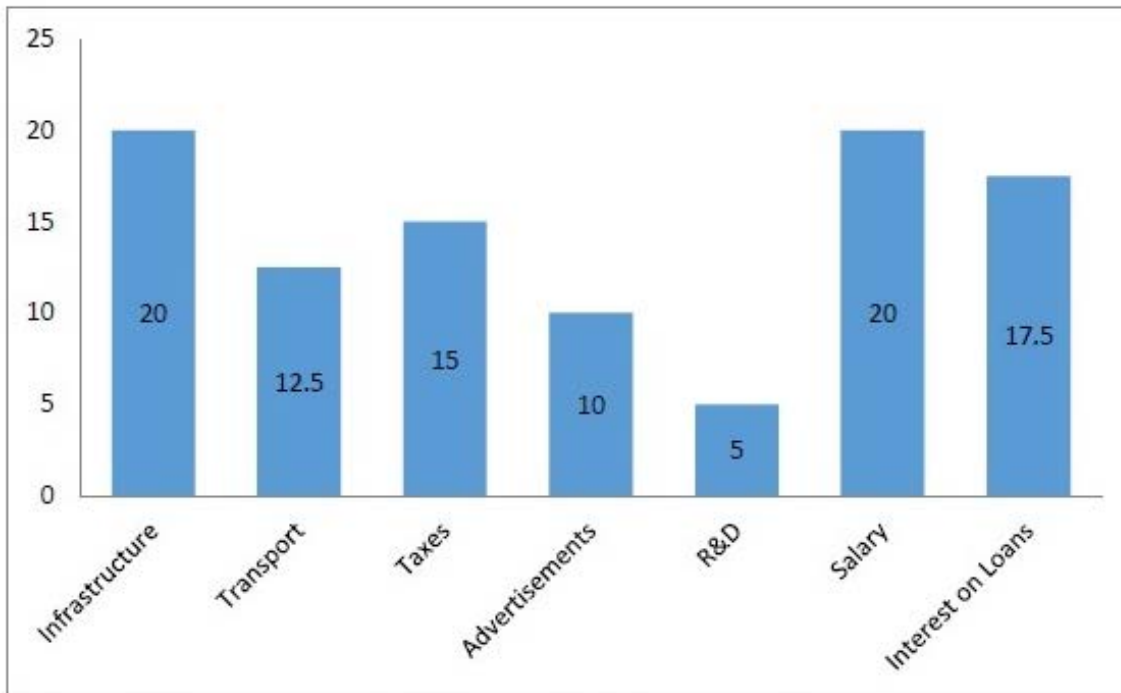
Question Number : 36 Question Id : 7368156702 Question Type : MCQ Option Shuffling : Yes Display Question Number : Yes Single Line Question Option : No Option Orientation : Vertical

Correct : 1 Wrong : 0.25



Study the following table carefully and answer the question that follows.

The below graph shows the percentage distribution of total expenditure of a company.



The company uses its maximum expenditure on which of the following?

Options :

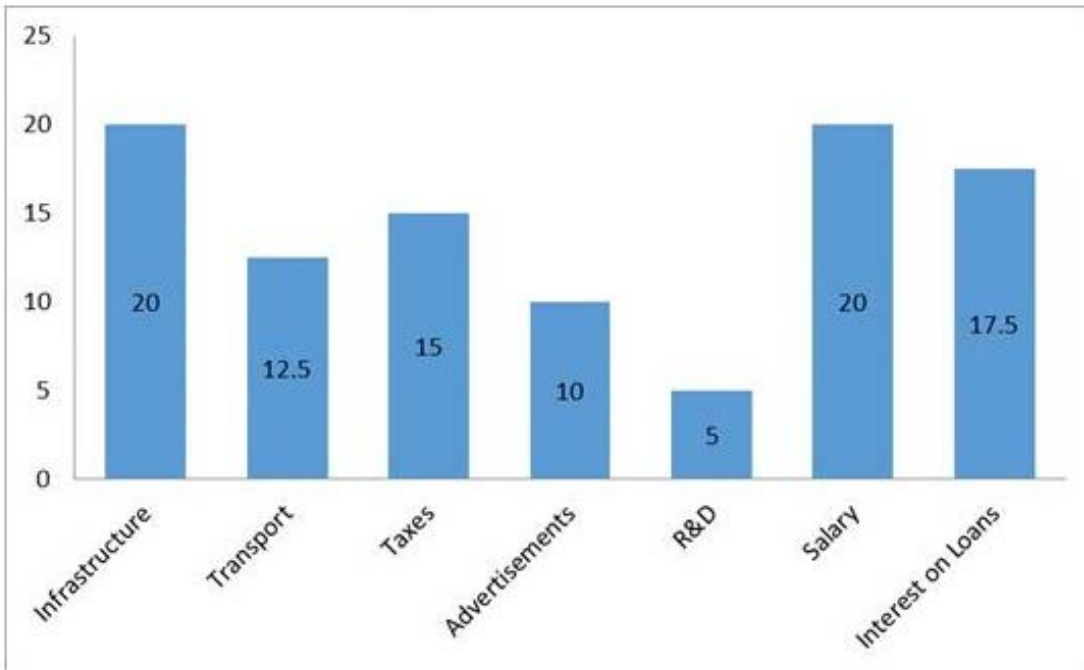
1. ✘ Taxes
2. ✔ Salary
3. ✘ R&D
4. ✘ Transport

Question Number : 36 Question Id : 7368156702 Question Type : MCQ Option Shuffling : Yes Display Question Number : Yes Single Line Question Option : No Option Orientation : Vertical

Correct : 1 Wrong : 0.25

नीचे दिये गए ग्राफ का ध्यान से अध्ययन करें और निम्नलिखित सवाल का जवाब दें।

नीचे दिये गए ग्राफ से कंपनी के कुल खर्च का वितरण प्रतिशत में दर्शाया गया है।



निम्नलिखित में से कंपनी किस पर अधिकतम व्यय करती है?

Options :

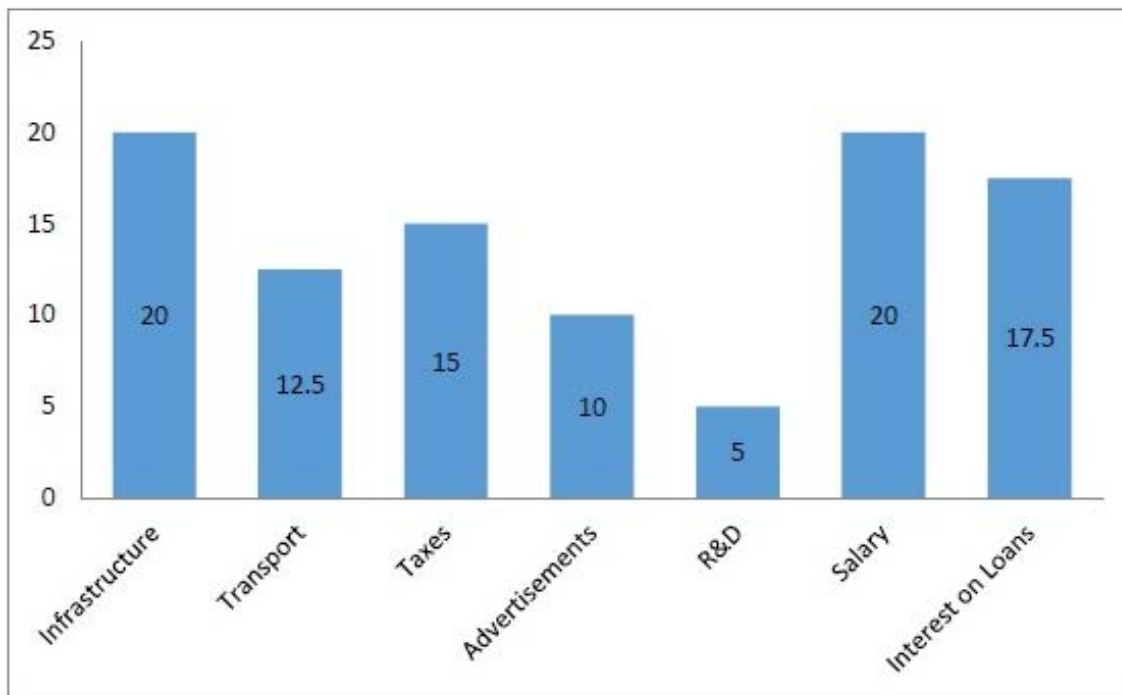
- ✘ कर (Taxes)
- ✔ वेतन (Salary)
- ✘ अनुसंधान एवं विकास (R&D)
- ✘ ट्रांसपोर्ट (Transport)

Question Number : 37 Question Id : 7368156703 Question Type : MCQ Option Shuffling : Yes Display Question Number : Yes Single Line Question Option : No Option Orientation : Vertical

Correct : 1 Wrong : 0.25

Study the following table carefully and answer the question that follows.

The below graph shows the percentage distribution of total expenditure of a company.



If the total expenditure is Rs.8,50,000, then what amount is spent on transport?

Options :

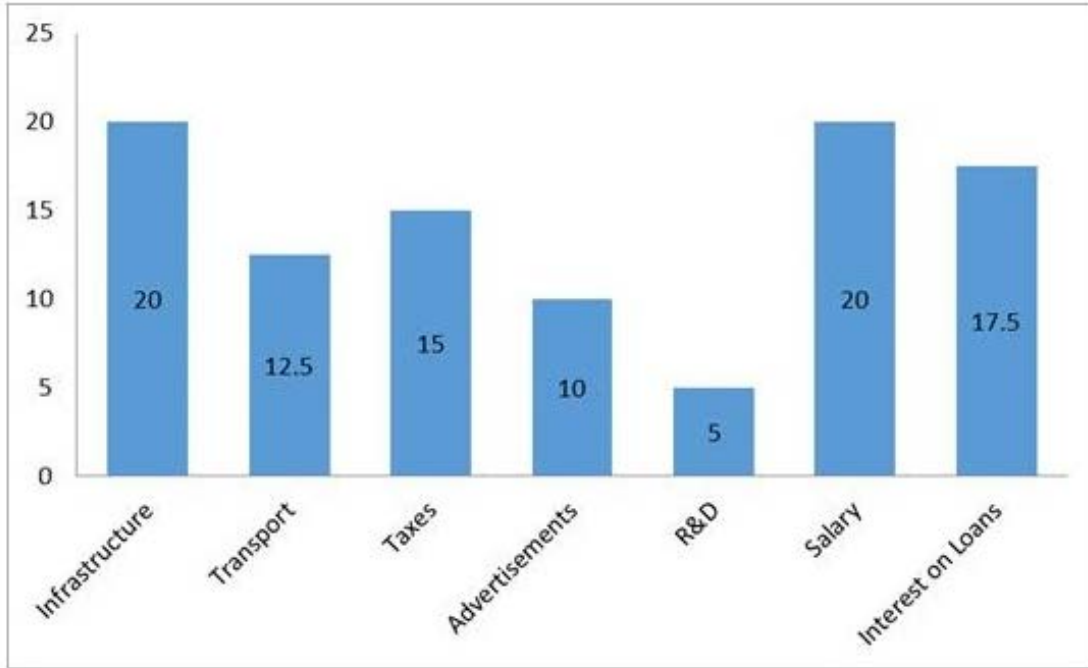
1. ✘ Rs.1,07,250
2. ✔ Rs.1,06,250
3. ✘ Rs.1,06,350
4. ✘ Rs.1,07,350

Question Number : 37 Question Id : 7368156703 Question Type : MCQ Option Shuffling : Yes Display Question Number : Yes  
Single Line Question Option : No Option Orientation : Vertical

Correct : 1 Wrong : 0.25

नीचे दिये गए ग्राफ का ध्यान से अध्ययन करे और निम्नलिखित सवाल का जवाब दें।

नीचे दिये गए ग्राफ से कंपनी के कुल खर्च का वितरण प्रतिशत में दर्शाया गया है।



यदि कुल व्यय रु. 8,50,000 है, तो परिवहन (Transport) पर कितनी राशि खर्च की गई है?

Options :

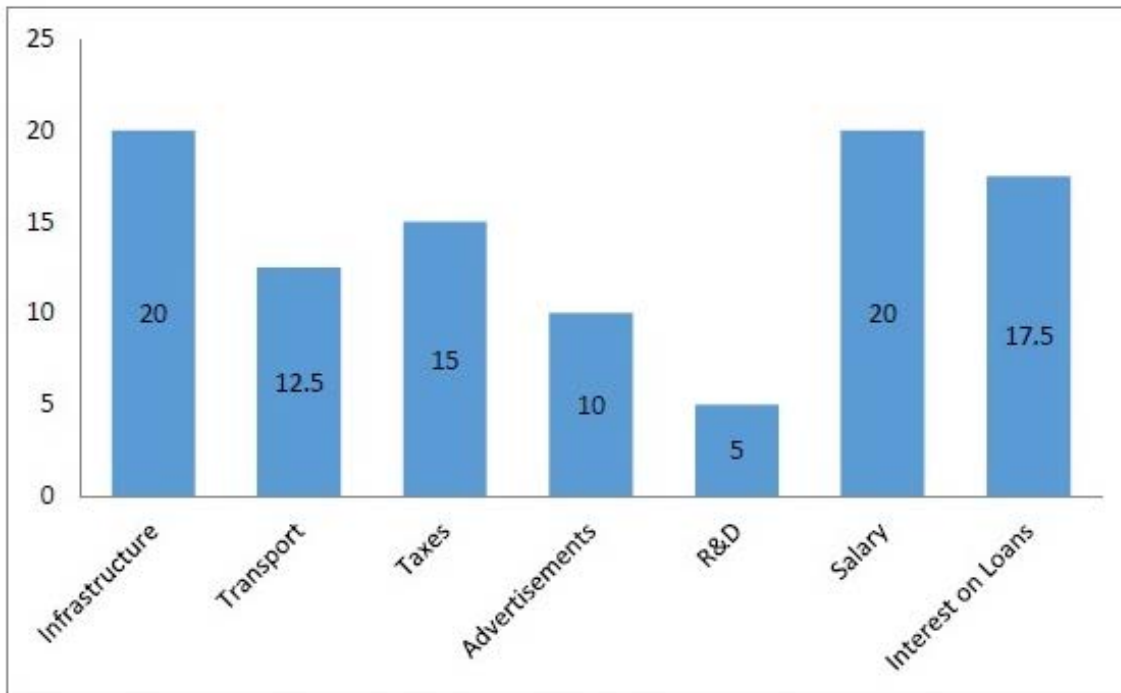
- ✘ रु. 1,07,250
- ✔ रु. 1,06,250
- ✘ रु. 1,06,350
- ✘ रु. 1,07,350

Question Number : 38 Question Id : 7368156704 Question Type : MCQ Option Shuffling : Yes Display Question Number : Yes Single Line Question Option : No Option Orientation : Vertical

Correct : 1 Wrong : 0.25

Study the following table carefully and answer the question that follows.

The below graph shows the percentage distribution of total expenditure of a company.



If the total expenditure is Rs.8,50,000, then what amount is spent on advertisements?

Options :

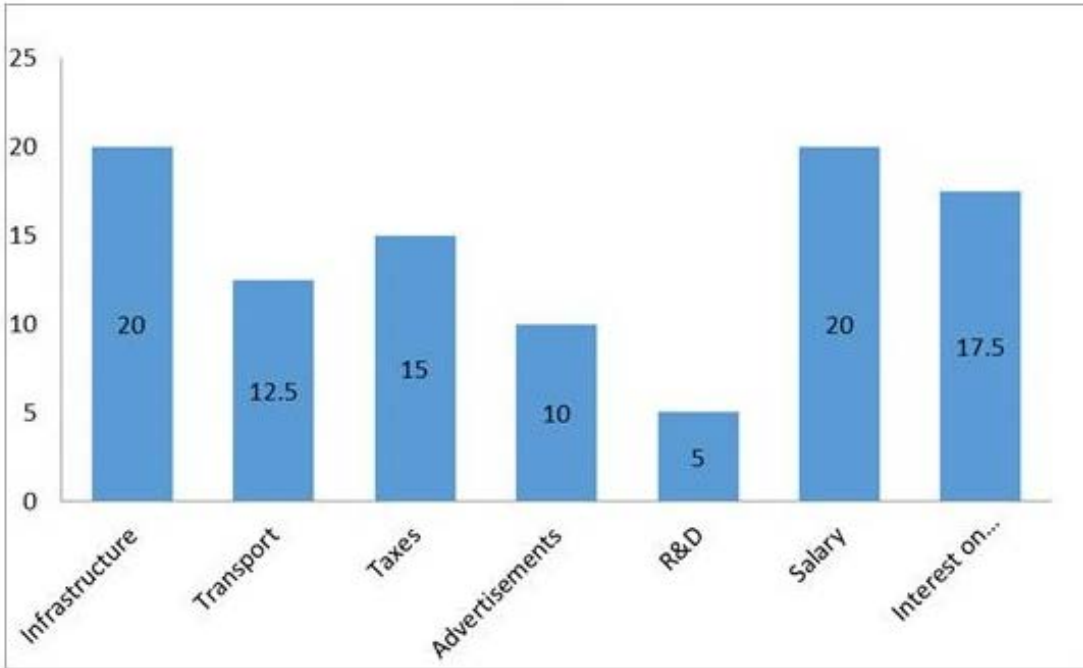
1. ✘ Rs.1,27,000
2. ✘ Rs.1,28,000
3. ✔ Rs.85,000
4. ✘ Rs.1,28,500

Question Number : 38 Question Id : 7368156704 Question Type : MCQ Option Shuffling : Yes Display Question Number : Yes Single Line Question Option : No Option Orientation : Vertical

Correct : 1 Wrong : 0.25

नीचे दिये गए ग्राफ का ध्यान से अध्ययन करे और निम्नलिखित सवाल का जवाब दें।

नीचे दिये गए ग्राफ से कंपनी के कुल खर्च का वितरण प्रतिशत में दर्शाया गया है।



यदि कुल व्यय रु. 8,50,000 है, तो विज्ञापन (Advertisements) पर कितनी राशि खर्च की गई है?

Options :

- ✗ रु. 1,27,000
- ✗ रु. 1,28,000
- ✓ रु. 85,000
- ✗ रु. 1,28,500

Question Number : 39 Question Id : 7368156705 Question Type : MCQ Option Shuffling : Yes Display Question Number : Yes Single Line Question Option : No Option Orientation : Vertical

Correct : 1 Wrong : 0.25

The area of a square field is  $\frac{11}{2}$  hectare. Find the length of its diagonal in metres.

Options :

- ✗ 50mts
- ✓  $100\sqrt{11}$  mts
- ✗ 40mts
- ✗ 25mts

Question Number : 39 Question Id : 7368156705 Question Type : MCQ Option Shuffling : Yes Display Question Number : Yes Single Line Question Option : No Option Orientation : Vertical

Correct : 1 Wrong : 0.25



एक वर्गाकार खेत का क्षेत्रफल  $\frac{11}{2}$  हेक्टेयर है। इसके विकर्ण की लंबाई का मीटर में ज्ञात करें।

Options :

1. ✘ 50 मीटर
2. ✔ 100  $\sqrt{11}$  मीटर
3. ✘ 40 मीटर
4. ✘ 25 मीटर

Question Number : 40 Question Id : 7368156706 Question Type : MCQ Option Shuffling : Yes Display Question Number : Yes Single Line Question Option : No Option Orientation : Vertical

Correct : 1 Wrong : 0.25

The area of an equilateral triangle is  $36\sqrt{3}cm^2$ . Find the length of its side.

Options :

1. ✘ 4cm
2. ✔ 12cm
3. ✘ 4.45cm
4. ✘ 14.25cm

Question Number : 40 Question Id : 7368156706 Question Type : MCQ Option Shuffling : Yes Display Question Number : Yes Single Line Question Option : No Option Orientation : Vertical

Correct : 1 Wrong : 0.25

एक समभुज त्रिकोण का क्षेत्रफल  $36\sqrt{3}$  वर्ग से.मी. है। इसकी भुजा की लंबाई ज्ञात करें।

Options :

1. ✘ 4 से.मी.
2. ✔ 12 से.मी.
3. ✘ 4.45 से.मी.
4. ✘ 14.25 से.मी.

Question Number : 41 Question Id : 7368156707 Question Type : MCQ Option Shuffling : Yes Display Question Number : Yes Single Line Question Option : No Option Orientation : Vertical

Correct : 1 Wrong : 0.25

The diameter of the wheel of a car is 14cm. How many revolutions will it make to travel 1.1km?

Options :

1. ✔ 2500
2. ✘ 6000
3. ✘ 6500
4. ✘ 4500

Question Number : 41 Question Id : 7368156707 Question Type : MCQ Option Shuffling : Yes Display Question Number : Yes Single Line Question Option : No Option Orientation : Vertical

Correct : 1 Wrong : 0.25

एक कार के पहिया का व्यास 14 से.मी. है। कितने चक्र में यह 1.1 कि.मी. की दूरी

तय करेगा?

Options :

1. ✓ 2500
2. ✗ 6000
3. ✗ 6500
4. ✗ 4500

Question Number : 42 Question Id : 7368156708 Question Type : MCQ Option Shuffling : Yes Display Question Number : Yes  
Single Line Question Option : No Option Orientation : Vertical

Correct : 1 Wrong : 0.25

A car travels 750km in 12hours and another 550km in 8hours. Find the average speed of the car.

Options :

1. ✗ 52km/h
2. ✗ 59km/h
3. ✗ 55km/h
4. ✓ 65km/h

Question Number : 42 Question Id : 7368156708 Question Type : MCQ Option Shuffling : Yes Display Question Number : Yes  
Single Line Question Option : No Option Orientation : Vertical

Correct : 1 Wrong : 0.25

एक कार 12 घंटे में 750 कि.मी. और आगे 8 घंटे में अन्य 550 कि.मी. की दूरी तय करती है। कार की औसत गति का ज्ञात करें।

Options :

1. ✗ 52 कि.मी./घंटे
2. ✗ 59 कि.मी./घंटे
3. ✗ 55 कि.मी./घंटे
4. ✓ 65 कि.मी./घंटे

Question Number : 43 Question Id : 7368156709 Question Type : MCQ Option Shuffling : Yes Display Question Number : Yes  
Single Line Question Option : No Option Orientation : Vertical

Correct : 1 Wrong : 0.25

A vehicle travels at 75km/h. How many meters will it travel in 16minutes?

Options :

1. ✗ 18550mts
2. ✗ 19520mts
3. ✓ 20000mts
4. ✗ 19850mts

Question Number : 43 Question Id : 7368156709 Question Type : MCQ Option Shuffling : Yes Display Question Number : Yes  
Single Line Question Option : No Option Orientation : Vertical

Correct : 1 Wrong : 0.25

एक वाहन 75 कि.मी./घंटा की गति से दोड़ता है। यह 16 मिनट में कितने मीटर की

दूरी तय करेगा?

Options :

1. ✘ 18550 मी.
2. ✘ 19520 मी.
3. ✔ 20000 मी.
4. ✘ 19850 मी.

Question Number : 44 Question Id : 7368156710 Question Type : MCQ Option Shuffling : Yes Display Question Number : Yes  
Single Line Question Option : No Option Orientation : Vertical

Correct : 1 Wrong : 0.25

Ajay can cover a certain distance in 2hr 40min by covering two-third of the distance at 4kmph and the rest at 5kmph. Find the total distance.

Options :

1. ✘ 11.32km
2. ✘ 11.5km
3. ✔ 11.42km
4. ✘ 11.6km

Question Number : 44 Question Id : 7368156710 Question Type : MCQ Option Shuffling : Yes Display Question Number : Yes  
Single Line Question Option : No Option Orientation : Vertical

Correct : 1 Wrong : 0.25

अजय एक निश्चित दूरी 2 घंटा 40 मिनट में तय करता है जिसमें से दो-तिहाई दूरी 4 कि.मी./घंटा की गति से और शेष दूरी 5 कि.मी./घंटा की गति से तय करता है। कुल दूरी ज्ञात करें।

Options :

1. ✘ 11.32 कि.मी.
2. ✘ 11.5 कि.मी.
3. ✔ 11.42 कि.मी.
4. ✘ 11.6 कि.मी.

Question Number : 45 Question Id : 7368156711 Question Type : MCQ Option Shuffling : Yes Display Question Number : Yes  
Single Line Question Option : No Option Orientation : Vertical

Correct : 1 Wrong : 0.25

Rasi takes 14minutes to reach school from home. Rupa takes 10minutes to cover the same distance. Find the ratio of time taken by Rasi to the time taken by Rupa.

Options :

1. ✘ 5:2
2. ✔ 7:5
3. ✘ 7:3
4. ✘ 5:7

Question Number : 45 Question Id : 7368156711 Question Type : MCQ Option Shuffling : Yes Display Question Number : Yes  
Single Line Question Option : No Option Orientation : Vertical

Correct : 1 Wrong : 0.25

रासी घर से स्कूल तक पहुंचने के लिए 14 मिनट लेती है। रूपा इतनी ही दूरी को तय करने के लिए 10 मिनट लेती है। रासी और रूपा द्वारा लिये गए समय का अनुपात ज्ञात करें।

Options :

1. ✘ 5:2
2. ✔ 7:5
3. ✘ 7:3
4. ✘ 5:7

Question Number : 46 Question Id : 7368156712 Question Type : MCQ Option Shuffling : Yes Display Question Number : Yes  
Single Line Question Option : No Option Orientation : Vertical

Correct : 1 Wrong : 0.25

Karishma works in office for 6hours 20minutes and Anjali works for 6hours in her office.

Find the ratio of their working hours.

Options :

1. ✘ 14:15
2. ✘ 15:14
3. ✘ 13:15
4. ✔ 19:18

Question Number : 46 Question Id : 7368156712 Question Type : MCQ Option Shuffling : Yes Display Question Number : Yes  
Single Line Question Option : No Option Orientation : Vertical

Correct : 1 Wrong : 0.25

करिश्मा कार्यालय में 6 घंटे 20 मिनट और अंजली 6 घंटे काम करती है। उनके काम के घंटे के अनुपात को ज्ञात करें।

Options :

1. ✘ 14:15
2. ✘ 15:14
3. ✘ 13:15
4. ✔ 19:18

Question Number : 47 Question Id : 7368156713 Question Type : MCQ Option Shuffling : Yes Display Question Number : Yes  
Single Line Question Option : No Option Orientation : Vertical

Correct : 1 Wrong : 0.25

The ratio of times taken by A and B to finish a piece of work is 1:4. If A completes the work in 14days, then find the time taken by B to complete the work.

Options :

1. ✘ 52days
2. ✘ 45days



3. ✘ 48days

4. ✔ 56days

Question Number : 47 Question Id : 7368156713 Question Type : MCQ Option Shuffling : Yes Display Question Number : Yes  
Single Line Question Option : No Option Orientation : Vertical

Correct : 1 Wrong : 0.25

एक काम को पूरा करने के लिए A और B द्वारा लिये गए दिनों का अनुपात 1:4 है।  
यदि A इस काम को 14 दिनों में पूरा करता है, तो B इस काम को कितने दिनों में  
पूरा करेगा?

Options :

1. ✘ 52 दिन

2. ✘ 45 दिन

3. ✘ 48 दिन

4. ✔ 56 दिन

Question Number : 48 Question Id : 7368156714 Question Type : MCQ Option Shuffling : Yes Display Question Number : Yes  
Single Line Question Option : No Option Orientation : Vertical

Correct : 1 Wrong : 0.25

Veda can do a work in 5days and Vani is 30% more expert than Veda to complete the same  
work, then find the total time taken to complete the work by Vani.

Options :

1. ✘  $5\frac{1}{2}$  days

2. ✔  $3\frac{11}{13}$  days

3. ✘ 4days

4. ✘ 6days

Question Number : 48 Question Id : 7368156714 Question Type : MCQ Option Shuffling : Yes Display Question Number : Yes  
Single Line Question Option : No Option Orientation : Vertical

Correct : 1 Wrong : 0.25

वेदा एक काम को 5 दिनों में पूरा कर सकती हैं और वाणी उसी काम को वेदा की  
तुलना में 30% ज्यादा दक्षता से पूरा कर सकती है। तो वाणी को इस काम को पूरा  
करने में कुल कितने दिन लगेंगे?

Options :

1. ✘  $5\frac{1}{2}$  दिन

2. ✔  $3\frac{11}{13}$  दिन

3. ✘ 4 दिन

4. ✘ 6 दिन



Question Number : 49 Question Id : 7368156715 Question Type : MCQ Option Shuffling : Yes Display Question Number : Yes  
Single Line Question Option : No Option Orientation : Vertical

Correct : 1 Wrong : 0.25

If A can do a piece of work in 9days, B can do the same in 6days and C can do the same work in 21days, then working together, how many days will they take to complete the work?

Options :

1. ✘  $2\frac{2}{11}$  days
2. ✘ 9days
3. ✔  $3\frac{3}{41}$  days
4. ✘ 24days

Question Number : 49 Question Id : 7368156715 Question Type : MCQ Option Shuffling : Yes Display Question Number : Yes  
Single Line Question Option : No Option Orientation : Vertical

Correct : 1 Wrong : 0.25

यदि A, 9 दिनों में एक काम को पूरा कर सकता है, B उसी काम को 6 दिनों में और C, 21 दिनों में पूरा कर सकता है, तो उन्हें एकसाथ मिलकर इसी काम को पूरा करने में कितने दिन लगेंगे?

Options :

1. ✘  $2\frac{2}{11}$  दिन
2. ✘ 9 दिन
3. ✔  $3\frac{3}{41}$  दिन
4. ✘ 24 दिन

Question Number : 50 Question Id : 7368156716 Question Type : MCQ Option Shuffling : Yes Display Question Number : Yes  
Single Line Question Option : No Option Orientation : Vertical

Correct : 1 Wrong : 0.25

45 men can complete a work in 15days. 5days after they started working, 10 more men joined them. How many days will they now take to complete the remaining work?

Options :

1. ✔  $8\frac{2}{11}$  days
2. ✘  $6\frac{1}{5}$  days
3. ✘  $7\frac{2}{3}$  days
4. ✘  $8\frac{1}{4}$  days

Question Number : 50 Question Id : 7368156716 Question Type : MCQ Option Shuffling : Yes Display Question Number : Yes  
Single Line Question Option : No Option Orientation : Vertical

Correct : 1 Wrong : 0.25

45 पुरुष 15 दिनों में एक काम को पूरा कर सकते हैं। उनके द्वारा काम शुरू करने के 5 दिन बाद, 10 और पुरुष उनमें शामिल हो गए। अब शेष काम को पूरा करने के लिए उन्हें कितने दिन लगेंगे?

Options :

1. ✓  $8\frac{2}{11}$  दिन
2. ✗  $6\frac{1}{5}$  दिन
3. ✗  $7\frac{1}{3}$  दिन
4. ✗  $8\frac{1}{4}$  दिन

English Language

Section Id :	736815132
Section Number :	2
Section type :	Online
Mandatory or Optional:	Mandatory
Number of Questions:	32
Number of Questions to be attempted:	32
Section Marks:	50
Display Number Panel:	Yes
Group All Questions:	No

Sub-Section Number:	1
Sub-Section Id:	736815198
Question Shuffling Allowed :	No

Question Id : 7368156717 Question Type : COMPREHENSION Sub Question Shuffling Allowed : No Group Comprehension Questions : No

Question Numbers : (51 to 60)

Question Label : Comprehension

Read the passage given below and answer the questions that follow it by choosing the best option for each:

‘The aggressive first person’ has taken over our public space. We’re having too many mys thrust upon us these days. An example of the aggressive first person is this on the bag in my hand: ‘I’m a renewable bag. I’m made with natural fibres so I’m great for the environment and gorgeous.’ ‘How sweet,’ we’re meant to think, ‘that a hessian bag can talk to us and say such adorable things about itself! I’ll definitely start using one of those bags now.’ The words are always written in a fake-childish font to add to the cuteness. They make you feel horribly patronised and preached-at. The people in head office have obviously decided that, although they, the intelligent ones, understand all about saving the environment, if it’s to get across to thick us, they’ll need to put it in baby language. The fact that they think this is gently, lovably humorous also depresses me about the state of our sense of humour.

More and more of what we do doesn’t involve any human contact. We’re on our own, running our lives at our screens, and we’re being lulled into a sense of being loved, cared about and important. But it is a false sense. No one loves us and nothing much is ours. I prefer the more honest second person in YouTube: less invasive. But the me-camp is winning. When the next general recruits his army and navy to fight the world war, the poster luring us to certain death will say ‘My Country Needs Me’ – not ‘Your Country Needs You.’

Sub questions

Question Number : 51 Question Id : 7368156718 Question Type : MCQ Option Shuffling : Yes Display Question Number : Yes Single Line Question Option : No Option Orientation : Vertical

Correct : 1 Wrong : 0.25

An apt title for this excerpt will be

Options :

1. ✘ The *First* Person in the Public Sphere
2. ✔ The Invasive First Person in the Public Sphere
3. ✘ Be Honest: You Don’t Want ‘Me’
4. ✘ The Dehumanized use of I, Me and My

Question Number : 52 Question Id : 7368156719 Question Type : MCQ Option Shuffling : Yes Display Question Number : Yes Single Line Question Option : No Option Orientation : Vertical

Correct : 1 Wrong : 0.25

The writer sets the tone and agenda of the excerpt in his first sentence, which is

Options :

1. ✘ to describe the changes in our public sphere
2. ✔ to complain about the changes in our public sphere
3. ✘ to argue for changes in our perception of the public sphere
4. ✘ to analyze the state of affairs in our public sphere

Question Number : 53 Question Id : 7368156720 Question Type : MCQ Option Shuffling : Yes Display Question Number : Yes Single Line Question Option : No Option Orientation : Vertical

Correct : 1 Wrong : 0.25

The example of the hessian bag

Options :



1. ✘ brings out the abuse of the first person
2. ✘ illustrates the use of baby-language
3. ✘ shows how things become 'people' in the hands of 'clever' people
4. ✔ reveals our possible reaction to the dominating, intrusive 'I'

Question Number : 54 Question Id : 7368156721 Question Type : MCQ Option Shuffling : Yes Display Question Number : Yes  
Single Line Question Option : No Option Orientation : Vertical

Correct : 1 Wrong : 0.25

We are 'running our lives at our screens' refers to

Options :

1. ✘ the dominating effect of computer screens
2. ✘ managing our routines by relying on computers and the 'Net
3. ✔ the impersonal public sphere we experience daily in our lives
4. ✘ how, using screens, we have insulated our lives against reality

Question Number : 55 Question Id : 7368156722 Question Type : MCQ Option Shuffling : Yes Display Question Number : Yes  
Single Line Question Option : No Option Orientation : Vertical

Correct : 1 Wrong : 0.25

"But it is a false sense." The writer is referring to in and through this

Options :

1. ✘ the presence of human personal contact in the 'artificial world'
2. ✘ the use of I in the Internet public sphere to promote a sense of belonging
3. ✔ that there are people to love and care for us on the other side of the 'screens'
4. ✘ to the sense of belonging I, 'my' and 'me' promote when used repeatedly

Question Number : 56 Question Id : 7368156723 Question Type : MCQ Option Shuffling : Yes Display Question Number : Yes  
Single Line Question Option : No Option Orientation : Vertical

Correct : 1 Wrong : 0.25

The message in "My Country Needs Me" is related to

Options :

1. ✔ the extreme sense of patriotism that war-time brings about
2. ✘ the use of "I" even in matters of national concern to 'dupe' us
3. ✘ how the world has become less honest and more invasive
4. ✘ war-time posters for recruiting soldiers for the army

Question Number : 57 Question Id : 7368156724 Question Type : MCQ Option Shuffling : Yes Display Question Number : Yes  
Single Line Question Option : No Option Orientation : Vertical

Correct : 1 Wrong : 0.25

Imagine a yoga-master instructing a group of rich people. He or she will say, according to the writer,

Options :

1. ✘ 'Now, hold your breath'
2. ✔ 'Now, let's hold our breath'

3. ✘ 'Now, I'll hold my breath'

4. ✘ 'Now, they will hold their breath'

Question Number : 58 Question Id : 7368156725 Question Type : MCQ Option Shuffling : Yes Display Question Number : Yes  
Single Line Question Option : No Option Orientation : Vertical

Correct : 1 Wrong : 0.25

The features of the hessian bag that irritate the writer are:

Options :

1. ✘ the nature of the bag and the nature of font employed in the words

what the authors of the words on the bag assume to be the level of intelligence of the

2. ✘ readers

3. ✘ the dominating first person even on the bag and fake-childish font employed

the choice of the medium, the choice of the words and font and the assumptions underlying

4. ✔ all

Question Number : 59 Question Id : 7368156726 Question Type : MCQ Option Shuffling : Yes Display Question Number : Yes  
Single Line Question Option : No Option Orientation : Vertical

Correct : 1 Wrong : 0.25

In 'if it's to get across to thick us', **thick** describes 'us' and means

Options :

1. ✘ stupid

2. ✔ insensitive

3. ✘ dull

4. ✘ fat

Question Number : 60 Question Id : 7368156727 Question Type : MCQ Option Shuffling : Yes Display Question Number : Yes  
Single Line Question Option : No Option Orientation : Vertical

Correct : 1 Wrong : 0.25

The synonym for 'invasive' as used here is

Options :

1. ✘ aggressive

2. ✘ offensive

3. ✔ intrusive

4. ✘ disturbing

Question Id : 7368156717 Question Type : COMPREHENSION Sub Question Shuffling Allowed : No Group Comprehension  
Questions : No

Question Numbers : (51 to 60)

Question Label : Comprehension



Read the passage given below and answer the

questions that follow it by choosing the best option for each:

'The aggressive first person' has taken over our public space. We're having too many mys thrust upon us these days. An example of the aggressive first person is this on the bag in my hand: 'I'm a renewable bag. I'm made with natural fibres so I'm great for the environment and gorgeous.' 'How sweet,' we're meant to think, 'that a hessian bag can talk to us and say such adorable things about itself! I'll definitely start using one of those bags now.' The words are always written in a fake-childish font to add to the cuteness. They make you feel horribly patronised and preached-at. The people in head office have obviously decided that, although they, the intelligent ones, understand all about saving the environment, if it's to get across to thick us, they'll need to put it in baby language. The fact that they think this is gently, lovably humorous also depresses me about the state of our sense of humour. More and more of what we do doesn't involve any human contact. We're on our own, running our lives at our screens, and we're being lulled into a sense of being loved, cared about and important. But it is a false sense. No one loves us and nothing much is ours. I prefer the more honest second person in YouTube: less invasive. But the me-camp is winning. When the next general recruits his army and navy to fight the world war, the poster luring us to certain death will say 'My Country Needs Me' - not 'Your Country Needs You.'

Sub questions

Question Number : 51 Question Id : 7368156718 Question Type : MCQ Option Shuffling : Yes Display Question Number : Yes Single Line Question Option : No Option Orientation : Vertical

Correct : 1 Wrong : 0.25

**visit this website [studytosuccess.in](http://studytosuccess.in)**

An apt title for this excerpt will be

Options :

1. ✘ The *First* Person in the Public Sphere
2. ✔ The Invasive First Person in the Public Sphere
3. ✘ Be Honest: You Don't Want 'Me'
4. ✘ The Dehumanized use of I, Me and My

Question Number : 52 Question Id : 7368156719 Question Type : MCQ Option Shuffling : Yes Display Question Number : Yes Single Line Question Option : No Option Orientation : Vertical

Correct : 1 Wrong : 0.25

The writer sets the tone and agenda of the excerpt in his first sentence, which is

Options :

1. ✘ to describe the changes in our public sphere
2. ✔ to complain about the changes in our public sphere
3. ✘ to argue for changes in our perception of the public sphere
4. ✘ to analyze the state of affairs in our public sphere

Question Number : 53 Question Id : 7368156720 Question Type : MCQ Option Shuffling : Yes Display Question Number : Yes Single Line Question Option : No Option Orientation : Vertical

Correct : 1 Wrong : 0.25

The example of the hessian bag

Options :

1. ✘ brings out the abuse of the first person
2. ✘ illustrates the use of baby-language
3. ✘ shows how things become 'people' in the hands of 'clever' people
4. ✔ reveals our possible reaction to the dominating, intrusive 'I'

Question Number : 54 Question Id : 7368156721 Question Type : MCQ Option Shuffling : Yes Display Question Number : Yes Single Line Question Option : No Option Orientation : Vertical

Correct : 1 Wrong : 0.25

We are 'running our lives at our screens' refers to

Options :

1. ✘ the dominating effect of computer screens
2. ✘ managing our routines by relying on computers and the 'Net'
3. ✔ the impersonal public sphere we experience daily in our lives
4. ✘ how, using screens, we have insulated our lives against reality

Question Number : 55 Question Id : 7368156722 Question Type : MCQ Option Shuffling : Yes Display Question Number : Yes Single Line Question Option : No Option Orientation : Vertical

Correct : 1 Wrong : 0.25

"But it is a false sense." The writer is referring to in and through this

Options :

1. ✘ the presence of human personal contact in the 'artificial world'  
the use of I in the Internet public sphere to promote a sense of
2. ✘ belonging



3. ✓ 'screens'

to the sense of belonging I, 'my' and 'me' promote when used

4. ✗ repeatedly

Question Number : 56 Question Id : 7368156723 Question Type : MCQ Option Shuffling : Yes Display Question Number : Yes  
Single Line Question Option : No Option Orientation : Vertical

Correct : 1 Wrong : 0.25

The message in "My Country Needs Me" is related to

Options :

1. ✓ the extreme sense of patriotism that war-time brings about

2. ✗ the use of "I" even in matters of national concern to 'dupe' us

3. ✗ how the world has become less honest and more invasive

4. ✗ war-time posters for recruiting soldiers for the army

Question Number : 57 Question Id : 7368156724 Question Type : MCQ Option Shuffling : Yes Display Question Number : Yes  
Single Line Question Option : No Option Orientation : Vertical

Correct : 1 Wrong : 0.25

Imagine a yoga-master instructing a group of rich people. He or she will say, according to the writer,

Options :

1. ✗ 'Now, hold your breath'

2. ✓ 'Now, let's hold our breath'

3. ✗ 'Now, I'll hold my breath'

4. ✗ 'Now, they will hold their breath'

Question Number : 58 Question Id : 7368156725 Question Type : MCQ Option Shuffling : Yes Display Question Number : Yes  
Single Line Question Option : No Option Orientation : Vertical

Correct : 1 Wrong : 0.25

The features of the hessian bag that irritate the writer are:

Options :

1. ✗ the nature of the bag and the nature of font employed in the words  
what the authors of the words on the bag assume to be the level of

2. ✗ intelligence of the readers

the dominating first person even on the bag and fake-childish font

3. ✗ employed

the choice of the medium, the choice of the words and font and the

4. ✓ assumptions underlying all

Question Number : 59 Question Id : 7368156726 Question Type : MCQ Option Shuffling : Yes Display Question Number : Yes  
Single Line Question Option : No Option Orientation : Vertical

Correct : 1 Wrong : 0.25

In 'if it's to get across to thick us', thick describes 'us' and means

Options :

1. ✗ stupid

2. ✓ insensitive

3. ✘ dull

4. ✘ fat

Question Number : 60 Question Id : 7368156727 Question Type : MCQ Option Shuffling : Yes Display Question Number : Yes  
Single Line Question Option : No Option Orientation : Vertical

Correct : 1 Wrong : 0.25

The synonym for 'invasive' as used here is

Options :

1. ✘ aggressive

2. ✘ offensive

3. ✔ intrusive

4. ✘ disturbing

Sub-Section Number: 2

Sub-Section Id: 736815199

Question Shuffling Allowed : No

Question Id : 7368156728 Question Type : COMPREHENSION Sub Question Shuffling Allowed : No Group Comprehension  
Questions : No

Question Numbers : (61 to 70)

Question Label : Comprehension

Given below is a passage with ten blanks, numbered from 11 to 20. Fill in the blanks by choosing the correct option given against the corresponding question number:

The idea that technology would deal a fatal blow to the watch, simply hasn't panned out. Men now own mobile phones and BlackBerrys as well as, not \_\_\_\_\_ (11), their timepieces. Watches are one of the \_\_\_\_\_ (12) items that a man can wear that he \_\_\_\_\_ (13) display true character, signal that he is a \_\_\_\_\_ (14) of a particular club – whether it's an Audemars Piguet or a Swatch – and \_\_\_\_\_ (15) in a little dose of extravagance \_\_\_\_\_ (16), generally, drawing criticism. Watches are the \_\_\_\_\_ (17) face of male jewellery: bangles can be \_\_\_\_\_ (18), signet rings dodgy, ear studs a no-no and \_\_\_\_\_ (19) chains risible. A Rolex or a Jaeger LeCoultre, however, \_\_\_\_\_ (20) it's gold, platinum or stainless steel, is viewed as wholly acceptable.

Sub questions

Question Number : 61 Question Id : 7368156729 Question Type : MCQ Option Shuffling : Yes Display Question Number : Yes  
Single Line Question Option : No Option Orientation : Vertical

Correct : 1 Wrong : 0.25

Fill in the blanks by choosing the correct option given against the corresponding question number:

Options :

1. ✘ excluding

2. ✘ including

3. ✔ instead of

4. ✘ because of

Question Number : 62 Question Id : 7368156730 Question Type : MCQ Option Shuffling : Yes Display Question Number : Yes  
Single Line Question Option : No Option Orientation : Vertical

Correct : 1 Wrong : 0.25

**visit this website [studytosuccess.in](http://studytosuccess.in)**



Fill in the blanks by choosing the correct option given against the corresponding question number:

Options :

1.  few
2.  many
3.  little
4.  rare

Question Number : 63 Question Id : 7368156731 Question Type : MCQ Option Shuffling : Yes Display Question Number : Yes Single Line Question Option : No Option Orientation : Vertical

Correct : 1 Wrong : 0.25

Fill in the blanks by choosing the correct option given against the corresponding question number:

Options :

1.  believes
2.  reveals
3.  holds
4.  understands

Question Number : 64 Question Id : 7368156732 Question Type : MCQ Option Shuffling : Yes Display Question Number : Yes Single Line Question Option : No Option Orientation : Vertical

Correct : 1 Wrong : 0.25

Fill in the blanks by choosing the correct option given against the corresponding question number:

Options :

1.  follower
2.  servant
3.  master
4.  member

Question Number : 65 Question Id : 7368156733 Question Type : MCQ Option Shuffling : Yes Display Question Number : Yes Single Line Question Option : No Option Orientation : Vertical

Correct : 1 Wrong : 0.25

Fill in the blanks by choosing the correct option given against the corresponding question number:

Options :

1.  enjoy
2.  treat
3.  indulge
4.  consume

Question Number : 66 Question Id : 7368156734 Question Type : MCQ Option Shuffling : Yes Display Question Number : Yes Single Line Question Option : No Option Orientation : Vertical

Correct : 1 Wrong : 0.25

Fill in the blanks by choosing the correct option given against the corresponding question number:

Options :

1.  without



2. ✘ removing
3. ✘ deleting
4. ✘ obviating

Question Number : 67 Question Id : 7368156735 Question Type : MCQ Option Shuffling : Yes Display Question Number : Yes  
Single Line Question Option : No Option Orientation : Vertical

Correct : 1 Wrong : 0.25

Fill in the blanks by choosing the correct option given against the corresponding question number:

Options :

1. ✘ public
2. ✘ private
3. ✘ dispensable
4. ✔ acceptable

Question Number : 68 Question Id : 7368156736 Question Type : MCQ Option Shuffling : Yes Display Question Number : Yes  
Single Line Question Option : No Option Orientation : Vertical

Correct : 1 Wrong : 0.25

Fill in the blanks by choosing the correct option given against the corresponding question number:

Options :

1. ✔ iffy
2. ✘ dangerous
3. ✘ untrustworthy
4. ✘ risqué

Question Number : 69 Question Id : 7368156737 Question Type : MCQ Option Shuffling : Yes Display Question Number : Yes  
Single Line Question Option : No Option Orientation : Vertical

Correct : 1 Wrong : 0.25

Fill in the blanks by choosing the correct option given against the corresponding question number:

Options :

1. ✘ gaudy
2. ✘ shiny
3. ✔ gold
4. ✘ silver

Question Number : 70 Question Id : 7368156738 Question Type : MCQ Option Shuffling : Yes Display Question Number : Yes  
Single Line Question Option : No Option Orientation : Vertical

Correct : 1 Wrong : 0.25

Fill in the blanks by choosing the correct option given against the corresponding question number:

Options :

1. ✘ iffy
2. ✘ if

3. ✘ weather

4. ✔ whether

Question Id : 7368156728 Question Type : COMPREHENSION Sub Question Shuffling Allowed : No Group Comprehension Questions : No

Question Numbers : (61 to 70)

Question Label : Comprehension

Given below is a passage with ten blanks, numbered from 11 to 20. Fill in the blanks by choosing the correct option given against the corresponding question number:

The idea that technology would deal a fatal blow to the watch, simply hasn't panned out. Men now own mobile phones and BlackBerrys as well as, not \_\_\_\_\_ (11), their timepieces. Watches are one of the \_\_\_\_\_ (12) items that a man can wear that he \_\_\_\_\_ (13) display true character, signal that he is a \_\_\_\_\_ (14) of a particular club - whether it's an Audemars Piguet or a Swatch - and \_\_\_\_\_ (15) in a little dose of extravagance \_\_\_\_\_ (16), generally, drawing criticism. Watches are the \_\_\_\_\_ (17) face of male jewellery: bangles can be \_\_\_\_\_ (18), signet rings dodgy, ear studs a no-no and \_\_\_\_\_ (19) chains risible. A Rolex or a Jaeger LeCoultre, however, \_\_\_\_\_ (20) it's gold, platinum or stainless steel, is viewed as wholly acceptable.

Sub questions

Question Number : 61 Question Id : 7368156729 Question Type : MCQ Option Shuffling : Yes Display Question Number : Yes Single Line Question Option : No Option Orientation : Vertical

Correct : 1 Wrong : 0.25

Fill in the blanks by choosing the correct option given against the corresponding question number:

Options :

1. ✘ excluding

2. ✘ including

3. ✔ instead of

4. ✘ because of

Question Number : 62 Question Id : 7368156730 Question Type : MCQ Option Shuffling : Yes Display Question Number : Yes Single Line Question Option : No Option Orientation : Vertical

Correct : 1 Wrong : 0.25

Fill in the blanks by choosing the correct option given against the corresponding question number:

Options :

1. ✔ few

2. ✘ many

3. ✘ little

4. ✘ rare

Question Number : 63 Question Id : 7368156731 Question Type : MCQ Option Shuffling : Yes Display Question Number : Yes Single Line Question Option : No Option Orientation : Vertical

Correct : 1 Wrong : 0.25

Fill in the blanks by choosing the correct option given against the corresponding question number:

Options :

1. ✔ believes

2. ✘ reveals
3. ✘ holds
4. ✘ understands

Question Number : 64 Question Id : 7368156732 Question Type : MCQ Option Shuffling : Yes Display Question Number : Yes  
Single Line Question Option : No Option Orientation : Vertical

Correct : 1 Wrong : 0.25

Fill in the blanks by choosing the correct option given against the corresponding question number:

Options :

1. ✘ follower
2. ✘ servant
3. ✘ master
4. ✔ member

Question Number : 65 Question Id : 7368156733 Question Type : MCQ Option Shuffling : Yes Display Question Number : Yes  
Single Line Question Option : No Option Orientation : Vertical

Correct : 1 Wrong : 0.25

Fill in the blanks by choosing the correct option given against the corresponding question number:

Options :

1. ✘ enjoy
2. ✘ treat
3. ✔ indulge
4. ✘ consume

Question Number : 66 Question Id : 7368156734 Question Type : MCQ Option Shuffling : Yes Display Question Number : Yes  
Single Line Question Option : No Option Orientation : Vertical

Correct : 1 Wrong : 0.25

Fill in the blanks by choosing the correct option given against the corresponding question number:

Options :

1. ✔ without
2. ✘ removing
3. ✘ deleting
4. ✘ obviating

Question Number : 67 Question Id : 7368156735 Question Type : MCQ Option Shuffling : Yes Display Question Number : Yes  
Single Line Question Option : No Option Orientation : Vertical

Correct : 1 Wrong : 0.25

Fill in the blanks by choosing the correct option given against the corresponding question number:

Options :

1. ✘ public
2. ✘ private
3. ✘ dispensable
4. ✔ acceptable



Question Number : 68 Question Id : 7368156736 Question Type : MCQ Option Shuffling : Yes Display Question Number : Yes  
Single Line Question Option : No Option Orientation : Vertical

Correct : 1 Wrong : 0.25

Fill in the blanks by choosing the correct option given against the corresponding question number:

Options :

1. ✓ iffy
2. ✗ dangerous
3. ✗ untrustworthy
4. ✗ risqué

Question Number : 69 Question Id : 7368156737 Question Type : MCQ Option Shuffling : Yes Display Question Number : Yes  
Single Line Question Option : No Option Orientation : Vertical

Correct : 1 Wrong : 0.25

Fill in the blanks by choosing the correct option given against the corresponding question number:

Options :

1. ✗ gaudy
2. ✗ shiny
3. ✓ gold
4. ✗ silver

Question Number : 70 Question Id : 7368156738 Question Type : MCQ Option Shuffling : Yes Display Question Number : Yes  
Single Line Question Option : No Option Orientation : Vertical

Correct : 1 Wrong : 0.25

Fill in the blanks by choosing the correct option given against the corresponding question number:

Options :

1. ✗ iffy
2. ✗ if
3. ✗ weather
4. ✓ whether

Sub-Section Number:	3
Sub-Section Id:	736815200
Question Shuffling Allowed :	Yes

Question Number : 71 Question Id : 7368156739 Question Type : MCQ Option Shuffling : Yes Display Question Number : Yes  
Single Line Question Option : No Option Orientation : Vertical

Correct : 1 Wrong : 0.25

Given below is a set of five sentences, numbered 1 to 5, which are not in a meaningful order. Choose from the options given, the order which will be acceptable and meaningful:

1. But there are people across the world standing at this moment in bathrooms with knives, quietly hating themselves.
2. Concerns about how they look have become an obsession for these people, primarily as they have a distorted view of their looks.
3. Most of us care about our appearance and like to be seen from particular angles.
4. This disorder is called body dysmorphic disorder (BDD): self-surgery is one of its manifestations.
5. Walking to work, reflective surfaces distract us and we make small adjustments, conceal and straighten

Options :

1. ✘ 3,4,2,1,5
2. ✔ 3,5,1,2,4
3. ✘ 3,4,1,2,5
4. ✘ 3,4,5,1,2

Question Number : 71 Question Id : 7368156739 Question Type : MCQ Option Shuffling : Yes Display Question Number : Yes  
Single Line Question Option : No Option Orientation : Vertical

Correct : 1 Wrong : 0.25

Given below is a set of five sentences, numbered 1 to 5, which are not in a meaningful order. Choose from the options given, the order which will be acceptable and meaningful:

1. But there are people across the world standing at this moment in bathrooms with knives, quietly hating themselves.
2. Concerns about how they look have become an obsession for these people, primarily as they have a distorted view of their looks.
3. Most of us care about our appearance and like to be seen from particular angles.
4. This disorder is called body dysmorphic disorder (BDD): self-surgery is one of its manifestations.
5. Walking to work, reflective surfaces distract us and we make small adjustments, conceal and straighten

Options :

1. ✘ 3,4,2,1,5
2. ✔ 3,5,1,2,4



3. ✘ 3,4,1,2,5

4. ✘ 3,4,5,1,2

Question Number : 72 Question Id : 7368156740 Question Type : MCQ Option Shuffling : Yes Display Question Number : Yes  
Single Line Question Option : No Option Orientation : Vertical

Correct : 1 Wrong : 0.25

Given below is a set of five sentences, numbered 1 to 5, which are not in a meaningful order. Choose from the options given, the order which will be acceptable and meaningful:

1. Most people's hearts recover naturally within a few months, but 3 to 5 per cent of people die, the same death rate as for conventional heart attacks.
2. The syndrome arises when there is a sudden ballooning of the base of the left ventricle, the chamber in the heart from which blood is pumped round the body.
3. As the ventricle distorts – assuming the shape of the “takotsubo” pot used to catch octopuses in Japan – it becomes partially paralysed.
4. People should be aware that “I nearly died laughing” may be uncomfortably close to reality as even positive emotions can cause acute cardiac events.
5. Takotsubo syndrome is usually known as ‘broken-heart syndrome’ because of its association with negative events, such as bereavements, triggering heart attacks.

Options :

1. ✔ 5,2,3,1,4

2. ✘ 5,1,2,3,4

3. ✘ 5,4,3,2,1

4. ✘ 5,3,2,1,4

Question Number : 72 Question Id : 7368156740 Question Type : MCQ Option Shuffling : Yes Display Question Number : Yes  
Single Line Question Option : No Option Orientation : Vertical

Correct : 1 Wrong : 0.25

Given below is a set of five sentences, numbered 1 to 5, which are not in a meaningful order. Choose from the options given, the order which will be acceptable and meaningful:

1. Most people's hearts recover naturally within a few months, but 3 to 5 per cent of people die, the same death rate as for conventional heart attacks.
2. The syndrome arises when there is a sudden ballooning of the base of the left ventricle, the chamber in the heart from which blood is pumped round the body.
3. As the ventricle distorts - assuming the shape of the "takotsubo" pot used to catch octopuses in Japan - it becomes partially paralysed.
4. People should be aware that "I nearly died laughing" may be uncomfortably close to reality as even positive emotions can cause acute cardiac events.
5. Takotsubo syndrome is usually known as 'broken-heart syndrome' because of its association with negative events, such as bereavements, triggering heart attacks.

Options :

1. ✓ 5,2,3,1,4
2. ✗ 5,1,2,3,4
3. ✗ 5,4,3,2,1
4. ✗ 5,3,2,1,4

Question Number : 73 Question Id : 7368156741 Question Type : MCQ Option Shuffling : Yes Display Question Number : Yes  
Single Line Question Option : No Option Orientation : Vertical

Correct : 1 Wrong : 0.25

Given below is a set of five sentences, numbered 1 to 5, which are not in a meaningful order. Choose from the options given, the order which will be acceptable and meaningful:

1. Of course 'the shrine trees' do not prove that chimps believe in any kind of god, but it is the latest evidence of their extraordinarily rich behaviour.
2. Chimps have earlier been seen using spears to hunt bushbabies, going to war, and seemingly using doll-shaped sticks as toys.
3. Most pertinent to the discovery of the "shrine trees" is the evidence of chimps displaying strange ritual-like behavior: a "ritual" dance during rainfall, or in the face of a bush fire.
4. This could be a means of communication, since rocks make a loud bang when they hit hollow trees, or it could be more symbolic.
5. When camera traps were set up near trees marked with unusual scratches, chimps were captured placing stones in the hollow of trees, and bashing trees with rocks.

Options :

1. ✘ 5,1,2,3,4
2. ✔ 5,4,1,3,2
3. ✘ 5,4,3,2,1
4. ✘ 5,4,1,2,3

Question Number : 73 Question Id : 7368156741 Question Type : MCQ Option Shuffling : Yes Display Question Number : Yes  
Single Line Question Option : No Option Orientation : Vertical

Correct : 1 Wrong : 0.25



Given below is a set of five sentences, numbered 1 to 5, which are not in a meaningful order. Choose from the options given, the order which will be acceptable and meaningful:

1. Of course 'the shrine trees' do not prove that chimps believe in any kind of god, but it is the latest evidence of their extraordinarily rich behaviour.
2. Chimps have earlier been seen using spears to hunt bushbabies, going to war, and seemingly using doll-shaped sticks as toys.
3. Most pertinent to the discovery of the "shrine trees" is the evidence of chimps displaying strange ritual-like behavior: a "ritual" dance during rainfall, or in the face of a bush fire.
4. This could be a means of communication, since rocks make a loud bang when they hit hollow trees, or it could be more symbolic.
5. When camera traps were set up near trees marked with unusual scratches, chimps were captured placing stones in the hollow of trees, and bashing trees with rocks.

Options :

1. ✘ 5,1,2,3,4
2. ✔ 5,4,1,3,2
3. ✘ 5,4,3,2,1
4. ✘ 5,4,1,2,3

Question Number : 74 Question Id : 7368156742 Question Type : MCQ Option Shuffling : Yes Display Question Number : Yes Single Line Question Option : No Option Orientation : Vertical

Correct : 1 Wrong : 0.25

Given below is a famous saying, the words of which have been jumbled up and numbered. Choose the right order from the given options:

**or dared / Shakespeare's comedy/ no audacious spirit / to imitate /has dreamed**

**1    2    3    4    5**

Options :

1. ✔ 3,5,1,4,2
2. ✘ 3,1,5,4,2
3. ✘ 3,5,1,2,4
4. ✘ 3,4,5,2,1



Question Number : 74 Question Id : 7368156742 Question Type : MCQ Option Shuffling : Yes Display Question Number : Yes  
Single Line Question Option : No Option Orientation : Vertical

Correct : 1 Wrong : 0.25

Given below is a famous saying, the words of which have been jumbled up and numbered. Choose the right order from the given options:

or dared / Shakespeare's comedy/ no audacious spirit / to imitate / has dreamed  
1 2 3 4 5

Options :

1. ✓ 3,5,1,4,2
2. ✗ 3,1,5,4,2
3. ✗ 3,5,1,2,4
4. ✗ 3,4,5,2,1

Question Number : 75 Question Id : 7368156743 Question Type : MCQ Option Shuffling : Yes Display Question Number : Yes  
Single Line Question Option : No Option Orientation : Vertical

Correct : 1 Wrong : 0.25

Given below is a famous saying, the words of which have been jumbled up and numbered. Choose the right order from the given options:

far more tragic than / is / sometimes / death / to live on  
1 2 3 4 5

Options :

1. ✗ 5,4,3,2,1
2. ✗ 5,3,2,1,4
3. ✓ 5,2,3,1,4
4. ✗ 5,2,3,4,1

Question Number : 75 Question Id : 7368156743 Question Type : MCQ Option Shuffling : Yes Display Question Number : Yes  
Single Line Question Option : No Option Orientation : Vertical

Correct : 1 Wrong : 0.25

Given below is a famous saying, the words of which have been jumbled up and numbered. Choose the right order from the given options:

far more tragic than / is / sometimes / death / to live on  
1 2 3 4 5

Options :

1. ✗ 5,4,3,2,1
2. ✗ 5,3,2,1,4
3. ✓ 5,2,3,1,4

4. ✘ 5,2,3,4,1

Question Number : 76 Question Id : 7368156744 Question Type : MCQ Option Shuffling : Yes Display Question Number : Yes  
Single Line Question Option : No Option Orientation : Vertical

Correct : 1 Wrong : 0.25

Given below is an ungrammatical, defective, sentence and there are 4 options given. One of them is the correct and improved form of the sentence. Choose the one which improves the given sentence:

**The exploration of the New World and the South Pacific brings a horde of culinary treats across the kitchens and restaurants of England.**

Options :

1. ✘ The exploration of the New World and the South Pacific brings a multitude of culinary treats into the kitchens and restaurants of England.
2. ✔ The exploration of the New World and the South Pacific brought a multitude of culinary treats into the kitchens and restaurants of England.
3. ✘ The explorations of the New World and the South Pacific bring a gang of culinary treats into the kitchens and restaurants of England.
4. ✘ The exploration of the New World and the South Pacific brought a multitude of culinary treats up to the kitchens and restaurants of England.

Question Number : 76 Question Id : 7368156744 Question Type : MCQ Option Shuffling : Yes Display Question Number : Yes  
Single Line Question Option : No Option Orientation : Vertical

Correct : 1 Wrong : 0.25

Given below is an ungrammatical, defective, sentence and there are 4 options given. One of them is the correct and improved form of the sentence. Choose the one which improves the given sentence:

The exploration of the New World and the South Pacific brings a horde of culinary treats across the kitchens and restaurants of England.

Options :

1. ✘ The exploration of the New World and the South Pacific brings a multitude of culinary treats into the kitchens and restaurants of England.
2. ✔ The exploration of the New World and the South Pacific brought a multitude of culinary treats into the kitchens and restaurants of England.
3. ✘ The explorations of the New World and the South Pacific bring a gang of culinary treats into the kitchens and restaurants of England.



The exploration of the New World and the South Pacific brought a multitude of culinary treats up to the kitchens and restaurants of

4. ✘ England.

Question Number : 77 Question Id : 7368156745 Question Type : MCQ Option Shuffling : Yes Display Question Number : Yes Single Line Question Option : No Option Orientation : Vertical

Correct : 1 Wrong : 0.25

Given below is an ungrammatical, defective, sentence and there are 4 options given. One of them is the correct and improved form of the sentence. Choose the one which improves the given sentence:

**Considered the gold age of English history, the Elizabethan era seen a flowering of British culture in abundant different areas.**

Options :

1. ✘ Considered the gold age of English history, the Elizabethan era saw a flowering of British culture in abundant different areas.
2. ✘ Considered the golden age of English history, the Elizabethan era has seen a flowering of British culture in many different areas
3. ✔ Considered the golden age of English history, the Elizabethan era saw a flowering of British culture in many different areas
4. ✘ Considered the gold age of English history, the Elizabethan era saw a flowering of Britain in many different areas

Question Number : 77 Question Id : 7368156745 Question Type : MCQ Option Shuffling : Yes Display Question Number : Yes Single Line Question Option : No Option Orientation : Vertical

Correct : 1 Wrong : 0.25

Given below is an ungrammatical, defective, sentence and there are 4 options given. One of them is the correct and improved form of the sentence. Choose the one which improves the given sentence:

Considered the gold age of English history, the Elizabethan era seen a flowering of British culture in abundant different areas.

Options :

1. ✘ Considered the gold age of English history, the Elizabethan era saw a flowering of British culture in abundant different areas.
2. ✘ Considered the golden age of English history, the Elizabethan era has seen a flowering of British culture in many different areas
3. ✔ Considered the golden age of English history, the Elizabethan era saw a flowering of British culture in many different areas
4. ✘ Considered the gold age of English history, the Elizabethan era saw a flowering of Britain in many different areas



Question Number : 78 Question Id : 7368156746 Question Type : MCQ Option Shuffling : Yes Display Question Number : Yes  
Single Line Question Option : No Option Orientation : Vertical

Correct : 1 Wrong : 0.25

Given below is an ungrammatical, defective, sentence and there are 4 options given. One of them is the correct and improved form of the sentence. Choose the one which improves the given sentence:

**Elizabethan laws even dictated what kind and color of cloth each classes could wear so that they must be immediately identified.**

Options :

1. ✘ Elizabethan laws even dictated what kind and color of cloth each class could wear so that they could be immediately identified.
2. ✘ Elizabethan laws even dictated what kind and color of clothes each classes could wear so that they must be immediately identified.
3. ✔ Elizabethan laws even dictated what kind and color of clothes each class could wear so that they could be immediately identified.
4. ✘ Elizabethan laws even dictated what kind and color of cloth each class could wear so that they could be immediately identify.

Question Number : 78 Question Id : 7368156746 Question Type : MCQ Option Shuffling : Yes Display Question Number : Yes  
Single Line Question Option : No Option Orientation : Vertical

Correct : 1 Wrong : 0.25

Given below is an ungrammatical, defective, sentence and there are 4 options given. One of them is the correct and improved form of the sentence. Choose the one which improves the given sentence:

**Elizabethan laws even dictated what kind and color of cloth each classes could wear so that they must be immediately identified.**

Options :

1. ✘ Elizabethan laws even dictated what kind and color of cloth each class could wear so that they could be immediately identified.
2. ✘ Elizabethan laws even dictated what kind and color of clothes each classes could wear so that they must be immediately identified.
3. ✔ Elizabethan laws even dictated what kind and color of clothes each class could wear so that they could be immediately identified.
4. ✘ Elizabethan laws even dictated what kind and color of cloth each class could wear so that they could be immediately identify.

Question Number : 79 Question Id : 7368156747 Question Type : MCQ Option Shuffling : Yes Display Question Number : Yes  
Single Line Question Option : No Option Orientation : Vertical

Correct : 1 Wrong : 0.25



Given below is an ungrammatical, defective, sentence and there are 4 options given. One of them is the correct and improved form of the sentence. Choose the one which improves the given sentence:

**A beard was considered a Elizabethan fashion accessory and were usually accompanied with a mustache, shaved to a point.**

Options :

1. ✘ A beard was considered a Elizabethan fashion accessory and was usually accompanied by a mustache, shaved to a point.
2. ✔ A beard was considered an Elizabethan fashion accessory and was usually accompanied by a mustache, trimmed to a point.
3. ✘ A beard was considered an Elizabethan fashion accessory and was usually accompanied with a mustache, shaved to a point.
4. ✘ A beard was considered a Elizabethan fashion accessory and was usually accompanied by a mustache, trimmed to a point

Question Number : 79 Question Id : 7368156747 Question Type : MCQ Option Shuffling : Yes Display Question Number : Yes Single Line Question Option : No Option Orientation : Vertical

Correct : 1 Wrong : 0.25

Given below is an ungrammatical, defective, sentence and there are 4 options given. One of them is the correct and improved form of the sentence. Choose the one which improves the given sentence:

**A beard was considered a Elizabethan fashion accessory and were usually accompanied with a mustache, shaved to a point.**

Options :

1. ✘ A beard was considered a Elizabethan fashion accessory and was usually accompanied by a mustache, shaved to a point.
2. ✔ A beard was considered an Elizabethan fashion accessory and was usually accompanied by a mustache, trimmed to a point.
3. ✘ A beard was considered an Elizabethan fashion accessory and was usually accompanied with a mustache, shaved to a point.
4. ✘ A beard was considered a Elizabethan fashion accessory and was usually accompanied by a mustache, trimmed to a point

Question Number : 80 Question Id : 7368156748 Question Type : MCQ Option Shuffling : Yes Display Question Number : Yes Single Line Question Option : No Option Orientation : Vertical

Correct : 1 Wrong : 0.25



Given below is an ungrammatical, defective, sentence and there are 4 options given. One of them is the correct and improved form of the sentence. Choose the one which improves the given sentence:

**Colour had much meaning on the Elizabethan Age, so the colour you wore determined what type of person you are.**

Options :

1. ✘ Colour had much meaning on the Elizabethan Age, as the colour you wore determined what type of person you were.
2. ✘ Colour had much meaning in the Elizabethan Age, as the colour you wore determined what type of person you are.
3. ✘ Colour had much meaning in the Elizabethan Age, so the colour you wore determined what type of person you were.
4. ✔ Colour had much meaning in the Elizabethan Age, as the colour you wore determined what type of person you were.

Question Number : 80 Question Id : 7368156748 Question Type : MCQ Option Shuffling : Yes Display Question Number : Yes Single Line Question Option : No Option Orientation : Vertical

Correct : 1 Wrong : 0.25

Given below is an ungrammatical, defective, sentence and there are 4 options given. One of them is the correct and improved form of the sentence. Choose the one which improves the given sentence:

Colour had much meaning on the Elizabethan Age, so the colour you wore determined what type of person you are.

Options :

1. ✘ Colour had much meaning on the Elizabethan Age, as the colour you wore determined what type of person you were.
2. ✘ Colour had much meaning in the Elizabethan Age, as the colour you wore determined what type of person you are.
3. ✘ Colour had much meaning in the Elizabethan Age, so the colour you wore determined what type of person you were.
4. ✔ Colour had much meaning in the Elizabethan Age, as the colour you wore determined what type of person you were.

Question Number : 81 Question Id : 7368156749 Question Type : MCQ Option Shuffling : Yes Display Question Number : Yes Single Line Question Option : No Option Orientation : Vertical

Correct : 1 Wrong : 0.25



Given below is a sentence which is to be transformed and rewritten as indicated in brackets and there are four options given. Choose the one which 'correctly' transforms the given sentence :

**I was always feeding the monkeys when I visited the temple. {into passive}**

Options :

1. ✓ The monkeys were always being fed whenever the temple was visited by me.
2. ✗ The monkeys were always being fed when I visited the temple.
3. ✗ I was always feeding the monkeys whenever the temple had been visited by me.
4. ✗ When the temple had been visited by me, the monkeys were always being fed.

Question Number : 81 Question Id : 7368156749 Question Type : MCQ Option Shuffling : Yes Display Question Number : Yes  
Single Line Question Option : No Option Orientation : Vertical

Correct : 1 Wrong : 0.25

Given below is a sentence which is to be transformed and rewritten as indicated in brackets and there are four options given. Choose the one which 'correctly' transforms the given sentence :

**I was always feeding the monkeys when I visited the temple. {into passive}**

Options :

1. ✓ The monkeys were always being fed whenever the temple was visited by me.
2. ✗ The monkeys were always being fed when I visited the temple.
3. ✗ I was always feeding the monkeys whenever the temple had been visited by me.
4. ✗ When the temple had been visited by me, the monkeys were always being fed.

Question Number : 82 Question Id : 7368156750 Question Type : MCQ Option Shuffling : Yes Display Question Number : Yes  
Single Line Question Option : No Option Orientation : Vertical

Correct : 1 Wrong : 0.25

Given below is a sentence which is to be transformed and rewritten as indicated in brackets and there are four options given. Choose the one which 'correctly' transforms the given sentence :

**Whenever I needed some monetary help, I used to approach my teacher. {into a simple sentence}**

Options :

1. ✗ Any time needing some monetary help, I used to approach my teacher.



2. ✓ Whenever needing some monetary help, I used to approach my teacher.
3. ✗ Needing some monetary help, I used to approach my teacher at times.
4. ✗ Approaching my teacher whenever needing some money help was something I was used to.

Question Number : 82 Question Id : 7368156750 Question Type : MCQ Option Shuffling : Yes Display Question Number : Yes  
Single Line Question Option : No Option Orientation : Vertical

Correct : 1 Wrong : 0.25

Given below is a sentence which is to be transformed and rewritten as indicated in brackets and there are four options given. Choose the one which 'correctly' transforms the given sentence :

Whenever I needed some monetary help, I used to approach my teacher.

{into a simple sentence}

Options :

1. ✗ Any time needing some monetary help, I used to approach my teacher.
2. ✓ Whenever needing some monetary help, I used to approach my teacher.
3. ✗ Needing some monetary help, I used to approach my teacher at times.
4. ✗ Approaching my teacher whenever needing some money help was something I was used to.

Question Number : 83 Question Id : 7368156751 Question Type : MCQ Option Shuffling : Yes Display Question Number : Yes  
Single Line Question Option : No Option Orientation : Vertical

Correct : 1 Wrong : 0.25

Given below is a sentence which is to be transformed and rewritten as indicated in brackets and there are four options given. Choose the one which 'correctly' transforms the given sentence :

**Father to daughter: "Please give up this useless fellow. If you won't, we will hang ourselves." {Report this}**

Options :

1. ✓ A father requested his daughter to give up that useless fellow and threatened her that if she would not, they would hang themselves.
2. ✗ A father asked his daughter to give up a useless fellow and threatened her that if she would not, they would hang themselves.
3. ✗ A father requested his daughter to give up this useless fellow and told her that if she won't, they would hang themselves.
4. ✗ A father pleaded with his daughter to give up a useless fellow and told her that they would hang themselves.



Question Number : 83 Question Id : 7368156751 Question Type : MCQ Option Shuffling : Yes Display Question Number : Yes  
Single Line Question Option : No Option Orientation : Vertical

Correct : 1 Wrong : 0.25

Given below is a sentence which is to be transformed and rewritten as indicated in brackets and there are four options given. Choose the one which 'correctly' transforms the given sentence :

Father to daughter: "Please give up this useless fellow. If you won't, we will hang ourselves." {Report this}

Options :

1. ✓ A father requested his daughter to give up that useless fellow and threatened her that if she would not, they would hang themselves.
2. ✗ A father asked his daughter to give up a useless fellow and threatened her that if she would not, they would hang themselves.
3. ✗ A father requested his daughter to give up this useless fellow and told her that if she won't, they would hang themselves.
4. ✗ A father pleaded with his daughter to give up a useless fellow and told her that they would hang themselves.

Question Number : 84 Question Id : 7368156752 Question Type : MCQ Option Shuffling : Yes Display Question Number : Yes  
Single Line Question Option : No Option Orientation : Vertical

Correct : 1 Wrong : 0.25

Read the sentence given below. Pay attention to the words/phrases/segments in *italics*. Choose the appropriate substitutes for the phrases and clauses *italicized*:

He *explained the procedures to me* before we started.

Options :

1. ✗ broke down the procedures
2. ✓ took me through the procedures
3. ✗ gave me the procedures
4. ✗ showed me the procedures

Question Number : 84 Question Id : 7368156752 Question Type : MCQ Option Shuffling : Yes Display Question Number : Yes  
Single Line Question Option : No Option Orientation : Vertical

Correct : 1 Wrong : 0.25

Read the sentence given below. Pay attention to the words/phrases/segments in *italics*. Choose the appropriate substitutes for the phrases and clauses *italicized*.

He *explained the procedures to me* before we started.

Options :

1. ✘ broke down the procedures
2. ✔ took me through the procedures
3. ✘ gave me the procedures
4. ✘ showed me the procedures

Question Number : 85 Question Id : 7368156753 Question Type : MCQ Option Shuffling : Yes Display Question Number : Yes  
Single Line Question Option : No Option Orientation : Vertical

Correct : 1 Wrong : 0.25

Read the sentence given below. Pay attention to the words/phrases/segments in *italics*.  
Choose the appropriate substitutes for the phrases and clauses *italicized*:

John to Mary: "I will continue to take care of you *whether I have money or not, and whether I am healthy or ill.*"

Options :

1. ✘ John to Mary: "I will continue to take care you in rain and shine."
2. ✔ John to Mary: "I will continue to take care you through thick and thin."
3. ✘ John to Mary: "I will continue to take care of you in prosperity and penury."
4. ✘ John to Mary: "I will continue to take care of you whatever be my situation."

Question Number : 85 Question Id : 7368156753 Question Type : MCQ Option Shuffling : Yes Display Question Number : Yes  
Single Line Question Option : No Option Orientation : Vertical

Correct : 1 Wrong : 0.25

Read the sentence given below. Pay attention to the  
words/phrases/segments in *italics*. Choose the appropriate substitutes  
for the phrases and clauses *italicized*.

John to Mary: "I will continue to take care of you *whether I have money or not, and whether I am healthy or ill.*"

Options :

1. ✘ John to Mary: "I will continue to take care you in rain and shine."
2. ✔ John to Mary: "I will continue to take care you through thick and thin."  
John to Mary: "I will continue to take care of you in prosperity and
3. ✘ penury."  
John to Mary: "I will continue to take care of you whatever be my
4. ✘ situation."

Question Number : 86 Question Id : 7368156754 Question Type : MCQ Option Shuffling : Yes Display Question Number : Yes  
Single Line Question Option : No Option Orientation : Vertical

Correct : 1 Wrong : 0.25



Given below is a sentence which divided into four parts labelled A, B, C and D. One of these parts contains an error. Choose the part that has the error:

**He talked / they around / to accepting / his point of view.**

**A                      B                      C                      D**

Options :

1. ✘ A
2. ✔ B
3. ✘ C
4. ✘ D

Question Number : 86 Question Id : 7368156754 Question Type : MCQ Option Shuffling : Yes Display Question Number : Yes  
Single Line Question Option : No Option Orientation : Vertical

Correct : 1 Wrong : 0.25

Given below is a sentence which divided into four parts labelled A, B, C, and D. One of these parts contains an error. Choose the part that has the error:

He talked / they around / to accepting / his point of view.

**A                      B                      C                      D**

Options :

1. ✘ A
2. ✔ B
3. ✘ C
4. ✘ D

Question Number : 87 Question Id : 7368156755 Question Type : MCQ Option Shuffling : Yes Display Question Number : Yes  
Single Line Question Option : No Option Orientation : Vertical

Correct : 1 Wrong : 0.25

Given below is a sentence which divided into four parts labelled A, B, C and D. One of these parts contains an error. Choose the part that has the error:

**I swear on / their products- / they're the best / on the market.**

**A                      B                      C                      D**

Options :

1. ✔ A
2. ✘ B
3. ✘ C
4. ✘ D

Question Number : 87 Question Id : 7368156755 Question Type : MCQ Option Shuffling : Yes Display Question Number : Yes  
Single Line Question Option : No Option Orientation : Vertical

Correct : 1 Wrong : 0.25

Given below is a sentence which divided into four parts labelled A, B, C, and D. One of these parts contains an error. Choose the part that has the error:

I swear on / their products- / they're the best /on the market.

A B C D

Options :

1. ✓ A
2. ✗ B
3. ✗ C
4. ✗ D

Question Number : 88 Question Id : 7368156756 Question Type : MCQ Option Shuffling : Yes Display Question Number : Yes Single Line Question Option : No Option Orientation : Vertical

Correct : 1 Wrong : 0.25

Given below is a sentence which divided into four parts labelled A, B, C and D

One of these parts contains an error. Choose the part that has the error:

The poor man / sticked it out / even though / he hated every minute of it.

A B C D

Options :

1. ✗ A
2. ✓ B
3. ✗ C
4. ✗ D

Question Number : 88 Question Id : 7368156756 Question Type : MCQ Option Shuffling : Yes Display Question Number : Yes Single Line Question Option : No Option Orientation : Vertical

Correct : 1 Wrong : 0.25

Given below is a sentence which divided into four parts labelled A, B,

C, and D. One of these parts contains an error. Choose the part that has the error:

The poor man / sticked it out / even though / he hated every minute of it.

A B C D

Options :

1. ✗ A
2. ✓ B



3. ✘ C

4. ✘ D

Question Number : 89 Question Id : 7368156757 Question Type : MCQ Option Shuffling : Yes Display Question Number : Yes  
Single Line Question Option : No Option Orientation : Vertical

Correct : 1 Wrong : 0.25

Fill in the blanks with the correct form of idioms /proverbs by choosing the correct option given :

The lab results were \_\_\_\_\_ my shoulders as my diseases were under control.

Options :

1. ✘ a ghost off

2. ✘ a demon off

3. ✘ a worry off

4. ✔ a weight off

Question Number : 89 Question Id : 7368156757 Question Type : MCQ Option Shuffling : Yes Display Question Number : Yes  
Single Line Question Option : No Option Orientation : Vertical

Correct : 1 Wrong : 0.25

Fill in the blanks with the correct form of idioms /proverbs by choosing the correct option given :

The lab results were \_\_\_\_\_ my shoulders as my diseases were under control.

Options :

1. ✘ a ghost off

2. ✘ a demon off

3. ✘ a worry off

4. ✔ a weight off

Question Number : 90 Question Id : 7368156758 Question Type : MCQ Option Shuffling : Yes Display Question Number : Yes  
Single Line Question Option : No Option Orientation : Vertical

Correct : 1 Wrong : 0.25

Fill in the blanks with the correct form of idioms /proverbs by choosing the correct option given :

An entrepreneur must \_\_\_\_\_ of the market to be successful.

Options :

1. ✘ use his fingers on the pulse

2. ✔ keep his fingers on the pulse

3. ✘ maintain his hold on his pulse

4. ✘ know his pulse on his fingers

Question Number : 90 Question Id : 7368156758 Question Type : MCQ Option Shuffling : Yes Display Question Number : Yes  
Single Line Question Option : No Option Orientation : Vertical

Correct : 1 Wrong : 0.25

Fill in the blanks with the correct form of idioms /proverbs by choosing the correct option given :

An entrepreneur must \_\_\_\_\_ of the market to be successful.

Options :

1. ✘ use his fingers on the pulse
2. ✔ keep his fingers on the pulse
3. ✘ maintain his hold on his pulse
4. ✘ know his pulse on his fingers

Question Number : 91 Question Id : 7368156759 Question Type : MCQ Option Shuffling : Yes Display Question Number : Yes  
Single Line Question Option : No Option Orientation : Vertical

Correct : 1 Wrong : 0.25

Complete the sentence below by choosing one related pair of words that will fill in the blanks:

Children need more \_\_\_\_\_ than \_\_\_\_\_.

Options :

1. ✘ time; space
2. ✘ milk; food
3. ✘ friends; teachers
4. ✔ models; critics

Question Number : 91 Question Id : 7368156759 Question Type : MCQ Option Shuffling : Yes Display Question Number : Yes  
Single Line Question Option : No Option Orientation : Vertical

Correct : 1 Wrong : 0.25

Complete the sentence below by choosing one related pair of words that will fill in the blanks:

Children need more \_\_\_\_\_ than \_\_\_\_\_.

Options :

1. ✘ time; space
2. ✘ milk; food
3. ✘ friends; teachers
4. ✔ models; critics

Question Number : 92 Question Id : 7368156760 Question Type : MCQ Option Shuffling : Yes Display Question Number : Yes  
Single Line Question Option : No Option Orientation : Vertical

Correct : 1 Wrong : 0.25

Complete the sentence below by choosing one related pair of words that will fill in the blanks:

The \_\_\_\_\_ is purchased by the \_\_\_\_\_.

Options :

1. ✘ village; city
2. ✘ class; school
3. ✘ lamb; sheep
4. ✔ future; present

Question Number : 92 Question Id : 7368156760 Question Type : MCQ Option Shuffling : Yes Display Question Number : Yes  
Single Line Question Option : No Option Orientation : Vertical

Correct : 1 Wrong : 0.25

Complete the sentence below by choosing one related pair of words that will fill in the blanks:

The \_\_\_\_\_ is purchased by the \_\_\_\_\_.

Options :

1. ✘ village; city
2. ✘ class; school
3. ✘ lamb; sheep
4. ✔ future; present

Question Number : 93 Question Id : 7368156761 Question Type : MCQ Option Shuffling : Yes Display Question Number : Yes  
Single Line Question Option : No Option Orientation : Vertical

Correct : 1 Wrong : 0.25

A key word is given below. Choose the word closest to it in its meaning {synonym}. Pay attention to how the word would be used to, if required:

*strides [metaphoric use]*

Options :

1. ✔ developments
2. ✘ treads
3. ✘ paces
4. ✘ advances

Question Number : 93 Question Id : 7368156761 Question Type : MCQ Option Shuffling : Yes Display Question Number : Yes  
Single Line Question Option : No Option Orientation : Vertical

Correct : 1 Wrong : 0.25



A key word is given below. Choose the word closest to it in its meaning {synonym}. Pay attention to how the word would be used to, if required:

*strides [metaphoric use]*

Options :

1. ✓ developments
2. ✗ treads
3. ✗ paces
4. ✗ advances

Question Number : 94 Question Id : 7368156762 Question Type : MCQ Option Shuffling : Yes Display Question Number : Yes Single Line Question Option : No Option Orientation : Vertical

Correct : 1 Wrong : 0.25

A key word is given below. Choose the word closest to it in its meaning {synonym}. Pay attention to how the word would be used to, if required:

*aptitude*

Options :

1. ✗ capacity
2. ✗ fitness
3. ✗ ability
4. ✓ talent

Question Number : 94 Question Id : 7368156762 Question Type : MCQ Option Shuffling : Yes Display Question Number : Yes Single Line Question Option : No Option Orientation : Vertical

Correct : 1 Wrong : 0.25

A key word is given below. Choose the word closest to it in its meaning {synonym}. Pay attention to how the word would be used to, if required:

*aptitude*

Options :

1. ✗ capacity
2. ✗ fitness
3. ✗ ability
4. ✓ talent

Question Number : 95 Question Id : 7368156763 Question Type : MCQ Option Shuffling : Yes Display Question Number : Yes Single Line Question Option : No Option Orientation : Vertical

Correct : 1 Wrong : 0.25

A key word is given below. Choose the word closest to it in its meaning {synonym}. Pay attention to how the word would be used to, if required:

*harvest [verb]*

Options :

1. ✓ reap
2. ✗ gather
3. ✗ garner
4. ✗ procure

Question Number : 95 Question Id : 7368156763 Question Type : MCQ Option Shuffling : Yes Display Question Number : Yes  
Single Line Question Option : No Option Orientation : Vertical

Correct : 1 Wrong : 0.25

A key word is given below. Choose the word closest to it in its meaning {synonym}. Pay attention to how the word would be used to, if required:

*harvest [verb]*

Options :

1. ✓ reap
2. ✗ gather
3. ✗ garner
4. ✗ procure

Question Number : 96 Question Id : 7368156764 Question Type : MCQ Option Shuffling : Yes Display Question Number : Yes  
Single Line Question Option : No Option Orientation : Vertical

Correct : 1 Wrong : 0.25

A key word is given below. Choose the word which indicates the contradictory or opposite meaning {antonym} of the key word:

*offend*

Options :

1. ✗ happy
2. ✓ please
3. ✗ entertain
4. ✗ gratify

Question Number : 96 Question Id : 7368156764 Question Type : MCQ Option Shuffling : Yes Display Question Number : Yes  
Single Line Question Option : No Option Orientation : Vertical

Correct : 1 Wrong : 0.25

A key word is given below. Choose the word which indicates the contradictory or opposite meaning {antonym} of the key word:

*offend*

Options :

1. ✘ happy
2. ✔ please
3. ✘ entertain
4. ✘ gratify

Question Number : 97 Question Id : 7368156765 Question Type : MCQ Option Shuffling : Yes Display Question Number : Yes  
Single Line Question Option : No Option Orientation : Vertical

Correct : 1 Wrong : 0.25

A key word is given below. Choose the word which indicates the contradictory or opposite meaning {antonym} of the key word:

*indict*

Options :

1. ✘ free
2. ✔ acquit
3. ✘ release
4. ✘ discharge

Question Number : 97 Question Id : 7368156765 Question Type : MCQ Option Shuffling : Yes Display Question Number : Yes  
Single Line Question Option : No Option Orientation : Vertical

Correct : 1 Wrong : 0.25

A key word is given below. Choose the word which indicates the contradictory or opposite meaning {antonym} of the key word:

*indict*

Options :

1. ✘ free
2. ✔ acquit
3. ✘ release
4. ✘ discharge

Question Number : 98 Question Id : 7368156766 Question Type : MCQ Option Shuffling : Yes Display Question Number : Yes  
Single Line Question Option : No Option Orientation : Vertical

Correct : 1 Wrong : 0.25

Given below is a set of four words. One of the four words is spelled wrongly. Choose the word that has been spelled wrongly

Options :

1. ✔ Isometry



2. ✘ Geometry
3. ✘ Symmetry
4. ✘ Biometry

Question Number : 98 Question Id : 7368156766 Question Type : MCQ Option Shuffling : Yes Display Question Number : Yes  
Single Line Question Option : No Option Orientation : Vertical

Correct : 1 Wrong : 0.25

Given below is a set of four words. One of the four words is spelled wrongly. Choose the word that has been spelled wrongly

Options :

1. ✔ Isometry
2. ✘ Geometry
3. ✘ Symmetry
4. ✘ Biometry

Question Number : 99 Question Id : 7368156767 Question Type : MCQ Option Shuffling : Yes Display Question Number : Yes  
Single Line Question Option : No Option Orientation : Vertical

Correct : 1 Wrong : 0.25

Given below is a set of four words. One of the four words is spelled wrongly. Choose the word that has been spelled wrongly

Options :

1. ✘ fluorescent
2. ✘ incandescent
3. ✔ luminescent
4. ✘ obsolescent

Question Number : 99 Question Id : 7368156767 Question Type : MCQ Option Shuffling : Yes Display Question Number : Yes  
Single Line Question Option : No Option Orientation : Vertical

Correct : 1 Wrong : 0.25

Given below is a set of four words. One of the four words is spelled wrongly. Choose the word that has been spelled wrongly

Options :

1. ✘ fluorescent
2. ✘ incandescent
3. ✔ luminescent
4. ✘ obsolescent

Question Number : 100 Question Id : 7368156768 Question Type : MCQ Option Shuffling : Yes Display Question Number : Yes  
Single Line Question Option : No Option Orientation : Vertical

Correct : 1 Wrong : 0.25

Given below is a set of four words. Choose the word with the correct spelling:

Options :

1. ✘ acquiescent

2. ✘ adolescent
3. ✘ quiaescent
4. ✔ convalescent

**Question Number : 100 Question Id : 7368156768 Question Type : MCQ Option Shuffling : Yes Display Question Number : Yes  
Single Line Question Option : No Option Orientation : Vertical**

**Correct : 1 Wrong : 0.25**

Given below is a set of four words. Choose the word with the correct spelling:

**Options :**

1. ✘ acquiescent
2. ✘ adolescent
3. ✘ quiaescent
4. ✔ convalescent

**General Intelligence**

Section Id :	736815133
Section Number :	3
Section type :	Online
Mandatory or Optional:	Mandatory
Number of Questions:	50
Number of Questions to be attempted:	50
Section Marks:	50
Display Number Panel:	Yes
Group All Questions:	No

Sub-Section Number:	1
Sub-Section Id:	736815201
Question Shuffling Allowed :	Yes

**Question Number : 101 Question Id : 7368156769 Question Type : MCQ Option Shuffling : Yes Display Question Number : Yes  
Single Line Question Option : No Option Orientation : Vertical**

**Correct : 1 Wrong : 0.25**

Read the following information carefully and then answer the questions given below it.

Following are the conditions for selecting a 'Research Officer' for a the reputed National Dairy Research Institute.

The candidate must:

- A. Be a Post-graduate with minimum 60% marks
- B. Have Ph.D degree
- C. Have research experience of at least 3 years
- D. Have fluency in Hindi and English
- E. Have published at least 5 research papers
- F. Not be less than 25 years and more than 35 years as on 1st July, 1993.
- G. Have diploma in Statistical Applications

In the case of a candidate who:

- I. satisfies all other criteria except A above but has Post-graduate degree with more than 55% marks, his case will be referred to the Director of the Institute
- II. Satisfies all other criteria except C above will be referred to the Joint Director

Q: Abhinash is a Post-graduate with 62% marks. He has obtained Ph.D degree and has published 5 research papers.

He has research experience of 3½ years and fluent in Hindi and English.

He has completed diploma in Statistical Applications. His date of birth is 1st Sep, 1968.

Options :

- 1. ✘ If candidate is to be referred to the Director
- 2. ✔ If the data provided are inadequate to decide the course of action
- 3. ✘ If the candidate is to be selected
- 4. ✘ If the candidate is to be referred to the Joint Director

Question Number : 101 Question Id : 7368156769 Question Type : MCQ Option Shuffling : Yes Display Question Number : Yes  
Single Line Question Option : No Option Orientation : Vertical

Correct : 1 Wrong : 0.25



निम्नलिखित जानकारी को ध्यानपूर्वक पढ़िये और नीचे दिये गए

प्रश्नों के उत्तर दीजिये।

एक प्रतिष्ठित राष्ट्रीय डेयरी अनुसंधान संस्थान के लिए एक

'अनुसंधान अधिकारी' के चयन हेतु निम्नलिखित शर्तें तय की गई हैं:

- A. उम्मीदवार न्यूनतम 60% अंक सहित स्नातकोत्तर होना चाहिए
  - B. उम्मीदवार के पास पी.एच.डी डिग्री होनी चाहिए
  - C. उम्मीदवार के पास अनुसंधान में कम से कम 3 साल का अनुभव होना चाहिए
  - D. उम्मीदवार हिंदी और अंग्रेजी में वाक्पटु होना चाहिए
  - E. उम्मीदवार द्वारा कम से कम 5 शोध पत्र प्रकाशित किये होने चाहिए
  - F. उम्मीदवार की उम्र 1 जुलाई 1993 को 25 वर्ष से कम नहीं और 35 वर्ष से ज्यादा नहीं होनी चाहिए
  - G. उम्मीदवार के पास स्टैटिस्टिकल एप्लीकेशंस में डिप्लोमा होना चाहिए
- I. जो उम्मीदवार उपरोक्त A को छोड़कर अन्य सभी मानदंडों को पूरा करता है, किन्तु उसके पास 55% से अधिक अंकों सहित स्नातकोत्तर डिग्री है, उसका मामला संस्थान निदेशक के पास भेजा जाएगा
- II. उपरोक्त C को छोड़कर अन्य सभी मानदंडों को संतुष्ट करने वाले उम्मीदवारों को संयुक्त संचालक को भेजा जाएगा

Q: अभिनाश 62% अंकों सहित स्नातकोत्तर है, उसने पी.एच.डी. की है और 5 शोध पत्र प्रकाशित किये हैं उसे 3½ साल के अनुसंधान का अनुभव है और हिंदी व अंग्रेजी में वाक्पटु है। उसने स्टैटिस्टिकल एप्लीकेशंस में डिप्लोमा पूरा किया है। उसकी जन्मतिथि 1 सितम्बर 1968 है।

Options :

1. ✘ उम्मीदवार को निदेशक के पास भेजा जाए
2. ✔ उपलब्ध कराये गये आंकड़े कार्यवाही तय करने के लिए अपर्याप्त हैं
3. ✘ उम्मीदवार का चयन किया जाए

4. ✘ उम्मीदवार को संयुक्त निदेशक के पास भेजा जाए

Question Number : 102 Question Id : 7368156770 Question Type : MCQ Option Shuffling : Yes Display Question Number : Yes  
Single Line Question Option : No Option Orientation : Vertical

Correct : 1 Wrong : 0.25

Read the following information carefully and then answer the questions given below it.

Following are the conditions for selecting a 'Research Officer' for the reputed National Dairy Research Institute.

The candidate must:

- A. Be a Post-graduate with minimum 60% marks
- B. Have Ph.D degree
- C. Have research experience of at least 3 years
- D. Have fluency in Hindi and English
- E. Have published at least 5 research papers
- F. Not be less than 25 years and more than 35 years as on 1st July, 1993.
- G. Have diploma in Statistical Applications

In the case of a candidate who:

- I. satisfies all other criteria except A above but has Post-graduate degree with more than 55% marks, his case will be referred to the Director of the Institute
- II. satisfies all other criteria except C above will be referred to the Joint Director

Q: Vanshika is a Post-graduate with 63% marks and has obtained Ph.D. Degree and diploma in Statistical Applications. She is fluent in Hindi and English. She has research experience of 2½ years and has got 7 research papers published.

Options :

1. ✘ If candidate is to be referred to the Director
2. ✔ If the data provided are inadequate to decide the course of action
3. ✘ If the candidate is to be selected
4. ✘ If the candidate is to be referred to the Joint Director

Question Number : 102 Question Id : 7368156770 Question Type : MCQ Option Shuffling : Yes Display Question Number : Yes  
Single Line Question Option : No Option Orientation : Vertical

Correct : 1 Wrong : 0.25



निम्नलिखित जानकारी को ध्यानपूर्वक पढ़िये और नीचे दिये गए

प्रश्नों के उत्तर दीजिये।

एक प्रतिष्ठित राष्ट्रीय डेयरी अनुसंधान संस्थान के लिए एक 'अनुसंधान अधिकारी' के चयन हेतु निम्नलिखित शर्तें तय की गई हैं:

- A. उम्मीदवार न्यूनतम 60% अंक सहित स्नातकोत्तर होना चाहिए
- B. उम्मीदवार के पास पी.एच.डी डिग्री होनी चाहिए
- C. उम्मीदवार के पास अनुसंधान में कम से कम 3 साल का अनुभव होना चाहिए
- D. उम्मीदवार हिंदी और अंग्रेजी में वाक्पटु होना चाहिए
- E. उम्मीदवार द्वारा कम से कम 5 शोध पत्र प्रकाशित किये होने चाहिए
- F. उम्मीदवार की उम्र 1 जुलाई 1993 को 25 वर्ष से कम नहीं और 35 वर्ष से ज्यादा नहीं होनी चाहिए
- G. उम्मीदवार के पास स्टैटिस्टिकल एप्लीकेशंस में डिप्लोमा होना चाहिए

I. जो उम्मीदवार उपरोक्त A को छोड़कर अन्य सभी मानदंडों को पूरा करता है, किन्तु उसके पास 55% से अधिक अंकों सहित स्नातकोत्तर डिग्री है, उसका मामला संस्थान निदेशक के पास भेजा जाएगा

II. उपरोक्त C को छोड़कर अन्य सभी मानदंडों को संतुष्ट करने आले उम्मीदवारों को संयुक्त संचालक को भेजा जाएगा

Q: वंशिका 63% अंकों सहित स्नातकोत्तर है, उसने पी.एच.डी. डिग्री प्राप्त की है और स्टैटिस्टिकल एप्लीकेशंस में डिप्लोमा किया हुआ है। वह हिंदी व अंग्रेजी में वाक्पटु है। उसे 2½ साल के अनुसंधान का अनुभव है और वह 7 शोध पत्र प्रकाशित कर चुकी है।

Options :

- 1. ✘ उम्मीदवार को निदेशक के पास भेजा जाए
- 2. ✔ उपलब्ध कराये गये आंकड़े कार्यवाही तय करने के लिए अपर्याप्त हैं
- 3. ✘ उम्मीदवार का चयन किया जाए
- 4. ✘ उम्मीदवार को संयुक्त निदेशक के पास भेजा जाए



Correct : 1 Wrong : 0.25

Read the following information carefully and then answer the questions given below it.

Following are the conditions for selecting a 'Research Officer' for a the reputed National Dairy Research Institute.

The candidate must:

- A. Be a Post-graduate with minimum 60% marks
- B. Have Ph.D degree
- C. Have research experience of at least 3 years
- D. Have fluency in Hindi and English
- E. Have published at least 5 research papers
- F. Not be less than 25 years and more than 35 years as on 1st July, 1993.
- G. Have diploma in Statistical Applications

In the case of a candidate who:

- I. satisfies all other criteria except A above but has Post-graduate degree with more than 55% marks, his case will be referred to the Director of the Institute
- II. Satisfies all other criteria except C above will be referred to the Joint Director

Q: 27 years old Vikram is a Post-graduate with 61% marks and has obtained Ph.D degree. He is fluent in Hindi and English. He has got 5 research papers published and has research experience of 4 years. He has completed diploma in Statistical Applications.

Options :

- 1. ✘ If candidate is to be referred to the Director
- 2. ✘ If the data provided are inadequate to decide the course of action
- 3. ✔ If the candidate is to be selected
- 4. ✘ If the candidate is to be referred to the Joint Director

Correct : 1 Wrong : 0.25

निम्नलिखित जानकारी को ध्यानपूर्वक पढ़िये और नीचे दिये गए प्रश्नों के उत्तर दीजिये।

एक प्रतिष्ठित राष्ट्रीय डेयरी अनुसंधान संस्थान के लिए एक 'अनुसंधान अधिकारी' के चयन हेतु निम्नलिखित शर्तें तय की गई हैं:

- A. उम्मीदवार न्यूनतम 60% अंक सहित स्नातकोत्तर होना चाहिए
- B. उम्मीदवार के पास पी.एच.डी डिग्री होनी चाहिए
- C. उम्मीदवार के पास अनुसंधान में कम से कम 3 साल का अनुभव होना चाहिए
- D. उम्मीदवार हिंदी और अंग्रेजी में वाक्पटु होना चाहिए
- E. उम्मीदवार द्वारा कम से कम 5 शोध पत्र प्रकाशित किये होने चाहिए
- F. उम्मीदवार की उम्र 1 जुलाई 1993 को 25 वर्ष से कम नहीं और 35 वर्ष से ज्यादा नहीं होनी चाहिए
- G. उम्मीदवार के पास स्टैटिस्टिकल एप्लीकेशंस में डिप्लोमा होना चाहिए
- I. जो उम्मीदवार उपरोक्त A को छोड़कर अन्य सभी मानदंडों को पूरा करता है, किन्तु उसके पास 55% से अधिक अंकों सहित स्नातकोत्तर डिग्री है, उसका मामला संस्थान निदेशक के पास भेजा जाएगा
- II. उपरोक्त C को छोड़कर अन्य सभी मानदंडों को संतुष्ट करने आले उम्मीदवारों को संयुक्त संचालक को भेजा जाएगा

Q: 27 वर्षीय विक्रम 61% अंकों सहित स्नातकोत्तर है, उसने पी.एच.डी. की है, वह हिंदी व अंग्रेजी में वाक्पटु है। उसने 5 शोध पत्र प्रकाशित किये हैं और उसे 4 साल के शोध का अनुभव है।

उसने स्टैटिस्टिकल एप्लीकेशंस में डिप्लोमा किया है।

Options :

- 1. ✘ उम्मीदवार को निदेशक के पास भेजा जाए
- 2. ✘ उपलब्ध कराये गये आंकड़े कार्यवाही तय करने के लिए अपर्याप्त हैं
- 3. ✔ उम्मीदवार का चयन किया जाए
- 4. ✘ उम्मीदवार को संयुक्त निदेशक के पास भेजा जाए



Correct : 1 Wrong : 0.25

Read the following information carefully and then answer the questions given below it.

Following are the conditions for selecting a 'Research Officer' for the reputed National Dairy Research Institute.

The candidate must:

- A. Be a Post-graduate with minimum 60% marks
- B. Have Ph.D degree
- C. Have research experience of at least 3 years
- D. Have fluency in Hindi and English
- E. Have published at least 5 research papers
- F. Not be less than 25 years and more than 35 years as on 1st July, 1993.
- G. Have diploma in Statistical Applications

In the case of a candidate who:

- I. satisfies all other criteria except A above but has Post-graduate degree with more than 55% marks, his case will be referred to the Director of the Institute
- II. Satisfies all other criteria except C above will be referred to the Joint Director

Q: 28 years old Subham has obtained his Ph.D degree and is a Post-graduate with 70% marks. He has diploma in Statistical Applications and has experience of 2 years. He has got published 5 research papers and is fluent in English and Hindi.

Options :

- 1. ✘ If candidate is to be referred to the Director
- 2. ✘ If the data provided are inadequate to decide the course of action
- 3. ✘ If the candidate is to be selected
- 4. ✔ If the candidate is to be referred to the Joint Director

Correct : 1 Wrong : 0.25



निम्नलिखित जानकारी को ध्यानपूर्वक पढ़िये और नीचे दिये गए

प्रश्नों के उत्तर दीजिये।

एक प्रतिष्ठित राष्ट्रीय डेयरी अनुसंधान संस्थान के लिए एक

'अनुसंधान अधिकारी' के चयन हेतु निम्नलिखित शर्तें तय की गई हैं:

A. उम्मीदवार न्यूनतम 60% अंक सहित स्नातकोत्तर होना चाहिए

B. उम्मीदवार के पास पी.एच.डी डिग्री होनी चाहिए

C. उम्मीदवार के पास अनुसंधान में कम से कम 3 साल का

अनुभव होना चाहिए

D. उम्मीदवार हिंदी और अंग्रेजी में वाक्पटु होना चाहिए

E. उम्मीदवार द्वारा कम से कम 5 शोध पत्र प्रकाशित किये होने

चाहिए

F. उम्मीदवार की उम्र 1 जुलाई 1993 को 25 वर्ष से कम नहीं और

35 वर्ष से ज्यादा नहीं होनी चाहिए

G. उम्मीदवार के पास स्टैटिस्टिकल एप्लीकेशंस में डिप्लोमा होना

चाहिए

I. जो उम्मीदवार उपरोक्त A को छोड़कर अन्य सभी मानदंडों को

पूरा करता है, किन्तु उसके पास 55% से अधिक अंकों सहित

स्नातकोत्तर डिग्री है, उसका मामला संस्थान निदेशक के पास भेजा

जाएगा

II. उपरोक्त C को छोड़कर अन्य सभी मानदंडों को संतुष्ट करने

आले उम्मीदवारों को संयुक्त संचालक को भेजा जाएगा

Q: 28 वर्षीय शुभम ने पी.एच.डी. की है और वह 70% अंकों सहित

स्नातकोत्तर है, उसके पास स्टैटिस्टिकल एप्लीकेशंस में डिप्लोमा है।

उसे 2 साल का अनुभव है। उसने 5 शोध पत्र प्रकाशित किये हैं

और वह हिंदी व अंग्रेजी में वाक्पटु है।

Options :

1. ✘ उम्मीदवार को निदेशक के पास भेजा जाए

2. ✘ उपलब्ध कराये गये आंकड़े कार्यवाही तय करने के लिए अपर्याप्त हैं

3. ✘ उम्मीदवार का चयन किया जाए

4. ✓ उम्मीदवार को संयुक्त निर्देशक के पास भेजा जाए

Question Number : 105 Question Id : 7368156773 Question Type : MCQ Option Shuffling : Yes Display Question Number : Yes  
Single Line Question Option : No Option Orientation : Vertical

Correct : 1 Wrong : 0.25

In a certain code language, if SPEAKER is coded as 3942845 and SYSTEM is coded as 313647, then MATTER will be coded as?

Options :

1. ✗ 276465
2. ✓ 726645
3. ✗ 726654
4. ✗ 276654

Question Number : 105 Question Id : 7368156773 Question Type : MCQ Option Shuffling : Yes Display Question Number : Yes  
Single Line Question Option : No Option Orientation : Vertical

Correct : 1 Wrong : 0.25

अगर किसी सांकेतिक भाषा में SPEAKER को 3942845 और SYSTEM को 313647 लिखा जाता है, तो MATTER को किस प्रकार लिखा जाएगा?

Options :

1. ✗ 276465
2. ✓ 726645
3. ✗ 726654
4. ✗ 276654

Question Number : 106 Question Id : 7368156774 Question Type : MCQ Option Shuffling : Yes Display Question Number : Yes  
Single Line Question Option : No Option Orientation : Vertical

Correct : 1 Wrong : 0.25

In a certain code language, if GOOGLE is coded as 244285 and FACEBOOK is coded as 63951447, then GLOBAL will be coded as?

Options :

1. ✓ 284138
2. ✗ 824138
3. ✗ 284183
4. ✗ 248138

Question Number : 106 Question Id : 7368156774 Question Type : MCQ Option Shuffling : Yes Display Question Number : Yes  
Single Line Question Option : No Option Orientation : Vertical

Correct : 1 Wrong : 0.25

अगर किसी सांकेतिक भाषा में GOOGLE को 244285 और FACEBOOK को 63951447 लिखा जाता है, तो GLOBAL को किस प्रकार लिखा जाएगा?

Options :

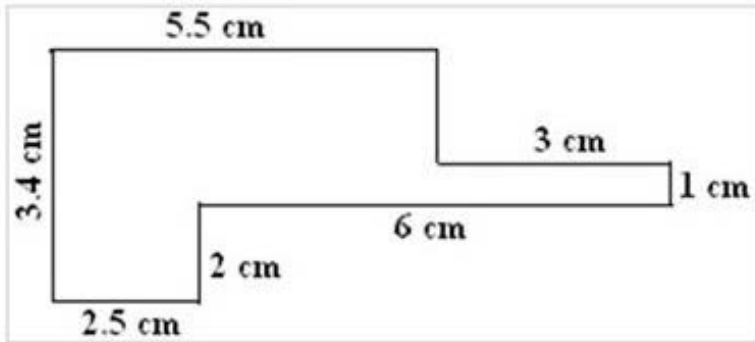
1. ✓ 284138
2. ✗ 824138
3. ✗ 284183

4. ✘ 248138

Question Number : 107 Question Id : 7368156775 Question Type : MCQ Option Shuffling : Yes Display Question Number : Yes  
Single Line Question Option : No Option Orientation : Vertical

Correct : 1 Wrong : 0.25

Calculate the area of the following figure?



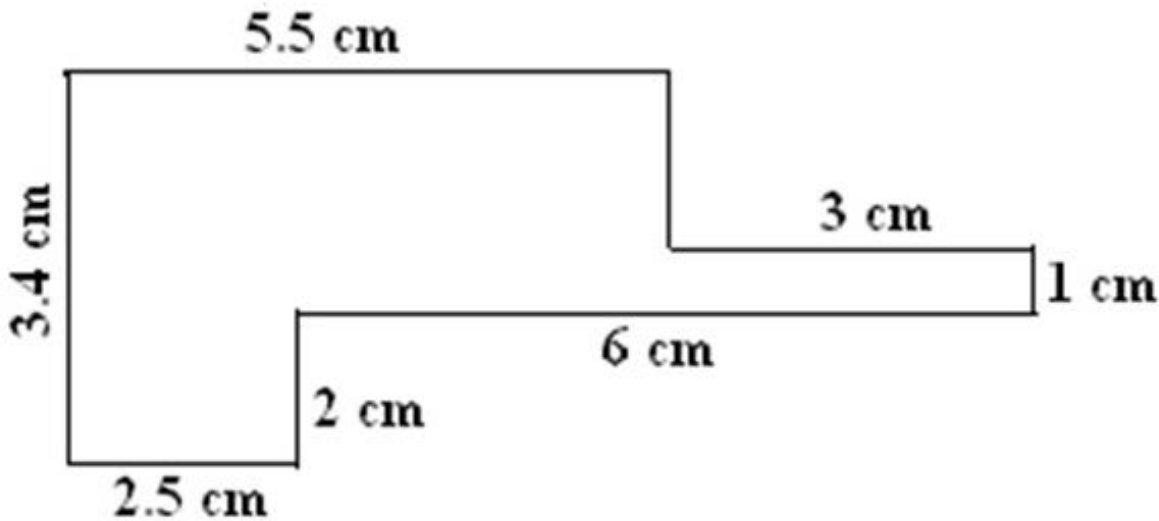
Options :

1. ✘ 19.5 sq.cm
2. ✘ 28.5 sq.cm
3. ✔ 15.7 sq.cm
4. ✘ 40.5 sq.cm

Question Number : 107 Question Id : 7368156775 Question Type : MCQ Option Shuffling : Yes Display Question Number : Yes  
Single Line Question Option : No Option Orientation : Vertical

Correct : 1 Wrong : 0.25

दी हुई आकृति के क्षेत्रफल की गणना कीजिये।



Options :

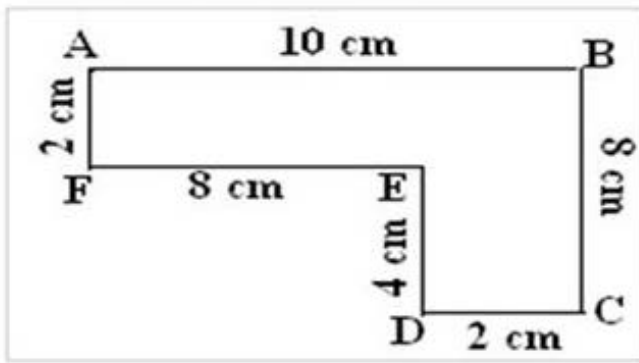
1. ✘ 19.5 वर्ग से.मी.
2. ✘ 28.5 वर्ग से.मी.
3. ✔ 15.7 वर्ग से.मी.
4. ✘ 40.5 वर्ग से.मी.

Question Number : 108 Question Id : 7368156776 Question Type : MCQ Option Shuffling : Yes Display Question Number : Yes  
Single Line Question Option : No Option Orientation : Vertical



Correct : 1 Wrong : 0.25

Calculate the perimeter of the below figure?



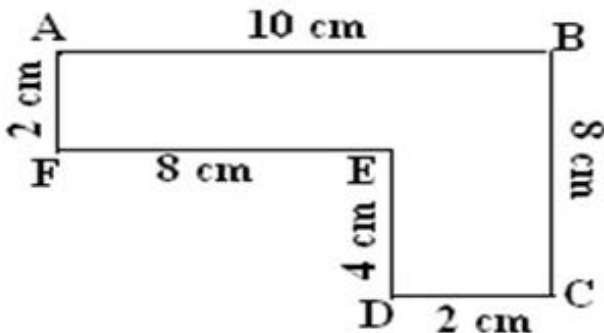
Options :

1. ✘ 17 cm
2. ✘ 29 cm
3. ✔ 34 cm
4. ✘ 30 cm

Question Number : 108 Question Id : 7368156776 Question Type : MCQ Option Shuffling : Yes Display Question Number : Yes Single Line Question Option : No Option Orientation : Vertical

Correct : 1 Wrong : 0.25

दी हुई आकृति की परिधि ज्ञात कीजिये?



Options :

1. ✘ 17 से.मी.
2. ✘ 29 से.मी.
3. ✔ 34 से.मी.
4. ✘ 30 से.मी.

Question Number : 109 Question Id : 7368156777 Question Type : MCQ Option Shuffling : Yes Display Question Number : Yes Single Line Question Option : No Option Orientation : Vertical

Correct : 1 Wrong : 0.25

You have got a new job. Today is the joining day. What will you do once you arrive at your new workplace?

Options :

1. ✘ office.
2. ✘ Cook food for your team for a couple of weeks.

3. ✘ Try to analyse in depth how work is being carried out at your new office.

4. ✔ Introduce yourself.

Question Number : 109 Question Id : 7368156777 Question Type : MCQ Option Shuffling : Yes Display Question Number : Yes  
Single Line Question Option : No Option Orientation : Vertical

Correct : 1 Wrong : 0.25

आपको एक नई नौकरी मिली है। आज आपका पहला दिन है। आप अपने नये कार्यस्थल पर पहुँच कर क्या करेंगे?

Options :

सह कर्मचारियों के साथ बातचीत करेंगे और उन्हें बतायेंगे कि अपने पिछले कार्यालय

1. ✘ में काम कैसे किया जाता था।

2. ✘ कुछ हफ्ते के लिए अपनी टीम के लिए खाना पकाएंगे।

नये कार्यालय में काम करने के तरीकों का गहराई से विश्लेषण करने की कोशिश

3. ✘ करेंगे।

4. ✔ अपना परिचय देंगे।

Question Number : 110 Question Id : 7368156778 Question Type : MCQ Option Shuffling : Yes Display Question Number : Yes  
Single Line Question Option : No Option Orientation : Vertical

Correct : 1 Wrong : 0.25

Your friend is asking you about the risks of earthquake. You do not know the exact answer. How would you answer?

Options :

1. ✘ Tell him something which might be correct.

Politely answer that you do not know the answer exactly and will let him know once you

2. ✔ are aware of it.

3. ✘ Try to speak rubbish on other different topics.

4. ✘ Rudely reply him that you are not answerable to his question.

Question Number : 110 Question Id : 7368156778 Question Type : MCQ Option Shuffling : Yes Display Question Number : Yes  
Single Line Question Option : No Option Orientation : Vertical

Correct : 1 Wrong : 0.25

आपका मित्र भूकंप के खतरों के बारे में पूछ रहा है। आपको ठीक से जवाब नहीं पता।

आप क्या जवाब देंगे?

Options :

1. ✘ उसे कुछ ऐसा बताएँगे जो सही हो सकता है।

विनम्रता से जवाब देंगे कि आपको इस सवाल का जवाब ठीक से पता नहीं है और

2. ✔ जब इसके बारे में पता चलेगा, तो उसे अवगत करा देंगे।

3. ✘ अन्य विभिन्न विषयों पर बकवास करने की कोशिश करेंगे।

4. ✘ बेरुखी से कहेंगे कि आप उसके सवालों का जवाब देने के लिए जिम्मेदार नहीं है।

Question Number : 111 Question Id : 7368156779 Question Type : MCQ Option Shuffling : Yes Display Question Number : Yes  
Single Line Question Option : No Option Orientation : Vertical

Correct : 1 Wrong : 0.25

Statement: Should famous personalities like actors who have committed crime be specially treated.

Argument 1: Crime is not committed intentionally by the famous actors .

Argument 2: Everyone is equal before law.

Options :

1. ✘ Argument 1 is strong
2. ✔ Argument 2 is strong
3. ✘ Both the Arguments are strong
4. ✘ Neither of the Arguments are strong

Question Number : 111 Question Id : 7368156779 Question Type : MCQ Option Shuffling : Yes Display Question Number : Yes  
Single Line Question Option : No Option Orientation : Vertical

Correct : 1 Wrong : 0.25

कथन: प्रसिद्ध हस्तियाँ जैसे अभिनेता जिन्होंने अपराध किये हैं, क्या उनसे विशेष बरताव करना चाहिए?

तर्क 1: प्रसिद्ध अभिनेता जानबूझ कर अपराध नहीं करते

तर्क 2: कानून के सामने सब समान है।

Options :

1. ✘ तर्क 1 ठोस है
2. ✔ तर्क 2 ठोस है
3. ✘ दोनों तर्क ठोस है
4. ✘ कोई भी तर्क ठोस नहीं है

Question Number : 112 Question Id : 7368156780 Question Type : MCQ Option Shuffling : Yes Display Question Number : Yes  
Single Line Question Option : No Option Orientation : Vertical

Correct : 1 Wrong : 0.25

Statement: Internal examinations in universities should be abolished?

Argument 1: Professors won't be biased.

Argument 2: Professors will lose control over students.

Options :

1. ✘ Argument 1 is strong
2. ✔ Argument 2 is strong
3. ✘ Both the Arguments are strong
4. ✘ Neither of the Arguments are strong

Question Number : 112 Question Id : 7368156780 Question Type : MCQ Option Shuffling : Yes Display Question Number : Yes  
Single Line Question Option : No Option Orientation : Vertical



Correct : 1 Wrong : 0.25

कथन: क्या विश्वविद्यालयों में होने वाली आंतरिक परीक्षाएं बंद कर देनी चाहिए?

तर्क 1: प्रोफेसर पक्षपाती नहीं होंगे

तर्क 2: प्रोफेसर छात्रों पर से नियंत्रण खो देंगे

Options :

1. ✘ तर्क 1 ठोस है
2. ✔ तर्क 2 ठोस है
3. ✘ दोनों तर्क ठोस हैं
4. ✘ कोई भी तर्क ठोस नहीं है

Question Number : 113 Question Id : 7368156781 Question Type : MCQ Option Shuffling : Yes Display Question Number : Yes  
Single Line Question Option : No Option Orientation : Vertical

Correct : 1 Wrong : 0.25

Compute the following:

$$(444)^2 + (222)^2 = ?$$

Options :

1. ✘ 746746
2. ✔ 246420
3. ✘ 756756
4. ✘ 246419

Question Number : 113 Question Id : 7368156781 Question Type : MCQ Option Shuffling : Yes Display Question Number : Yes  
Single Line Question Option : No Option Orientation : Vertical

Correct : 1 Wrong : 0.25

निम्नलिखित की गणना कीजिये :

$$(444)^2 + (222)^2 = ?$$

Options :

1. ✘ 746746
2. ✔ 246420
3. ✘ 756756
4. ✘ 246419

Question Number : 114 Question Id : 7368156782 Question Type : MCQ Option Shuffling : Yes Display Question Number : Yes  
Single Line Question Option : No Option Orientation : Vertical

Correct : 1 Wrong : 0.25

If E is X, F is /, G is - and H is +, then what will be the value of (7 E 9 G 20 H 15 F 3)?

Options :

1. ✔ 35
2. ✘ 30
3. ✘ 38
4. ✘ 31

Note: For this question, discrepancy is found in question/answer. Full Marks is being awarded to all candidates.

visit this website [studytosuccess.in](http://studytosuccess.in)

Question Number : 114 Question Id : 7368156782 Question Type : MCQ Option Shuffling : Yes Display Question Number : Yes  
Single Line Question Option : No Option Orientation : Vertical

Correct : 1 Wrong : 0.25

यदि E को 'X', F को '/', G को '-' और H को '+' कहा जाता है, तो (7 E 9 G  
20 H 15 F 3) का मान क्या होगा?

Options :

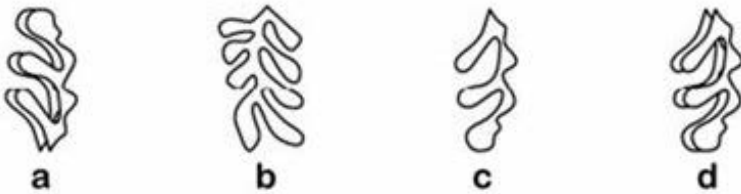
1. ✓ 35
2. ✗ 30
3. ✗ 38
4. ✗ 31

Note: For this question, discrepancy is found in question/answer. Full Marks is being awarded to all candidates.

Question Number : 115 Question Id : 7368156783 Question Type : MCQ Option Shuffling : Yes Display Question Number : Yes  
Single Line Question Option : No Option Orientation : Vertical

Correct : 1 Wrong : 0.25

Choose the odd figure.



Options :

1. ✗ a
2. ✗ b
3. ✗ c
4. ✓ d

Question Number : 115 Question Id : 7368156783 Question Type : MCQ Option Shuffling : Yes Display Question Number : Yes  
Single Line Question Option : No Option Orientation : Vertical

Correct : 1 Wrong : 0.25

भिन्न आकृति का चयन करें :



Options :

1. ✗ a
2. ✗ b
3. ✗ c
4. ✓ d

Question Number : 116 Question Id : 7368156784 Question Type : MCQ Option Shuffling : Yes Display Question Number : Yes  
Single Line Question Option : No Option Orientation : Vertical

Correct : 1 Wrong : 0.25

Choose the odd figure.



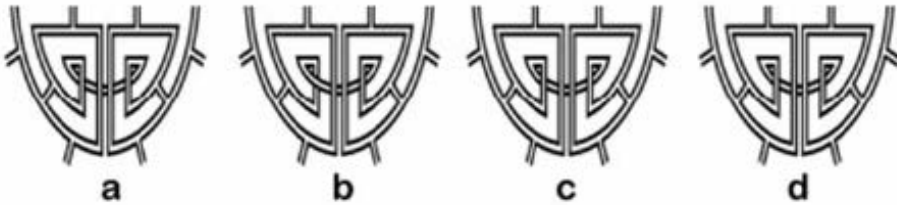
Options :

1. ✘ a
2. ✔ b
3. ✘ c
4. ✘ d

Question Number : 116 Question Id : 7368156784 Question Type : MCQ Option Shuffling : Yes Display Question Number : Yes  
Single Line Question Option : No Option Orientation : Vertical

Correct : 1 Wrong : 0.25

भिन्न आकृति का चयन करें :



Options :

1. ✘ a
2. ✔ b
3. ✘ c
4. ✘ d

Question Number : 117 Question Id : 7368156785 Question Type : MCQ Option Shuffling : Yes Display Question Number : Yes  
Single Line Question Option : No Option Orientation : Vertical

Correct : 1 Wrong : 0.25

Compute the following

$$288/30+24 \times 7-12$$

Options :

1. ✘ 160.7
2. ✔ 165.6
3. ✘ 159.7
4. ✘ 161.5

Question Number : 117 Question Id : 7368156785 Question Type : MCQ Option Shuffling : Yes Display Question Number : Yes  
Single Line Question Option : No Option Orientation : Vertical

Correct : 1 Wrong : 0.25

निम्नलिखित की गणना कीजिये :

$$288/30+24 \times 7-12$$

Options :

1. ✘ 160.7



2. ✓ 165.6
3. ✗ 159.7
4. ✗ 161.5

Question Number : 118 Question Id : 7368156786 Question Type : MCQ Option Shuffling : Yes Display Question Number : Yes  
Single Line Question Option : No Option Orientation : Vertical

Correct : 1 Wrong : 0.25

The height of right circular cone whose radii is 20 cm and volume is 4000 cubic cm will be?

Options :

1. ✓ 9.55 cm
2. ✗ 7.55cm
3. ✗ 5.78cm
4. ✗ 6.50cm

Question Number : 118 Question Id : 7368156786 Question Type : MCQ Option Shuffling : Yes Display Question Number : Yes  
Single Line Question Option : No Option Orientation : Vertical

Correct : 1 Wrong : 0.25

एक समकोणीय गोलाकार शंकु की त्रिज्या 20 से.मी. एवं आयतन 4000 घन से.मी. है, उसकी ऊंचाई कितनी होगी?

Options :

1. ✓ 9.55 से.मी.
2. ✗ 7.55 से.मी.
3. ✗ 5.78 से.मी.
4. ✗ 6.50 से.मी.

Question Number : 119 Question Id : 7368156787 Question Type : MCQ Option Shuffling : Yes Display Question Number : Yes  
Single Line Question Option : No Option Orientation : Vertical

Correct : 1 Wrong : 0.25

Choose the correct number from the below given alternatives that will complete the series by replacing the '?'

11, 33, 55, 77, 99, ?

Options :

1. ✗ 130
2. ✗ 110
3. ✓ 121
4. ✗ 129

Question Number : 119 Question Id : 7368156787 Question Type : MCQ Option Shuffling : Yes Display Question Number : Yes  
Single Line Question Option : No Option Orientation : Vertical

Correct : 1 Wrong : 0.25

दिये गए विकल्पों में से उस विकल्प का चयन कीजिये जो नीचे दी हुई श्रेणी में '?' की जगह आकर उसे पूर्ण करे :

11, 33, 55, 77, 99, ?

Options :

visit this website [studytosuccess.in](http://studytosuccess.in)

1. ✘ 130
2. ✘ 110
3. ✔ 121
4. ✘ 129

Question Number : 120 Question Id : 7368156788 Question Type : MCQ Option Shuffling : Yes Display Question Number : Yes  
Single Line Question Option : No Option Orientation : Vertical

Correct : 1 Wrong : 0.25

Choose the correct number from the below given alternatives that will complete the series by replacing the '?'

10, 22, 38, 58, 82, ?

Options :

1. ✔ 110
2. ✘ 100
3. ✘ 140
4. ✘ 130

Question Number : 120 Question Id : 7368156788 Question Type : MCQ Option Shuffling : Yes Display Question Number : Yes  
Single Line Question Option : No Option Orientation : Vertical

Correct : 1 Wrong : 0.25

दिये गए विकल्पों में से उस विकल्प का चयन कीजिये जो नीचे दी हुई श्रेणी में '?'

की जगह आकर उसे पूर्ण करे :

10, 22, 38, 58, 82, ?

Options :

1. ✔ 110
2. ✘ 100
3. ✘ 140
4. ✘ 130

Question Number : 121 Question Id : 7368156789 Question Type : MCQ Option Shuffling : Yes Display Question Number : Yes  
Single Line Question Option : No Option Orientation : Vertical

Correct : 1 Wrong : 0.25

Rini pointing to a man says, "This man is my nephew's maternal grandfather." How is the man who has no other sister, related to Rini's sister?

Options :

1. ✘ Cousin
2. ✘ Sister-in-law
3. ✔ Father
4. ✘ Mother-in-law

Question Number : 121 Question Id : 7368156789 Question Type : MCQ Option Shuffling : Yes Display Question Number : Yes  
Single Line Question Option : No Option Orientation : Vertical

Correct : 1 Wrong : 0.25

एक आदमी की ओर संकेत करते हुए रिनी ने कहा, " यह आदमी मेरे भाजे का नाना है।" उस आदमी जिसकी कोई बहन नहीं है, उसका रिनी की बहन से क्या सम्बन्ध है?

Options :

1. ✘ चचेरा भाई (Cousin)
2. ✘ साली (Sister-in-law)
3. ✔ पिता (Father)
4. ✘ सास (Mother-in-law)

Question Number : 122 Question Id : 7368156790 Question Type : MCQ Option Shuffling : Yes Display Question Number : Yes Single Line Question Option : No Option Orientation : Vertical

Correct : 1 Wrong : 0.25

Pointing to Ganga, Sachin says, "I am the son of the only son of her grandfather." How Sachin is related to Ganga?

Options :

1. ✘ Son
2. ✘ Father
3. ✔ Brother
4. ✘ Cousin

Question Number : 122 Question Id : 7368156790 Question Type : MCQ Option Shuffling : Yes Display Question Number : Yes Single Line Question Option : No Option Orientation : Vertical

Correct : 1 Wrong : 0.25

गंगा कि ओर संकेत करते हुए सचिन ने कहा, " मैं उसके दादा के एकलौते बेटे का बेटा हूँ", सचिन का गंगा से क्या रिश्ता है?

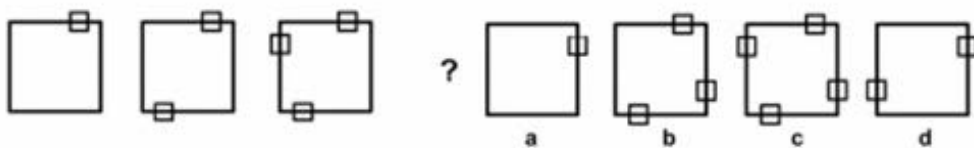
Options :

1. ✘ बेटा
2. ✘ पिता
3. ✔ भाई
4. ✘ चचेरा भाई (Cousin)

Question Number : 123 Question Id : 7368156791 Question Type : MCQ Option Shuffling : Yes Display Question Number : Yes Single Line Question Option : No Option Orientation : Vertical

Correct : 1 Wrong : 0.25

Select a figure which from (a)(b)(c) or (d) will come next?



Options :

1. ✘ a
2. ✘ b



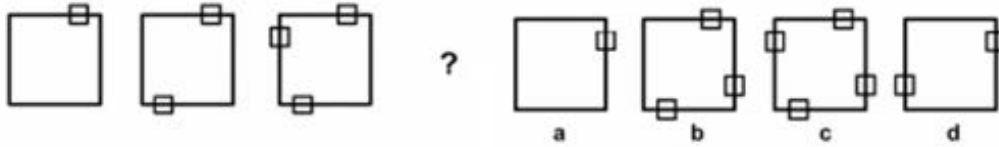
3. ✓ c

4. ✗ d

Question Number : 123 Question Id : 7368156791 Question Type : MCQ Option Shuffling : Yes Display Question Number : Yes Single Line Question Option : No Option Orientation : Vertical

Correct : 1 Wrong : 0.25

(a) (b) (c) और (d) में से उस आकृति का चयन करें जो श्रेणी में अगली होगी :



Options :

1. ✗ a

2. ✗ b

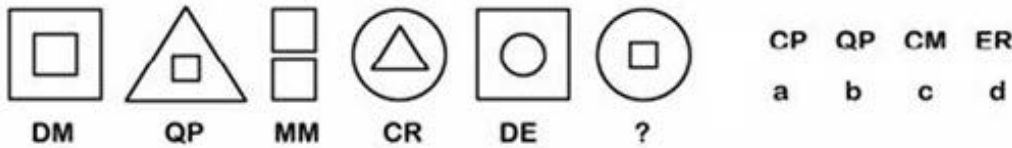
3. ✓ c

4. ✗ d

Question Number : 124 Question Id : 7368156792 Question Type : MCQ Option Shuffling : Yes Display Question Number : Yes Single Line Question Option : No Option Orientation : Vertical

Correct : 1 Wrong : 0.25

Select which pair of alphabets from (a)(b)(c) or (d) will come next?



Options :

1. ✓ a

2. ✗ b

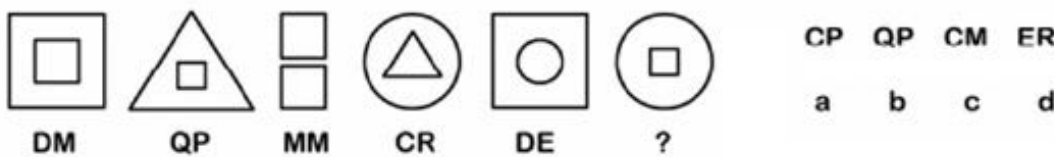
3. ✗ c

4. ✗ d

Question Number : 124 Question Id : 7368156792 Question Type : MCQ Option Shuffling : Yes Display Question Number : Yes Single Line Question Option : No Option Orientation : Vertical

Correct : 1 Wrong : 0.25

(a) (b) (c) और (d) अक्षरों में से उस जोड़े का चयन करें जो श्रेणी में अगला होगा :



Options :

1. ✓ a

2. ✗ b

3. ✗ c

4. ✗ d

Question Number : 125 Question Id : 7368156793 Question Type : MCQ Option Shuffling : Yes Display Question Number : Yes  
Single Line Question Option : No Option Orientation : Vertical

Correct : 1 Wrong : 0.25

If quotient is 345, divisor is 256 and remainder is 194 then what will be the dividend?

Options :

1. ✓ 67586
2. ✗ 87549
3. ✗ 98754
4. ✗ 87589

Note: For this question, discrepancy is found in question/answer. Full Marks is being awarded to all candidates.

Question Number : 125 Question Id : 7368156793 Question Type : MCQ Option Shuffling : Yes Display Question Number : Yes  
Single Line Question Option : No Option Orientation : Vertical

Correct : 1 Wrong : 0.25

यदि भागफल 345, भाजक 256 एवं शेषफल 194 है, तो भाज्य क्या होगा?

Options :

1. ✓ 67586
2. ✗ 87549
3. ✗ 98754
4. ✗ 87589

Note: For this question, discrepancy is found in question/answer. Full Marks is being awarded to all candidates.

Question Number : 126 Question Id : 7368156794 Question Type : MCQ Option Shuffling : Yes Display Question Number : Yes  
Single Line Question Option : No Option Orientation : Vertical

Correct : 1 Wrong : 0.25

Calculate the height of right cylinder whose radius is 10 cm lateral surface area is 2000 cm<sup>2</sup>?

Options :

1. ✗ 29.66cm
2. ✓ 31.83cm
3. ✗ 33cm
4. ✗ 34.5cm

Question Number : 126 Question Id : 7368156794 Question Type : MCQ Option Shuffling : Yes Display Question Number : Yes  
Single Line Question Option : No Option Orientation : Vertical

Correct : 1 Wrong : 0.25

उस समकोणीय बेलन की ऊंचाई ज्ञात कीजिये जिसकी त्रिज्या 10 से.मी. एवं पार्श्व सतह क्षेत्र 2000 वर्ग से.मी. है?

Options :

1. ✗ 29.66 से.मी.
2. ✓ 31.83 से.मी.
3. ✗ 33 से.मी.
4. ✗ 34.5 से.मी.

Correct : 1 Wrong : 0.25

Six girls are sitting in a circle facing to the centre of the circle. They are Priya, Neha, Rashmi, Sonali, Tina and Veera. Tina is not between Neha and Sonali but some other one. Priya is next to the left of Veera. Rashmi is 4th to the right of Priya. Which of the following statement is not true?

Options :

1. ✘ Sonali is just next to the right to Rashmi
2. ✘ Tina is just next to the right of Veera
3. ✔ Rashmi is second to the left of Tina
4. ✘ Priya is second to the right of Rashmi

Question Number : 127 Question Id : 7368156795 Question Type : MCQ Option Shuffling : Yes Display Question Number : Yes  
Single Line Question Option : No Option Orientation : Vertical

Correct : 1 Wrong : 0.25

छ: लडकियां एक चक्र के केंद्र की ओर मुंह करके एक गोलाकार में बैठी हुई हैं। उनके नाम प्रिया, नेहा, रश्मि, सोनाली, टीना और वीरा हैं। टीना, नेहा और सोनाली के बीच में नहीं है, परन्तु कोई और बैठी है। प्रिया, वीरा के बायें बगल में बैठी है। रश्मि, प्रिया के दायें से चौथी है।

निम्नलिखित में से कौनसा कथन सत्य नहीं है ?

Options :

1. ✘ सोनाली, रश्मि के ठीक दायें है
2. ✘ टीना, वीरा के ठीक दायें है
3. ✔ रश्मि, टीना के बायें से दूसरी है
4. ✘ प्रिया, रश्मि के दायें से दूसरी है

Question Number : 128 Question Id : 7368156796 Question Type : MCQ Option Shuffling : Yes Display Question Number : Yes  
Single Line Question Option : No Option Orientation : Vertical

Correct : 1 Wrong : 0.25

Six girls are sitting in a circle facing to the centre of the circle. They are Priya, Neha, Rashmi, Sonali, Tina and Veera. Tina is not between Neha and Sonali but some other one. Priya is next to the left of Veera. Rashmi is 4th to the right of Priya. If Priya and Rashmi interchange their positions then which of the following pair will sit together?

Options :

1. ✘ Rashmi & Tina
2. ✘ Priya & Veera
3. ✔ Veera & Tina
4. ✘ Neha & Veera

Question Number : 128 Question Id : 7368156796 Question Type : MCQ Option Shuffling : Yes Display Question Number : Yes  
Single Line Question Option : No Option Orientation : Vertical



छः लडकियां एक चक्र के केंद्र की ओर मुंह करके एक गोलाकार में बैठी हुई हैं। उनके नाम प्रिया, नेहा, रश्मि, सोनाली, टीना और वीरा हैं। टीना, नेहा और सोनाली के बीच में नहीं परन्तु कोई और बैठी है। प्रिया, वीरा के ठीक बायें बैठी है। रश्मि, प्रिया के दायें से चौथी है। अगर प्रिया और रश्मि अपनी जगह आपस में बदल लेती हैं, तो निम्नलिखित में से कौनसा जोड़ा साथ में बैठा होगा?

Options :

1. ✘ रश्मि और टीना
2. ✘ प्रिया और वीरा
3. ✔ वीरा और टीना
4. ✘ नेहा और वीरा

Question Number : 129 Question Id : 7368156797 Question Type : MCQ Option Shuffling : Yes Display Question Number : Yes Single Line Question Option : No Option Orientation : Vertical

Correct : 1 Wrong : 0.25

Six girls are sitting in a circle facing to the centre of the circle. They are Priya, Neha, Rashmi, Sonali, Tina and Veera. Tina is not between Neha and Sonali but some other one. Priya is next to the left of Veera. Rashmi is 4th to the right of Priya. What is the position of Tina ?

Options :

1. ✘ Just next to the right of Neha
2. ✘ Second to the left of Priya
3. ✘ Between Neha and Rashmi
4. ✔ To the immediate right of Veera

Question Number : 129 Question Id : 7368156797 Question Type : MCQ Option Shuffling : Yes Display Question Number : Yes Single Line Question Option : No Option Orientation : Vertical

Correct : 1 Wrong : 0.25

छः लडकियां चक्र के केंद्र की ओर मुंह करके एक गोलाकार में बैठी हुई हैं। उनके नाम प्रिया, नेहा, रश्मि, सोनाली, टीना और वीरा हैं। टीना नेहा और सोनाली के बीच में नहीं परन्तु किसी और के बीच में बैठी है। प्रिया, वीरा के ठीक बायें है। रश्मि, प्रिया के दायें से चौथी है। टीना कहाँ बैठी है?

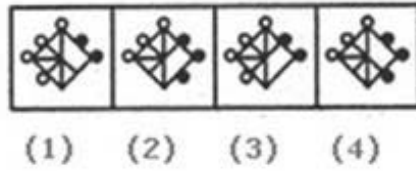
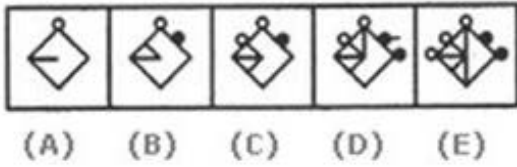
Options :

1. ✘ नेहा के ठीक दायें
2. ✘ प्रिया के बायें से दूसरी
3. ✘ नेहा और रश्मि के बीच में
4. ✔ वीरा के ठीक दायें

Question Number : 130 Question Id : 7368156798 Question Type : MCQ Option Shuffling : Yes Display Question Number : Yes Single Line Question Option : No Option Orientation : Vertical

Correct : 1 Wrong : 0.25

From the below given alternatives (1),(2),(3) and (4), select a figure that will complete the pattern (A)(B)(C)(D)(E)



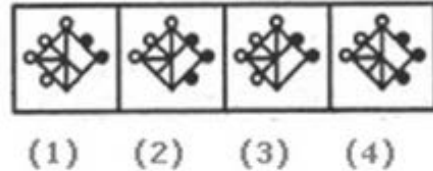
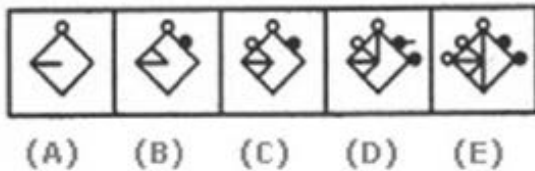
Options :

1. ✘ 1
2. ✔ 2
3. ✘ 3
4. ✘ 4

Question Number : 130 Question Id : 7368156798 Question Type : MCQ Option Shuffling : Yes Display Question Number : Yes Single Line Question Option : No Option Orientation : Vertical

Correct : 1 Wrong : 0.25

नीचे दिए गए विकल्प (1), (2), (3) और (4) में से, उस आकृति का चयन करें जो (A) (B)(C) (D) (E) के पैटर्न को पूरा करे :



Options :

1. ✘ 1
2. ✔ 2
3. ✘ 3
4. ✘ 4

Question Number : 131 Question Id : 7368156799 Question Type : MCQ Option Shuffling : Yes Display Question Number : Yes Single Line Question Option : No Option Orientation : Vertical

Correct : 1 Wrong : 0.25

Find the odd one out from the given alternatives

Options :

1. ✘ Turtle
2. ✘ Lamb
3. ✘ Colt
4. ✔ Bitch

Question Number : 131 Question Id : 7368156799 Question Type : MCQ Option Shuffling : Yes Display Question Number : Yes Single Line Question Option : No Option Orientation : Vertical

Correct : 1 Wrong : 0.25

दिये गए विकल्पों में से भिन्न का चयन करें :

Options :

1. ✘ कछुआ

2. ✘ मेमना
3. ✘ बछेड़ा
4. ✔ कुतिया

Question Number : 132 Question Id : 7368156800 Question Type : MCQ Option Shuffling : Yes Display Question Number : Yes  
Single Line Question Option : No Option Orientation : Vertical

Correct : 1 Wrong : 0.25

Which one of following keywords/phrases differ from the others in the given options

Options :

1. ✘ ADG
2. ✘ PSV
3. ✔ SUW
4. ✘ CFI

Question Number : 132 Question Id : 7368156800 Question Type : MCQ Option Shuffling : Yes Display Question Number : Yes  
Single Line Question Option : No Option Orientation : Vertical

Correct : 1 Wrong : 0.25

निम्नलिखित में से कौन सा मुख्य शब्द/वाक्यांश अन्य विकल्पों से भिन्न है?

Options :

1. ✘ ADG
2. ✘ PSV
3. ✔ SUW
4. ✘ CFI

Question Number : 133 Question Id : 7368156801 Question Type : MCQ Option Shuffling : Yes Display Question Number : Yes  
Single Line Question Option : No Option Orientation : Vertical

Correct : 1 Wrong : 0.25

Find the odd one out from the given alternatives

Options :

1. ✘ Venus
2. ✘ Saturn
3. ✔ Earth
4. ✘ Mercury

Question Number : 133 Question Id : 7368156801 Question Type : MCQ Option Shuffling : Yes Display Question Number : Yes  
Single Line Question Option : No Option Orientation : Vertical

Correct : 1 Wrong : 0.25

दिए हुए विकल्पों में से भिन्न का चयन करें :

Options :

1. ✘ शुक्र
2. ✘ शनि
3. ✔ पृथ्वी



4. ✘ बुध

Question Number : 134 Question Id : 7368156802 Question Type : MCQ Option Shuffling : Yes Display Question Number : Yes  
Single Line Question Option : No Option Orientation : Vertical

Correct : 1 Wrong : 0.25

Four pair of words are given below, out of which three are alike in some manner and one pair is different. Which pair is different from the rest?

Options :

1. ✘ Flower : Petal
2. ✘ Chair : Leg
3. ✘ Circle : Arc
4. ✔ Cover : Page

Question Number : 134 Question Id : 7368156802 Question Type : MCQ Option Shuffling : Yes Display Question Number : Yes  
Single Line Question Option : No Option Orientation : Vertical

Correct : 1 Wrong : 0.25

नीचे शब्दों के चार जोड़े दिये गए हैं, जिनमें से तीन किसी प्रकार से समान हैं और एक असमान है। कौनसा जोड़ा बाकी जोड़ों से भिन्न है?

Options :

1. ✘ फूल : पंखुड़ी
2. ✘ कुर्सी : पाया
3. ✘ गोला : चाप
4. ✔ आवरण : कागज़

Question Number : 135 Question Id : 7368156803 Question Type : MCQ Option Shuffling : Yes Display Question Number : Yes  
Single Line Question Option : No Option Orientation : Vertical

Correct : 1 Wrong : 0.25

Choose the correct number from the below given alternatives that will complete the series by replacing the '?'

7, 13, 17, 19, 23, ?

Options :

1. ✘ 25
2. ✘ 24
3. ✔ 29
4. ✘ 27

Question Number : 135 Question Id : 7368156803 Question Type : MCQ Option Shuffling : Yes Display Question Number : Yes  
Single Line Question Option : No Option Orientation : Vertical

Correct : 1 Wrong : 0.25

दिये गए विकल्पों में से उस संख्या का चयन कीजिये जो नीचे दी हुई श्रेणी में '?' के स्थान में आकर उसे पूर्ण करे :

7, 13, 17, 19, 23, ?

Options :

1. ✘ 25
2. ✘ 24
3. ✔ 29
4. ✘ 27

Question Number : 136 Question Id : 7368156804 Question Type : MCQ Option Shuffling : Yes Display Question Number : Yes  
Single Line Question Option : No Option Orientation : Vertical

Correct : 1 Wrong : 0.25

Choose the correct number from the below given alternatives that will complete the series by replacing the '?'

7, 10, 8, 11, 9, 12, ?

Options :

1. ✘ 7
2. ✘ 12
3. ✘ 13
4. ✔ 10

Question Number : 136 Question Id : 7368156804 Question Type : MCQ Option Shuffling : Yes Display Question Number : Yes  
Single Line Question Option : No Option Orientation : Vertical

Correct : 1 Wrong : 0.25

दिये गए विकल्पों में से उस संख्या का चयन कीजिये जो नीचे दी हुई श्रेणी में '?' के स्थान में आकर उसे पूर्ण करे :

7, 10, 8, 11, 9, 12, ?

Options :

1. ✘ 7
2. ✘ 12
3. ✘ 13
4. ✔ 10

Question Number : 137 Question Id : 7368156805 Question Type : MCQ Option Shuffling : Yes Display Question Number : Yes  
Single Line Question Option : No Option Orientation : Vertical

Correct : 1 Wrong : 0.25

Looking at the portrait of a girl, Sarojini said, "Her mother is the wife of my father-in-law's son. I have no brother-in-law and sister-in-law." At whose portrait was Sarojini looking ?

Options :

1. ✔ Her child
2. ✘ Her father
3. ✘ Her grandson
4. ✘ Her nephew

Question Number : 137 Question Id : 7368156805 Question Type : MCQ Option Shuffling : Yes Display Question Number : Yes  
Single Line Question Option : No Option Orientation : Vertical

Correct : 1 Wrong : 0.25

एक लड़की की तस्वीर की ओर देखते हुए सरोजिनी ने कहा, " उसकी माता मेरे ससुर के बेटे की पत्नी है"। सरोजिनी \_\_\_\_\_ की तस्वीर की ओर देख रही थी।

Options :

1. ✓ अपने बच्चे
2. ✗ अपने पिता
3. ✗ अपने पोते (grandson)
4. ✗ अपने भांजे (nephew)

Question Number : 138 Question Id : 7368156806 Question Type : MCQ Option Shuffling : Yes Display Question Number : Yes Single Line Question Option : No Option Orientation : Vertical

Correct : 1 Wrong : 0.25

Pointing to a boy. Sanchi said, "His mother's brother is the only son of my mothers's father." How the boys mother related to Sanchi?

Options :

1. ✗ Mother
2. ✗ Sister
3. ✓ Aunt
4. ✗ Grandmother

Question Number : 138 Question Id : 7368156806 Question Type : MCQ Option Shuffling : Yes Display Question Number : Yes Single Line Question Option : No Option Orientation : Vertical

Correct : 1 Wrong : 0.25

एक लड़के की ओर संकेत करते हुए साँची ने कहा, 'उसकी माँ का भाई मेरी माँ के पिता का इकलौता बेटा है"। लड़के की माँ का साँची से क्या संबंध है?

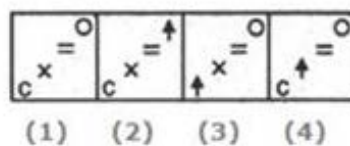
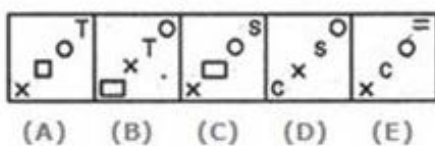
Options :

1. ✗ माँ
2. ✗ बहन
3. ✓ चाची (Aunt)
4. ✗ दादी (Grandmother)

Question Number : 139 Question Id : 7368156807 Question Type : MCQ Option Shuffling : Yes Display Question Number : Yes Single Line Question Option : No Option Orientation : Vertical

Correct : 1 Wrong : 0.25

From the below given alternatives (1),(2),(3) and (4), select a figure that will complete the pattern (A)(B)(C)(D)(E)



Options :

1. ✗ 1
2. ✗ 2



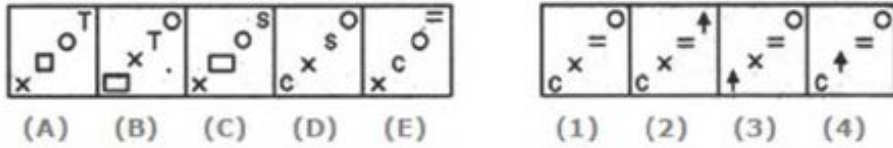
3. ✓ 3

4. ✗ 4

Question Number : 139 Question Id : 7368156807 Question Type : MCQ Option Shuffling : Yes Display Question Number : Yes  
Single Line Question Option : No Option Orientation : Vertical

Correct : 1 Wrong : 0.25

नीचे दिये गए विकल्प (1), (2), (3) और (4) में से, उस आकृति का चयन करें जो (A) (B) (C) (D) (E) के पैटर्न को पूरा करे :



Options :

1. ✗ 1

2. ✗ 2

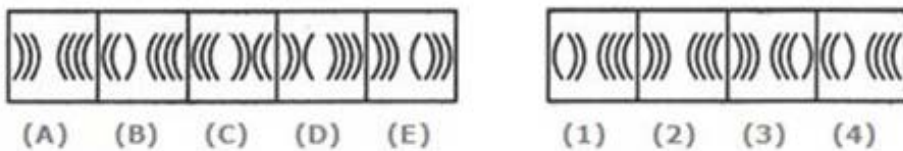
3. ✓ 3

4. ✗ 4

Question Number : 140 Question Id : 7368156808 Question Type : MCQ Option Shuffling : Yes Display Question Number : Yes  
Single Line Question Option : No Option Orientation : Vertical

Correct : 1 Wrong : 0.25

From the below given alternatives (1),(2),(3) and (4), select a figure that will complete the pattern (A)(B)(C)(D)(E)



Options :

1. ✗ 1

2. ✓ 2

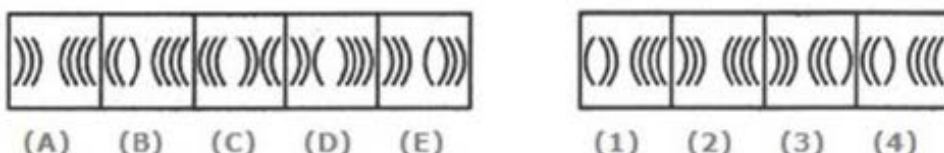
3. ✗ 3

4. ✗ 4

Question Number : 140 Question Id : 7368156808 Question Type : MCQ Option Shuffling : Yes Display Question Number : Yes  
Single Line Question Option : No Option Orientation : Vertical

Correct : 1 Wrong : 0.25

नीचे दिये गये विकल्प (1), (2), (3) और (4) में से, उस आकृति का चयन करें जो (A), (B), (C), (D), (E) के पैटर्न को पूरा करे :



Options :

1. ✗ 1

2. ✓ 2

3. ✘ 3

4. ✘ 4

Question Number : 141 Question Id : 7368156809 Question Type : MCQ Option Shuffling : Yes Display Question Number : Yes Single Line Question Option : No Option Orientation : Vertical

Correct : 1 Wrong : 0.25

Consider the following information:

Let if  $2 \& 6 \% 7 = 33$ ,  $4 \& 6 \% 8 = 54$ , then what will be the value of  $6 \% 8 \& 9$ ?

Options :

1. ✔ 77

2. ✘ 95

3. ✘ 99

4. ✘ 98

Question Number : 141 Question Id : 7368156809 Question Type : MCQ Option Shuffling : Yes Display Question Number : Yes Single Line Question Option : No Option Orientation : Vertical

Correct : 1 Wrong : 0.25

नीचे दी गई जानकारी पर विचार करें :

अगर  $2 \& 6 \% 7 = 33$  है,  $4 \& 6 \% 8 = 54$  है, तो  $6 \% 8 \& 9$  का मान

क्या होगा?

Options :

1. ✔ 77

2. ✘ 95

3. ✘ 99

4. ✘ 98

Question Number : 142 Question Id : 7368156810 Question Type : MCQ Option Shuffling : Yes Display Question Number : Yes Single Line Question Option : No Option Orientation : Vertical

Correct : 1 Wrong : 0.25

Which of the following equation is correct:

Condition given to interchange signs '+' and '-' ; numbers '5' and '8'.

Options :

1. ✔  $82 - 35 + 55 = 2$

2. ✘  $82 - 35 + 55 = 102$

3. ✘  $85 - 38 + 85 = 132$

4. ✘  $52 - 35 + 55 = 72$

Question Number : 142 Question Id : 7368156810 Question Type : MCQ Option Shuffling : Yes Display Question Number : Yes Single Line Question Option : No Option Orientation : Vertical

Correct : 1 Wrong : 0.25

शर्त दी गई है कि चिह्न '+' और '-' ; तथा संख्याएँ '5' और '8' को आपस में

बदल दिया जाए, तो निम्नलिखित में से कौनसा समीकरण सही है?

Options :

1. ✔  $82 - 35 + 55 = 2$

2. ✘  $82 - 35 + 55 = 102$

3. ✘  $85 - 38 + 85 = 132$

4. ✘  $52 - 35 + 55 = 72$

Question Number : 143 Question Id : 7368156811 Question Type : MCQ Option Shuffling : Yes Display Question Number : Yes  
Single Line Question Option : No Option Orientation : Vertical

Correct : 1 Wrong : 0.25

Which of the following equation is correct:

Condition given to interchange signs '-' and '÷' ; numbers '2' and '6'.

Options :

1. ✘  $32 - 12 \div 6 = 30$

2. ✘  $36 \div 12 - 2 = 1$

3. ✔  $32 - 16 \div 6 = 1$

4. ✘  $36 - 12 \div 2 = 30$

Question Number : 143 Question Id : 7368156811 Question Type : MCQ Option Shuffling : Yes Display Question Number : Yes  
Single Line Question Option : No Option Orientation : Vertical

Correct : 1 Wrong : 0.25

शर्त दी गई है कि चिह्न '-' और '÷' ; तथा संख्याएँ '2' एवं '6' को आपस में बदल दिया जाए, तो निम्नलिखित में से कौनसा समीकरण सही नहीं है?

Options :

1. ✘  $32 - 12 \div 6 = 30$

2. ✘  $36 \div 12 - 2 = 1$

3. ✔  $32 - 16 \div 6 = 1$

4. ✘  $36 - 12 \div 2 = 30$

Question Number : 144 Question Id : 7368156812 Question Type : MCQ Option Shuffling : Yes Display Question Number : Yes  
Single Line Question Option : No Option Orientation : Vertical

Correct : 1 Wrong : 0.25

30 members of a team ROYAL decided to play a cricket tournament. Every time a member loses a game he is out of the tournament. There are no ties. What is the minimum number of matches that must be played to determine the winner?

Options :

1. ✘ 10

2. ✘ 15

3. ✔ 29

4. ✘ 61

Question Number : 144 Question Id : 7368156812 Question Type : MCQ Option Shuffling : Yes Display Question Number : Yes  
Single Line Question Option : No Option Orientation : Vertical

Correct : 1 Wrong : 0.25



रायल टीम के 30 सदस्यों ने क्रिकेट टूर्नामेंट खेलने का फैसला किया। जब भी कोई सदस्य खेल हारता है, तो वह टूर्नामेंट से बाहर हो जाता है। इसमें कोई भी टाई (बराबर - बराबर) नहीं है। विजेता का पता लगाने के लिए कम से कम कितने मैच खेलने आवश्यक हैं?

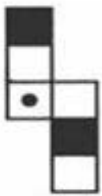
Options :

1. ✘ 10
2. ✘ 15
3. ✔ 29
4. ✘ 61

Question Number : 145 Question Id : 7368156813 Question Type : MCQ Option Shuffling : Yes Display Question Number : Yes Single Line Question Option : No Option Orientation : Vertical

Correct : 1 Wrong : 0.25

Carefully observe the given sheet of paper (X). You need to find out the cube from the given alternatives that is formed by using given paper (X)



(X)



(1)



(2)



(3)



(4)

Options :

1. ✘ 2 and 3 only
2. ✔ 1, 3 and 4 only
3. ✘ 2 and 4 only
4. ✘ 1 and 4 only

Question Number : 145 Question Id : 7368156813 Question Type : MCQ Option Shuffling : Yes Display Question Number : Yes Single Line Question Option : No Option Orientation : Vertical

Correct : 1 Wrong : 0.25

कागज (X) को ध्यानपूर्वक देखिये, आपको पता लगाना है कि कागज़ (X) के प्रयोग से निम्नलिखित विकल्पों में से कौनसा घन बनेगा?



(X)



(1)



(2)



(3)



(4)

Options :

1. ✘ केवल 2 एवं 3
2. ✔ केवल 1, 3 एवं 4
3. ✘ 2 एवं 4

4. ✘ 1 एव 4

Question Number : 146 Question Id : 7368156814 Question Type : MCQ Option Shuffling : Yes Display Question Number : Yes  
Single Line Question Option : No Option Orientation : Vertical

Correct : 1 Wrong : 0.25

Four defensive football players are chasing the opposing wide receiver, who has the ball. Messi is directly behind the ball carrier.

Ronaldo and Burton are side by side behind Messi. Zeller is behind Ronaldo and Burton.

Messi tries for the tackle but misses and falls. Burton trips. Which defensive player tackles the receiver?

Options :

1. ✘ Burton
2. ✘ Zeller
3. ✔ Ronaldo
4. ✘ Messi

Question Number : 146 Question Id : 7368156814 Question Type : MCQ Option Shuffling : Yes Display Question Number : Yes  
Single Line Question Option : No Option Orientation : Vertical

Correct : 1 Wrong : 0.25

चार रक्षात्मक फुटबॉल खिलाड़ी, विरोधी टीम के वाइड रिसीवर का पीछा कर रहे हैं जिसके पास बॉल है, मैसी बॉल कैरियर के ठीक पीछे है, रोनाल्डो और बुर्टोन साथ-साथ मैसी के पीछे हैं। जेलर, रोनाल्डो और बुर्टोन के पीछे है। मैसी टैकल करने की कोशिश करता है लेकिन चूक जाता है और गिर जाता है। बुर्टोन लड़खड़ा जाता है। इनमें से कौन सा रक्षात्मक खिलाड़ी रिसीवर का सामना करेगा?

Options :

1. ✘ बुर्टोन
2. ✘ जेलर
3. ✔ रोनाल्डो
4. ✘ मैसी

Question Number : 147 Question Id : 7368156815 Question Type : MCQ Option Shuffling : Yes Display Question Number : Yes  
Single Line Question Option : No Option Orientation : Vertical

Correct : 1 Wrong : 0.25

Choose the correct number from the below given alternatives that will complete the series by replacing the?

36, 34, 30, 28, 24, ?

Options :

1. ✔ 22
2. ✘ 20
3. ✘ 23
4. ✘ 26

Question Number : 147 Question Id : 7368156815 Question Type : MCQ Option Shuffling : Yes Display Question Number : Yes  
Single Line Question Option : No Option Orientation : Vertical

Correct : 1 Wrong : 0.25

दिये गए विकल्पों में से सही संख्या का चुनाव करें जो '?' को प्रतिस्थापित करके नीचे दी गई श्रेणी को पूरा करेगा।

36, 34, 30, 28, 24, ?

Options :

1. ✓ 22
2. ✗ 20
3. ✗ 23
4. ✗ 26

Question Number : 148 Question Id : 7368156816 Question Type : MCQ Option Shuffling : Yes Display Question Number : Yes  
Single Line Question Option : No Option Orientation : Vertical

Correct : 1 Wrong : 0.25

Choose the correct number from the below given alternatives that will complete the series by replacing the?

121, 144, 169, ?, 225

Options :

1. ✗ 180
2. ✗ 172
3. ✗ 186
4. ✓ 196

Question Number : 148 Question Id : 7368156816 Question Type : MCQ Option Shuffling : Yes Display Question Number : Yes  
Single Line Question Option : No Option Orientation : Vertical

Correct : 1 Wrong : 0.25

दिये गए विकल्पों में से सही संख्या का चुनाव करें जो '?' को प्रतिस्थापित करके नीचे दी गई श्रेणी को पूरा करेगा।

121, 144, 169, ?, 225

Options :

1. ✗ 180
2. ✗ 172
3. ✗ 186
4. ✓ 196

Question Number : 149 Question Id : 7368156817 Question Type : MCQ Option Shuffling : Yes Display Question Number : Yes  
Single Line Question Option : No Option Orientation : Vertical


Correct : 1 Wrong : 0.25



Carefully observe the figure shown in figure (X). How will figure (X) look after rotation from the given alternatives (1),(2),(3),(4) ?



(X)



(1) (2) (3) (4)

Options :

- 1. ✘ 1
- 2. ✔ 2
- 3. ✘ 3
- 4. ✘ 4

Question Number : 149 Question Id : 7368156817 Question Type : MCQ Option Shuffling : Yes Display Question Number : Yes Single Line Question Option : No Option Orientation : Vertical

Correct : 1 Wrong : 0.25

आकृति (X) में दिख रहे चित्र पर ध्यान दें। विकल्प (1), (2), (3), (4) में से चुनकर बताएं कि आकृति (X) घूमने के बाद कैसे दिखेगी?



(X)



(1) (2) (3) (4)

Options :

- 1. ✘ 1
- 2. ✔ 2
- 3. ✘ 3
- 4. ✘ 4

Question Number : 150 Question Id : 7368156818 Question Type : MCQ Option Shuffling : Yes Display Question Number : Yes Single Line Question Option : No Option Orientation : Vertical

Correct : 1 Wrong : 0.25

Choose the odd figure.



a



b



c



d

Options :

- 1. ✔ a
- 2. ✘ b
- 3. ✘ c
- 4. ✘ d

Question Number : 150 Question Id : 7368156818 Question Type : MCQ Option Shuffling : Yes Display Question Number : Yes Single Line Question Option : No Option Orientation : Vertical

भिन्न आकृति का चयन करें :



Options :

1. ✓ a
2. ✗ b
3. ✗ c
4. ✗ d

General Awareness

Section Id :	736815134
Section Number :	4
Section type :	Online
Mandatory or Optional:	Mandatory
Number of Questions:	50
Number of Questions to be attempted:	50
Section Marks:	50
Display Number Panel:	Yes
Group All Questions:	No

Sub-Section Number:	1
Sub-Section Id:	736815202
Question Shuffling Allowed :	Yes

Question Number : 151 Question Id : 7368156819 Question Type : MCQ Option Shuffling : Yes Display Question Number : Yes  
Single Line Question Option : No Option Orientation : Vertical

Correct : 1 Wrong : 0.25

Which one of the following words was added to the preamble of Indian Constitution by the 42<sup>nd</sup> amendment?

Options :

1. ✓ Integrity
2. ✗ Liberty
3. ✗ Equality
4. ✗ Fraternity

Question Number : 151 Question Id : 7368156819 Question Type : MCQ Option Shuffling : Yes Display Question Number : Yes  
Single Line Question Option : No Option Orientation : Vertical

Correct : 1 Wrong : 0.25

निम्नलिखित शब्दों में से कौन सा 42वे संशोधन द्वारा भारतीय संविधान की प्रस्तावना में जोड़ा गया था?

Options :

1. ✓ अखंडता
2. ✗ स्वतंत्रता
3. ✗ समानता
4. ✗ भाईचारा

Question Number : 152 Question Id : 7368156820 Question Type : MCQ Option Shuffling : Yes Display Question Number : Yes  
Single Line Question Option : No Option Orientation : Vertical

Correct : 1 Wrong : 0.25

The concept of fundamental rights in Indian Constitution is borrowed from?

Options :

1. ✗ Germany
2. ✗ Australia
3. ✗ Canada
4. ✓ United states of America

Question Number : 152 Question Id : 7368156820 Question Type : MCQ Option Shuffling : Yes Display Question Number : Yes  
Single Line Question Option : No Option Orientation : Vertical

Correct : 1 Wrong : 0.25

भारतीय संविधान में मौलिक अधिकारों की अवधारणा किससे ली गई है?

Options :

1. ✗ जर्मनी
2. ✗ ऑस्ट्रेलिया
3. ✗ कनाडा
4. ✓ संयुक्त राज्य अमेरिका

Question Number : 153 Question Id : 7368156821 Question Type : MCQ Option Shuffling : Yes Display Question Number : Yes  
Single Line Question Option : No Option Orientation : Vertical

Correct : 1 Wrong : 0.25

Which article of Indian Constitution deals with ending untouchability?

Options :

1. ✗ Article 45
2. ✗ Article 25
3. ✓ Article 17
4. ✗ Article 21

Question Number : 153 Question Id : 7368156821 Question Type : MCQ Option Shuffling : Yes Display Question Number : Yes  
Single Line Question Option : No Option Orientation : Vertical

Correct : 1 Wrong : 0.25

भारतीय संविधान का कौन सा अनुच्छेद अस्पृश्यता समाप्ति से संबंधित है?

Options :

1. ✗ अनुच्छेद 45



2. ✘ अनुच्छेद 25

3. ✔ अनुच्छेद 17

4. ✘ अनुच्छेद 21

Question Number : 154 Question Id : 7368156822 Question Type : MCQ Option Shuffling : Yes Display Question Number : Yes  
Single Line Question Option : No Option Orientation : Vertical

Correct : 1 Wrong : 0.25

Who among the following represents India on the International forum?

Options :

1. ✔ President

2. ✘ Prime Minister

3. ✘ Home Minister

4. ✘ Foreign Minister

Question Number : 154 Question Id : 7368156822 Question Type : MCQ Option Shuffling : Yes Display Question Number : Yes  
Single Line Question Option : No Option Orientation : Vertical

Correct : 1 Wrong : 0.25

अंतरराष्ट्रीय फोरम पर भारत का प्रतिनिधित्व निम्नलिखित में से कौन करता है?

Options :

1. ✔ अध्यक्ष

2. ✘ प्रधान मंत्री

3. ✘ ग्रह मंत्री

4. ✘ विदेश मंत्री

Question Number : 155 Question Id : 7368156823 Question Type : MCQ Option Shuffling : Yes Display Question Number : Yes  
Single Line Question Option : No Option Orientation : Vertical

Correct : 1 Wrong : 0.25

The 'Zero Hour' in Lok Sabha is generally between?

Options :

1. ✔ 12 noon to 1pm

2. ✘ 1pm to 2pm

3. ✘ 3pm to 4pm

4. ✘ 10am to 11am

Question Number : 155 Question Id : 7368156823 Question Type : MCQ Option Shuffling : Yes Display Question Number : Yes  
Single Line Question Option : No Option Orientation : Vertical

Correct : 1 Wrong : 0.25

लोकसभा में 'शून्यकाल' (Zero Hour) आम तौर पर कितने बजे होता है?

Options :

1. ✔ दोपहर 12 बजे से 1:00 बजे तक

2. ✘ दोपहर 1:00 बजे से 2:00 बजे तक

3. ✘ दोपहर 3:00 बजे से 4:00 बजे तक
4. ✘ सुबह 10:00 बजे से 11:00 बजे तक

Question Number : 156 Question Id : 7368156824 Question Type : MCQ Option Shuffling : Yes Display Question Number : Yes  
Single Line Question Option : No Option Orientation : Vertical  
Correct : 1 Wrong : 0.25

In which year Karanam Malleswari won Bronze medal in Wrestling at Olympics?

Options :

1. ✘ 2008
2. ✔ 2000
3. ✘ 1996
4. ✘ 2004

Question Number : 156 Question Id : 7368156824 Question Type : MCQ Option Shuffling : Yes Display Question Number : Yes  
Single Line Question Option : No Option Orientation : Vertical  
Correct : 1 Wrong : 0.25

करनम मल्लेश्वरी ने किस साल ओलंपिक में कुश्ती में कांस्य पदक जीता था?

Options :

1. ✘ 2008
2. ✔ 2000
3. ✘ 1996
4. ✘ 2004

Question Number : 157 Question Id : 7368156825 Question Type : MCQ Option Shuffling : Yes Display Question Number : Yes  
Single Line Question Option : No Option Orientation : Vertical  
Correct : 1 Wrong : 0.25

Jannalal Bajaj award is given for contributions in the field of?

Options :

1. ✔ Science
2. ✘ Literature
3. ✘ Sports
4. ✘ Politics

Question Number : 157 Question Id : 7368156825 Question Type : MCQ Option Shuffling : Yes Display Question Number : Yes  
Single Line Question Option : No Option Orientation : Vertical  
Correct : 1 Wrong : 0.25

जमनालाल बजाज पुरस्कार किस क्षेत्र में योगदान के लिए दिया जाता है?

Options :

1. ✔ विज्ञान
2. ✘ साहित्य
3. ✘ खेल
4. ✘ राजनीति

Correct : 1 Wrong : 0.25

Which one of the following award is given for controlling the quality in industries?

Options :

1. ✘ Indira Priyadarshini Award
2. ✔ Rajiv Gandhi Quality Award
3. ✘ J.C.Bose Award
4. ✘ Bharati Samman Award

Question Number : 158 Question Id : 7368156826 Question Type : MCQ Option Shuffling : Yes Display Question Number : Yes  
Single Line Question Option : No Option Orientation : Vertical

Correct : 1 Wrong : 0.25

निम्नलिखित में से कौन सा पुरस्कार उद्योगों में गुणवत्ता को नियंत्रित करने के लिए दिया जाता है?

Options :

1. ✘ इंदिरा प्रियदर्शिनी पुरस्कार
2. ✔ राजीव गांधी गुणवत्ता पुरस्कार
3. ✘ जे. सी. बोस पुरस्कार
4. ✘ भारती सम्मान पुरस्कार

Question Number : 159 Question Id : 7368156827 Question Type : MCQ Option Shuffling : Yes Display Question Number : Yes  
Single Line Question Option : No Option Orientation : Vertical

Correct : 1 Wrong : 0.25

Which one of the following award is given for promoting Cultural Harmony?

Options :

1. ✘ Arjuna Award
2. ✘ Dhronacharya Award
3. ✘ Tulsidas Award
4. ✔ Tagore Award

Question Number : 159 Question Id : 7368156827 Question Type : MCQ Option Shuffling : Yes Display Question Number : Yes  
Single Line Question Option : No Option Orientation : Vertical

Correct : 1 Wrong : 0.25

निम्नलिखित में से कौन सा पुरस्कार सांस्कृतिक सद्भाव को बढ़ावा देने के लिए दिया जाता है?

Options :

1. ✘ अर्जुन पुरस्कार
2. ✘ द्रोणाचार्य पुरस्कार
3. ✘ तुलसीदास पुरस्कार



4. ✓ टैगोर पुरस्कार

Question Number : 160 Question Id : 7368156828 Question Type : MCQ Option Shuffling : Yes Display Question Number : Yes Single Line Question Option : No Option Orientation : Vertical

Correct : 1 Wrong : 0.25

Which of the following award is given for significant role in wildlife protection?

Options :

1. ✓ Rajiv Gandhi Wild Life Conservation Award
2. ✗ Salim Ali Award
3. ✗ Lal Bahadur Shastri Wild life Conservation Award
4. ✗ Jim Corbett Award

Question Number : 160 Question Id : 7368156828 Question Type : MCQ Option Shuffling : Yes Display Question Number : Yes Single Line Question Option : No Option Orientation : Vertical

Correct : 1 Wrong : 0.25

निम्नलिखित में से कौन सा पुरस्कार वन्य जीवन संरक्षण में महत्वपूर्ण भूमिका के लिए दिया जाता है?

Options :

1. ✓ राजीव गांधी वन्य जीवन संरक्षण पुरस्कार
2. ✗ सलीम अली पुरस्कार
3. ✗ लाल बहादुर शास्त्री वन्य जीवन संरक्षण पुरस्कार
4. ✗ जिम कॉर्बेट अवार्ड

Question Number : 161 Question Id : 7368156829 Question Type : MCQ Option Shuffling : Yes Display Question Number : Yes Single Line Question Option : No Option Orientation : Vertical

Correct : 1 Wrong : 0.25

The author of the book 'The Hungry Tide' is?

Options :

1. ✗ Vikram Seth
2. ✗ Rohinton Mistry
3. ✗ A.P.J.Abdul Kalam
4. ✓ Amitav Ghosh

Question Number : 161 Question Id : 7368156829 Question Type : MCQ Option Shuffling : Yes Display Question Number : Yes Single Line Question Option : No Option Orientation : Vertical

Correct : 1 Wrong : 0.25

पुस्तक 'हंगरी टाइड' के लेखक कौन हैं?

Options :

1. ✗ विक्रम सेठ
2. ✗ रोहिंटन मिस्त्री
3. ✗ ए. पी. जे. अब्दुल कलाम

4. ✓ अमिताव घोष

Question Number : 162 Question Id : 7368156830 Question Type : MCQ Option Shuffling : Yes Display Question Number : Yes  
Single Line Question Option : No Option Orientation : Vertical

Correct : 1 Wrong : 0.25

'An Equal Music' is the book written by?

Options :

1. ✓ Vikram Seth
2. ✗ VS Naipaul
3. ✗ Kiran Desai
4. ✗ Arundhati Roy

Question Number : 162 Question Id : 7368156830 Question Type : MCQ Option Shuffling : Yes Display Question Number : Yes  
Single Line Question Option : No Option Orientation : Vertical

Correct : 1 Wrong : 0.25

'एन इक्वल म्यूजिक' पुस्तक किसने लिखी है?

Options :

1. ✓ विक्रम सेठ
2. ✗ वी. एस. नायपाल
3. ✗ किरण देसाई
4. ✗ अरुंधति राय

Question Number : 163 Question Id : 7368156831 Question Type : MCQ Option Shuffling : Yes Display Question Number : Yes  
Single Line Question Option : No Option Orientation : Vertical

Correct : 1 Wrong : 0.25

Which one of the following is the collection of poems of Sarojini Naidu?

Options :

1. ✗ Gitika Ratna
2. ✗ Pancharatnas
3. ✗ Diamond Threshold
4. ✓ Golden Threshold

Question Number : 163 Question Id : 7368156831 Question Type : MCQ Option Shuffling : Yes Display Question Number : Yes  
Single Line Question Option : No Option Orientation : Vertical

Correct : 1 Wrong : 0.25

निम्नलिखित में से कौन सा संग्रह सरोजिनी नायडू की कविताओं का संग्रह है?

Options :

1. ✗ गीतिका रत्न
2. ✗ पंचरत्न
3. ✗ डायमंड थ्रेशहोल्ड
4. ✓ गोल्डन थ्रेशहोल्ड

Question Number : 164 Question Id : 7368156832 Question Type : MCQ Option Shuffling : Yes Display Question Number : Yes  
Single Line Question Option : No Option Orientation : Vertical

Correct : 1 Wrong : 0.25

The famous book 'Ratnavali' was written by

Options :

1. ✘ Chanakya
2. ✔ Harsha Vardhana
3. ✘ Kautilya
4. ✘ Amara Sinha

Question Number : 164 Question Id : 7368156832 Question Type : MCQ Option Shuffling : Yes Display Question Number : Yes  
Single Line Question Option : No Option Orientation : Vertical

Correct : 1 Wrong : 0.25

प्रसिद्ध पुस्तक 'रत्नावली' के लेखक कौन हैं?

Options :

1. ✘ चाणक्य
2. ✔ हर्षवर्धन
3. ✘ कौटिल्य
4. ✘ अमर सिन्हा

Question Number : 165 Question Id : 7368156833 Question Type : MCQ Option Shuffling : Yes Display Question Number : Yes  
Single Line Question Option : No Option Orientation : Vertical

Correct : 1 Wrong : 0.25

'Gita Govinda' is written by?

Options :

1. ✔ Jayadeva
2. ✘ Kalidasa
3. ✘ Adi Shankara
4. ✘ Ashoka

Question Number : 165 Question Id : 7368156833 Question Type : MCQ Option Shuffling : Yes Display Question Number : Yes  
Single Line Question Option : No Option Orientation : Vertical

Correct : 1 Wrong : 0.25

'गीत गोविंद' किसने लिखा है?

Options :

1. ✔ जयदेव
2. ✘ कालिदास
3. ✘ आदि शंकराचार्य
4. ✘ अशोक

Question Number : 166 Question Id : 7368156834 Question Type : MCQ Option Shuffling : Yes Display Question Number : Yes  
Single Line Question Option : No Option Orientation : Vertical

Correct : 1 Wrong : 0.25



The birthplace of Gautama Buddha was?

Options :

1. ✓ Vallabhi
2. ✗ Kapilavastu
3. ✗ Kandahar
4. ✗ Dhaulī

Note: For this question, discrepancy is found in question/answer. Full Marks is being awarded to all candidates.

Question Number : 166 Question Id : 7368156834 Question Type : MCQ Option Shuffling : Yes Display Question Number : Yes  
Single Line Question Option : No Option Orientation : Vertical

Correct : 1 Wrong : 0.25

गौतम बुद्ध का जन्म स्थान \_\_\_\_\_ है।

Options :

1. ✓ वल्लभी
2. ✗ कपिलवस्तु
3. ✗ कंधार
4. ✗ धौली

Note: For this question, discrepancy is found in question/answer. Full Marks is being awarded to all candidates.

Question Number : 167 Question Id : 7368156835 Question Type : MCQ Option Shuffling : Yes Display Question Number : Yes  
Single Line Question Option : No Option Orientation : Vertical

Correct : 1 Wrong : 0.25

From the following \_\_\_\_\_ was a famous Indian painter.

Options :

1. ✗ Ravi Shankar
2. ✗ Balamurali Krishna
3. ✓ M.F.Hussain
4. ✗ Yamini Krishnamurty

Question Number : 167 Question Id : 7368156835 Question Type : MCQ Option Shuffling : Yes Display Question Number : Yes  
Single Line Question Option : No Option Orientation : Vertical

Correct : 1 Wrong : 0.25

निम्नलिखित में से कौन एक प्रसिद्ध भारतीय चित्रकार है?

Options :

1. ✗ रविशंकर
2. ✗ बालामुरली कृष्णा
3. ✓ एम. एफ. हुसैन
4. ✗ यामिनी कृष्णमूर्ति

Question Number : 168 Question Id : 7368156836 Question Type : MCQ Option Shuffling : Yes Display Question Number : Yes  
Single Line Question Option : No Option Orientation : Vertical

Correct : 1 Wrong : 0.25

Hariprasad Chaurasia is popular for playing which of the following musical instruments?

Options :

1. ✘ Violin
2. ✘ Guitar
3. ✘ Tabla
4. ✔ Flute

Question Number : 168 Question Id : 7368156836 Question Type : MCQ Option Shuffling : Yes Display Question Number : Yes  
Single Line Question Option : No Option Orientation : Vertical

Correct : 1 Wrong : 0.25

हरिप्रसाद चौरसिया निम्नलिखित में से कौनसे संगीत वाद्ययंत्र के लिए लोकप्रिय है?

Options :

1. ✘ वायलिन
2. ✘ गिटार
3. ✘ तबला
4. ✔ बांसुरी

Question Number : 169 Question Id : 7368156837 Question Type : MCQ Option Shuffling : Yes Display Question Number : Yes  
Single Line Question Option : No Option Orientation : Vertical

Correct : 1 Wrong : 0.25

Which Indian music director is known as 'Maestro'?

Options :

1. ✔ Ilayaraja
2. ✘ Bappi Lahiri
3. ✘ A.R.Rehman
4. ✘ Laxmikant Pyarelal

Question Number : 169 Question Id : 7368156837 Question Type : MCQ Option Shuffling : Yes Display Question Number : Yes  
Single Line Question Option : No Option Orientation : Vertical

Correct : 1 Wrong : 0.25

कौनसे भारतीय संगीत निर्देशक 'उस्ताद' के रूप में जाने जाते हैं?

Options :

1. ✔ इलयाराजा
2. ✘ बप्पी लाहिड़ी
3. ✘ ए. आर. रहमान
4. ✘ लक्ष्मीकांत प्यारेलाल

Question Number : 170 Question Id : 7368156838 Question Type : MCQ Option Shuffling : Yes Display Question Number : Yes  
Single Line Question Option : No Option Orientation : Vertical

Correct : 1 Wrong : 0.25

'Dol Jatra' (Yaoshang) is the festival celebrated in which of the following State?

Options :

1. ✘ Goa
2. ✘ Jharkhand
3. ✘ Maharashtra
4. ✔ Manipur

Question Number : 170 Question Id : 7368156838 Question Type : MCQ Option Shuffling : Yes Display Question Number : Yes  
Single Line Question Option : No Option Orientation : Vertical

Correct : 1 Wrong : 0.25

'डोल जात्रा' (योशंग) त्योहार कौनसे राज्य में मनाया जाता है?

Options :

1. ✘ गोवा
2. ✘ झारखंड
3. ✘ महाराष्ट्र
4. ✔ मणिपुर

Question Number : 171 Question Id : 7368156839 Question Type : MCQ Option Shuffling : Yes Display Question Number : Yes  
Single Line Question Option : No Option Orientation : Vertical

Correct : 1 Wrong : 0.25

The highest Law officer of the state is?

Options :

1. ✔ Advocate General
2. ✘ High Court Judge
3. ✘ Home Minister of State
4. ✘ Secretary General of Law Department

Question Number : 171 Question Id : 7368156839 Question Type : MCQ Option Shuffling : Yes Display Question Number : Yes  
Single Line Question Option : No Option Orientation : Vertical

Correct : 1 Wrong : 0.25

राज्य के सर्वोच्च कानून अधिकारी कौन हैं?

Options :

1. ✔ महाधिवक्ता
2. ✘ उच्च न्यायालय के न्यायाधीश
3. ✘ राज्य के गृह मंत्री
4. ✘ कानून विभाग के महासचिव

Question Number : 172 Question Id : 7368156840 Question Type : MCQ Option Shuffling : Yes Display Question Number : Yes  
Single Line Question Option : No Option Orientation : Vertical

Correct : 1 Wrong : 0.25

Which Amendment Act proposed grant of statehood to Delhi?

Options :

1. ✔ 50<sup>th</sup> Amendment Act



2. ✘ 73<sup>rd</sup> Amendment Act
3. ✘ 40<sup>th</sup> Amendment Act
4. ✘ 60<sup>th</sup> Amendment Act

Note: For this question, discrepancy is found in question/answer. Full Marks is being awarded to all candidates.

Question Number : 172 Question Id : 7368156840 Question Type : MCQ Option Shuffling : Yes Display Question Number : Yes  
Single Line Question Option : No Option Orientation : Vertical

Correct : 1 Wrong : 0.25

किस संशोधन अधिनियम में दिल्ली को पूर्ण राज्य के दर्जे के रूप में प्रस्तावित किया गया?

Options :

1. ✔ 50वे संशोधन अधिनियम
2. ✘ 73वे संशोधन अधिनियम
3. ✘ 40वे संशोधन अधिनियम
4. ✘ 60वे संशोधन अधिनियम

Note: For this question, discrepancy is found in question/answer. Full Marks is being awarded to all candidates.

Question Number : 173 Question Id : 7368156841 Question Type : MCQ Option Shuffling : Yes Display Question Number : Yes  
Single Line Question Option : No Option Orientation : Vertical

Correct : 1 Wrong : 0.25

Which one of the following is called Permanent House as it can never be fully dissolved?

Options :

1. ✘ Lok Sabha
2. ✔ Rajya Sabha
3. ✘ State Assembly
4. ✘ Election commission

Question Number : 173 Question Id : 7368156841 Question Type : MCQ Option Shuffling : Yes Display Question Number : Yes  
Single Line Question Option : No Option Orientation : Vertical

Correct : 1 Wrong : 0.25

निम्नलिखित में से कौन सा स्थायी घर कहा जाता है, क्योंकि इसे पूरी तरह से भंग नहीं किया जा सकता?

Options :

1. ✘ लोकसभा
2. ✔ राज्यसभा
3. ✘ राज्य विधानसभा
4. ✘ चुनाव आयोग

Question Number : 174 Question Id : 7368156842 Question Type : MCQ Option Shuffling : Yes Display Question Number : Yes  
Single Line Question Option : No Option Orientation : Vertical

Correct : 1 Wrong : 0.25

Who appoints the Chief Election Commissioner of India?

Options :

1. ✓ President
2. ✗ Chief Justice of India
3. ✗ Parliament
4. ✗ Vice-President

Question Number : 174 Question Id : 7368156842 Question Type : MCQ Option Shuffling : Yes Display Question Number : Yes  
Single Line Question Option : No Option Orientation : Vertical

Correct : 1 Wrong : 0.25

भारत के मुख्य चुनाव आयुक्त को कौन नियुक्त करता है?

Options :

1. ✓ अध्यक्ष
2. ✗ भारत के मुख्य न्यायाधीश
3. ✗ संसद
4. ✗ उप राष्ट्रपति

Question Number : 175 Question Id : 7368156843 Question Type : MCQ Option Shuffling : Yes Display Question Number : Yes  
Single Line Question Option : No Option Orientation : Vertical

Correct : 1 Wrong : 0.25

In which year first ever General Elections were held in India?

Options :

1. ✗ 1949
2. ✗ 1948
3. ✗ 1947
4. ✓ 1952

Question Number : 175 Question Id : 7368156843 Question Type : MCQ Option Shuffling : Yes Display Question Number : Yes  
Single Line Question Option : No Option Orientation : Vertical

Correct : 1 Wrong : 0.25

भारत में पहली बार किस साल आम चुनाव का आयोजन किया गया था?

Options :

1. ✗ 1949
2. ✗ 1948
3. ✗ 1947
4. ✓ 1952

Question Number : 176 Question Id : 7368156844 Question Type : MCQ Option Shuffling : Yes Display Question Number : Yes  
Single Line Question Option : No Option Orientation : Vertical

Correct : 1 Wrong : 0.25

Akash missile was successfully test fired at which place in January 2016?

Options :

1. ✗ Jodhpur, Rajasthan
2. ✗ Sriharikota, Andhra Pradesh

3. ✘ Pune, Maharashtra

4. ✔ Chandipur, Odisha

Question Number : 176 Question Id : 7368156844 Question Type : MCQ Option Shuffling : Yes Display Question Number : Yes  
Single Line Question Option : No Option Orientation : Vertical

Correct : 1 Wrong : 0.25

जनवरी 2016 में आकाश मिसाइल का सफलतापूर्वक परीक्षण कहाँ किया गया था?

Options :

1. ✘ जोधपुर, राजस्थान

2. ✘ श्रीहरिकोटा, आंध्र प्रदेश

3. ✘ पुणे, महाराष्ट्र

4. ✔ चांदीपुर, ओडिशा

Question Number : 177 Question Id : 7368156845 Question Type : MCQ Option Shuffling : Yes Display Question Number : Yes  
Single Line Question Option : No Option Orientation : Vertical

Correct : 1 Wrong : 0.25

Who is the present President of Board of Control for Cricket in India?

Options :

1. ✘ Srinivasan

2. ✘ Lalit Modi

3. ✔ Shashank Manohar

4. ✘ Ravi Shastri

Question Number : 177 Question Id : 7368156845 Question Type : MCQ Option Shuffling : Yes Display Question Number : Yes  
Single Line Question Option : No Option Orientation : Vertical

Correct : 1 Wrong : 0.25

भारतीय क्रिकेट कंट्रोल बोर्ड के वर्तमान अध्यक्ष कौन हैं?

Options :

1. ✘ श्रीनिवासन

2. ✘ ललित मोदी

3. ✔ शशांक मनोहर

4. ✘ रवि शास्त्री

Question Number : 178 Question Id : 7368156846 Question Type : MCQ Option Shuffling : Yes Display Question Number : Yes  
Single Line Question Option : No Option Orientation : Vertical

Correct : 1 Wrong : 0.25

Which of the following Indian Universities completed 100 years on February 13<sup>th</sup> 2016?

Options :

1. ✔ Banaras Hindu University

2. ✘ Aligarh Muslim University

3. ✘ Osmania University



Question Number : 178 Question Id : 7368156846 Question Type : MCQ Option Shuffling : Yes Display Question Number : Yes  
Single Line Question Option : No Option Orientation : Vertical

Correct : 1 Wrong : 0.25

13 फरवरी 2016 को किस भारतीय विश्वविद्यालय ने 100 वर्ष पूरे किये हैं?

Options :

1. ✔ बनारस हिंदू विश्वविद्यालय
2. ✘ अलीगढ़ मुस्लिम विश्वविद्यालय
3. ✘ उस्मानिया विश्वविद्यालय
4. ✘ दिल्ली विश्वविद्यालय

Question Number : 179 Question Id : 7368156847 Question Type : MCQ Option Shuffling : Yes Display Question Number : Yes  
Single Line Question Option : No Option Orientation : Vertical

Correct : 1 Wrong : 0.25

Who is the founder of AAM AADMI Party?

Options :

1. ✘ Nitish Kumar
2. ✔ Arvind Kejriwal
3. ✘ Anna Hazare
4. ✘ Kiran Bedi

Question Number : 179 Question Id : 7368156847 Question Type : MCQ Option Shuffling : Yes Display Question Number : Yes  
Single Line Question Option : No Option Orientation : Vertical

Correct : 1 Wrong : 0.25

आम आदमी पार्टी के संस्थापक कौन हैं?

Options :

1. ✘ नीतीश कुमार
2. ✔ अरविंद केजरीवाल
3. ✘ अन्ना हजारे
4. ✘ किरण बेदी

Question Number : 180 Question Id : 7368156848 Question Type : MCQ Option Shuffling : Yes Display Question Number : Yes  
Single Line Question Option : No Option Orientation : Vertical

Correct : 1 Wrong : 0.25

Which country will be hosting Under-17 FIFA World Cup in 2017?

Options :

1. ✔ India
2. ✘ Germany
3. ✘ Spain
4. ✘ Brazil

Question Number : 180 Question Id : 7368156848 Question Type : MCQ Option Shuffling : Yes Display Question Number : Yes  
Single Line Question Option : No Option Orientation : Vertical

Correct : 1 Wrong : 0.25

वर्ष 2017 में अंडर-17 फीफा विश्व कप की मेजबानी कौन सा देश करेगा?

Options :

1. ✓ भारत
2. ✗ जर्मनी
3. ✗ स्पेन
4. ✗ ब्राजील

Question Number : 181 Question Id : 7368156849 Question Type : MCQ Option Shuffling : Yes Display Question Number : Yes  
Single Line Question Option : No Option Orientation : Vertical

Correct : 1 Wrong : 0.25

Under which five year plan was Rourkela Steel Plant founded?

Options :

1. ✗ First
2. ✓ Second
3. ✗ Third
4. ✗ Fourth

Question Number : 181 Question Id : 7368156849 Question Type : MCQ Option Shuffling : Yes Display Question Number : Yes  
Single Line Question Option : No Option Orientation : Vertical

Correct : 1 Wrong : 0.25

किस पंचवर्षीय योजना के तहत राउरकेला इस्पात संयंत्र की स्थापना हुई थी?

Options :

1. ✗ पहली
2. ✓ दूसरी
3. ✗ तीसरी
4. ✗ चौथी

Question Number : 182 Question Id : 7368156850 Question Type : MCQ Option Shuffling : Yes Display Question Number : Yes  
Single Line Question Option : No Option Orientation : Vertical

Correct : 1 Wrong : 0.25

What kind of economy is adopted by India?

Options :

1. ✓ Mixed Economy
2. ✗ Socialist Economy
3. ✗ Gandhian Economy
4. ✗ Free Economy

Question Number : 182 Question Id : 7368156850 Question Type : MCQ Option Shuffling : Yes Display Question Number : Yes  
Single Line Question Option : No Option Orientation : Vertical

Correct : 1 Wrong : 0.25

भारत द्वारा किस प्रकार की अर्थव्यवस्था अपनाई गई है?

Options :

1. ✓ मिश्रित अर्थव्यवस्था
2. ✗ समाजवादी अर्थव्यवस्था
3. ✗ गांधीवादी अर्थव्यवस्था
4. ✗ मुक्त अर्थव्यवस्था

Question Number : 183 Question Id : 7368156851 Question Type : MCQ Option Shuffling : Yes Display Question Number : Yes Single Line Question Option : No Option Orientation : Vertical

Correct : 1 Wrong : 0.25

Imperial Bank of India after nationalization became

Options :

1. ✗ Canara Bank
2. ✗ Oriental Bank of Commerce
3. ✓ State Bank of India
4. ✗ Bank of India

Question Number : 183 Question Id : 7368156851 Question Type : MCQ Option Shuffling : Yes Display Question Number : Yes Single Line Question Option : No Option Orientation : Vertical

Correct : 1 Wrong : 0.25

राष्ट्रीयकरण के बाद इंपीरियल बैंक ऑफ इंडिया कौन सा बैंक बना?

Options :

1. ✗ कैनरा बैंक
2. ✗ ओरिएंटल बैंक ऑफ कॉमर्स
3. ✓ भारतीय स्टेट बैंक
4. ✗ बैंक ऑफ इंडिया

Question Number : 184 Question Id : 7368156852 Question Type : MCQ Option Shuffling : Yes Display Question Number : Yes Single Line Question Option : No Option Orientation : Vertical

Correct : 1 Wrong : 0.25

Which one of the following tax is not levied by the Central Government?

Options :

1. ✓ Professional tax
2. ✗ Wealth Tax
3. ✗ Income Tax
4. ✗ Excise duty

Question Number : 184 Question Id : 7368156852 Question Type : MCQ Option Shuffling : Yes Display Question Number : Yes Single Line Question Option : No Option Orientation : Vertical

Correct : 1 Wrong : 0.25

निम्नलिखित में से कौन सा कर केन्द्र सरकार द्वारा नहीं लगाया जाता है?



Options :

1. ✓ प्रोफेशनल टैक्स
2. ✗ संपत्ति कर
3. ✗ आय कर
4. ✗ उत्पाद शुल्क

Question Number : 185 Question Id : 7368156853 Question Type : MCQ Option Shuffling : Yes Display Question Number : Yes  
Single Line Question Option : No Option Orientation : Vertical

Correct : 1 Wrong : 0.25

Which one of the following State is the poorest in India according to Economic Survey?

Options :

1. ✗ Punjab
2. ✗ Maharashtra
3. ✗ Karnataka
4. ✓ Odisha

Question Number : 185 Question Id : 7368156853 Question Type : MCQ Option Shuffling : Yes Display Question Number : Yes  
Single Line Question Option : No Option Orientation : Vertical

Correct : 1 Wrong : 0.25

आर्थिक सर्वेक्षण के अनुसार निम्नलिखित में से कौन सा राज्य भारत का सबसे गरीब राज्य है?

Options :

1. ✗ पंजाब
2. ✗ महाराष्ट्र
3. ✗ कर्नाटक
4. ✓ ओडिशा

Question Number : 186 Question Id : 7368156854 Question Type : MCQ Option Shuffling : Yes Display Question Number : Yes  
Single Line Question Option : No Option Orientation : Vertical

Correct : 1 Wrong : 0.25

The international airport of Nagpur is named after

Options :

1. ✓ B. R. Ambedkar
2. ✗ Rajiv Gandhi
3. ✗ Indira Gandhi
4. ✗ Chaudhary Charan Singh

Question Number : 186 Question Id : 7368156854 Question Type : MCQ Option Shuffling : Yes Display Question Number : Yes  
Single Line Question Option : No Option Orientation : Vertical

Correct : 1 Wrong : 0.25

नागपुर के अंतरराष्ट्रीय हवाई अड्डे का नाम किसके नाम पर रखा गया है?

Options :

1. ✓ बी. आर. अबडकर
2. ✗ राजीव गांधी
3. ✗ इंदिरा गांधी
4. ✗ चौधरी चरण सिंह

Question Number : 187 Question Id : 7368156855 Question Type : MCQ Option Shuffling : Yes Display Question Number : Yes  
Single Line Question Option : No Option Orientation : Vertical

Correct : 1 Wrong : 0.25

Which one of the following is not the cropping season in India?

Options :

1. ✗ Zaid
2. ✗ Rabi
3. ✗ Kharif
4. ✓ Hudhudh

Question Number : 187 Question Id : 7368156855 Question Type : MCQ Option Shuffling : Yes Display Question Number : Yes  
Single Line Question Option : No Option Orientation : Vertical

Correct : 1 Wrong : 0.25

भारत में निम्नलिखित में से कौन सा मौसम फसली मौसम नहीं है?

Options :

1. ✗ हमदानी (Zaid)
2. ✗ रबी (Rabi)
3. ✗ खरीफ (Kharif)
4. ✓ हुडहुड (Hudhudh)

Question Number : 188 Question Id : 7368156856 Question Type : MCQ Option Shuffling : Yes Display Question Number : Yes  
Single Line Question Option : No Option Orientation : Vertical

Correct : 1 Wrong : 0.25

The full form of ICAR, a research center in India is?

Options :

1. ✓ Indian Council of Agricultural Research
2. ✗ Indian Council of Aviation Research
3. ✗ Indian Cultivation and Agriculture Research
4. ✗ Indian Council of Agronomy Research

Question Number : 188 Question Id : 7368156856 Question Type : MCQ Option Shuffling : Yes Display Question Number : Yes  
Single Line Question Option : No Option Orientation : Vertical

Correct : 1 Wrong : 0.25

भारत में शोध केंद्र आईसीएआर (ICAR) का पूरा नाम क्या है?

Options :

1. ✓ भारतीय कृषि अनुसंधान परिषद (Indian Council of Agricultural Research)

2. ✘ विमानन अनुसंधान इंडियन काउंसिल (Indian Council of Aviation Research)
3. ✘ भारतीय खेती और कृषि अनुसंधान (Indian Cultivation and Agriculture Research)
4. ✘ भारतीय कृषि विज्ञान अनुसंधान (Indian Council of Agronomy Research)

Question Number : 189 Question Id : 7368156857 Question Type : MCQ Option Shuffling : Yes Display Question Number : Yes  
Single Line Question Option : No Option Orientation : Vertical

Correct : 1 Wrong : 0.25

Which Indian state is not a part of the 'Seven Sisters'?

Options :

1. ✓ Manipur
2. ✘ West Bengal
3. ✘ Nagaland
4. ✘ Sikkim

Note: For this question, discrepancy is found in question/answer. Full Marks is being awarded to all candidates.

Question Number : 189 Question Id : 7368156857 Question Type : MCQ Option Shuffling : Yes Display Question Number : Yes  
Single Line Question Option : No Option Orientation : Vertical

Correct : 1 Wrong : 0.25

कौन सा भारतीय राज्य 'सात बहनों' (Seven Sisters) का हिस्सा नहीं है?

Options :

1. ✓ मणिपुर
2. ✘ पश्चिम बंगाल
3. ✘ नगालैंड
4. ✘ सिक्किम

Note: For this question, discrepancy is found in question/answer. Full Marks is being awarded to all candidates.

Question Number : 190 Question Id : 7368156858 Question Type : MCQ Option Shuffling : Yes Display Question Number : Yes  
Single Line Question Option : No Option Orientation : Vertical

Correct : 1 Wrong : 0.25

The famous monument 'Gol Gumbaz' is located in?

Options :

1. ✓ Karnataka
2. ✘ Uttar Pradesh
3. ✘ Maharashtra
4. ✘ Madhya Pradesh

Question Number : 190 Question Id : 7368156858 Question Type : MCQ Option Shuffling : Yes Display Question Number : Yes  
Single Line Question Option : No Option Orientation : Vertical

Correct : 1 Wrong : 0.25

प्रसिद्ध स्मारक 'गोल गुम्बज' कहाँ पर स्थित है?

Options :

1. ✓ कर्नाटक



2. ✘ उत्तर प्रदेश
3. ✘ महाराष्ट्र
4. ✘ मध्य प्रदेश

Question Number : 191 Question Id : 7368156859 Question Type : MCQ Option Shuffling : Yes Display Question Number : Yes  
Single Line Question Option : No Option Orientation : Vertical

Correct : 1 Wrong : 0.25

Who among the following shifted the capital from Calcutta to Delhi?

Options :

1. ✔ Lord Hardinge
2. ✘ Lord Dalhousie
3. ✘ Lord Canning
4. ✘ Lord Curzon

Question Number : 191 Question Id : 7368156859 Question Type : MCQ Option Shuffling : Yes Display Question Number : Yes  
Single Line Question Option : No Option Orientation : Vertical

Correct : 1 Wrong : 0.25

निम्नलिखित में से किसने राजधानी को कलकत्ता से दिल्ली स्थानांतरित किया था?

Options :

1. ✔ लॉर्ड हार्डिंग
2. ✘ लॉर्ड डलहौजी
3. ✘ लॉर्ड कैनिंग
4. ✘ लॉर्ड कर्जन

Question Number : 192 Question Id : 7368156860 Question Type : MCQ Option Shuffling : Yes Display Question Number : Yes  
Single Line Question Option : No Option Orientation : Vertical

Correct : 1 Wrong : 0.25

'Quit India' movement was started in the year?

Options :

1. ✘ 1928
2. ✘ 1937
3. ✔ 1942
4. ✘ 1940

Question Number : 192 Question Id : 7368156860 Question Type : MCQ Option Shuffling : Yes Display Question Number : Yes  
Single Line Question Option : No Option Orientation : Vertical

Correct : 1 Wrong : 0.25

'भारत छोड़ो' आंदोलन किस साल में शुरू हुआ था?

Options :

1. ✘ 1928
2. ✘ 1937
3. ✔ 1942

4. ✘ 1940

Question Number : 193 Question Id : 7368156861 Question Type : MCQ Option Shuffling : Yes Display Question Number : Yes  
Single Line Question Option : No Option Orientation : Vertical

Correct : 1 Wrong : 0.25

Who started the 'Home Rule' Movement?

Options :

1. ✘ Gopal Krishna Gokhale
2. ✘ Bhagat Singh
3. ✘ Lokmanya Tilak
4. ✔ Annie Besant

Question Number : 193 Question Id : 7368156861 Question Type : MCQ Option Shuffling : Yes Display Question Number : Yes  
Single Line Question Option : No Option Orientation : Vertical

Correct : 1 Wrong : 0.25

'स्वराज' आंदोलन किसने शुरू किया था?

Options :

1. ✘ गोपाल कृष्ण गोखले
2. ✘ भगत सिंह
3. ✘ लोकमान्य तिलक
4. ✔ एनी बेसेंट

Question Number : 194 Question Id : 7368156862 Question Type : MCQ Option Shuffling : Yes Display Question Number : Yes  
Single Line Question Option : No Option Orientation : Vertical

Correct : 1 Wrong : 0.25

Who defeated Humayun in the battle of Kannauj?

Options :

1. ✘ Jahangir
2. ✘ Akbar
3. ✔ Sher Shah Suri
4. ✘ Sikander Shah

Question Number : 194 Question Id : 7368156862 Question Type : MCQ Option Shuffling : Yes Display Question Number : Yes  
Single Line Question Option : No Option Orientation : Vertical

Correct : 1 Wrong : 0.25

कन्नौज की लड़ाई में हुमायूँ को किसने हराया था?

Options :

1. ✘ जहांगीर
2. ✘ अकबर
3. ✔ शेर शाह सुरी
4. ✘ सिकन्दर शाह

Question Number : 195 Question Id : 7368156863 Question Type : MCQ Option Shuffling : Yes Display Question Number : Yes  
Single Line Question Option : No Option Orientation : Vertical

Correct : 1 Wrong : 0.25

Taj Mahal was built in the memory of?

Options :

1. ✘ Gulbadan Begum
2. ✔ Mumtaz Begum
3. ✘ Noorjahan Begum
4. ✘ Padshah Begum

Question Number : 195 Question Id : 7368156863 Question Type : MCQ Option Shuffling : Yes Display Question Number : Yes  
Single Line Question Option : No Option Orientation : Vertical

Correct : 1 Wrong : 0.25

ताजमहल किसकी याद में बनाया गया था?

Options :

1. ✘ गुलबदन बेगम
2. ✔ मुमताज बेगम
3. ✘ नूरजहाँ बेगम
4. ✘ पदशाह बेगम

Question Number : 196 Question Id : 7368156864 Question Type : MCQ Option Shuffling : Yes Display Question Number : Yes  
Single Line Question Option : No Option Orientation : Vertical

Correct : 1 Wrong : 0.25

With which of the following games is the term 'ace' associated?

Options :

1. ✘ Foot ball
2. ✘ Cricket
3. ✔ Lawn Tennis
4. ✘ Rugby

Question Number : 196 Question Id : 7368156864 Question Type : MCQ Option Shuffling : Yes Display Question Number : Yes  
Single Line Question Option : No Option Orientation : Vertical

Correct : 1 Wrong : 0.25

'ऐस' (ace) शब्द निम्नलिखित खेलों में से किसके साथ जुड़ा हुआ है?

Options :

1. ✘ फुटबॉल
2. ✘ क्रिकेट
3. ✔ लॉन टेनिस
4. ✘ रग्बी



Question Number : 197 Question Id : 7368156865 Question Type : MCQ Option Shuffling : Yes Display Question Number : Yes  
Single Line Question Option : No Option Orientation : Vertical

Correct : 1 Wrong : 0.25

'(Corbillon Cup)' is associated with which of the following game?

Options :

1. ✓ Table Tennis
2. ✗ Lawn Tennis
3. ✗ Hockey
4. ✗ Badminton

Question Number : 197 Question Id : 7368156865 Question Type : MCQ Option Shuffling : Yes Display Question Number : Yes  
Single Line Question Option : No Option Orientation : Vertical

Correct : 1 Wrong : 0.25

'कोर्बिलोन कप' (Corbillon Cup) किस खेल के साथ जुड़ा हुआ है?

Options :

1. ✓ टेबल टेनिस
2. ✗ लॉन टेनिस
3. ✗ हॉकी
4. ✗ बैडमिंटन

Question Number : 198 Question Id : 7368156866 Question Type : MCQ Option Shuffling : Yes Display Question Number : Yes  
Single Line Question Option : No Option Orientation : Vertical

Correct : 1 Wrong : 0.25

Who among the following has never been a captain for Indian cricket team?

Options :

1. ✓ Navjoth Singh Sidhu
2. ✗ Mansoor Ali Khan Pataudi
3. ✗ Kapil Dev
4. ✗ Azharuddin

Question Number : 198 Question Id : 7368156866 Question Type : MCQ Option Shuffling : Yes Display Question Number : Yes  
Single Line Question Option : No Option Orientation : Vertical

Correct : 1 Wrong : 0.25

निम्नलिखित में से कौन भारतीय क्रिकेट टीम का कप्तान कभी नहीं रहा है?

Options :

1. ✓ नवजोत सिंह सिद्धू
2. ✗ मंसूर अली खान पटौदी
3. ✗ कपिल देव
4. ✗ अजहरुद्दीन

Question Number : 199 Question Id : 7368156867 Question Type : MCQ Option Shuffling : Yes Display Question Number : Yes  
Single Line Question Option : No Option Orientation : Vertical

Correct : 1 Wrong : 0.25

Who among the following is not an Olympic medal winner?

Options :

1. ✓ Gutta Jwala
2. ✗ Mary Kom
3. ✗ K. Malleshwari
4. ✗ Abhinav Bindra

Question Number : 199 Question Id : 7368156867 Question Type : MCQ Option Shuffling : Yes Display Question Number : Yes  
Single Line Question Option : No Option Orientation : Vertical

Correct : 1 Wrong : 0.25

निम्नलिखित में से कौन ओलंपिक पदक विजेता नहीं है?

Options :

1. ✓ गुट्टा ज्वाला
2. ✗ मैरी कॉम
3. ✗ के. मल्लेश्वरी
4. ✗ अभिनव बिंद्रा

Question Number : 200 Question Id : 7368156868 Question Type : MCQ Option Shuffling : Yes Display Question Number : Yes  
Single Line Question Option : No Option Orientation : Vertical

Correct : 1 Wrong : 0.25

Where was 2014 Hockey world cup held?

Options :

1. ✗ India
2. ✓ Netherlands
3. ✗ England
4. ✗ Switzerland

Question Number : 200 Question Id : 7368156868 Question Type : MCQ Option Shuffling : Yes Display Question Number : Yes  
Single Line Question Option : No Option Orientation : Vertical

Correct : 1 Wrong : 0.25

2014 हॉकी विश्व कप कहाँ आयोजित किया गया था?

Options :

1. ✗ भारत
2. ✓ नीदरलैंड्स
3. ✗ इंग्लैंड
4. ✗ स्विट्जरलैंड