



Join Telegram More Update Note: All previous year Exam paper provides Question Paper Preview

Notations :

- Options shown in green color and with ✓ icon are correct.
- Options shown in red color and with ✗ icon are incorrect.

Question Paper Name: Upper Division Clerks Shift 1
Subject Name: UPPER DIVISION CLERK UDC
Creation Date: 2016-03-18 14:00:17
Duration: 120
Total Marks: 200
Display Marks: Yes

Upper Division Clerks Shift 1

Group Number : 1
Group Id : 73681524
Group Maximum Duration : 0
Group Minimum Duration : 120
Revisit allowed for view? : No
Revisit allowed for edit? : No
Break time: 0
Mandatory Break time: No
Group Marks: 200

Numerical Ability

Section Id : 73681591
Section Number : 1
Section type : Online
Mandatory or Optional: Mandatory
Number of Questions: 50
Number of Questions to be attempted: 50
Section Marks: 50
Display Number Panel: Yes
Group All Questions: No

Sub-Section Number: 1
Sub-Section Id: 736815137
Question Shuffling Allowed : Yes

Question Number : 1 Question Id : 7368154647 Question Type : MCQ Option Shuffling : Yes Display Question Number : Yes Single Line Question Option : No Option Orientation : Vertical

Correct : 1 Wrong : 0.25

Convert 33 into a binary number.

Options :

- ✓ 100001

visit this website studytosuccess.in

2. ✘ 110011

3. ✘ 100110

4. ✘ 110110

Question Number : 1 Question Id : 7368154647 Question Type : MCQ Option Shuffling : Yes Display Question Number : Yes
Single Line Question Option : No Option Orientation : Vertical

Correct : 1 Wrong : 0.25

33 को बाइनरी संख्या में परिवर्तित करें।

Options :

1. ✔ 100001

2. ✘ 110011

3. ✘ 100110

4. ✘ 110110

Question Number : 2 Question Id : 7368154648 Question Type : MCQ Option Shuffling : Yes Display Question Number : Yes
Single Line Question Option : No Option Orientation : Vertical

Correct : 1 Wrong : 0.25

The number of prime factors in $(15)^{21} \times (4)^{13} \times (6)^{12}$ is:

Options :

1. ✘ 86

2. ✘ 85

3. ✔ 92

4. ✘ 90

Question Number : 2 Question Id : 7368154648 Question Type : MCQ Option Shuffling : Yes Display Question Number : Yes
Single Line Question Option : No Option Orientation : Vertical

Correct : 1 Wrong : 0.25

$(15)^{21} \times (4)^{13} \times (6)^{12}$ में मुख्य कारकों (prime factors) की संख्या है:

Options :

1. ✘ 86

2. ✘ 85

3. ✔ 92

4. ✘ 90

Question Number : 3 Question Id : 7368154649 Question Type : MCQ Option Shuffling : Yes Display Question Number : Yes
Single Line Question Option : No Option Orientation : Vertical

Correct : 1 Wrong : 0.25

What least value must be assigned to * so that the number 2361*48 is divisible by 9?

Options :

1. ✘ 4

2. ✔ 3

3. ✘ 9

4. ✘ 2

Question Number : 3 Question Id : 7368154649 Question Type : MCQ Option Shuffling : Yes Display Question Number : Yes
Single Line Question Option : No Option Orientation : Vertical

Correct : 1 Wrong : 0.25

* को कौन सा न्यूनतम मान दिया जाना चाहिए ताकि संख्या $2,361 \times 48, 9$ से विभाज्य हो?

Options :

1. ✘ 4

2. ✔ 3

3. ✘ 9

4. ✘ 2

Question Number : 4 Question Id : 7368154650 Question Type : MCQ Option Shuffling : Yes Display Question Number : Yes
Single Line Question Option : No Option Orientation : Vertical

Correct : 1 Wrong : 0.25

Compute: $123 \times 999 + 123$.

Options :

1. ✘ 123999

2. ✘ 246999

3. ✘ 246000

4. ✔ 123000

Question Number : 4 Question Id : 7368154650 Question Type : MCQ Option Shuffling : Yes Display Question Number : Yes
Single Line Question Option : No Option Orientation : Vertical

Correct : 1 Wrong : 0.25

गणना करें: $123 \times 999 + 123$

Options :

1. ✘ 123999

2. ✘ 246999

3. ✘ 246000

4. ✔ 123000

Question Number : 5 Question Id : 7368154651 Question Type : MCQ Option Shuffling : Yes Display Question Number : Yes
Single Line Question Option : No Option Orientation : Vertical

Correct : 1 Wrong : 0.25

Find the units digit in $(245)^{205} + (141)^{205}$

Options :

1. ✔ 6

2. ✘ 5

3. ✘ 1

4. ✘ 0

Question Number : 5 Question Id : 7368154651 Question Type : MCQ Option Shuffling : Yes Display Question Number : Yes
Single Line Question Option : No Option Orientation : Vertical

Correct : 1 Wrong : 0.25

$(245)^{205} + (141)^{205}$ में इकाइयों के अंक खोजें।

Options :

1. ✓ 6
2. ✗ 5
3. ✗ 1
4. ✗ 0

Question Number : 6 Question Id : 7368154652 Question Type : MCQ Option Shuffling : Yes Display Question Number : Yes
Single Line Question Option : No Option Orientation : Vertical

Correct : 1 Wrong : 0.25

Compute: $123 \times 625 + 625$.

Options :

1. ✗ 77621
2. ✗ 77654
3. ✗ 76875
4. ✓ 77500

Question Number : 6 Question Id : 7368154652 Question Type : MCQ Option Shuffling : Yes Display Question Number : Yes
Single Line Question Option : No Option Orientation : Vertical

Correct : 1 Wrong : 0.25

गणना करें: $123 \times 625 + 625$

Options :

1. ✗ 77621
2. ✗ 77654
3. ✗ 76875
4. ✓ 77500

Question Number : 7 Question Id : 7368154653 Question Type : MCQ Option Shuffling : Yes Display Question Number : Yes
Single Line Question Option : No Option Orientation : Vertical

Correct : 1 Wrong : 0.25

Hasan studies for $5\frac{1}{5}$ hours daily. He devotes $2\frac{1}{2}$ hours of his time for Science. How much time does he devote for other subjects?

Options :

1. ✗ $3\frac{1}{2}$ hrs
2. ✓ $2\frac{7}{10}$ hrs
3. ✗ $2\frac{3}{10}$ hrs
4. ✗ $3\frac{7}{10}$ hrs

Question Number : 7 Question Id : 7368154653 Question Type : MCQ Option Shuffling : Yes Display Question Number : Yes
Single Line Question Option : No Option Orientation : Vertical

Correct : 1 Wrong : 0.25

हसन प्रतिदिन $5\frac{1}{5}$ घंटों तक अध्ययन करता है। यदि वह अपने समय के $2\frac{1}{2}$ घंटे विज्ञान को देता है, तो वह अन्य विषयों को कितना समय देता है?

Options :

1. ✘ $3\frac{1}{2}$ घंटे
2. ✔ $2\frac{7}{10}$ घंटे
3. ✘ $2\frac{3}{10}$ घंटे
4. ✘ $3\frac{7}{10}$ घंटे

Question Number : 8 Question Id : 7368154654 Question Type : MCQ Option Shuffling : Yes Display Question Number : Yes
Single Line Question Option : No Option Orientation : Vertical

Correct : 1 Wrong : 0.25

Raj and Suraj together bought a water bottle that contained 2 litres of water. Raj consumed $\frac{1}{4}$ of the water. Remaining water was consumed by Suraj. Find the amount of water consumed by Suraj in litres.

Options :

1. ✘ 0.5L
2. ✔ 1.5L
3. ✘ 2L
4. ✘ 2.5L

Question Number : 8 Question Id : 7368154654 Question Type : MCQ Option Shuffling : Yes Display Question Number : Yes
Single Line Question Option : No Option Orientation : Vertical

Correct : 1 Wrong : 0.25

राज और सूरज ने एक साथ पानी की एक बोतल खरीदी जिसमें 2 लीटर पानी था। राज ने $\frac{1}{4}$ हिस्सा पानी पिया। बाकी का पानी सूरज ने पिया। सूरज द्वारा पिए गए पानी की मात्रा लीटर में करें।

Options :

1. ✘ 0.5 लीटर
2. ✔ 1.5 लीटर
3. ✘ 2 लीटर
4. ✘ 2.5 लीटर

Question Number : 9 Question Id : 7368154655 Question Type : MCQ Option Shuffling : Yes Display Question Number : Yes
Single Line Question Option : No Option Orientation : Vertical

Correct : 1 Wrong : 0.25

A, B, C and D finished coloring a picture in $\frac{3}{4}$ hour, $\frac{7}{12}$ hour, $\frac{5}{8}$ hour and $\frac{6}{7}$ hour respectively. Who among the following finished their coloring first?

Options :

1. ✘ C
2. ✘ A
3. ✔ B
4. ✘ D

Question Number : 9 Question Id : 7368154655 Question Type : MCQ Option Shuffling : Yes Display Question Number : Yes Single Line Question Option : No Option Orientation : Vertical

Correct : 1 Wrong : 0.25

A, B, C और D ने क्रमशः $\frac{3}{4}$ घंटे, $\frac{7}{12}$ घंटे, $\frac{5}{8}$ घंटे और $\frac{6}{7}$ घंटे में तस्वीर में रंग भरने का कार्य समाप्त किया। निम्नलिखित में से किसने सबसे पहले रंग भरने का कार्य समाप्त किया?

Options :

1. ✘ C
2. ✘ A
3. ✔ B
4. ✘ D

Question Number : 10 Question Id : 7368154656 Question Type : MCQ Option Shuffling : Yes Display Question Number : Yes Single Line Question Option : No Option Orientation : Vertical

Correct : 1 Wrong : 0.25

Which among the following is the largest?

$\frac{3}{2}$, $\frac{7}{3}$, $\frac{5}{4}$, $\frac{7}{2}$

Options :

1. ✔ $\frac{7}{2}$
2. ✘ $\frac{3}{2}$
3. ✘ $\frac{7}{3}$
4. ✘ $\frac{5}{4}$

Question Number : 10 Question Id : 7368154656 Question Type : MCQ Option Shuffling : Yes Display Question Number : Yes Single Line Question Option : No Option Orientation : Vertical

Correct : 1 Wrong : 0.25

निम्नलिखित में से कौन सी संख्या सबसे बड़ी है?

$$\frac{3}{2}, \frac{7}{3}, \frac{5}{4}, \frac{7}{2}$$

Options :

1. $\frac{7}{2}$

2. $\frac{3}{2}$

3. $\frac{7}{3}$

4. $\frac{5}{4}$

Question Number : 11 Question Id : 7368154657 Question Type : MCQ Option Shuffling : Yes Display Question Number : Yes
Single Line Question Option : No Option Orientation : Vertical

Correct : 1 Wrong : 0.25

The difference of two numbers is 10 and one-fifth of their sum is 8.

Find the smallest number.

Options :

1. 35

2. 45

3. 28

4. 15

Question Number : 11 Question Id : 7368154657 Question Type : MCQ Option Shuffling : Yes Display Question Number : Yes
Single Line Question Option : No Option Orientation : Vertical

Correct : 1 Wrong : 0.25

दो अंकों का अंतर 10 और उनके योग का $\frac{1}{5}$ वा हिस्सा 8 है। सबसे छोटी संख्या पता करें।

Options :

1. 35

2. 45

3. 28

4. 15

Question Number : 12 Question Id : 7368154658 Question Type : MCQ Option Shuffling : Yes Display Question Number : Yes
Single Line Question Option : No Option Orientation : Vertical

Correct : 1 Wrong : 0.25

The difference between a number and its three-fifth is 26. What is the number?

Options :

1. 30

2. 65

3. ✘ 69

4. ✘ 39

Question Number : 12 Question Id : 7368154658 Question Type : MCQ Option Shuffling : Yes Display Question Number : Yes
Single Line Question Option : No Option Orientation : Vertical

Correct : 1 Wrong : 0.25

एक संख्या और उसके $3/5$ के बीच का अंतर 26 है। संख्या क्या है?

Options :

1. ✘ 30

2. ✔ 65

3. ✘ 69

4. ✘ 39

Question Number : 13 Question Id : 7368154659 Question Type : MCQ Option Shuffling : Yes Display Question Number : Yes
Single Line Question Option : No Option Orientation : Vertical

Correct : 1 Wrong : 0.25

Find the value of $(-2)^5 \times (2)^{-5} \times (3)^3$

Options :

1. ✘ $(2)^{25} \times (3)^3$

2. ✘ 27

3. ✔ -27

4. ✘ -108

Question Number : 13 Question Id : 7368154659 Question Type : MCQ Option Shuffling : Yes Display Question Number : Yes
Single Line Question Option : No Option Orientation : Vertical

Correct : 1 Wrong : 0.25

$(-2)^5 \times (2)^{-5} \times (3)^3$ का मान पता करें।

Options :

1. ✘ $(2)^{25} \times (3)^3$

2. ✘ 27

3. ✔ -27

4. ✘ -108

Question Number : 14 Question Id : 7368154660 Question Type : MCQ Option Shuffling : Yes Display Question Number : Yes
Single Line Question Option : No Option Orientation : Vertical

Correct : 1 Wrong : 0.25

If $78X3-3Y56=4367$, then which of the following should come in place of X?

Options :

1. ✘ 5

2. ✘ 6

3. ✔ 2

4. ✖ 3

Question Number : 14 Question Id : 7368154660 Question Type : MCQ Option Shuffling : Yes Display Question Number : Yes
Single Line Question Option : No Option Orientation : Vertical

Correct : 1 Wrong : 0.25

यदि $78X3-3Y56 = 4367$ है, तो निम्नलिखित में से X के स्थान पर क्या आना चाहिए?

Options :

1. ✖ 5

2. ✖ 6

3. ✔ 2

4. ✖ 3

Question Number : 15 Question Id : 7368154661 Question Type : MCQ Option Shuffling : Yes Display Question Number : Yes
Single Line Question Option : No Option Orientation : Vertical

Correct : 1 Wrong : 0.25

Solve :
$$\frac{(359+256)^2 + (359-256)^2}{359 \times 359 + 256 \times 256}$$

Options :

1. ✔ 2

2. ✖ 615

3. ✖ 516

4. ✖ 1089

Question Number : 15 Question Id : 7368154661 Question Type : MCQ Option Shuffling : Yes Display Question Number : Yes
Single Line Question Option : No Option Orientation : Vertical

Correct : 1 Wrong : 0.25

हल करें:
$$\frac{(359+256)^2 + (359-256)^2}{359 \times 359 + 256 \times 256}$$

Options :

1. ✔ 2

2. ✖ 615

3. ✖ 516

4. ✖ 1089

Question Number : 16 Question Id : 7368154662 Question Type : MCQ Option Shuffling : Yes Display Question Number : Yes
Single Line Question Option : No Option Orientation : Vertical

Correct : 1 Wrong : 0.25

The present salary of Krishna is Rs.3500. This will be increased by 10% in the next year. What will be the increased salary of Krishna?

Options :

1. ✖ Rs. 3900

2. ✔ Rs. 3850

3. ✘ Rs.4000

4. ✘ Rs.3950

Question Number : 16 Question Id : 7368154662 Question Type : MCQ Option Shuffling : Yes Display Question Number : Yes
Single Line Question Option : No Option Orientation : Vertical

Correct : 1 Wrong : 0.25

कृष्णा का वर्तमान वेतन 3500 रुपये है। अगले वर्ष इसमें 10% की वृद्धि होगी। वृद्धि के बाद कृष्णा का बढ़ा हुआ वेतन कितना होगा?

Options :

1. ✘ 3900 रुपये

2. ✔ 3850 रुपये

3. ✘ 4000 रुपये

4. ✘ 3950 रुपये

Question Number : 17 Question Id : 7368154663 Question Type : MCQ Option Shuffling : Yes Display Question Number : Yes
Single Line Question Option : No Option Orientation : Vertical

Correct : 1 Wrong : 0.25

In an examination, 96% of the candidates passed and 500 failed. How many candidates appeared for the examination?

Options :

1. ✘ 13500

2. ✘ 14000

3. ✘ 12000

4. ✔ 12500

Question Number : 17 Question Id : 7368154663 Question Type : MCQ Option Shuffling : Yes Display Question Number : Yes
Single Line Question Option : No Option Orientation : Vertical

Correct : 1 Wrong : 0.25

एक परीक्षा में 96% परीक्षार्थी उत्तीर्ण और 500 अनुत्तीर्ण हुए। परीक्षा में कितने परीक्षार्थी उपस्थित थे?

Options :

1. ✘ 13500

2. ✘ 14000

3. ✘ 12000

4. ✔ 12500

Question Number : 18 Question Id : 7368154664 Question Type : MCQ Option Shuffling : Yes Display Question Number : Yes
Single Line Question Option : No Option Orientation : Vertical

Correct : 1 Wrong : 0.25

What percent of one day is 8 minutes?

Options :

1. ✘ 55%

- 2. ✘ 5.5%
- 3. ✔ 0.55%
- 4. ✘ 2.5%

Question Number : 18 Question Id : 7368154664 Question Type : MCQ Option Shuffling : Yes Display Question Number : Yes
Single Line Question Option : No Option Orientation : Vertical

Correct : 1 Wrong : 0.25

एक दिन का कितना प्रतिशत 8 मिनट होता है?

Options :

- 1. ✘ 55%
- 2. ✘ 5.5%
- 3. ✔ 0.55%
- 4. ✘ 2.5%

Question Number : 19 Question Id : 7368154665 Question Type : MCQ Option Shuffling : Yes Display Question Number : Yes
Single Line Question Option : No Option Orientation : Vertical

Correct : 1 Wrong : 0.25

Express 50 paise:4 rupees in its simplest form.

Options :

- 1. ✔ 1:8
- 2. ✘ 8:1
- 3. ✘ 4:5
- 4. ✘ 5:4

Question Number : 19 Question Id : 7368154665 Question Type : MCQ Option Shuffling : Yes Display Question Number : Yes
Single Line Question Option : No Option Orientation : Vertical

Correct : 1 Wrong : 0.25

50 पैसे : 4 रुपये को इसके सरलतम रूप में दर्शाएँ।

Options :

- 1. ✔ 1:8
- 2. ✘ 8:1
- 3. ✘ 4:5
- 4. ✘ 5:4

Question Number : 20 Question Id : 7368154666 Question Type : MCQ Option Shuffling : Yes Display Question Number : Yes
Single Line Question Option : No Option Orientation : Vertical

Correct : 1 Wrong : 0.25

Two numbers are in ratio 6:5. If 5 is subtracted from each, the ratio becomes 5:4. Find the largest number.

Options :

- 1. ✘ 26
- 2. ✔ 30
- 3. ✘ 24

4. ✘ 20

Question Number : 20 Question Id : 7368154666 Question Type : MCQ Option Shuffling : Yes Display Question Number : Yes
Single Line Question Option : No Option Orientation : Vertical

Correct : 1 Wrong : 0.25

दो अंक 6:5 के अनुपात में हैं। यदि प्रत्येक में से 5 घटाया जाए, तो अनुपात 5:4 हो जाता है। सबसे बड़ी संख्या पता करें।

Options :

1. ✘ 26
2. ✔ 30
3. ✘ 24
4. ✘ 20

Question Number : 21 Question Id : 7368154667 Question Type : MCQ Option Shuffling : Yes Display Question Number : Yes
Single Line Question Option : No Option Orientation : Vertical

Correct : 1 Wrong : 0.25

A bag contains 50paise, 25paise and 10paise coins in the ratio 5:8:3 amounting to Rs.144/-. Find the number of 50paise coins.

Options :

1. ✘ 163
2. ✘ 175
3. ✔ 150
4. ✘ 200

Question Number : 21 Question Id : 7368154667 Question Type : MCQ Option Shuffling : Yes Display Question Number : Yes
Single Line Question Option : No Option Orientation : Vertical

Correct : 1 Wrong : 0.25

एक थैले में 50 पैसे, 25 पैसे और 10 पैसे की सिक्के क्रमशः 5:8:3 के अनुपात में हैं जिनका कुल मान 144/- रुपये है। 50 पैसे के सिक्कों की संख्या पता करें।

Options :

1. ✘ 163
2. ✘ 175
3. ✔ 150
4. ✘ 200

Question Number : 22 Question Id : 7368154668 Question Type : MCQ Option Shuffling : Yes Display Question Number : Yes
Single Line Question Option : No Option Orientation : Vertical

Correct : 1 Wrong : 0.25

Find the average of 205,302,108,403,202.

Options :

1. ✘ 450
2. ✘ 1225

3. ✘ 1220

4. ✔ 244

Question Number : 22 Question Id : 7368154668 Question Type : MCQ Option Shuffling : Yes Display Question Number : Yes
Single Line Question Option : No Option Orientation : Vertical

Correct : 1 Wrong : 0.25

205, 302, 108, 403, 202 का औसत ज्ञात करें।

Options :

1. ✘ 450

2. ✘ 1225

3. ✘ 1220

4. ✔ 244

Question Number : 23 Question Id : 7368154669 Question Type : MCQ Option Shuffling : Yes Display Question Number : Yes
Single Line Question Option : No Option Orientation : Vertical

Correct : 1 Wrong : 0.25

The average of 6 quantities is 7. The average of three of them is 5. What is the average of remaining quantities?

Options :

1. ✔ 9

2. ✘ 15

3. ✘ 42

4. ✘ 30

Question Number : 23 Question Id : 7368154669 Question Type : MCQ Option Shuffling : Yes Display Question Number : Yes
Single Line Question Option : No Option Orientation : Vertical

Correct : 1 Wrong : 0.25

6 संख्याओं का औसत 7 है। इनमें से तीन का औसत 5 है। शेष संख्याओं का औसत कितना होगा?

Options :

1. ✔ 9

2. ✘ 15

3. ✘ 42

4. ✘ 30

Question Number : 24 Question Id : 7368154670 Question Type : MCQ Option Shuffling : Yes Display Question Number : Yes
Single Line Question Option : No Option Orientation : Vertical

Correct : 1 Wrong : 0.25

The average monthly income of P and Q is Rs.6000. The average monthly income of Q and R is Rs.5250 and the average monthly income of P and R is Rs.5500. The monthly income of P is?

Options :

1. ✘ Rs.4500

2. ✘ Rs.3500

3. ✔ Rs.6250

4. ✘ Rs.4800

Question Number : 24 Question Id : 7368154670 Question Type : MCQ Option Shuffling : Yes Display Question Number : Yes
Single Line Question Option : No Option Orientation : Vertical

Correct : 1 Wrong : 0.25

P और Q की औसत मासिक आय 6000 रुपये है। Q और R की औसत मासिक आय 5250 रुपये और P और R की औसत मासिक आय 5500 रुपये है। P की मासिक आय कितनी होगी?

Options :

1. ✘ 4500 रुपये

2. ✘ 3500 रुपये

3. ✔ 6250 रुपये

4. ✘ 4800 रुपये

Question Number : 25 Question Id : 7368154671 Question Type : MCQ Option Shuffling : Yes Display Question Number : Yes
Single Line Question Option : No Option Orientation : Vertical

Correct : 1 Wrong : 0.25

Find the amount at simple interest on Rs. 3200 for 2 years 6 months at 5% per annum.

Options :

1. ✘ Rs. 3500

2. ✔ Rs. 3600

3. ✘ Rs. 3800

4. ✘ Rs. 3900

Question Number : 25 Question Id : 7368154671 Question Type : MCQ Option Shuffling : Yes Display Question Number : Yes
Single Line Question Option : No Option Orientation : Vertical

Correct : 1 Wrong : 0.25

3200 रुपये पर प्रति वर्ष 5% साधारण ब्याज की दर से 2 साल 6 महीने के बाद मिलाने वाली राशि ज्ञात करें।

Options :

1. ✘ 3500 रुपये

2. ✔ 3600 रुपये

3. ✘ 3800 रुपये

4. ✘ 3900 रुपये

Question Number : 26 Question Id : 7368154672 Question Type : MCQ Option Shuffling : Yes Display Question Number : Yes
Single Line Question Option : No Option Orientation : Vertical

Correct : 1 Wrong : 0.25

Simple interest on a certain sum is $\frac{1}{25}$ of the sum. Find the time, if both time and rate percent are numerically equal.

Options :

1. ✘ $1 \frac{1}{2}$ years
2. ✘ $1 \frac{1}{15}$ years
3. ✔ 2 years
4. ✘ $2 \frac{1}{2}$ years

Question Number : 26 Question Id : 7368154672 Question Type : MCQ Option Shuffling : Yes Display Question Number : Yes Single Line Question Option : No Option Orientation : Vertical

Correct : 1 Wrong : 0.25

एक निश्चित राशि पर साधारण ब्याज राशी का $\frac{1}{25}$ है। यदि समय और प्रतिशत दर संख्या के अनुसार एक सामान हैं, तो समय का पता लगाएं।

Options :

1. ✘ $1 \frac{1}{2}$ वर्ष
2. ✘ $1 \frac{1}{15}$ वर्ष
3. ✔ 2 वर्ष
4. ✘ $2 \frac{1}{2}$ वर्ष

Question Number : 27 Question Id : 7368154673 Question Type : MCQ Option Shuffling : Yes Display Question Number : Yes Single Line Question Option : No Option Orientation : Vertical

Correct : 1 Wrong : 0.25

Simple interest for a sum of Rs.3000 for 2 years is Rs.20 more than the simple interest for Rs.2500 for the same duration. Find the rate of interest.

Options :

1. ✔ 2%
2. ✘ 5%
3. ✘ 4%
4. ✘ 3%

Question Number : 27 Question Id : 7368154673 Question Type : MCQ Option Shuffling : Yes Display Question Number : Yes Single Line Question Option : No Option Orientation : Vertical

Correct : 1 Wrong : 0.25

2 साल के लिए 3000 रूपये की राशि पर मिलने वाला साधारण ब्याज, 2500 रूपये पर इसी अवधि के लिए मिलने वाले साधारण ब्याज की तुलना में 20 रूपये से ज्यादा है। ब्याज की दर ज्ञात करें।

Options :

1. ✓ 2%
2. ✗ 5%
3. ✗ 4%
4. ✗ 3%

Question Number : 28 Question Id : 7368154674 Question Type : MCQ Option Shuffling : Yes Display Question Number : Yes
Single Line Question Option : No Option Orientation : Vertical

Correct : 1 Wrong : 0.25

A watch costing Rs.1250 has been sold for Rs.1500. The percentage of profit was?

Options :

1. ✗ 24%
2. ✗ 25%
3. ✗ 21%
4. ✓ 20%

Question Number : 28 Question Id : 7368154674 Question Type : MCQ Option Shuffling : Yes Display Question Number : Yes
Single Line Question Option : No Option Orientation : Vertical

Correct : 1 Wrong : 0.25

रु.1250 की लागत मूल्य वाली घड़ी को रु.1500 में बेचा गया। लाभ का प्रतिशत कितना था?

Options :

1. ✗ 24%
2. ✗ 25%
3. ✗ 21%
4. ✓ 20%

Question Number : 29 Question Id : 7368154675 Question Type : MCQ Option Shuffling : Yes Display Question Number : Yes
Single Line Question Option : No Option Orientation : Vertical

Correct : 1 Wrong : 0.25

Supriya sells a washing machine for Rs.8500. She loses 15% in the bargain. What was the price at which she bought it?

Options :

1. ✗ Rs.12000
2. ✓ Rs.10000
3. ✗ Rs.11000
4. ✗ Rs.10500

Question Number : 29 Question Id : 7368154675 Question Type : MCQ Option Shuffling : Yes Display Question Number : Yes
Single Line Question Option : No Option Orientation : Vertical

Correct : 1 Wrong : 0.25

सुप्रिया ने रु.8500 में एक वाशिंग मशीन बेची। उसे इस सौदे में 15% का नुकसान हुआ। उसने यह वाशिंग मशीन कितने में खरीदी थी?

Options :

1. ✘ ₹.12000
2. ✔ ₹.10000
3. ✘ ₹.11000
4. ✘ ₹.10500

Question Number : 30 Question Id : 7368154676 Question Type : MCQ Option Shuffling : Yes Display Question Number : Yes
Single Line Question Option : No Option Orientation : Vertical

Correct : 1 Wrong : 0.25

Lekhya bought an article for Rs.5844. Due to some defects in it, she had pay Rs.156 to the mechanic for its repair. Then, she sold it for Rs.5700. Find her loss percent.

Options :

1. ✘ 5.5%
2. ✘ 2.46%
3. ✔ 5%
4. ✘ 2.5%

Question Number : 30 Question Id : 7368154676 Question Type : MCQ Option Shuffling : Yes Display Question Number : Yes
Single Line Question Option : No Option Orientation : Vertical

Correct : 1 Wrong : 0.25

लेख्या ने रु.5844 में एक वस्तु खरीदी। इसमें कुछ दोष होने के कारण उसने इसकी मरम्मत के लिए मैकेनिक को रु.156 दिये। फिर उसने इसे रु.5700 में बेच दिया। उसे कितना प्रतिशत नुकसन हुआ?

Options :

1. ✘ 5.5%
2. ✘ 2.46%
3. ✔ 5%
4. ✘ 2.5%

Question Number : 31 Question Id : 7368154677 Question Type : MCQ Option Shuffling : Yes Display Question Number : Yes
Single Line Question Option : No Option Orientation : Vertical

Correct : 1 Wrong : 0.25

An item is sold at Rs.528 by allowing a discount of 12% on its marked price. The marked price of the item is?

Options :

1. ✘ Rs.700
2. ✘ Rs.590
3. ✔ Rs.600
4. ✘ Rs.650

Question Number : 31 Question Id : 7368154677 Question Type : MCQ Option Shuffling : Yes Display Question Number : Yes
Single Line Question Option : No Option Orientation : Vertical

Correct : 1 Wrong : 0.25

एक वस्तु को उस पर अंकित कीमत पर 12% की छूट देकर रु.528 में बेचा गया। वस्तु

पर अंकित कीमत थी?

Options :

1. ✘ रु.700
2. ✘ रु.590
3. ✔ रु.600
4. ✘ रु.650

Question Number : 32 Question Id : 7368154678 Question Type : MCQ Option Shuffling : Yes Display Question Number : Yes
Single Line Question Option : No Option Orientation : Vertical

Correct : 1 Wrong : 0.25

What is a single discount equivalent to a discount series of 12% and 13%?

Options :

1. ✘ 24.5%
2. ✔ 23.44%
3. ✘ 25%
4. ✘ 26%

Question Number : 32 Question Id : 7368154678 Question Type : MCQ Option Shuffling : Yes Display Question Number : Yes
Single Line Question Option : No Option Orientation : Vertical

Correct : 1 Wrong : 0.25

12% और 13% की छूट श्रृंखला के बराबर एकल छूट कितनी है?

Options :

1. ✘ 24.5%
2. ✔ 23.44%
3. ✘ 25%
4. ✘ 26%

Question Number : 33 Question Id : 7368154679 Question Type : MCQ Option Shuffling : Yes Display Question Number : Yes
Single Line Question Option : No Option Orientation : Vertical

Correct : 1 Wrong : 0.25

The marked price of a bicycle is Rs.1150. A shopkeeper allows a discount of 15% and gets a profit of 15%. Find the cost price of the bicycle.

Options :

1. ✔ Rs.850
2. ✘ Rs.1000
3. ✘ Rs.900
4. ✘ Rs.950

Question Number : 33 Question Id : 7368154679 Question Type : MCQ Option Shuffling : Yes Display Question Number : Yes
Single Line Question Option : No Option Orientation : Vertical

Correct : 1 Wrong : 0.25

एक साइकिल पर रु.1150 की कीमत अंकित है। एक दुकानदार इस साइकिल पर 15% की छूट देने पर भी 15% का लाभ कमाता है। साइकिल की लागत मूल्य ज्ञात करें।

Options :

1. ✓ रु.850
2. ✗ रु.1000
3. ✗ रु.900
4. ✗ रु.950

Question Number : 34 Question Id : 7368154680 Question Type : MCQ Option Shuffling : Yes Display Question Number : Yes Single Line Question Option : No Option Orientation : Vertical

Correct : 1 Wrong : 0.25

Study the following table carefully and answer the question that follows.

Trends of Sex Ratio and Child Sex Ratio in India

CENSUS	2011		2001	
	SEX RATIO	CHILD SEX RATIO (0-6years)	SEX RATIO	CHILD SEX RATIO (0-6years)
Kerala	1084	964	1058	960
Puducherry	1037	967	1001	967
Tamil Nadu	996	943	987	942
Mizoram	976	970	935	964
Karnataka	973	948	965	946
Goa	973	942	961	938
Himachal Pradesh	972	909	968	896

Which state is leading with child sex ratio in 2001?

Options :

1. ✗ Goa
2. ✗ Kerala
3. ✓ Puducherry
4. ✗ Mizoram

Question Number : 34 Question Id : 7368154680 Question Type : MCQ Option Shuffling : Yes Display Question Number : Yes Single Line Question Option : No Option Orientation : Vertical

Correct : 1 Wrong : 0.25

Join Telegram More Update Note: All previous year Exam paper provides
नीचे दी गई तालिका का ध्यान से अध्ययन करें और निम्नलिखित सवालों का जवाब दें।

भारत में लिंग अनुपात और बाल लिंग अनुपात का रुझान

जनगणना	2011		2001	
राज्य	लिंग अनुपात	बाल लिंग अनुपात (0-6 वर्ष)	लिंग अनुपात	बाल लिंग अनुपात (0-6 वर्ष)
केरल	1084	964	1058	960
पुडुचेरी	1037	967	1001	967
तमिलनाडु	996	943	987	942
मिजोरम	976	970	935	964
कर्नाटक	973	948	965	946
गोवा	973	942	961	938
हिमाचल प्रदेश	972	909	968	896

सन 2001 में कौन सा राज्य बाल लिंग अनुपात में सबसे आगे है?

Options :

- ✘ गोवा
- ✘ केरल
- ✔ पुडुचेरी
- ✘ मिजोरम

Question Number : 35 Question Id : 7368154681 Question Type : MCQ Option Shuffling : Yes Display Question Number : Yes
Single Line Question Option : No Option Orientation : Vertical

Correct : 1 Wrong : 0.25

Study the following table carefully and answer the question that follows.

Trends of Sex Ratio and Child Sex Ratio in India

CENSUS	2011		2001	
	SEX RATIO	CHILD SEX RATIO (0-6years)	SEX RATIO	CHILD SEX RATIO (0-6years)
Kerala	1084	964	1058	960
Puducherry	1037	967	1001	967
Tamil Nadu	996	943	987	942
Mizoram	976	970	935	964
Karnataka	973	948	965	946
Goa	973	942	961	938
Himachal Pradesh	972	909	968	896

What is the percentage increase in sex ratio in Tamil Nadu?

Options :

- 1. ✘ 9.1%
- 2. ✔ 0.91%
- 3. ✘ 19%
- 4. ✘ 9%

Question Number : 35 Question Id : 7368154681 Question Type : MCQ Option Shuffling : Yes Display Question Number : Yes Single Line Question Option : No Option Orientation : Vertical

Correct : 1 Wrong : 0.25

Join Telegram More Update Note: All previous year Exam paper provides
नीचे दी गई तालिका का ध्यान से अध्ययन करें और निम्नलिखित सवालों का जवाब दें।

भारत में लिंग अनुपात और बाल लिंग अनुपात का रुझान

जनगणना	2011		2001	
	लिंग अनुपात	बाल लिंग अनुपात (0-6 वर्ष)	लिंग अनुपात	बाल लिंग अनुपात (0-6 वर्ष)
केरल	1084	964	1058	960
पुडुचेरी	1037	967	1001	967
तमिलनाडु	996	943	987	942
मिजोरम	976	970	935	964
कर्नाटक	973	948	965	946
गोवा	973	942	961	938
हिमाचल प्रदेश	972	909	968	896

तमिलनाडु में लिंग अनुपात में कितने प्रतिशत की वृद्धि हुई?

Options :

- ✘ 9.1%
- ✔ 0.91%
- ✘ 19%
- ✘ 9%

Question Number : 36 Question Id : 7368154682 Question Type : MCQ Option Shuffling : Yes Display Question Number : Yes
Single Line Question Option : No Option Orientation : Vertical

Correct : 1 Wrong : 0.25

Study the following table carefully and answer the question that follows.

Trends of Sex Ratio and Child Sex Ratio in India

CENSUS	2011		2001	
	SEX RATIO	CHILD SEX RATIO (0-6years)	SEX RATIO	CHILD SEX RATIO (0-6years)
Kerala	1084	964	1058	960
Puducherry	1037	967	1001	967
Tamil Nadu	996	943	987	942
Mizoram	976	970	935	964
Karnataka	973	948	965	946
Goa	973	942	961	938
Himachal Pradesh	972	909	968	896

For which state, the child sex ratio remained unchanged?

Options :

- ✘ Karnataka
- ✘ Tamil Nadu
- ✘ Goa
- ✔ Puducherry

Question Number : 36 Question Id : 7368154682 Question Type : MCQ Option Shuffling : Yes Display Question Number : Yes Single Line Question Option : No Option Orientation : Vertical

Correct : 1 Wrong : 0.25

Join Telegram More Update Note: All previous year Exam paper provides
नीचे दी गई तालिका का ध्यान से अध्ययन करें और निम्नलिखित सवालों का जवाब दें।

भारत में लिंग अनुपात और बाल लिंग अनुपात का रुझान

जनगणना	2011		2001	
राज्य	लिंग अनुपात	बाल लिंग अनुपात (0-6 वर्ष)	लिंग अनुपात	बाल लिंग अनुपात (0-6 वर्ष)
केरल	1084	964	1058	960
पुडुचेरी	1037	967	1001	967
तमिलनाडु	996	943	987	942
मिजोरम	976	970	935	964
कर्नाटक	973	948	965	946
गोवा	973	942	961	938
हिमाचल प्रदेश	972	909	968	896

किस राज्य में बाल लिंग का अनुपात अपरिवर्तित रहा?

Options :

- ✘ कर्नाटक
- ✘ तमिलनाडु
- ✘ गोवा
- ✔ पुडुचेरी

Question Number : 37 Question Id : 7368154683 Question Type : MCQ Option Shuffling : Yes Display Question Number : Yes
Single Line Question Option : No Option Orientation : Vertical

Correct : 1 Wrong : 0.25

Study the following table carefully and answer the question that follows.

Trends of Sex Ratio and Child Sex Ratio in India

CENSUS	2011		2001	
	SEX RATIO	CHILD SEX RATIO (0-6years)	SEX RATIO	CHILD SEX RATIO (0-6years)
Kerala	1084	964	1058	960
Puducherry	1037	967	1001	967
Tamil Nadu	996	943	987	942
Mizoram	976	970	935	964
Karnataka	973	948	965	946
Goa	973	942	961	938
Himachal Pradesh	972	909	968	896

For which states, the sex ratio is same in 2011 census?

Options :

- ✘ Tamil Nadu, Mizoram
- ✘ Goa, Kerala
- ✔ Goa, Karnataka
- ✘ Kerala, Mizoram

Question Number : 37 Question Id : 7368154683 Question Type : MCQ Option Shuffling : Yes Display Question Number : Yes Single Line Question Option : No Option Orientation : Vertical

Correct : 1 Wrong : 0.25

Join Telegram More Update Note: All previous year Exam paper provides
नीचे दी गई तालिका का ध्यान से अध्ययन करें और निम्नलिखित सवालों का जवाब दें।

भारत में लिंग अनुपात और बाल लिंग अनुपात का रुझान

जनगणना	2011		2001	
	लिंग अनुपात	बाल लिंग अनुपात (0-6 वर्ष)	लिंग अनुपात	बाल लिंग अनुपात (0-6 वर्ष)
केरल	1084	964	1058	960
पुडुचेरी	1037	967	1001	967
तमिलनाडु	996	943	987	942
मिजोरम	976	970	935	964
कर्नाटक	973	948	965	946
गोवा	973	942	961	938
हिमाचल प्रदेश	972	909	968	896

किन राज्यों में, 2011 की जनगणना में लिंग अनुपात एक जैसा रहा है?

Options :

- ✘ तमिलनाडु, मिजोरम
- ✘ गोवा, केरल
- ✔ गोवा, कर्नाटक
- ✘ केरल, मिजोरम

Question Number : 38 Question Id : 7368154684 Question Type : MCQ Option Shuffling : Yes Display Question Number : Yes
Single Line Question Option : No Option Orientation : Vertical

Correct : 1 Wrong : 0.25

Study the following table carefully and answer the questions that follow.

Trends of Sex Ratio and Child Sex Ratio in India

CENSUS	2011		2001	
	SEX RATIO	CHILD SEX RATIO (0-6years)	SEX RATIO	CHILD SEX RATIO (0-6years)
Kerala	1084	964	1058	960
Puducherry	1037	967	1001	967
Tamil Nadu	996	943	987	942
Mizoram	976	970	935	964
Karnataka	973	948	965	946
Goa	973	942	961	938
Himachal Pradesh	972	909	968	896

What is the percentage increase in child sex ratio in Karnataka?

Options :

1. ✓ 0.21%
2. ✗ 0.2%
3. ✗ 2%
4. ✗ 12%

Question Number : 38 Question Id : 7368154684 Question Type : MCQ Option Shuffling : Yes Display Question Number : Yes Single Line Question Option : No Option Orientation : Vertical

Correct : 1 Wrong : 0.25

Join Telegram More Update Note: All previous year Exam paper provides
नीचे दी गई तालिका का ध्यान से अध्ययन करें और निम्नलिखित सवालों का जवाब दें।

भारत में लिंग अनुपात और बाल लिंग अनुपात का रुझान

जनगणना	2011		2001	
	लिंग अनुपात	बाल लिंग अनुपात (0-6 वर्ष)	लिंग अनुपात	बाल लिंग अनुपात (0-6 वर्ष)
केरल	1084	964	1058	960
पुडुचेरी	1037	967	1001	967
तमिलनाडु	996	943	987	942
मिजोरम	976	970	935	964
कर्नाटक	973	948	965	946
गोवा	973	942	961	938
हिमाचल प्रदेश	972	909	968	896

कर्नाटक में बाल लिंग अनुपात में प्रतिशत वृद्धि क्या है?

Options :

1. ✓ 0.21%
2. ✗ 0.2%
3. ✗ 2%
4. ✗ 12%

Question Number : 39 Question Id : 7368154685 Question Type : MCQ Option Shuffling : Yes Display Question Number : Yes
Single Line Question Option : No Option Orientation : Vertical

Correct : 1 Wrong : 0.25

The area of a square field is $\frac{1}{4}$ hectare. Find the length of its diagonal in metres.

Options :

1. ✗ 50mts
2. ✓ $50\sqrt{2}$ mts
3. ✗ 40mts
4. ✗ 25mts

Question Number : 39 Question Id : 7368154685 Question Type : MCQ Option Shuffling : Yes Display Question Number : Yes
Single Line Question Option : No Option Orientation : Vertical

Correct : 1 Wrong : 0.25

एक वर्ग क्षेत्र का क्षेत्रफल $\frac{1}{4}$ हेक्टेयर है। इसके विकर्ण की लंबाई मीटर में कितनी होगी?

Options :

visit this website studytosuccess.in

1. ✘ 50 मीटर
2. ✔ 50 $\sqrt{2}$ मीटर
3. ✘ 40 मीटर
4. ✘ 25 मीटर

Question Number : 40 Question Id : 7368154686 Question Type : MCQ Option Shuffling : Yes Display Question Number : Yes
Single Line Question Option : No Option Orientation : Vertical

Correct : 1 Wrong : 0.25

The base of an isosceles triangle is 14cm and its perimeter is 36cm. Find its area.

Options :

1. ✘ $48cm^2$
2. ✘ $84cm^2$
3. ✔ $42\sqrt{2}cm^2$
4. ✘ $42cm^2$

Question Number : 40 Question Id : 7368154686 Question Type : MCQ Option Shuffling : Yes Display Question Number : Yes
Single Line Question Option : No Option Orientation : Vertical

Correct : 1 Wrong : 0.25

एक समद्विबाहु त्रिकोण का आधार 14 से.मी. है और इसकी परिधि 36 से.मी है। इसका क्षेत्रफल ज्ञात करें।

Options :

1. ✘ 48 वर्ग से.मी.
2. ✘ 84 वर्ग से.मी.
3. ✔ $42\sqrt{2}$ वर्ग से.मी.
4. ✘ 42 वर्ग से.मी.

Question Number : 41 Question Id : 7368154687 Question Type : MCQ Option Shuffling : Yes Display Question Number : Yes
Single Line Question Option : No Option Orientation : Vertical

Correct : 1 Wrong : 0.25

The diameter of the wheel of a car is 49cm. How many revolutions will it make to travel 6.16km?

Options :

1. ✔ 4000
2. ✘ 600
3. ✘ 6500
4. ✘ 4500

Question Number : 41 Question Id : 7368154687 Question Type : MCQ Option Shuffling : Yes Display Question Number : Yes
Single Line Question Option : No Option Orientation : Vertical

Correct : 1 Wrong : 0.25

एक कार के पहिया का व्यास 49 से.मी. है। 6.16 किलोमीटर यात्रा पूरी करने के लिए

कितने चक्कर घूमने पड़ेंगे?

Options :

1. ✓ 4000
2. ✗ 600
3. ✗ 6500
4. ✗ 4500

Question Number : 42 Question Id : 7368154688 Question Type : MCQ Option Shuffling : Yes Display Question Number : Yes
Single Line Question Option : No Option Orientation : Vertical

Correct : 1 Wrong : 0.25

A car travels 650km in 12hours and another 850km in 18hours. Find the average speed of the car.

Options :

1. ✗ 52 km/h
2. ✓ 50 km/h
3. ✗ 47 km/h
4. ✗ 48 km/h

Question Number : 42 Question Id : 7368154688 Question Type : MCQ Option Shuffling : Yes Display Question Number : Yes
Single Line Question Option : No Option Orientation : Vertical

Correct : 1 Wrong : 0.25

एक कार 12 घंटे में 650 किलोमीटर और 18 घंटे में अन्य 850 किलोमीटर की यात्रा करती है। कार की औसत गति ज्ञात करें।

Options :

1. ✗ 52 कि.मी./घंटा
2. ✓ 50 कि.मी./घंटा
3. ✗ 47 कि.मी./घंटा
4. ✗ 48 कि.मी./घंटा

Question Number : 43 Question Id : 7368154689 Question Type : MCQ Option Shuffling : Yes Display Question Number : Yes
Single Line Question Option : No Option Orientation : Vertical

Correct : 1 Wrong : 0.25

A vehicle travels at 80km/h. How many meters will it travel in 15minutes?

Options :

1. ✗ 22000 mts
2. ✗ 24000 mts
3. ✗ 25000 mts
4. ✓ 20000 mts

Correct : 1 Wrong : 0.25

एक वाहन 80 कि.मी./घंटा की गति से यात्रा करती है। यह 15 मिनट में कितने मीटर की दूरी तय करेगा?

Options :

1. ✘ 22000 मीटर
2. ✘ 24000 मीटर
3. ✘ 25000 मीटर
4. ✔ 20000 मीटर

Question Number : 44 Question Id : 7368154690 Question Type : MCQ Option Shuffling : Yes Display Question Number : Yes
Single Line Question Option : No Option Orientation : Vertical

Correct : 1 Wrong : 0.25

Aryan can cover a certain distance in 1hr 30min by covering two-third of the distance at 4kmph and the rest at 5kmph. Find the total distance.

Options :

1. ✘ 6.3km
2. ✔ 6.4km
3. ✘ 6.5km
4. ✘ 6.6km

Question Number : 44 Question Id : 7368154690 Question Type : MCQ Option Shuffling : Yes Display Question Number : Yes
Single Line Question Option : No Option Orientation : Vertical

Correct : 1 Wrong : 0.25

आर्यन एक निश्चित दूरी को 1 घंटा 30 मिनट में पूरी करता है जिसमें से दो-तिहाई भाग 4 कि.मी./घंटा की गति से और शेष भाग 5 कि.मी./घंटा की गति से तया करता है। कुल दूरी ज्ञात करें।

Options :

1. ✘ 6.3 किलोमीटर
2. ✔ 6.4 किलोमीटर
3. ✘ 6.5 किलोमीटर
4. ✘ 6.6 किलोमीटर

Question Number : 45 Question Id : 7368154691 Question Type : MCQ Option Shuffling : Yes Display Question Number : Yes
Single Line Question Option : No Option Orientation : Vertical

Correct : 1 Wrong : 0.25

Rani takes 30minutes to reach school from home. Raja takes 45minutes to cover the same distance. Find the ratio of time taken by Rani to the time taken by Raja.

Options :

1. ✘ 3:2

2. ✘ 4:3

3. ✔ 2:3

4. ✘ 1:3

Question Number : 45 Question Id : 7368154691 Question Type : MCQ Option Shuffling : Yes Display Question Number : Yes Single Line Question Option : No Option Orientation : Vertical

Correct : 1 Wrong : 0.25

रानी घर से स्कूल तक पहुंचने के लिए 30 मिनट लेती है। राजा इतनी ही दूरी तय करने के लिए 45 मिनट लेता है। रानी द्वारा और राजा द्वारा लिये गए समय के अनुपात का पता लगाएं।

Options :

1. ✘ 3:2

2. ✘ 4:3

3. ✔ 2:3

4. ✘ 1:3

Question Number : 46 Question Id : 7368154692 Question Type : MCQ Option Shuffling : Yes Display Question Number : Yes Single Line Question Option : No Option Orientation : Vertical

Correct : 1 Wrong : 0.25

Smita works in office for 6hours and Kajal works for 7hours 30minutes in her office. Find the ratio of their working hours.

Options :

1. ✔ 4:5

2. ✘ 5:4

3. ✘ 3:5

4. ✘ 6:7

Question Number : 46 Question Id : 7368154692 Question Type : MCQ Option Shuffling : Yes Display Question Number : Yes Single Line Question Option : No Option Orientation : Vertical

Correct : 1 Wrong : 0.25

स्मिता कार्यालय में 6 घंटे और काजल अपने कार्यालय में 7 घंटे 30 मिनट काम करती है। उनके काम के घंटे के अनुपात का पता लगाएं।

Options :

1. ✔ 4:5

2. ✘ 5:4

3. ✘ 3:5

4. ✘ 6:7

Question Number : 47 Question Id : 7368154693 Question Type : MCQ Option Shuffling : Yes Display Question Number : Yes Single Line Question Option : No Option Orientation : Vertical

Correct : 1 Wrong : 0.25

The ratio of times taken by A and B to finish a piece of work is 1:3. If A completes the work in 15 days, then find the time taken by B to complete the work.

Options :

1. ✘ 5 days
2. ✔ 45 days
3. ✘ 20 days
4. ✘ 18 days

Question Number : 47 Question Id : 7368154693 Question Type : MCQ Option Shuffling : Yes Display Question Number : Yes Single Line Question Option : No Option Orientation : Vertical

Correct : 1 Wrong : 0.25

किसी काम को पूरा करने के लिए A और B द्वारा लिये गए समय का अनुपात 1:3 है । यदि A उस काम को पूरा करने में 15 दिन लेता है, तो B को काम को पूरा करने में कितना समय लगेगा?

Options :

1. ✘ 5 दिन
2. ✔ 45 दिन
3. ✘ 20 दिन
4. ✘ 18 दिन

Question Number : 48 Question Id : 7368154694 Question Type : MCQ Option Shuffling : Yes Display Question Number : Yes Single Line Question Option : No Option Orientation : Vertical

Correct : 1 Wrong : 0.25

Kanchan can do a work in 5 days and Kangana is 25% more expert than Kanchan to complete the same work, then find the total time taken to complete the work by Kangana.

Options :

1. ✘ $5\frac{1}{2}$ days
2. ✘ $4\frac{1}{2}$ days
3. ✔ 4 days
4. ✘ 6 days

Question Number : 48 Question Id : 7368154694 Question Type : MCQ Option Shuffling : Yes Display Question Number : Yes Single Line Question Option : No Option Orientation : Vertical

Correct : 1 Wrong : 0.25

कंचन एक काम को 5 दिन में पूरा कर सकती है और कंगना उसी काम को कंचन की तुलना में 25% ज्यादा अच्छे तरीके से कर सकती है, तो काम को पूरा करने के लिए कंगना द्वारा लिये गए कुल समय का पता लगाएं।

Options :

1. ✘ $5\frac{1}{2}$ दिन
2. ✘ $4\frac{1}{2}$ दिन
3. ✔ 4 दिन
4. ✘ 6 दिन

Question Number : 49 Question Id : 7368154695 Question Type : MCQ Option Shuffling : Yes Display Question Number : Yes
Single Line Question Option : No Option Orientation : Vertical

Correct : 1 Wrong : 0.25

If A can do a piece of work in 4days, B can do the same in 6days and C can do the same work in 8days, then working together, how many days will they take to complete the work?

Options :

1. ✔ $1\frac{11}{13}$ days
2. ✘ 9 days
3. ✘ $2\frac{1}{2}$ days
4. ✘ 24 days

Question Number : 49 Question Id : 7368154695 Question Type : MCQ Option Shuffling : Yes Display Question Number : Yes
Single Line Question Option : No Option Orientation : Vertical

Correct : 1 Wrong : 0.25

A एक काम को 4 दिनों में पूरा कर सकता है, यदि B उस काम को 6 दिनों में और C उस काम को 8 दिनों में पूरा कर सकता है, तो उन्हें साथ मिलकर उसी काम को पूरा करने में कितने दिन लगेंगे?

Options :

1. ✔ $1\frac{11}{13}$ दिन
2. ✘ 9 दिन
3. ✘ $2\frac{1}{2}$ दिन
4. ✘ 24 दिन

Question Number : 50 Question Id : 7368154696 Question Type : MCQ Option Shuffling : Yes Display Question Number : Yes
Single Line Question Option : No Option Orientation : Vertical

Correct : 1 Wrong : 0.25

40 men can complete a work in 15days. 5days after they started working, 20 more men joined them. How many days will they now take to complete the remaining work?

Options :

1. ✔ $6\frac{2}{3}$ days

2. ✘ $6\frac{1}{5}$ days

3. ✘ $7\frac{2}{3}$ days

4. ✘ $8\frac{1}{4}$ days

Question Number : 50 Question Id : 7368154696 Question Type : MCQ Option Shuffling : Yes Display Question Number : Yes
Single Line Question Option : No Option Orientation : Vertical

Correct : 1 Wrong : 0.25

40 पुरुष एक काम को 15 दिनों में पूरा कर सकते हैं। उनके द्वारा काम शुरू करने के 5 दिन बाद 20 पुरुष उनमें और शामिल हो जाते हैं। अब बाकी के काम पूरा को करने के लिए उन्हें कितने दिन लगेंगे?

Options :

1. ✔ $6\frac{2}{3}$ दिन

2. ✘ $6\frac{1}{5}$ दिन

3. ✘ $7\frac{2}{3}$ दिन

4. ✘ $8\frac{1}{4}$ दिन

English Language

Section Id :	73681592
Section Number :	2
Section type :	Online
Mandatory or Optional:	Mandatory
Number of Questions:	32
Number of Questions to be attempted:	32
Section Marks:	50
Display Number Panel:	Yes
Group All Questions:	No

Sub-Section Number:	1
Sub-Section Id:	736815138
Question Shuffling Allowed :	No

Question Id : 7368154697 Question Type : COMPREHENSION Sub Question Shuffling Allowed : No Group Comprehension Questions : No

Question Numbers : (51 to 60)

Question Label : Comprehension

Read the passage given below and answer the questions that follow it:

We can be easily swayed by political catchphrases and advertising slogans, that are intentionally crafted to convince and direct us into making certain choices. The advertising world is rife with “authentic” storytelling, which uses beautifully shot images, symbolism, and language to generate emotional narratives.

So, the linguistics of mass persuasion has become necessarily more sophisticated to handle the challenges of an increasingly cynical public. It has to *seem* authentic—and not deliberately manipulative—to work. You might have noticed, for instance, how the advertising world is rife with “authentic” storytelling, which uses beautifully shot images, symbolism, and language to generate emotional narratives. Yes, language can subtly frame a story for us; lead us down the garden path—but then what? There’s actually an insidious little rhetorical trick being used that we’re often blind to. Surprisingly, the trick is to seemingly give up control of the narrative and let these framed ‘stories’ all end on a kind of cliffhanger, which *we* then mentally fill in to determine the outcome.

“Persuasion by hinting” might seem like a fuzzy leap of faith but modern advertising has already trained us to resolve omitted information just the way we’re supposed to. Consider constructions such as “20% more/quieter/cleaner/bigger/faster!” (than what?). These are all comparatives that aren’t actually being compared to anything at all. They’re grammatically unresolved phrases and we’re gently led to expect *something* there. So we fill-in-the-blank ourselves, within the frame of the new narratives we’ve been fed, in an act that seems to be totally under our control, but isn’t.

Sub questions

Question Number : 51 Question Id : 7368154698 Question Type : MCQ Option Shuffling : Yes Display Question Number : Yes
Single Line Question Option : No Option Orientation : Vertical

Correct : 1 Wrong : 0.25

The most suitable title for this passage is:

Options :

1. ✓ How Language Works in Advertising
2. ✗ We Complete Advertisements, Driven by Words
3. ✗ ‘Persuasion (sic!) by Hinting’
4. ✗ Led by Our Nose by Words

Question Number : 52 Question Id : 7368154699 Question Type : MCQ Option Shuffling : Yes Display Question Number : Yes
Single Line Question Option : No Option Orientation : Vertical

Correct : 1 Wrong : 0.25

Consider the phrase ‘the linguistics of mass persuasion’. Linguistics is the study of language. Keeping that in mind, this of the following will NOT qualify for this phrase?

Options :

1. ✓ A funeral oration
2. ✗ A Town-Hall debate
3. ✗ A Sermon
4. ✗ Speech in a political rally

Question Number : 53 Question Id : 7368154700 Question Type : MCQ Option Shuffling : Yes Display Question Number : Yes
Single Line Question Option : No Option Orientation : Vertical

Correct : 1 Wrong : 0.25

None of us is definitive or have any clarity about what “20% more/quieter/ cleaner/ bigger /faster!” means in an advertisement. But we

Options :

1. ✘ Are ashamed of our ignorance and so don't open out to others about this.
2. ✔ Are so used to default-value-filling in our lives when we hear things.
3. ✘ Aren't aware of this 'clarity-mist' or aren't cynical about this.
4. ✘ Are 'duped' easily by images, symbols and the emotive language employed.

Question Number : 54 Question Id : 7368154701 Question Type : MCQ Option Shuffling : Yes Display Question Number : Yes Single Line Question Option : No Option Orientation : Vertical

Correct : 1 Wrong : 0.25

The writer declares, 'The advertising world is rife with "authentic" storytelling...' The word rife has among its many meanings these: rampant, common, and endemic. Keeping in mind the writer's attitude to the use of language in advertisements, 'rife' here suggests

Options :

1. ✘ something nice, warm and pleasant.
2. ✔ something that the author would like to complain about.
3. ✘ something dark, evil and unpleasant.
4. ✘ something normal in life.

Question Number : 55 Question Id : 7368154702 Question Type : MCQ Option Shuffling : Yes Display Question Number : Yes Single Line Question Option : No Option Orientation : Vertical

Correct : 1 Wrong : 0.25

Which other profession does the writer mention along with advertisements that 'uses' language:

Options :

1. ✘ teaching
2. ✘ compering
3. ✘ blog-writing
4. ✔ politics

Question Number : 56 Question Id : 7368154703 Question Type : MCQ Option Shuffling : Yes Display Question Number : Yes Single Line Question Option : No Option Orientation : Vertical

Correct : 1 Wrong : 0.25

'It has to seem authentic..' _____ [fill in the blank choosing one] 'the sophistication of linguistics of mass persuasion.'

Options :

1. ✘ is a continuation of
2. ✘ Is an instance of
3. ✘ Is a proof of
4. ✔ Is an addition to

Question Number : 57 Question Id : 7368154704 Question Type : MCQ Option Shuffling : Yes Display Question Number : Yes Single Line Question Option : No Option Orientation : Vertical

Correct : 1 Wrong : 0.25

“Persuasion by hinting” might seem like a fuzzy leap of faith...’ observes the writer. In and through this he is:

Options :

1. ✘ making a complaint
2. ✘ making an assertion
3. ✘ stating a position
4. ✔ opening up an argument

Question Number : 58 Question Id : 7368154705 Question Type : MCQ Option Shuffling : Yes Display Question Number : Yes
Single Line Question Option : No Option Orientation : Vertical

Correct : 1 Wrong : 0.25

‘Authentic’ story-telling in media involves:

Options :

1. ✘ using ‘clever’ language
2. ✘ using realistic images, suggestive symbols and pleasant words
3. ✔ combining pictures, the contents of the pictures and ‘chosen’ words
4. ✘ choosing an interesting incident

Question Number : 59 Question Id : 7368154706 Question Type : MCQ Option Shuffling : Yes Display Question Number : Yes
Single Line Question Option : No Option Orientation : Vertical

Correct : 1 Wrong : 0.25

The writer uses the words ‘insidious’ and ‘trick’ and the idiom ‘lead us down the garden path’. The idiom means:

Options :

1. ✔ dangling something attractive, lead us by our nose
2. ✘ promising, with an intent to cheat, a future heaven to cheat us ‘now’
3. ✘ show us beautiful plants, attractive flowers and such things in a garden
4. ✘ creating a magic show where tricks are performed, but here with evil intentions

Question Number : 60 Question Id : 7368154707 Question Type : MCQ Option Shuffling : Yes Display Question Number : Yes
Single Line Question Option : No Option Orientation : Vertical

Correct : 1 Wrong : 0.25

Choose a one word substitute for ‘to resolve omitted information’.

Options :

1. ✘ design
2. ✔ default
3. ✘ defect
4. ✘ draw

Question Id : 7368154697 Question Type : COMPREHENSION Sub Question Shuffling Allowed : No Group Comprehension
Questions : No

Question Numbers : (51 to 60)

Question Label : Comprehension

Read the passage given below and answer the questions that follow it:

We can be easily swayed by political catchphrases and advertising slogans, that are intentionally crafted to convince and direct us into making certain choices. The advertising world is rife with “authentic” storytelling, which uses beautifully shot images, symbolism, and language to generate emotional narratives.

So, the linguistics of mass persuasion has become necessarily more sophisticated to handle the challenges of an increasingly cynical public. It has to *seem* authentic—and not deliberately manipulative—to work. You might have noticed, for instance, how the advertising world is rife with “authentic” storytelling, which uses beautifully shot images, symbolism, and language to generate emotional narratives. Yes, language can subtly frame a story for us; lead us down the garden path—but then what? There’s actually an insidious little rhetorical trick being used that we’re often blind to. Surprisingly, the trick is to seemingly give up control of the narrative and let these framed ‘stories’ all end on a kind of cliffhanger, which *we* then mentally fill in to determine the outcome.

“Persuasion by hinting” might seem like a fuzzy leap of faith but modern advertising has already trained us to resolve omitted information just the way we’re supposed to. Consider constructions such as “20% more/quieter/cleaner/bigger/faster!” (than what?). These are all comparatives that aren’t actually being compared to anything at all. They’re grammatically unresolved phrases and we’re gently led to expect *something* there. So we fill-in-the-blank ourselves, within the frame of the new narratives we’ve been fed, in an act that seems to be totally under our control, but isn’t.

Sub questions

Question Number : 51 Question Id : 7368154698 Question Type : MCQ Option Shuffling : Yes Display Question Number : Yes
Single Line Question Option : No Option Orientation : Vertical

Correct : 1 Wrong : 0.25

The most suitable title for this passage is

Options :

1. ✓ How Language Works in Advertising
2. ✗ We Complete Advertisements, Driven by Words
3. ✗ ‘Persuasion (sic!) by Hinting’
4. ✗ Led by Our Nose by Words

Question Number : 52 Question Id : 7368154699 Question Type : MCQ Option Shuffling : Yes Display Question Number : Yes
Single Line Question Option : No Option Orientation : Vertical

Correct : 1 Wrong : 0.25

Consider the phrase ‘the linguistics of mass persuasion’. Linguistics is the study of language. Keeping that in mind, this of the following will NOT qualify for this phrase?

Options :

1. ✓ A funeral oration
2. ✗ A Town-Hall debate
3. ✗ A Sermon
4. ✗ Speech in a political rally

Question Number : 53 Question Id : 7368154700 Question Type : MCQ Option Shuffling : Yes Display Question Number : Yes
Single Line Question Option : No Option Orientation : Vertical

Correct : 1 Wrong : 0.25

None of us is definitive or have any clarity about what “20% more/ quieter/ cleaner/ bigger /faster!” means in an advertisement. But we:

Options :

1. ✘ Are ashamed of our ignorance and so don't open out to others about this.
2. ✔ Are so used to default-value-filling in our lives when we hear things.
3. ✘ Aren't aware of this 'clarity-mist' or aren't cynical about this.
Are 'duped' easily by images, symbols and the emotive language
4. ✘ employed.

Question Number : 54 Question Id : 7368154701 Question Type : MCQ Option Shuffling : Yes Display Question Number : Yes
Single Line Question Option : No Option Orientation : Vertical

Correct : 1 Wrong : 0.25

The writer declares, 'The advertising world is rife with "authentic" storytelling...' The word rife has among its many meanings these: rampant, common, and endemic. Keeping in mind the writer's attitude to the use of language in advertisements, 'rife' here suggests:

Options :

1. ✘ something nice, warm and pleasant.
2. ✔ something that the author would like to complain about.
3. ✘ something dark, evil and unpleasant.
4. ✘ something normal in life.

Question Number : 55 Question Id : 7368154702 Question Type : MCQ Option Shuffling : Yes Display Question Number : Yes
Single Line Question Option : No Option Orientation : Vertical

Correct : 1 Wrong : 0.25

Which other profession does the writer mention along with advertisements that 'uses' language:

Options :

1. ✘ teaching
2. ✘ compering
3. ✘ blog-writing
4. ✔ politics

Question Number : 56 Question Id : 7368154703 Question Type : MCQ Option Shuffling : Yes Display Question Number : Yes
Single Line Question Option : No Option Orientation : Vertical

Correct : 1 Wrong : 0.25

'It has to seem authentic..' _____ [fill in the blank choosing one] 'the sophistication of linguistics of mass persuasion.'

Options :

1. ✘ is a continuation of
2. ✘ Is an instance of
3. ✘ Is a proof of
4. ✔ Is an addition to

Question Number : 57 Question Id : 7368154704 Question Type : MCQ Option Shuffling : Yes Display Question Number : Yes
Single Line Question Option : No Option Orientation : Vertical

Correct : 1 Wrong : 0.25

“Persuasion by hinting” might seem like a fuzzy leap of faith...’ observes the writer. In and through this he is:

Options :

1. ✘ making a complaint
2. ✘ making an assertion
3. ✘ stating a position
4. ✔ opening up an argument

Question Number : 58 Question Id : 7368154705 Question Type : MCQ Option Shuffling : Yes Display Question Number : Yes
Single Line Question Option : No Option Orientation : Vertical

Correct : 1 Wrong : 0.25

‘Authentic’ story-telling in media involves

Options :

1. ✘ using ‘clever’ language
2. ✘ using realistic images, suggestive symbols and pleasant words
3. ✔ combining pictures, the contents of the pictures and ‘chosen’ words
4. ✘ choosing an interesting incident

Question Number : 59 Question Id : 7368154706 Question Type : MCQ Option Shuffling : Yes Display Question Number : Yes
Single Line Question Option : No Option Orientation : Vertical

Correct : 1 Wrong : 0.25

The writer uses the words ‘insidious’ and ‘trick’ and the idiom ‘lead us down the garden path’. The idiom means:

Options :

1. ✔ dangling something attractive, lead us by our nose
2. ✘ promising, with an intent to cheat, a future heaven to cheat us ‘now’
3. ✘ show us beautiful plants, attractive flowers and such things in a garden creating a magic show where tricks are performed, but here with evil
4. ✘ intentions

Question Number : 60 Question Id : 7368154707 Question Type : MCQ Option Shuffling : Yes Display Question Number : Yes
Single Line Question Option : No Option Orientation : Vertical

Correct : 1 Wrong : 0.25

Choose a one word substitute for ‘to resolve omitted information’.

Options :

1. ✘ design
2. ✔ default
3. ✘ defect
4. ✘ draw

Sub-Section Number: 2
Sub-Section Id: 736815139
Question Shuffling Allowed : No

Question Id : 7368154708 Question Type : COMPREHENSION Sub Question Shuffling Allowed : No Group Comprehension Questions : No

Question Numbers : (61 to 70)

Question Label : Comprehension

In the passage given below 10 words have been omitted and the blanks have been numbered 11 to 20. Choose from the sets of four words against corresponding numbers the one that would fill the blank accurately and appropriately:

If you're an adult who regularly rides a bicycle, you might feel a tiny sense of moral superiority about getting exercise and reducing your carbon footprint. But in the 1890s, the moral discourse around bike riding was very different. Protestant authorities saw cycling as a _____ (11) threat to morality as cycling women often wore _____ (12) that were much like men's pants and were _____ (13) seen as indecent. Up until the invention of the modern _____ (14) bicycle in 1887, few women rode the high wheel bicycles of the _____ (15) generation. Bikes facilitated unchaperoned dates too—even elopements. Another _____ (16) against the cycling craze was that people were spending their _____ (17)—often the only work-free day of the week—on bike rides rather than at church. Cycling _____ (18) to leave preachers with congregations made up of only the sick and the _____ (19). Religious leaders were also worried about unhealthy, vicious _____ (20) between men and women. Yet, for the “muscular Christian” movement that started late in the nineteenth century, bicycles were also a useful technology. Like other sports, cycling was a way to build courage, determination, and strength.

Sub questions

Question Number : 61 Question Id : 7368154709 Question Type : MCQ Option Shuffling : Yes Display Question Number : Yes Single Line Question Option : No Option Orientation : Vertical

Correct : 1 Wrong : 0.25

Choose from the sets of four words against corresponding numbers the one that would fill the blank accurately and appropriately:

Options :

1. ✘ small
2. ✘ trivial
3. ✔ significant
4. ✘ hollow

Question Number : 62 Question Id : 7368154710 Question Type : MCQ Option Shuffling : Yes Display Question Number : Yes Single Line Question Option : No Option Orientation : Vertical

Correct : 1 Wrong : 0.25

Choose from the sets of four words against corresponding numbers the one that would fill the blank accurately and appropriately:

Options :

1. ✓ bloomers
2. ✗ gowns
3. ✗ frocks
4. ✗ dresses

Question Number : 63 Question Id : 7368154711 Question Type : MCQ Option Shuffling : Yes Display Question Number : Yes Single Line Question Option : No Option Orientation : Vertical

Correct : 1 Wrong : 0.25

Choose from the sets of four words against corresponding numbers the one that would fill the blank accurately and appropriately:

Options :

1. ✗ shortly
2. ✓ widely
3. ✗ barely
4. ✗ nearly

Question Number : 64 Question Id : 7368154712 Question Type : MCQ Option Shuffling : Yes Display Question Number : Yes Single Line Question Option : No Option Orientation : Vertical

Correct : 1 Wrong : 0.25

Choose from the sets of four words against corresponding numbers the one that would fill the blank accurately and appropriately:

Options :

1. ✗ 'low'
2. ✗ 'high'
3. ✓ 'safety'
4. ✗ 'free'

Question Number : 65 Question Id : 7368154713 Question Type : MCQ Option Shuffling : Yes Display Question Number : Yes Single Line Question Option : No Option Orientation : Vertical

Correct : 1 Wrong : 0.25

Choose from the sets of four words against corresponding numbers the one that would fill the blank accurately and appropriately:

Options :

1. ✗ future
2. ✗ present
3. ✗ ancestors
4. ✓ previous

Question Number : 66 Question Id : 7368154714 Question Type : MCQ Option Shuffling : Yes Display Question Number : Yes Single Line Question Option : No Option Orientation : Vertical

Correct : 1 Wrong : 0.25

Choose from the sets of four words against corresponding numbers the one that would fill the blank accurately and appropriately:

Options :

1. ✓ charge
2. ✗ fault
3. ✗ liability
4. ✗ danger

Question Number : 67 Question Id : 7368154715 Question Type : MCQ Option Shuffling : Yes Display Question Number : Yes Single Line Question Option : No Option Orientation : Vertical

Correct : 1 Wrong : 0.25

Choose from the sets of four words against corresponding numbers the one that would fill the blank accurately and appropriately:

Options :

1. ✗ holidays
2. ✓ Sundays
3. ✗ weekdays
4. ✗ Fridays

Question Number : 68 Question Id : 7368154716 Question Type : MCQ Option Shuffling : Yes Display Question Number : Yes Single Line Question Option : No Option Orientation : Vertical

Correct : 1 Wrong : 0.25

Choose from the sets of four words against corresponding numbers the one that would fill the blank accurately and appropriately:

Options :

1. ✗ banished
2. ✗ chanced
3. ✗ exposed
4. ✓ threatened

Question Number : 69 Question Id : 7368154717 Question Type : MCQ Option Shuffling : Yes Display Question Number : Yes Single Line Question Option : No Option Orientation : Vertical

Correct : 1 Wrong : 0.25

Choose from the sets of four words against corresponding numbers the one that would fill the blank accurately and appropriately:

Options :

1. ✓ elderly
2. ✗ poor
3. ✗ unbelievers
4. ✗ homeless

Question Number : 70 Question Id : 7368154718 Question Type : MCQ Option Shuffling : Yes Display Question Number : Yes Single Line Question Option : No Option Orientation : Vertical

Correct : 1 Wrong : 0.25

Choose from the sets of four words against corresponding numbers the one that would fill the blank accurately and appropriately:

Options :

1. ✓ competition
2. ✗ struggle
3. ✗ opposition
4. ✗ rivalry

Question Id : 7368154708 Question Type : COMPREHENSION Sub Question Shuffling Allowed : No Group Comprehension Questions : No

Question Numbers : (61 to 70)

Question Label : Comprehension

In the passage given below 10 words have been omitted and the blanks have been numbered 11 to 20. Choose from the sets of four words against corresponding numbers the one that would fill the blank accurately and appropriately:

If you're an adult who regularly rides a bicycle, you might feel a tiny sense of moral superiority about getting exercise and reducing your carbon footprint. But in the 1890s, the moral discourse around bike riding was very different. Protestant authorities saw cycling as a _____(11) threat to morality as cycling women often wore _____(12) that were much like men's pants and were _____(13) seen as indecent. Up until the invention of the modern _____(14) bicycle in 1887, few women rode the high wheel bicycles of the _____(15) generation. Bikes facilitated unchaperoned dates too—even elopements. Another _____(16) against the cycling craze was that people were spending their _____(17)—often the only work-free day of the week—on bike rides rather than at church. Cycling _____(18) to leave preachers with congregations made up of only the sick and the _____(19). Religious leaders were also worried about unhealthy, vicious _____(20) between men and women. Yet, for the “muscular Christian” movement that started late in the nineteenth century, bicycles were also a useful technology. Like other sports, cycling was a way to build courage, determination, and strength.

Sub questions

Question Number : 61 Question Id : 7368154709 Question Type : MCQ Option Shuffling : Yes Display Question Number : Yes Single Line Question Option : No Option Orientation : Vertical

Correct : 1 Wrong : 0.25

Choose from the sets of four words against corresponding numbers the one that would fill the blank accurately and appropriately:

Options :

1. ✗ small
2. ✗ trivial
3. ✓ significant
4. ✗ hollow

Question Number : 62 Question Id : 7368154710 Question Type : MCQ Option Shuffling : Yes Display Question Number : Yes Single Line Question Option : No Option Orientation : Vertical

Correct : 1 Wrong : 0.25

Choose from the sets of four words against corresponding numbers the one that would fill the blank accurately and appropriately:

Options :

1. ✓ bloomers
2. ✗ gowns
3. ✗ frocks
4. ✗ dresses

Question Number : 63 Question Id : 7368154711 Question Type : MCQ Option Shuffling : Yes Display Question Number : Yes
Single Line Question Option : No Option Orientation : Vertical

Correct : 1 Wrong : 0.25

Choose from the sets of four words against corresponding numbers the one that would fill the blank accurately and appropriately:

Options :

1. ✗ shortly
2. ✓ widely
3. ✗ barely
4. ✗ nearly

Question Number : 64 Question Id : 7368154712 Question Type : MCQ Option Shuffling : Yes Display Question Number : Yes
Single Line Question Option : No Option Orientation : Vertical

Correct : 1 Wrong : 0.25

Choose from the sets of four words against corresponding numbers the one that would fill the blank accurately and appropriately:

Options :

1. ✗ 'low'
2. ✗ 'high'
3. ✓ 'safety'
4. ✗ 'free'

Question Number : 65 Question Id : 7368154713 Question Type : MCQ Option Shuffling : Yes Display Question Number : Yes
Single Line Question Option : No Option Orientation : Vertical

Correct : 1 Wrong : 0.25

Choose from the sets of four words against corresponding numbers the one that would fill the blank accurately and appropriately:

Options :

1. ✗ future
2. ✗ present
3. ✗ ancestors
4. ✓ previous

Question Number : 66 Question Id : 7368154714 Question Type : MCQ Option Shuffling : Yes Display Question Number : Yes
Single Line Question Option : No Option Orientation : Vertical

Correct : 1 Wrong : 0.25

Choose from the sets of four words against corresponding numbers the one that would fill the blank accurately and appropriately:

Options :

1. ✓ charge
2. ✗ fault
3. ✗ liability
4. ✗ danger

Question Number : 67 Question Id : 7368154715 Question Type : MCQ Option Shuffling : Yes Display Question Number : Yes
Single Line Question Option : No Option Orientation : Vertical

Correct : 1 Wrong : 0.25

Choose from the sets of four words against corresponding numbers the one that would fill the blank accurately and appropriately:

Options :

1. ✗ holidays
2. ✓ Sundays
3. ✗ weekdays
4. ✗ Fridays

Question Number : 68 Question Id : 7368154716 Question Type : MCQ Option Shuffling : Yes Display Question Number : Yes
Single Line Question Option : No Option Orientation : Vertical

Correct : 1 Wrong : 0.25

Choose from the sets of four words against corresponding numbers the one that would fill the blank accurately and appropriately:

Options :

1. ✗ banished
2. ✗ chanced
3. ✗ exposed
4. ✓ threatened

Question Number : 69 Question Id : 7368154717 Question Type : MCQ Option Shuffling : Yes Display Question Number : Yes
Single Line Question Option : No Option Orientation : Vertical

Correct : 1 Wrong : 0.25

Choose from the sets of four words against corresponding numbers the one that would fill the blank accurately and appropriately:

Options :

1. ✓ elderly
2. ✗ poor
3. ✗ unbelievers
4. ✗ homeless

Question Number : 70 Question Id : 7368154718 Question Type : MCQ Option Shuffling : Yes Display Question Number : Yes
Single Line Question Option : No Option Orientation : Vertical

Correct : 1 Wrong : 0.25

Choose from the sets of four words against corresponding numbers the one that would fill the blank accurately and appropriately:

Options :

1. ✓ competition
2. ✗ struggle
3. ✗ opposition
4. ✗ rivalry

Sub-Section Number: 3
Sub-Section Id: 736815140
Question Shuffling Allowed : Yes

Question Number : 71 Question Id : 7368154719 Question Type : MCQ Option Shuffling : Yes Display Question Number : Yes
Single Line Question Option : No Option Orientation : Vertical

Correct : 1 Wrong : 0.25

Given below is a set of 5 sentences, neither in a meaningful nor in a coherent sequence. These sentences are numbered 1 to 5. Identify the correct sequence of numbers from the options given :

1. The third took his share of the stag as a withholding tax, saying "against a year of famine!"
2. It is not as easy to get the lion's share nowadays as it used to be.
3. "I will take a third for your widow," said another, "for that is the law, even if you have none"
4. The lion was with the stag hunted and killed, when three little foxes appeared on the scene.
5. "I will take a third of the stag as a penalty," said one, "for you have no hunter's license."

Options :

1. ✗ 1,3,5,2,4
2. ✓ 4,5,3,1,2
3. ✗ 4,1,2,3,5
4. ✗ 5,4,3,2,1

Question Number : 71 Question Id : 7368154719 Question Type : MCQ Option Shuffling : Yes Display Question Number : Yes
Single Line Question Option : No Option Orientation : Vertical

Correct : 1 Wrong : 0.25

Given below is a set of 5 sentences, neither in a meaningful nor in a coherent sequence. These sentences are numbered 1 to 5. Identify the correct sequence of numbers from the options given :

1. The third took his share of the stag as a withholding tax, saying "against a year of famine!"
2. It is not as easy to get the lion's share nowadays as it used to be.
3. "I will take a third for your widow," said another, "for that is the law, even if you have none"
4. The lion was with the stag hunted and killed, when three little foxes appeared on the scene.
5. "I will take a third of the stag as a penalty," said one, "for you have no hunter's license."

Options :

1. ✘ 1,3,5,2,4
2. ✔ 4,5,3,1,2
3. ✘ 4,1,2,3,5
4. ✘ 5,4,3,2,1

Question Number : 72 Question Id : 7368154720 Question Type : MCQ Option Shuffling : Yes Display Question Number : Yes Single Line Question Option : No Option Orientation : Vertical

Correct : 1 Wrong : 0.25

Given below is a set of 5 sentences, neither in a meaningful nor in a coherent sequence. These sentences are numbered 1 to 5. Identify the correct sequence of numbers from the options given :

1. "Where do you get that stuff?" asked the admiring weaver.
2. Then the weaver and the silkworm went their separate ways, for each thought the other had insulted him
3. "Do you want to make something out of it?" inquired the silkworm, eagerly.
4. A word to the wise is not sufficient if it doesn't make any sense.
5. A weaver watched in wide-eyed wonder a silkworm spinning its cocoon in a white mulberry tree.

Options :

1. ✔ 5,1,3,2,4
2. ✘ 5,3,2,1,4
3. ✘ 5,4,3,2,1
4. ✘ 5,3,2,4,1

Correct : 1 Wrong : 0.25

Given below is a set of 5 sentences, neither in a meaningful nor in a coherent sequence. These sentences are numbered 1 to 5. Identify the correct sequence of numbers from the options given :

1. "Where do you get that stuff?" asked the admiring weaver.
2. Then the weaver and the silkworm went their separate ways, for each thought the other had insulted him
3. "Do you want to make something out of it?" inquired the silkworm, eagerly.
4. A word to the wise is not sufficient if it doesn't make any sense.
5. A weaver watched in wide-eyed wonder a silkworm spinning its cocoon in a white mulberry tree.

Options :

1. ✓ 5,1,3,2,4
2. ✗ 5,3,2,1,4
3. ✗ 5,4,3,2,1
4. ✗ 5,3,2,4,1

Question Number : 73 Question Id : 7368154721 Question Type : MCQ Option Shuffling : Yes Display Question Number : Yes
Single Line Question Option : No Option Orientation : Vertical

Correct : 1 Wrong : 0.25

Given below is a set of 5 sentences, neither in a meaningful nor in a coherent sequence. These sentences are numbered 1 to 5. Identify the correct sequence of numbers from the options given :

1. The truth, thus, is that the plague may have never actually left Europe, mutating and developing new strains.
2. Until now, many believed that these outbreaks occurred because the bacterium that causes the disease was re-introduced repeatedly via trade with China.
3. In the fourteenth century, it wiped out more than a quarter of the continent's population, resurged again in the 15th, 16th, and 17th centuries.
4. New information uncovered about these outbreaks by researchers seems to point to a more haunting, mysterious truth.
5. The earliest outbreak of the plague in Europe was thought to be in Athens in 429-431 BC, when it reportedly killed a third of the city's population.

Options :

1. ✗ 1,3,5,2,4
2. ✗ 1,3,5,4,2

3. ✓ 5,3,2,4,1

4. ✗ 5,1,4,2,3

Question Number : 73 Question Id : 7368154721 Question Type : MCQ Option Shuffling : Yes Display Question Number : Yes
Single Line Question Option : No Option Orientation : Vertical

Correct : 1 Wrong : 0.25

Given below is a set of 5 sentences, neither in a meaningful nor in a coherent sequence. These sentences are numbered 1 to 5. Identify the correct sequence of numbers from the options given :

1. The truth, thus, is that the plague may have never actually left Europe, mutating and developing new strains.
2. Until now, many believed that these outbreaks occurred because the bacterium that causes the disease was re-introduced repeatedly via trade with China.
3. In the fourteenth century, it wiped out more than a quarter of the continent's population, resurged again in the 15th, 16th, and 17th centuries.
4. New information uncovered about these outbreaks by researchers seems to point to a more haunting, mysterious truth.
5. The earliest outbreak of the plague in Europe was thought to be in Athens in 429-431 BC, when it reportedly killed a third of the city's population.

Options :

1. ✗ 1,3,5,2,4

2. ✗ 1,3,5,4,2

3. ✓ 5,3,2,4,1

4. ✗ 5,1,4,2,3

Question Number : 74 Question Id : 7368154722 Question Type : MCQ Option Shuffling : Yes Display Question Number : Yes
Single Line Question Option : No Option Orientation : Vertical

Correct : 1 Wrong : 0.25

Given below is a famous one line, the words of which are given in groups, in a jumbled manner. These words are numbered from 1. Identify the correct sequence of numbers from the options given : {Make sure that the reordered sentence would appeal to the reader}:

Show business/ugly people/is/for/politics

1 2 3 4 5

Options :

1. ✘ 1,2,3,4,5
2. ✘ 5,4,3,2,1
3. ✔ 5,3,1,4,2
4. ✘ 2,4,3,1,5

Question Number : 74 Question Id : 7368154722 Question Type : MCQ Option Shuffling : Yes Display Question Number : Yes
Single Line Question Option : No Option Orientation : Vertical

Correct : 1 Wrong : 0.25

Given below is a famous one line, the words of which are given in groups, in a jumbled manner. These words are numbered from 1. Identify the correct sequence of numbers from the options given : {Make sure that the reordered sentence would appeal to the reader}:

Show business/ugly people/is/for/politics

1 2 3 4 5

Options :

1. ✘ 1,2,3,4,5
2. ✘ 5,4,3,2,1
3. ✔ 5,3,1,4,2
4. ✘ 2,4,3,1,5

Question Number : 75 Question Id : 7368154723 Question Type : MCQ Option Shuffling : Yes Display Question Number : Yes
Single Line Question Option : No Option Orientation : Vertical

Correct : 1 Wrong : 0.25

Given below is a famous one line, the words of which are given in groups, in a jumbled manner. These words are numbered from 1. Identify the correct sequence of numbers from the options given : {Make sure that the reordered sentence would appeal to the reader}:

of / geography/ God's way/ is/ teaching /Americans /war

1 2 3 4 5 6 7

Options :

1. ✔ 7,4,3,1,5,6,2
2. ✘ 2,4,3,1,5,6,7
3. ✘ 7,4,3,1,6,5,2
4. ✘ 2,3,4,5,6,7,1

Question Number : 75 Question Id : 7368154723 Question Type : MCQ Option Shuffling : Yes Display Question Number : Yes
Single Line Question Option : No Option Orientation : Vertical

Correct : 1 Wrong : 0.25

Given below is a famous one line, the words of which are given in groups, in a jumbled manner. These words are numbered from 1. Identify the correct sequence of numbers from the options given : {Make sure that the reordered sentence would appeal to the reader}:

of / geography/ God's way/ is/ teaching /Americans /war

1 2 3 4 5 6 7

Options :

1. ✓ 7,4,3,1,5,6,2
2. ✗ 2,4,3,1,5,6,7
3. ✗ 7,4,3,1,6,5,2
4. ✗ 2,3,4,5,6,7,1

Question Number : 76 Question Id : 7368154724 Question Type : MCQ Option Shuffling : Yes Display Question Number : Yes
Single Line Question Option : No Option Orientation : Vertical

Correct : 1 Wrong : 0.25

Given below is an ungrammatical sentence and there are four options given, which offer 'improved' or corrected version of this sentence; note that the improvement may range from grammar to usage to native-speaker use. Choose the option which correct the sentence completely:

Him turning the corner, the mountain was seen in its full gory.

Options :

1. ✗ He, seeing the mountain in its full glory, turned the corner.
2. ✗ He was turning the corner for the mountain was seen in its full glory.
3. ✓ Turning the corner, he saw the mountain in its full glory.
4. ✗ On turning the corner, he will see the mountain in its full glory.

Question Number : 76 Question Id : 7368154724 Question Type : MCQ Option Shuffling : Yes Display Question Number : Yes
Single Line Question Option : No Option Orientation : Vertical

Correct : 1 Wrong : 0.25

Given below is an ungrammatical sentence and there are four options given, which offer 'improved' or corrected version of this sentence; note that the improvement may range from grammar to usage to native-speaker use. Choose the option which correct the sentence completely:

Him turning the corner, the mountain was seen in its full gory.

Options :

1. ✗ He, seeing the mountain in its full glory, turned the corner.

2. ✘ He was turning the corner for the mountain was seen in its full glory.
3. ✔ Turning the corner, he saw the mountain in its full glory.
4. ✘ On turning the corner, he will see the mountain in its full glory.

Question Number : 77 Question Id : 7368154725 Question Type : MCQ Option Shuffling : Yes Display Question Number : Yes
Single Line Question Option : No Option Orientation : Vertical

Correct : 1 Wrong : 0.25

Given below is an ungrammatical sentence and there are four options given, which offer 'improved' or corrected version of this sentence; note that the improvement may range from grammar to usage to native-speaker use. Choose the option which correct the sentence completely:

Bradford council washes its hands of 14 libraries after 'devastating' budget cuts.

Options :

1. ✘ Bradford council washes its hands of 14 libraries after 'devastating' budget cuts.
2. ✘ Bradford counsel washes its hands of 14 libraries after 'devastating' budget cuts.
3. ✔ Bradford council washes its hands off 14 libraries after 'devastating' budget cuts.
4. ✘ Bradford council washes its hands of 14 libraries after 'devastated budget cuts.

Question Number : 77 Question Id : 7368154725 Question Type : MCQ Option Shuffling : Yes Display Question Number : Yes
Single Line Question Option : No Option Orientation : Vertical

Correct : 1 Wrong : 0.25

Given below is an ungrammatical sentence and there are four options given, which offer 'improved' or corrected version of this sentence; note that the improvement may range from grammar to usage to native-speaker use. Choose the option which correct the sentence completely:

Bradford council washes its hands of 14 libraries after 'devastating' budget cuts.

Options :

1. ✘ Bradford council washes its hands of 14 libraries after 'devastating' budget cuts.
2. ✘ Bradford counsel washes its hands of 14 libraries after 'devastating' budget cuts.
3. ✔ Bradford council washes its hands off 14 libraries after 'devastating' budget cuts.
4. ✘ Bradford council washes its hands of 14 libraries after 'devastated budget cuts.

Correct : 1 Wrong : 0.25

Given below is an ungrammatical sentence and there are four options given, which offer 'improved' or corrected version of this sentence; note that the improvement may range from grammar to usage to native-speaker use. Choose the option which correct the sentence completely:

George Osborne warns further cuts as 'storm cloud' gathers.

Options :

1. ✓ George Osborne warns of further cuts as 'storm clouds' gather.
2. ✗ George Osborne warned of further cuts as 'storm cloud' gathers.
3. ✗ George Osborne warns further cuts as 'storm clouds' gather.
4. ✗ George Osborne warns of further cuts as 'storm cloud' gathers.

Question Number : 78 Question Id : 7368154726 Question Type : MCQ Option Shuffling : Yes Display Question Number : Yes
Single Line Question Option : No Option Orientation : Vertical

Correct : 1 Wrong : 0.25

Given below is an ungrammatical sentence and there are four options given, which offer 'improved' or corrected version of this sentence; note that the improvement may range from grammar to usage to native-speaker use. Choose the option which correct the sentence completely:

George Osborne warns further cuts as 'storm cloud' gathers.

Options :

1. ✓ George Osborne warns of further cuts as 'storm clouds' gather.
2. ✗ George Osborne warned of further cuts as 'storm cloud' gathers.
3. ✗ George Osborne warns further cuts as 'storm clouds' gather.
4. ✗ George Osborne warns of further cuts as 'storm cloud' gathers.

Question Number : 79 Question Id : 7368154727 Question Type : MCQ Option Shuffling : Yes Display Question Number : Yes
Single Line Question Option : No Option Orientation : Vertical

Correct : 1 Wrong : 0.25

Given below is an ungrammatical sentence and there are four options given, which offer 'improved' or corrected version of this sentence; note that the improvement may range from grammar to usage to native-speaker use. Choose the option which correct the sentence completely:

Metaphors are way of thinking--and also ways of shaping thoughts of anothers.

Options :

1. ✗ Metaphors are way of thinking--and also ways of shaping the thoughts of others.
2. ✓ Metaphors are ways of thinking--and also ways of shaping the thoughts of others.

3. ✘ Metaphors are ways of thinking--and also ways of shaping thoughts of the others
4. ✘ Metaphors are the ways of thinking--and also ways of shaping the thoughts of the others

Question Number : 79 Question Id : 7368154727 Question Type : MCQ Option Shuffling : Yes Display Question Number : Yes
Single Line Question Option : No Option Orientation : Vertical

Correct : 1 Wrong : 0.25

Given below is an ungrammatical sentence and there are four options given, which offer 'improved' or corrected version of this sentence; note that the improvement may range from grammar to usage to native-speaker use. Choose the option which correct the sentence completely:

Metaphors are way of thinking--and also ways of shaping thoughts of anothers.

Options :

1. ✘ Metaphors are way of thinking--and also ways of shaping the thoughts of others.
2. ✔ Metaphors are ways of thinking--and also ways of shaping the thoughts of others.
3. ✘ Metaphors are ways of thinking--and also ways of shaping thoughts of the others
4. ✘ Metaphors are the ways of thinking--and also ways of shaping the thoughts of the others

Question Number : 80 Question Id : 7368154728 Question Type : MCQ Option Shuffling : Yes Display Question Number : Yes
Single Line Question Option : No Option Orientation : Vertical

Correct : 1 Wrong : 0.25

Given below is an ungrammatical sentence and there are four options given, which offer 'improved' or corrected version of this sentence; note that the improvement may range from grammar to usage to native-speaker use. Choose the option which correct the sentence completely:

When the goings get tough, tough gets going.

Options :

1. ✘ When the going gets tough, tough get going.
2. ✔ When the going gets tough, the tough get going.
3. ✘ When the goings get tough, the tough gets going.
4. ✘ When the going gets tough, tough gets going.

Question Number : 80 Question Id : 7368154728 Question Type : MCQ Option Shuffling : Yes Display Question Number : Yes
Single Line Question Option : No Option Orientation : Vertical

Correct : 1 Wrong : 0.25

Given below is an ungrammatical sentence and there are four options given, which offer 'improved' or corrected version of this sentence; note that the improvement may range from grammar to usage to native-speaker use. Choose the option which correct the sentence completely:

When the goings get tough, tough gets going.

Options :

1. ✘ When the going gets tough, tough get going.
2. ✔ When the going gets tough, the tough get going.
3. ✘ When the goings get tough, the tough gets going.
4. ✘ When the going gets tough, tough gets going.

Question Number : 81 Question Id : 7368154729 Question Type : MCQ Option Shuffling : Yes Display Question Number : Yes
Single Line Question Option : No Option Orientation : Vertical

Correct : 1 Wrong : 0.25

Given below is a sentence which is to be transformed and rewritten as indicated in brackets and there are four options given. Choose the one which 'correctly' transforms the given sentence :

He called her a taxi. {Rewrite without changing the meaning}

Options :

1. ✘ He called her, [as] "Taxi!"
2. ✘ He described her as a taxi
3. ✘ He called a taxi to her.
4. ✔ He called a taxi for her

Question Number : 81 Question Id : 7368154729 Question Type : MCQ Option Shuffling : Yes Display Question Number : Yes
Single Line Question Option : No Option Orientation : Vertical

Correct : 1 Wrong : 0.25

Given below is a sentence which is to be transformed and rewritten as indicated in brackets and there are four options given. Choose the one which 'correctly' transforms the given sentence :

He called her a taxi. {Rewrite without changing the meaning}

Options :

1. ✘ He called her, [as] "Taxi!"
2. ✘ He described her as a taxi
3. ✘ He called a taxi to her.
4. ✔ He called a taxi for her

Question Number : 82 Question Id : 7368154730 Question Type : MCQ Option Shuffling : Yes Display Question Number : Yes
Single Line Question Option : No Option Orientation : Vertical

Correct : 1 Wrong : 0.25

Given below is a sentence which is to be transformed and rewritten as indicated in brackets and there are four options given. Choose the one which 'correctly' transforms the given sentence :

When Kalia becomes the King of Dolapur, Chotta Bheem will serve him. {Rewrite as an imaginary conditional sentence}

Options :

1. ✘ Had Kalia become the King of Dolapur, Chotta Bheem would have served him
2. ✘ If Chotta Bheem were to serve him, Kalia would become the King of Dolapur
3. ✔ If Kalia were to become the King of Dolapur, Chotta Bheem would serve him
4. ✘ If Kalia is the King of Dolapur, Chotta Bheem serves him.

Question Number : 82 Question Id : 7368154730 Question Type : MCQ Option Shuffling : Yes Display Question Number : Yes
Single Line Question Option : No Option Orientation : Vertical

Correct : 1 Wrong : 0.25

Given below is a sentence which is to be transformed and rewritten as indicated in brackets and there are four options given. Choose the one which 'correctly' transforms the given sentence :

When Kalia becomes the King of Dolapur, Chotta Bheem will serve him. {Rewrite as an imaginary conditional sentence}

Options :

1. ✘ Had Kalia become the King of Dolapur, Chotta Bheem would have served him
2. ✘ If Chotta Bheem were to serve him, Kalia would become the King of Dolapur
3. ✔ If Kalia were to become the King of Dolapur, Chotta Bheem would serve him
4. ✘ If Kalia is the King of Dolapur, Chotta Bheem serves him.

Question Number : 83 Question Id : 7368154731 Question Type : MCQ Option Shuffling : Yes Display Question Number : Yes
Single Line Question Option : No Option Orientation : Vertical

Correct : 1 Wrong : 0.25

Given below is a sentence which is to be transformed and rewritten as indicated in brackets and there are four options given. Choose the one which 'correctly' transforms the given sentence :

The shop was closed. The thieves entered the shop. The police were waiting for them. {Combine into a single, simple sentence – add words if necessary}

Options :

1. ✘ Finding the shop was closed, the thieves entered it and found the police inside.
2. ✔ On entering the closed shop, the thieves found the police waiting for them.
3. ✘ The police were waiting for the thieves who would enter the closed shop.
4. ✘ As the thieves entered the closed shop, they found the police waiting for them.

Question Number : 83 Question Id : 7368154731 Question Type : MCQ Option Shuffling : Yes Display Question Number : Yes
Single Line Question Option : No Option Orientation : Vertical

Correct : 1 Wrong : 0.25

Given below is a sentence which is to be transformed and rewritten as indicated in brackets and there are four options given. Choose the one which 'correctly' transforms the given sentence :

The shop was closed. The thieves entered the shop. The police were waiting for them. {Combine into a single, simple sentence - add words if necessary}

Options :

1. ✘ Finding the shop was closed, the thieves entered it and found the police inside.
2. ✔ On entering the closed shop, the thieves found the police waiting for them.
3. ✘ The police were waiting for the thieves who would enter the closed shop.
4. ✘ As the thieves entered the closed shop, they found the police waiting for them.

Question Number : 84 Question Id : 7368154732 Question Type : MCQ Option Shuffling : Yes Display Question Number : Yes
Single Line Question Option : No Option Orientation : Vertical

Correct : 1 Wrong : 0.25

Read the sentence given below. Pay attention to the words/phrases/segments in *italics*. Choose the appropriate ONE WORD substitutes for the phrases and clauses *italicized*:

As the twins *grew out of* their clothes, they also *grew apart*.

Options :

1. ✘ As the twins became distant, they also grew bigger.

2. ✓ As the twins became older, they lost their mutual closeness too.
3. ✗ As the twins became bigger, they became distant too.
4. ✗ As the twins became bigger, they became less close to each other.

Question Number : 84 Question Id : 7368154732 Question Type : MCQ Option Shuffling : Yes Display Question Number : Yes
Single Line Question Option : No Option Orientation : Vertical

Correct : 1 Wrong : 0.25

Read the sentence given below. Pay attention to the words/phrases/segments in *italics*. Choose the appropriate ONE WORD substitutes for the phrases and clauses *italicized*.

As the twins *grew out of* their clothes, they also *grew apart*.

Options :

1. ✗ As the twins became distant, they also grew bigger.
2. ✓ As the twins became older, they lost their mutual closeness too.
3. ✗ As the twins became bigger, they became distant too.
4. ✗ As the twins became bigger, they became less close to each other.

Question Number : 85 Question Id : 7368154733 Question Type : MCQ Option Shuffling : Yes Display Question Number : Yes
Single Line Question Option : No Option Orientation : Vertical

Correct : 1 Wrong : 0.25

Read the sentence given below. Pay attention to the words/phrases/segments in *italics*. Choose the appropriate ONE WORD substitutes for the phrases and clauses *italicized*:

After *putting up* with a long rebellion, the military *put it down* violently.

Options :

1. ✗ After tolerating the long rebellion, the military suppressed it violently.
2. ✗ After accommodating the long rebellion, the military quashed it violently.
3. ✗ After tolerating the long rebellion, the military quashed it violently.
4. ✓ After accommodating the long rebellion, the military suppressed it violently.

Question Number : 85 Question Id : 7368154733 Question Type : MCQ Option Shuffling : Yes Display Question Number : Yes
Single Line Question Option : No Option Orientation : Vertical

Correct : 1 Wrong : 0.25

Read the sentence given below. Pay attention to the words/phrases/segments in *italics*. Choose the appropriate ONE WORD substitutes for the phrases and clauses *italicized*.

After *putting up* with a long rebellion, the military *put it down* violently.

Options :

- ✘ After tolerating the long rebellion, the military suppressed it violently.
- ✘ After accommodating the long rebellion, the military quashed it violently.
- ✘ After tolerating the long rebellion, the military quashed it violently.
- ✔ After accommodating the long rebellion, the military suppressed it violently.

Question Number : 86 Question Id : 7368154734 Question Type : MCQ Option Shuffling : Yes Display Question Number : Yes Single Line Question Option : No Option Orientation : Vertical

Correct : 1 Wrong : 0.25

Given below is sentence which divided into four parts labelled a, b, c, and d. One of these parts contains an error. Choose the part that has an error:

Temper is /so good a thing / that we should / ever lose it.

A B C D

Options :

- ✘ A
- ✘ B
- ✔ C
- ✘ D

Question Number : 86 Question Id : 7368154734 Question Type : MCQ Option Shuffling : Yes Display Question Number : Yes Single Line Question Option : No Option Orientation : Vertical

Correct : 1 Wrong : 0.25

Given below is sentence which divided into four parts labelled a, b, c, and d. One of these parts contains an error. Choose the part that has an error:

Temper is /so good a thing / that we should / ever lose it.

A B C D

Options :

- ✘ A
- ✘ B
- ✔ C
- ✘ D

Question Number : 87 Question Id : 7368154735 Question Type : MCQ Option Shuffling : Yes Display Question Number : Yes Single Line Question Option : No Option Orientation : Vertical

Correct : 1 Wrong : 0.25

Given below is sentence which divided into four parts labelled a, b, c, and d. One of these parts contains an error. Choose the part that has an error:

He didn't say / goodbye / after / he hung up,

A B C D

Options :

visit this website studytosuccess.in

- 1. ✘ A
- 2. ✘ B
- 3. ✔ C
- 4. ✘ D

Question Number : 87 Question Id : 7368154735 Question Type : MCQ Option Shuffling : Yes Display Question Number : Yes Single Line Question Option : No Option Orientation : Vertical

Correct : 1 Wrong : 0.25

Given below is sentence which divided into four parts labelled a, b, c, and d. One of these parts contains an error. Choose the part that has an error:

He didn't say / goodbye / after / he hung up,

A B C D

Options :

- 1. ✘ A
- 2. ✘ B
- 3. ✔ C
- 4. ✘ D

Question Number : 88 Question Id : 7368154736 Question Type : MCQ Option Shuffling : Yes Display Question Number : Yes Single Line Question Option : No Option Orientation : Vertical

Correct : 1 Wrong : 0.25

Given below is sentence which divided into four parts labelled a, b, c, and d. One of these parts contains an error. Choose the part that has an error:

Morality is simply/ the attitude we adapt / towards people /we personally dislike.

A B C D

Options :

- 1. ✘ A
- 2. ✔ B
- 3. ✘ C
- 4. ✘ D

Question Number : 88 Question Id : 7368154736 Question Type : MCQ Option Shuffling : Yes Display Question Number : Yes Single Line Question Option : No Option Orientation : Vertical

Correct : 1 Wrong : 0.25

Given below is sentence which divided into four parts labelled a, b, c, and d. One of these parts contains an error. Choose the part that has an error:

Morality is simply/ the attitude we adapt / towards people /we personally dislike.

A B C D

Options :

1. ✘ A
2. ✔ B
3. ✘ C
4. ✘ D

Question Number : 89 Question Id : 7368154737 Question Type : MCQ Option Shuffling : Yes Display Question Number : Yes
Single Line Question Option : No Option Orientation : Vertical

Correct : 1 Wrong : 0.25

Fill in the blanks with the correct form of idioms /proverbs by choosing the correct option given below.

Running into significant problems, they had to _____ the drawing board.

Options :

1. ✘ Go forward with
2. ✔ Go back to
3. ✘ Go along with
4. ✘ Go out with

Question Number : 89 Question Id : 7368154737 Question Type : MCQ Option Shuffling : Yes Display Question Number : Yes
Single Line Question Option : No Option Orientation : Vertical

Correct : 1 Wrong : 0.25

Fill in the blanks with the correct form of idioms /proverbs by choosing the correct option given below.

Running into significant problems, they had to _____ the drawing board.

Options :

1. ✘ Go forward with
2. ✔ Go back to
3. ✘ Go along with
4. ✘ Go out with

Question Number : 90 Question Id : 7368154738 Question Type : MCQ Option Shuffling : Yes Display Question Number : Yes
Single Line Question Option : No Option Orientation : Vertical

Correct : 1 Wrong : 0.25

Fill in the blanks with the correct form of idioms /proverbs by choosing the correct option given below

My doctor has been feeling _____ the weather himself.

Options :

1. ✘ A tad over

2. ✘ A little above
3. ✘ A bit below
4. ✔ A bit under

Question Number : 90 Question Id : 7368154738 Question Type : MCQ Option Shuffling : Yes Display Question Number : Yes
Single Line Question Option : No Option Orientation : Vertical

Correct : 1 Wrong : 0.25

Fill in the blanks with the correct form of idioms /proverbs by choosing the correct option given below

My doctor has been feeling _____ the weather himself.

Options :

1. ✘ A tad over
2. ✘ A little above
3. ✘ A bit below
4. ✔ A bit under

Question Number : 91 Question Id : 7368154739 Question Type : MCQ Option Shuffling : Yes Display Question Number : Yes
Single Line Question Option : No Option Orientation : Vertical

Correct : 1 Wrong : 0.25

Complete the sentence below by choosing one related pair of words that will fill in the blanks :

A _____ man doesn't need advice, and a _____ won't take it.

Options :

1. ✘ honest; cheat
2. ✘ clever; dull
3. ✔ wise; fool
4. ✘ rich; poor

Question Number : 91 Question Id : 7368154739 Question Type : MCQ Option Shuffling : Yes Display Question Number : Yes
Single Line Question Option : No Option Orientation : Vertical

Correct : 1 Wrong : 0.25

Complete the sentence below by choosing one related pair of words that will fill in the blanks :

A _____ man doesn't need advice, and a _____ won't take it.

Options :

1. ✘ honest; cheat
2. ✘ clever; dull

3. ✓ wise; fool
4. ✗ rich; poor

Question Number : 92 Question Id : 7368154740 Question Type : MCQ Option Shuffling : Yes Display Question Number : Yes
Single Line Question Option : No Option Orientation : Vertical

Correct : 1 Wrong : 0.25

Complete the sentence below by choosing one related pair of words that will fill in the blanks :

It is better to be _____ and growing than _____ and rotten.

Options :

1. ✓ green; ripe
2. ✗ young; old
3. ✗ naïve; wise
4. ✗ short; tall

Question Number : 92 Question Id : 7368154740 Question Type : MCQ Option Shuffling : Yes Display Question Number : Yes
Single Line Question Option : No Option Orientation : Vertical

Correct : 1 Wrong : 0.25

Complete the sentence below by choosing one related pair of words that will fill in the blanks :

It is better to be _____ and growing than _____ and rotten.

Options :

1. ✓ green; ripe
2. ✗ young; old
3. ✗ naïve; wise
4. ✗ short; tall

Question Number : 93 Question Id : 7368154741 Question Type : MCQ Option Shuffling : Yes Display Question Number : Yes
Single Line Question Option : No Option Orientation : Vertical

Correct : 1 Wrong : 0.25

A key word is given below. Choose the word closest to it in its meaning {synonym}. Pay attention to how the word would be used to, if required:

Influence

Options :

1. ✓ Power
2. ✗ Manipulate
3. ✗ Authority
4. ✗ Pressure

Question Number : 93 Question Id : 7368154741 Question Type : MCQ Option Shuffling : Yes Display Question Number : Yes
Single Line Question Option : No Option Orientation : Vertical

Correct : 1 Wrong : 0.25

A key word is given below. Choose the word closest to it in its meaning {synonym}. Pay attention to how the word would be used to, if required:

Influence

Options :

1. ✓ Power
2. ✗ Manipulate
3. ✗ Authority
4. ✗ Pressure

Question Number : 94 Question Id : 7368154742 Question Type : MCQ Option Shuffling : Yes Display Question Number : Yes
Single Line Question Option : No Option Orientation : Vertical

Correct : 1 Wrong : 0.25

A key word is given below. Choose the word closest to it in its meaning {synonym}. Pay attention to how the word would be used to, if required:

Obedience

Options :

1. ✗ Reverence
2. ✗ Obligation
3. ✗ Agreement
4. ✓ Compliance

Question Number : 94 Question Id : 7368154742 Question Type : MCQ Option Shuffling : Yes Display Question Number : Yes
Single Line Question Option : No Option Orientation : Vertical

Correct : 1 Wrong : 0.25

A key word is given below. Choose the word closest to it in its meaning {synonym}. Pay attention to how the word would be used to, if required:

Obedience

Options :

1. ✗ Reverence
2. ✗ Obligation
3. ✗ Agreement
4. ✓ Compliance

Question Number : 95 Question Id : 7368154743 Question Type : MCQ Option Shuffling : Yes Display Question Number : Yes
Single Line Question Option : No Option Orientation : Vertical

Correct : 1 Wrong : 0.25

A key word is given below. Choose the word closest to it in its meaning {synonym}. Pay attention to how the word would be used to, if required:

Blame [adjective]

Options :

1. ✓ Guilt
2. ✗ Fault
3. ✗ Rebuke
4. ✗ Criticism

Question Number : 95 Question Id : 7368154743 Question Type : MCQ Option Shuffling : Yes Display Question Number : Yes
Single Line Question Option : No Option Orientation : Vertical

Correct : 1 Wrong : 0.25

A key word is given below. Choose the word closest to it in its meaning {synonym}. Pay attention to how the word would be used to, if required:

Blame [adjective]

Options :

1. ✓ Guilt
2. ✗ Fault
3. ✗ Rebuke
4. ✗ Criticism

Question Number : 96 Question Id : 7368154744 Question Type : MCQ Option Shuffling : Yes Display Question Number : Yes
Single Line Question Option : No Option Orientation : Vertical

Correct : 1 Wrong : 0.25

A key word is given below. Choose the word which indicates the contradictory or opposite meaning {antonym} of the key word:

Unite

Options :

1. ✓ Separate
2. ✗ Smash
3. ✗ Detach
4. ✗ Scatter

Question Number : 96 Question Id : 7368154744 Question Type : MCQ Option Shuffling : Yes Display Question Number : Yes
Single Line Question Option : No Option Orientation : Vertical

Correct : 1 Wrong : 0.25

A key word is given below. Choose the word which indicates the contradictory or opposite meaning {antonym} of the key word:

Unite

Options :

1. ✓ Separate
2. ✗ Smash
3. ✗ Detach
4. ✗ Scatter

Question Number : 97 Question Id : 7368154745 Question Type : MCQ Option Shuffling : Yes Display Question Number : Yes
Single Line Question Option : No Option Orientation : Vertical

Correct : 1 Wrong : 0.25

A key word is given below. Choose the word which indicates the contradictory or opposite meaning {antonym} of the key word:

Concord

Options :

1. ✗ Disparity
2. ✓ Conflict
3. ✗ Friction
4. ✗ Quarrel

Question Number : 97 Question Id : 7368154745 Question Type : MCQ Option Shuffling : Yes Display Question Number : Yes
Single Line Question Option : No Option Orientation : Vertical

Correct : 1 Wrong : 0.25

A key word is given below. Choose the word which indicates the contradictory or opposite meaning {antonym} of the key word:

Concord

Options :

1. ✗ Disparity
2. ✓ Conflict
3. ✗ Friction
4. ✗ Quarrel

Question Number : 98 Question Id : 7368154746 Question Type : MCQ Option Shuffling : Yes Display Question Number : Yes
Single Line Question Option : No Option Orientation : Vertical

Correct : 1 Wrong : 0.25

Given below is a set of four words. One of the four words is spelled wrongly. Choose the word that has been spelled wrongly.

Options :

1. ✘ Churchwarden
2. ✔ Kindergarden
3. ✘ Overburden
4. ✘ Unburden

Question Number : 98 Question Id : 7368154746 Question Type : MCQ Option Shuffling : Yes Display Question Number : Yes
Single Line Question Option : No Option Orientation : Vertical

Correct : 1 Wrong : 0.25

Given below is a set of four words. One of the four words is spelled wrongly. Choose the word that has been spelled wrongly.

Options :

1. ✘ Churchwarden
2. ✔ Kindergarden
3. ✘ Overburden
4. ✘ Unburden

Question Number : 99 Question Id : 7368154747 Question Type : MCQ Option Shuffling : Yes Display Question Number : Yes
Single Line Question Option : No Option Orientation : Vertical

Correct : 1 Wrong : 0.25

Given below is a set of four words. One of the four words is spelled wrongly. Choose the word that has been spelled wrongly.

Options :

1. ✘ Abolitionary
2. ✘ Accessary
3. ✘ Adversary
4. ✔ Ancillary

Question Number : 99 Question Id : 7368154747 Question Type : MCQ Option Shuffling : Yes Display Question Number : Yes
Single Line Question Option : No Option Orientation : Vertical

Correct : 1 Wrong : 0.25

Given below is a set of four words. One of the four words is spelled wrongly. Choose the word that has been spelled wrongly.

Options :

1. ✘ Abolitionary
2. ✘ Accessary
3. ✘ Adversary
4. ✔ Ancillary

Question Number : 100 Question Id : 7368154748 Question Type : MCQ Option Shuffling : Yes Display Question Number : Yes
Single Line Question Option : No Option Orientation : Vertical

Correct : 1 Wrong : 0.25

Given below is a set of four words. Choose the word with the correct spelling:

Options :

1. ✘ Microtechnique
2. ✘ Mistique
3. ✔ Oblique
4. ✘ Phiysique

Question Number : 100 Question Id : 7368154748 Question Type : MCQ Option Shuffling : Yes Display Question Number : Yes
Single Line Question Option : No Option Orientation : Vertical

Correct : 1 Wrong : 0.25

Given below is a set of four words. Choose the word with the correct spelling:

Options :

1. ✘ Microtechnique
2. ✘ Mistique
3. ✔ Oblique
4. ✘ Phiysique

General Intelligence

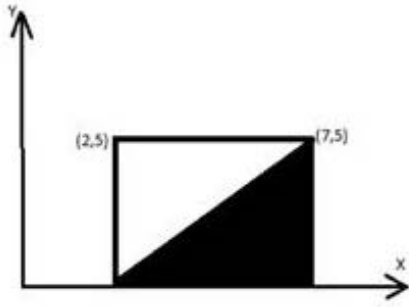
Section Id :	73681593
Section Number :	3
Section type :	Online
Mandatory or Optional:	Mandatory
Number of Questions:	50
Number of Questions to be attempted:	50
Section Marks:	50
Display Number Panel:	Yes
Group All Questions:	No

Sub-Section Number:	1
Sub-Section Id:	736815141
Question Shuffling Allowed :	Yes

Question Number : 101 Question Id : 7368154749 Question Type : MCQ Option Shuffling : Yes Display Question Number : Yes
Single Line Question Option : No Option Orientation : Vertical

Correct : 1 Wrong : 0.25

Find the area of shaded region.



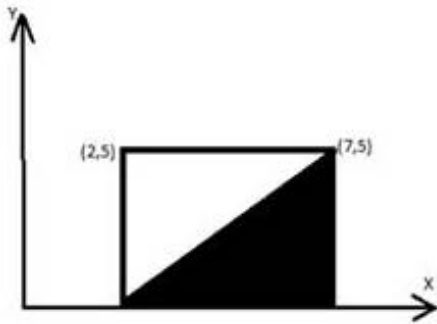
Options :

1. ✘ 34.23 unit
2. ✘ 25 unit
3. ✘ $5\sqrt{2}$ unit
4. ✔ 12.5 unit

Question Number : 101 Question Id : 7368154749 Question Type : MCQ Option Shuffling : Yes Display Question Number : Yes Single Line Question Option : No Option Orientation : Vertical

Correct : 1 Wrong : 0.25

छायांकित क्षेत्र का क्षेत्रफल ज्ञात करे ।



Options :

1. ✘ 34.23 यूनिट
2. ✘ 25 यूनिट
3. ✘ $5\sqrt{2}$ यूनिट
4. ✔ 12.5 यूनिट

Question Number : 102 Question Id : 7368154750 Question Type : MCQ Option Shuffling : Yes Display Question Number : Yes Single Line Question Option : No Option Orientation : Vertical

Correct : 1 Wrong : 0.25

If volume of a spherical ball is 9160.884 cm^3 , what will be the radius of the ball?

Options :

1. ✔ 19.30 cm
2. ✘ 9 cm
3. ✘ 71 cm
4. ✘ 17 cm

Question Number : 102 Question Id : 7368154750 Question Type : MCQ Option Shuffling : Yes Display Question Number : Yes
Single Line Question Option : No Option Orientation : Vertical

Correct : 1 Wrong : 0.25

यदि एक गोलाकार गेंद का आयतन 9160.884 घन से.मी. है, तो गेंद की त्रिज्या क्या होगी?

Options :

1. ✓ 19.30 से.मी.
2. ✗ 9 से.मी.
3. ✗ 71 से.मी.
4. ✗ 17 से.मी.

Note: For this question, discrepancy is found in question/answer. Full Marks is being awarded to all candidates.

Question Number : 103 Question Id : 7368154751 Question Type : MCQ Option Shuffling : Yes Display Question Number : Yes
Single Line Question Option : No Option Orientation : Vertical

Correct : 1 Wrong : 0.25

If A is +, B is X, C is - and D is /, then what will be the value of (6 A 5 C 14 D 7 B 2)?

Options :

1. ✓ 30
2. ✗ 14
3. ✗ 12
4. ✗ 18

Note: For this question, discrepancy is found in question/answer. Full Marks is being awarded to all candidates.

Question Number : 103 Question Id : 7368154751 Question Type : MCQ Option Shuffling : Yes Display Question Number : Yes
Single Line Question Option : No Option Orientation : Vertical

Correct : 1 Wrong : 0.25

यदि A '+' है, B 'X' है, C '-' है और D '/' है, तो (6 A 5 C 14 D 7 B 2) का मान क्या होगा?

Options :

1. ✓ 30
2. ✗ 14
3. ✗ 12
4. ✗ 18

Note: For this question, discrepancy is found in question/answer. Full Marks is being awarded to all candidates.

Question Number : 104 Question Id : 7368154752 Question Type : MCQ Option Shuffling : Yes Display Question Number : Yes
Single Line Question Option : No Option Orientation : Vertical

Correct : 1 Wrong : 0.25

If sunflower is called filter, filter is called van, van is called egg and egg is called Laptop, then what we can use as a transport medium?

Options :

1. ✓ Egg

2. ✘ Filter
3. ✘ Sunflower
4. ✘ Laptop

Question Number : 104 Question Id : 7368154752 Question Type : MCQ Option Shuffling : Yes Display Question Number : Yes
Single Line Question Option : No Option Orientation : Vertical

Correct : 1 Wrong : 0.25

यदि सूरजमुखी को फिल्टर कहेंगे, फिल्टर को वैन कहेंगे, वैन को अंडा कहेंगे और अंडे को लैपटॉप कहेंगे, तो हम परिवहन के तौर पर किसे इस्तेमाल कर सकते हैं?

Options :

1. ✔ अंडे
2. ✘ फिल्टर
3. ✘ सूरजमुखी
4. ✘ लैपटॉप

Question Number : 105 Question Id : 7368154753 Question Type : MCQ Option Shuffling : Yes Display Question Number : Yes
Single Line Question Option : No Option Orientation : Vertical

Correct : 1 Wrong : 0.25

Compute the following:

$$4235+2234+9.4567+90.342+7.5=?$$

Options :

1. ✔ 6576.2987
2. ✘ 55678.09345
3. ✘ 9450.2234
4. ✘ 99087.123

Question Number : 105 Question Id : 7368154753 Question Type : MCQ Option Shuffling : Yes Display Question Number : Yes
Single Line Question Option : No Option Orientation : Vertical

Correct : 1 Wrong : 0.25

निम्नलिखित की गणना करें:

$$4235+2234+9.4567+90.342+7.5=?$$

Options :

1. ✔ 6576.2987
2. ✘ 55678.09345
3. ✘ 9450.2234
4. ✘ 99087.123

Question Number : 106 Question Id : 7368154754 Question Type : MCQ Option Shuffling : Yes Display Question Number : Yes
Single Line Question Option : No Option Orientation : Vertical

Correct : 1 Wrong : 0.25

Five girls are sitting in a row. Seema is right of Rajni and left to Geeta. Aneeta is sitting left to Rajni. Arti is between Rajni and Aneeta. Who is sitting immediate left to Arti?

Options :

1. ✘ Geeta
2. ✘ Seema
3. ✘ Rajni
4. ✔ Aneeta

Question Number : 106 Question Id : 7368154754 Question Type : MCQ Option Shuffling : Yes Display Question Number : Yes Single Line Question Option : No Option Orientation : Vertical

Correct : 1 Wrong : 0.25

पांच लड़कियाँ एक पंक्ति में बैठी हैं। सीमा, रजनी के दायें और गीता के बायें बैठी है। अनीता, रजनी के बाईं ओर बैठी है। आरती, रजनी और अनीता के बीच में बैठी है। आरती के बाईं ओर कौन बैठा है?

Options :

1. ✘ गीता
2. ✘ सीमा
3. ✘ रजनी
4. ✔ अनीता

Question Number : 107 Question Id : 7368154755 Question Type : MCQ Option Shuffling : Yes Display Question Number : Yes Single Line Question Option : No Option Orientation : Vertical

Correct : 1 Wrong : 0.25

Compute the following:

$$89/6+56 \times 9-32$$

Options :

1. ✘ 453
2. ✘ 678.44
3. ✔ 486.83
4. ✘ 345.112

Question Number : 107 Question Id : 7368154755 Question Type : MCQ Option Shuffling : Yes Display Question Number : Yes Single Line Question Option : No Option Orientation : Vertical

Correct : 1 Wrong : 0.25

निम्नलिखित की गणना करें:

$$89/6+56 \times 9-32$$

Options :

1. ✘ 453
2. ✘ 678.44
3. ✔ 486.83

4. ✘ 345.112

Question Number : 108 Question Id : 7368154756 Question Type : MCQ Option Shuffling : Yes Display Question Number : Yes
Single Line Question Option : No Option Orientation : Vertical

Correct : 1 Wrong : 0.25

Compute the following:

$$890+123-88=234+\dots\dots\dots+134$$

Options :

1. ✘ 575
2. ✘ 456
3. ✘ 345
4. ✔ 557

Question Number : 108 Question Id : 7368154756 Question Type : MCQ Option Shuffling : Yes Display Question Number : Yes
Single Line Question Option : No Option Orientation : Vertical

Correct : 1 Wrong : 0.25

निम्नलिखित की गणना करें:

$$890+123-88=234+\dots\dots\dots+134$$

Options :

1. ✘ 575
2. ✘ 456
3. ✘ 345
4. ✔ 557

Question Number : 109 Question Id : 7368154757 Question Type : MCQ Option Shuffling : Yes Display Question Number : Yes
Single Line Question Option : No Option Orientation : Vertical

Correct : 1 Wrong : 0.25

Compute the following:

$$(111)^2+(999)^2=?$$

Options :

1. ✔ 1010322
2. ✘ 9906654
3. ✘ 8989796
4. ✘ 8982846

Question Number : 109 Question Id : 7368154757 Question Type : MCQ Option Shuffling : Yes Display Question Number : Yes
Single Line Question Option : No Option Orientation : Vertical

Correct : 1 Wrong : 0.25

निम्नलिखित की गणना करें:

$$(111)^2 + (999)^2=?$$

Options :

1. ✔ 1010322
2. ✘ 9906654

3. ✘ 8989796

4. ✘ 8982846

Question Number : 110 Question Id : 7368154758 Question Type : MCQ Option Shuffling : Yes Display Question Number : Yes
Single Line Question Option : No Option Orientation : Vertical

Correct : 1 Wrong : 0.25

The Principal of the Girl's college banned the entry of boys in the college campus. What might be a possible cause for such a decision:

Options :

1. ✘ Girls competing with the boys in every field

2. ✘ Teachers hate the boys

3. ✔ Growth in Eve Teasing Incidents

4. ✘ Area of college campus is small

Question Number : 110 Question Id : 7368154758 Question Type : MCQ Option Shuffling : Yes Display Question Number : Yes
Single Line Question Option : No Option Orientation : Vertical

Correct : 1 Wrong : 0.25

कन्याशाला के प्राधानाचार्य ने कॉलेज परिसर में लड़कों के आने पर रोक लगा दी। इस फैसले के लिए संभावित कारण क्या होना चाहिए?

Options :

1. ✘ हर क्षेत्र में लड़कियों की लड़कों के साथ प्रतिस्पर्धा

2. ✘ शिक्षक लड़कों से नफरत करते हैं

3. ✔ छेड़छाड़ की घटनाओं में वृद्धि

4. ✘ कॉलेज का परिसर छोटा है

Question Number : 111 Question Id : 7368154759 Question Type : MCQ Option Shuffling : Yes Display Question Number : Yes
Single Line Question Option : No Option Orientation : Vertical

Correct : 1 Wrong : 0.25

The Collector gave the order of banning DJ's after 10 p.m. He might have taken such a decision because:

Options :

1. ✘ He personally feels that DJ's are very loud

2. ✔ It affects the personal lives of people in the society

3. ✘ It causes air pollution

4. ✘ It causes sound pollution

Question Number : 111 Question Id : 7368154759 Question Type : MCQ Option Shuffling : Yes Display Question Number : Yes
Single Line Question Option : No Option Orientation : Vertical

Correct : 1 Wrong : 0.25

कलेक्टर ने 10:00 बजे के बाद डी. जे. पर प्रतिबंध लगाने का आदेश दिया। उनके इस तरह के निर्णय के लिये क्या कारण हो सकता है?

Options :

1. ✘ व्यक्तिगत तौर पर उनका मानना है कि डीजे बहुत ज्यादा आवाज करता है।
2. ✔ यह समाज में लोगों के निजी जीवन को प्रभावित करता है
3. ✘ इससे वायु प्रदूषण होता है
4. ✘ इससे ध्वनि प्रदूषण होता है

Question Number : 112 Question Id : 7368154760 Question Type : MCQ Option Shuffling : Yes Display Question Number : Yes Single Line Question Option : No Option Orientation : Vertical

Correct : 1 Wrong : 0.25

One of your neighbour is playing loud music. It is disturbing you in your work. What will you do?

Options :

1. ✘ Let him play. He is playing it in his home and we are no one to show agitation
2. ✘ Go and beat him up
3. ✔ Go and tell him to slow down the volume as it disturbs
4. ✘ Report to the police

Question Number : 112 Question Id : 7368154760 Question Type : MCQ Option Shuffling : Yes Display Question Number : Yes Single Line Question Option : No Option Orientation : Vertical

Correct : 1 Wrong : 0.25

आपका एक पड़ोसी तेज आवाज में संगीत सुन रहा है। यह आपको काम करने में परेशानी पैदा कर रहा है। आप क्या करेंगे?

Options :

1. ✘ उसे बजाने देंगे। वह अपने घर में बजा रहा है और हम उसे रोकने वाले कोई नहीं होते
2. ✘ उसे जाकर मारेंगे
3. ✔ उसे आवाज कम करने के लिए कहेंगे
4. ✘ पुलिस में रिपोर्ट करेंगे

Question Number : 113 Question Id : 7368154761 Question Type : MCQ Option Shuffling : Yes Display Question Number : Yes Single Line Question Option : No Option Orientation : Vertical

Correct : 1 Wrong : 0.25

In one of your friend's marriage, drinking water got exhausted. What will you do?

Options :

1. ✔ Call the manager and tell him to arrange it quickly
2. ✘ You yourself will go as you think that manager is lazy

3. ✘ You won't do anything as its not your marriage
4. ✘ Tell your friend who is getting married to arrange water

Question Number : 113 Question Id : 7368154761 Question Type : MCQ Option Shuffling : Yes Display Question Number : Yes
Single Line Question Option : No Option Orientation : Vertical

Correct : 1 Wrong : 0.25

आपके दोस्त की शादी में पीने का पानी समाप्त हो जाता है। आप क्या करेंगे?

Options :

1. ✔ मैनेजर को बुलाकर उसे जल्दी से पानी की व्यवस्था करने को कहेंगे
2. ✘ आप स्वयं ही जायेंगे क्योंकि आपको लगता है कि प्रबंधक आलसी है
3. ✘ आप कुछ नहीं करेंगे क्योंकि आप की शादी नहीं है
4. ✘ अपने दोस्त को ही पानी की व्यवस्था करने को कहेंगे जिसकी शादी हो रही है

Question Number : 114 Question Id : 7368154762 Question Type : MCQ Option Shuffling : Yes Display Question Number : Yes
Single Line Question Option : No Option Orientation : Vertical

Correct : 1 Wrong : 0.25

You failed in one of the subjects in the Board exams. Everyone is making fun of you.
What will you do?

Options :

1. ✔ Try hard again to get it clear
2. ✘ Tell your parents that you won't study as your friends make fun of you
3. ✘ You will lodge a complaint in the police station against your friends
4. ✘ You will never tell your parents about this

Question Number : 114 Question Id : 7368154762 Question Type : MCQ Option Shuffling : Yes Display Question Number : Yes
Single Line Question Option : No Option Orientation : Vertical

Correct : 1 Wrong : 0.25

आप बोर्ड की परीक्षा में 1 विषय में अनुत्तीर्ण हो गए। सब आपका मज़ाक उड़ा रहे हैं।
आप क्या करेंगे?

Options :

1. ✔ फिर कठिन प्रयास करेंगे
अपने माता-पिता से कहेंगे कि आपके दोस्त के द्वारा मज़ाक उड़ाने के कारण मैं अध्ययन नहीं कर पाऊँगा
2. ✘ नहीं कर पाऊँगा
3. ✘ आप अपने दोस्तों के खिलाफ पुलिस में शिकायत दर्ज करेंगे
4. ✘ आप इस बारे में अपने माता पिता को कभी नहीं बताएँगे

Question Number : 115 Question Id : 7368154763 Question Type : MCQ Option Shuffling : Yes Display Question Number : Yes
Single Line Question Option : No Option Orientation : Vertical

Correct : 1 Wrong : 0.25

You came up first in the office. The office is dirty. What will you do?

Options :

1. ✘ Take a broom and clean it by yourself
2. ✔ Call the sweeper, scold him for not doing his work on time and tell him to fix it soon.
3. ✘ Let everyone arrive at the office and let it be cleaned by them
4. ✘ Let it be as it is.

Question Number : 115 Question Id : 7368154763 Question Type : MCQ Option Shuffling : Yes Display Question Number : Yes
Single Line Question Option : No Option Orientation : Vertical

Correct : 1 Wrong : 0.25

आप कार्यालय में सर्वप्रथम आये हैं। कार्यालय गंदा है। आप क्या करेंगे?

Options :

1. ✘ झाड़ू ले कर स्वयं ही साफ करेंगे
2. ✔ सफाई कर्मचारी को समय पर अपना काम नहीं करने पर उसे डाटेंगे और उसे बताएँगे कि जल्द ही इसे ठीक करें।
3. ✘ सभी कर्मचारियों को कार्यालय में आ जाने देंगे और इसे सबसे साफ करवाएँगे
4. ✘ जैसे को तैसा रहने देंगे

Question Number : 116 Question Id : 7368154764 Question Type : MCQ Option Shuffling : Yes Display Question Number : Yes
Single Line Question Option : No Option Orientation : Vertical

Correct : 1 Wrong : 0.25

Statement: The Chancellor said that the Written examination system must be changed to the Online MCQ examination in order to check the real caliber of the students.

Argument 1: There should be no examinations

Argument 2: There is no need to alter examination system

Options :

1. ✘ Argument 1 is strong
2. ✘ Argument 2 is strong
3. ✘ Both the Arguments are strong
4. ✔ Neither of the Arguments are strong

Question Number : 116 Question Id : 7368154764 Question Type : MCQ Option Shuffling : Yes Display Question Number : Yes
Single Line Question Option : No Option Orientation : Vertical

Correct : 1 Wrong : 0.25

कथन : चांसलर ने कहा कि लिखित परीक्षा प्रणाली को ऑनलाइन MCQ परीक्षा में परिवर्तित किया जाना चाहिए जिससे छात्रों का क्षमता ज्ञात होगी।

तर्क 1 : कोई परीक्षा नहीं होना चाहिए

तर्क 2 : परीक्षा प्रणाली में परिवर्तन करने की कोई जरूरत नहीं है

Options :

1. ✘ तर्क 1 मजबूत है
2. ✘ तर्क 2 मजबूत है
3. ✘ दोनों तर्क मजबूत है
4. ✔ कोई भी तर्क मजबूत नहीं है

Question Number : 117 Question Id : 7368154765 Question Type : MCQ Option Shuffling : Yes Display Question Number : Yes
Single Line Question Option : No Option Orientation : Vertical

Correct : 1 Wrong : 0.25

Statement: Supreme Court ordered the state government to stay away from Central government funded institutes

Argument 1: There are no State government institutes

Argument 2: State government is trying to misuse the Central Government Funded Institutes

Options :

1. ✘ Argument 1 is strong
2. ✔ Argument 2 is strong
3. ✘ Both the Arguments are strong
4. ✘ Neither of the Arguments are strong

Question Number : 117 Question Id : 7368154765 Question Type : MCQ Option Shuffling : Yes Display Question Number : Yes
Single Line Question Option : No Option Orientation : Vertical

Correct : 1 Wrong : 0.25

कथन: सुप्रीम कोर्ट ने राज्य सरकार को केंद्र सरकार द्वारा वित्तपोषित संस्थानों से दूर रहने का आदेश दिया है

तर्क 1: राज्य सरकार की कोई भी संस्थानें नहीं है

तर्क 2 : राज्य सरकार, केंद्र सरकार द्वारा वित्तपोषित संस्थानों का दुरुपयोग करने की कोशिश कर रहा है

Options :

1. ✘ तर्क 1 मजबूत है
2. ✔ तर्क 2 मजबूत है
3. ✘ दोनों तर्क मजबूत है
4. ✘ कोई भी तर्क मजबूत नहीं है

Question Number : 118 Question Id : 7368154766 Question Type : MCQ Option Shuffling : Yes Display Question Number : Yes
Single Line Question Option : No Option Orientation : Vertical

Correct : 1 Wrong : 0.25

Statement: Until the school achieves social equality, studies have no meaning:

Argument 1: Social equality amongst students in schools is must for effective learning

Argument 2: There is no relation between social equality and studies in students

Options :

1. ✓ Argument 1 is strong
2. ✗ Argument 2 is strong
3. ✗ Both the Arguments are strong
4. ✗ Neither of the Arguments are strong

Question Number : 118 Question Id : 7368154766 Question Type : MCQ Option Shuffling : Yes Display Question Number : Yes
Single Line Question Option : No Option Orientation : Vertical

Correct : 1 Wrong : 0.25

कथन : जब तक स्कूल सामाजिक समानता नहीं पा लेता, पढ़ाई का कोई अर्थ नहीं है

तर्क 1 : प्रभावी शिक्षण के लिए स्कूलों में छात्रों के बीच सामाजिक समानता जरूरी है

तर्क 2 : सामाजिक समानता और छात्रों की पढ़ाई के बीच कोई संबंध नहीं है

Options :

1. ✓ तर्क 1 मजबूत है
2. ✗ तर्क 2 मजबूत है
3. ✗ दोनों तर्क मजबूत है
4. ✗ कोई भी तर्क मजबूत नहीं है

Question Number : 119 Question Id : 7368154767 Question Type : MCQ Option Shuffling : Yes Display Question Number : Yes
Single Line Question Option : No Option Orientation : Vertical

Correct : 1 Wrong : 0.25

Statement: The new Eve teasing law is been welcomed by every section of the society.

Argument 1: Eve Teasing has become a disgrace to the society in the past few days

Argument 2: The new law is very efficient in controlling eve teasing incidents

Options :

1. ✗ Argument 1 is strong
2. ✗ Argument 2 is strong
3. ✓ Both the Arguments are strong
4. ✗ Neither of the Arguments are strong

Question Number : 119 Question Id : 7368154767 Question Type : MCQ Option Shuffling : Yes Display Question Number : Yes
Single Line Question Option : No Option Orientation : Vertical

Correct : 1 Wrong : 0.25

कथन: समाज के हर वर्ग ने छेड़छाड़ के खिलाफ बने नये कानून को स्वीकार किया है

तर्क 1 : पिछले कुछ दिनों में छेड़छाड़ समाज के लिए एक कलंक बन गया है

तर्क 2 : नए कानून छेड़छाड़ की घटनाओं को नियंत्रित करने में बहुत ही प्रभावी है

Options :

1. ✘ तर्क 1 मजबूत है
2. ✘ तर्क 2 मजबूत है
3. ✔ दोनों तर्क मजबूत है
4. ✘ कोई तर्क मजबूत नहीं है

Question Number : 120 Question Id : 7368154768 Question Type : MCQ Option Shuffling : Yes Display Question Number : Yes
Single Line Question Option : No Option Orientation : Vertical

Correct : 1 Wrong : 0.25

Statement: NCERT books have been made compulsory in the schools

Argument 1: Students are forced to study.

Argument 2: NCERT books are not efficient to match the level of competition in the school

Options :

1. ✘ Argument 1 is strong
2. ✘ Argument 2 is strong
3. ✘ Both the Arguments are strong
4. ✔ Neither of the Arguments are strong

Question Number : 120 Question Id : 7368154768 Question Type : MCQ Option Shuffling : Yes Display Question Number : Yes
Single Line Question Option : No Option Orientation : Vertical

Correct : 1 Wrong : 0.25

कथन : विद्यालयों में NCERT की किताबों को अनिवार्य कर दिया है

तर्क 1 : छात्रों को पढ़ाई करने के लिए मजबूर किया जा रहा है

तर्क 2: NCERT की किताबें विद्यालयों में प्रतियोगिता के स्तर हेतु उचित नहीं है

Options :

1. ✘ तर्क 1 मजबूत है
2. ✘ तर्क 2 मजबूत है
3. ✘ दोनों तर्क मजबूत है
4. ✔ कोई तर्क मजबूत नहीं है

Question Number : 121 Question Id : 7368154769 Question Type : MCQ Option Shuffling : Yes Display Question Number : Yes
Single Line Question Option : No Option Orientation : Vertical

Correct : 1 Wrong : 0.25

Ashish's daughter-in-law is the mother-in-law of Seema. What is Seema's husband to Ashish?

Options :

1. ✘ Son
2. ✔ Grandson
3. ✘ Brother
4. ✘ Father

Question Number : 121 Question Id : 7368154769 Question Type : MCQ Option Shuffling : Yes Display Question Number : Yes Single Line Question Option : No Option Orientation : Vertical

Correct : 1 Wrong : 0.25

आशीष की बहू सीमा की सास है। सीमा के पति का आशीष से क्या रिश्ता है?

Options :

1. ✘ बेटा
2. ✔ नाती
3. ✘ भाई
4. ✘ पिता

Question Number : 122 Question Id : 7368154770 Question Type : MCQ Option Shuffling : Yes Display Question Number : Yes Single Line Question Option : No Option Orientation : Vertical

Correct : 1 Wrong : 0.25

What will be the relation of your son-in-law with your daughter-in-law's husband's mother?

Options :

1. ✘ Son
2. ✔ Son-in-law
3. ✘ Brother-in-law
4. ✘ Brother

Question Number : 122 Question Id : 7368154770 Question Type : MCQ Option Shuffling : Yes Display Question Number : Yes Single Line Question Option : No Option Orientation : Vertical

Correct : 1 Wrong : 0.25

आपके दामाद का आपकी बहू के पति की माँ से क्या रिश्ता होगा?

Options :

1. ✘ बेटा
2. ✔ दामाद
3. ✘ देवर
4. ✘ भाई

Question Number : 123 Question Id : 7368154771 Question Type : MCQ Option Shuffling : Yes Display Question Number : Yes Single Line Question Option : No Option Orientation : Vertical

Correct : 1 Wrong : 0.25

Jabali's only son is the husband of Mohini's sister. What will be the relation of Mohini's brother with the son of Jabali's son:

Options :

1. ✘ Paternal Uncle
2. ✔ Maternal Uncle
3. ✘ Brother
4. ✘ Brother-in-law

Question Number : 123 Question Id : 7368154771 Question Type : MCQ Option Shuffling : Yes Display Question Number : Yes
Single Line Question Option : No Option Orientation : Vertical

Correct : 1 Wrong : 0.25

जबाली का इकलौते बेटा मोहिनी की बहन का पति है। जबाली के बेटे के साथ मोहिनी के भाई का रिश्ता क्या होगा?

Options :

1. ✘ चाचा
2. ✔ मामा
3. ✘ भाई
4. ✘ जीजा

Question Number : 124 Question Id : 7368154772 Question Type : MCQ Option Shuffling : Yes Display Question Number : Yes
Single Line Question Option : No Option Orientation : Vertical

Correct : 1 Wrong : 0.25

Pradeep's brother-in-law has two sons. The two sons have a sister named Astha. Who is Pradeep to Astha?

Options :

1. ✔ Paternal Uncle
2. ✘ Maternal Uncle
3. ✘ Grandfather
4. ✘ Cannot be predicted

Question Number : 124 Question Id : 7368154772 Question Type : MCQ Option Shuffling : Yes Display Question Number : Yes
Single Line Question Option : No Option Orientation : Vertical

Correct : 1 Wrong : 0.25

प्रदीप के साले के दो बेटे हैं। दोनों बेटों की आस्था नाम की एक बहन है। प्रदीप आस्था के लिए कौन है?

Options :

1. ✔ चाचा
2. ✘ मामा
3. ✘ दादा
4. ✘ बताया नहीं जा सकता

Question Number : 125 Question Id : 7368154773 Question Type : MCQ Option Shuffling : Yes Display Question Number : Yes
Single Line Question Option : No Option Orientation : Vertical

Correct : 1 Wrong : 0.25

Animesh is the brother of the mother of Arundhati's daughter. Who is Arundhati to Animesh?

Options :

1. ✘ Niece
2. ✔ Sister
3. ✘ Sister-in-law
4. ✘ Mother

Question Number : 125 Question Id : 7368154773 Question Type : MCQ Option Shuffling : Yes Display Question Number : Yes
Single Line Question Option : No Option Orientation : Vertical

Correct : 1 Wrong : 0.25

अनिमेष, अरुंधति की बेटी की माँ का भाई है। अरुंधति, अनिमेष के लिए कौन है?

Options :

1. ✘ भांजी
2. ✔ बहन
3. ✘ ननद
4. ✘ माँ

Question Number : 126 Question Id : 7368154774 Question Type : MCQ Option Shuffling : Yes Display Question Number : Yes
Single Line Question Option : No Option Orientation : Vertical

Correct : 1 Wrong : 0.25

Find the odd one out from the given alternatives

Options :

1. ✔ Chess
2. ✘ Golf
3. ✘ Cricket
4. ✘ Football

Question Number : 126 Question Id : 7368154774 Question Type : MCQ Option Shuffling : Yes Display Question Number : Yes
Single Line Question Option : No Option Orientation : Vertical

Correct : 1 Wrong : 0.25

दिये गए विकल्पों में से विषम ज्ञात करें:

Options :

1. ✔ शतरंज
2. ✘ गोल्फ़
3. ✘ क्रिकेट
4. ✘ फुटबॉल

Question Number : 127 Question Id : 7368154775 Question Type : MCQ Option Shuffling : Yes Display Question Number : Yes
Single Line Question Option : No Option Orientation : Vertical

Correct : 1 Wrong : 0.25

Which one of following keywords/phrases differ from the others in the given options:

Options :

1. ✘ ABC
2. ✘ BDF
3. ✘ CFI
4. ✔ DGJ

Question Number : 127 Question Id : 7368154775 Question Type : MCQ Option Shuffling : Yes Display Question Number : Yes
Single Line Question Option : No Option Orientation : Vertical

Correct : 1 Wrong : 0.25

दिये गए विकल्पों में से कौन सा शब्द/वाक्यांश दूसरों से अलग है?

Options :

1. ✘ ABC
2. ✘ BDF
3. ✘ CFI
4. ✔ DGJ

Question Number : 128 Question Id : 7368154776 Question Type : MCQ Option Shuffling : Yes Display Question Number : Yes
Single Line Question Option : No Option Orientation : Vertical

Correct : 1 Wrong : 0.25

In the given alternatives, one of the numbers is dissimilar from the other given alternatives.

Find the one which is dissimilar:

Options :

1. ✘ 963
2. ✔ 421
3. ✘ 321
4. ✘ 642

Question Number : 128 Question Id : 7368154776 Question Type : MCQ Option Shuffling : Yes Display Question Number : Yes
Single Line Question Option : No Option Orientation : Vertical

Correct : 1 Wrong : 0.25

दिये गए विकल्पों में, एक संख्या अन्य विकल्पों से अलग है, उस संख्या का पता लगायें।

Options :

1. ✘ 963
2. ✔ 421
3. ✘ 321
4. ✘ 642

Question Number : 129 Question Id : 7368154777 Question Type : MCQ Option Shuffling : Yes Display Question Number : Yes
Single Line Question Option : No Option Orientation : Vertical

Correct : 1 Wrong : 0.25

Find the odd one out from the given alternatives:

Options :

1. ✘ Cub
2. ✘ Kitten
3. ✘ Puppy
4. ✔ Cow

Question Number : 129 Question Id : 7368154777 Question Type : MCQ Option Shuffling : Yes Display Question Number : Yes
Single Line Question Option : No Option Orientation : Vertical

Correct : 1 Wrong : 0.25

दिये गए विकल्पों में से विषम ज्ञात करें:

Options :

1. ✘ शावक
2. ✘ बिलौटा
3. ✘ पिल्ला
4. ✔ गाय

Question Number : 130 Question Id : 7368154778 Question Type : MCQ Option Shuffling : Yes Display Question Number : Yes
Single Line Question Option : No Option Orientation : Vertical

Correct : 1 Wrong : 0.25

Which one of following keywords/phrases differ from the others in the given options?

Options :

1. ✘ DFI
2. ✘ ACF
3. ✔ CFI
4. ✘ BDG

Question Number : 130 Question Id : 7368154778 Question Type : MCQ Option Shuffling : Yes Display Question Number : Yes
Single Line Question Option : No Option Orientation : Vertical

Correct : 1 Wrong : 0.25

निम्नलिखित में से कौन सा शब्द/वाक्यांश दिए गए विकल्पों में दूसरों से भिन्न है?

Options :

1. ✘ DFI
2. ✘ ACF
3. ✔ CFI
4. ✘ BDG

Question Number : 131 Question Id : 7368154779 Question Type : MCQ Option Shuffling : Yes Display Question Number : Yes
Single Line Question Option : No Option Orientation : Vertical

Correct : 1 Wrong : 0.25

Select a figure amongst the Answer Figures which will continue the same series as established by the three Problem Figures :



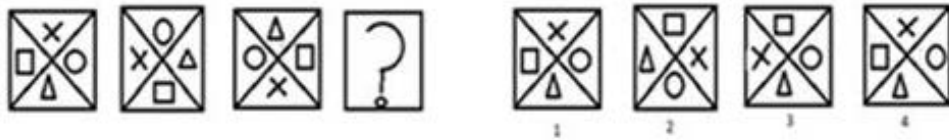
Options :

- 1. ✘ 1
- 2. ✔ 2
- 3. ✘ 3
- 4. ✘ 4

Question Number : 131 Question Id : 7368154779 Question Type : MCQ Option Shuffling : Yes Display Question Number : Yes Single Line Question Option : No Option Orientation : Vertical

Correct : 1 Wrong : 0.25

दिये गए विकल्पों में से वह आकृति चुनें जो तीन समस्याओं द्वारा स्थापित श्रृंखला को जारी रखेगा:



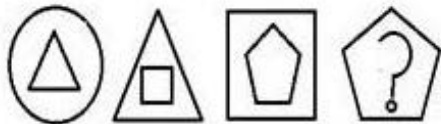
Options :

- 1. ✘ 1
- 2. ✔ 2
- 3. ✘ 3
- 4. ✘ 4

Question Number : 132 Question Id : 7368154780 Question Type : MCQ Option Shuffling : Yes Display Question Number : Yes Single Line Question Option : No Option Orientation : Vertical

Correct : 1 Wrong : 0.25

Choose the correct figure :



Options :

- 1. ✘
- 2. ✘
- 3. ✔

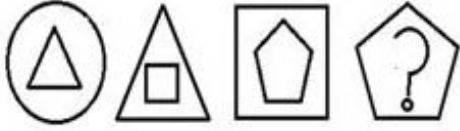


4. ✘

Question Number : 132 Question Id : 7368154780 Question Type : MCQ Option Shuffling : Yes Display Question Number : Yes
Single Line Question Option : No Option Orientation : Vertical

Correct : 1 Wrong : 0.25

सही आकृति चुनें:



Options :

1. ✘



2. ✘



3. ✔



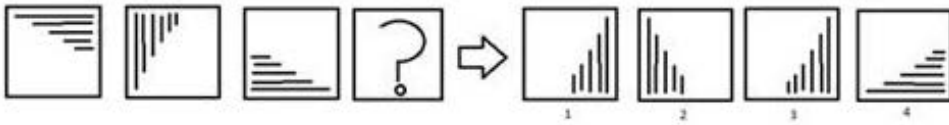
4. ✘



Question Number : 133 Question Id : 7368154781 Question Type : MCQ Option Shuffling : Yes Display Question Number : Yes
Single Line Question Option : No Option Orientation : Vertical

Correct : 1 Wrong : 0.25

Select a figure amongst the Answer Figures which will continue the same series as established by the three Problem Figures :



Options :

1. ✘ 2

2. ✔ 3

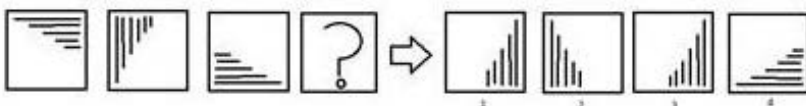
3. ✘ 4

4. ✘ 1

Question Number : 133 Question Id : 7368154781 Question Type : MCQ Option Shuffling : Yes Display Question Number : Yes
Single Line Question Option : No Option Orientation : Vertical

Correct : 1 Wrong : 0.25

दिए गए विकल्पों में से वह आकृति चुनें जो तीन चित्रों द्वारा स्थापित श्रृंखला जारी को रखेगा:



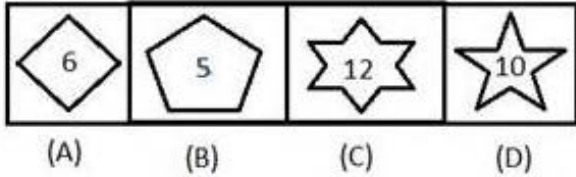
Options :

- 1. ✘ 2
- 2. ✔ 3
- 3. ✘ 4
- 4. ✘ 1

Question Number : 134 Question Id : 7368154782 Question Type : MCQ Option Shuffling : Yes Display Question Number : Yes
Single Line Question Option : No Option Orientation : Vertical

Correct : 1 Wrong : 0.25

Find the incorrect figure from the set of figures.



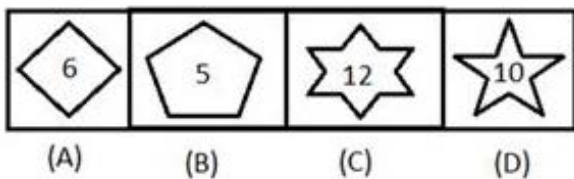
Options :

- 1. ✘ B
- 2. ✘ C
- 3. ✘ D
- 4. ✔ A

Question Number : 134 Question Id : 7368154782 Question Type : MCQ Option Shuffling : Yes Display Question Number : Yes
Single Line Question Option : No Option Orientation : Vertical

Correct : 1 Wrong : 0.25

आकृतियों के सेट में से गलत आकृति ज्ञात करें:



Options :

- 1. ✘ B
- 2. ✘ C
- 3. ✘ D
- 4. ✔ A

Question Number : 135 Question Id : 7368154783 Question Type : MCQ Option Shuffling : Yes Display Question Number : Yes
Single Line Question Option : No Option Orientation : Vertical

Correct : 1 Wrong : 0.25

Choose the correct figure.



Options :

1. ✓ A
2. ✗ P
3. ✗ Q
4. ✗ T

Question Number : 135 Question Id : 7368154783 Question Type : MCQ Option Shuffling : Yes Display Question Number : Yes Single Line Question Option : No Option Orientation : Vertical

Correct : 1 Wrong : 0.25

सही आकृति चुनें:



Options :

1. ✓ A
2. ✗ P
3. ✗ Q
4. ✗ T

Question Number : 136 Question Id : 7368154784 Question Type : MCQ Option Shuffling : Yes Display Question Number : Yes Single Line Question Option : No Option Orientation : Vertical

Correct : 1 Wrong : 0.25

Find out the missing term.

3,5,12,20,48,80,.....,320

Options :

1. ✗ 200
2. ✓ 192
3. ✗ 120
4. ✗ 348

Question Number : 136 Question Id : 7368154784 Question Type : MCQ Option Shuffling : Yes Display Question Number : Yes Single Line Question Option : No Option Orientation : Vertical

Correct : 1 Wrong : 0.25

रिक्त पद ज्ञात करें:

3,5,12,20,48,80,_____,320

Options :

1. ✗ 200

2. ✓ 192

3. ✗ 120

4. ✗ 348

Question Number : 137 Question Id : 7368154785 Question Type : MCQ Option Shuffling : Yes Display Question Number : Yes
Single Line Question Option : No Option Orientation : Vertical

Correct : 1 Wrong : 0.25

Find the missing term.

2,2,5,23,.....,280898

Options :

1. ✗ 328

2. ✗ 345

3. ✓ 530

4. ✗ 443

Question Number : 137 Question Id : 7368154785 Question Type : MCQ Option Shuffling : Yes Display Question Number : Yes
Single Line Question Option : No Option Orientation : Vertical

Correct : 1 Wrong : 0.25

रिक्त पद ज्ञात करें:

2,2,5,23_____280298

Options :

1. ✗ 328

2. ✗ 345

3. ✓ 530

4. ✗ 443

Question Number : 138 Question Id : 7368154786 Question Type : MCQ Option Shuffling : Yes Display Question Number : Yes
Single Line Question Option : No Option Orientation : Vertical

Correct : 1 Wrong : 0.25

Find the missing term.

2,10,30,.....,130

Options :

1. ✓ 68

2. ✗ 60

3. ✗ 50

4. ✗ 100

Question Number : 138 Question Id : 7368154786 Question Type : MCQ Option Shuffling : Yes Display Question Number : Yes
Single Line Question Option : No Option Orientation : Vertical

Correct : 1 Wrong : 0.25

रिक्त पद ज्ञात करें:

2,10,30,_____,130

Options :

1. ✓ 68
2. ✗ 60
3. ✗ 50
4. ✗ 100

Question Number : 139 Question Id : 7368154787 Question Type : MCQ Option Shuffling : Yes Display Question Number : Yes
Single Line Question Option : No Option Orientation : Vertical

Correct : 1 Wrong : 0.25

Find the missing term.

1,2,5,.....,17,26

Options :

1. ✗ 13
2. ✗ 12
3. ✗ 11
4. ✓ 10

Question Number : 139 Question Id : 7368154787 Question Type : MCQ Option Shuffling : Yes Display Question Number : Yes
Single Line Question Option : No Option Orientation : Vertical

Correct : 1 Wrong : 0.25

रिक्त पद ज्ञात करें:

1,2,5,_____,17,26

Options :

1. ✗ 13
2. ✗ 12
3. ✗ 11
4. ✓ 10

Question Number : 140 Question Id : 7368154788 Question Type : MCQ Option Shuffling : Yes Display Question Number : Yes
Single Line Question Option : No Option Orientation : Vertical

Correct : 1 Wrong : 0.25

Find the missing term.

3,2,5,4,7,6,.....

Options :

1. ✗ 8
2. ✓ 9
3. ✗ 11
4. ✗ 10

Question Number : 140 Question Id : 7368154788 Question Type : MCQ Option Shuffling : Yes Display Question Number : Yes
Single Line Question Option : No Option Orientation : Vertical

Correct : 1 Wrong : 0.25

रिक्त पद ज्ञात करें:

3,2,5,4,7,6,_____

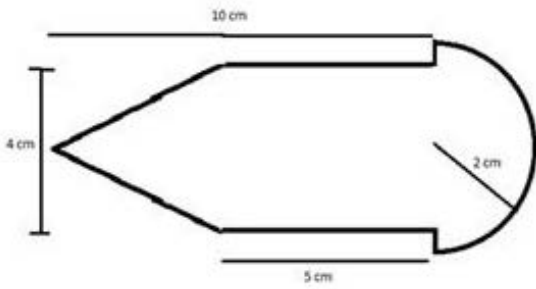
Options :

1. ✘ 8
2. ✔ 9
3. ✘ 11
4. ✘ 10

Question Number : 141 Question Id : 7368154789 Question Type : MCQ Option Shuffling : Yes Display Question Number : Yes Single Line Question Option : No Option Orientation : Vertical

Correct : 1 Wrong : 0.25

Find the area of the given figure.



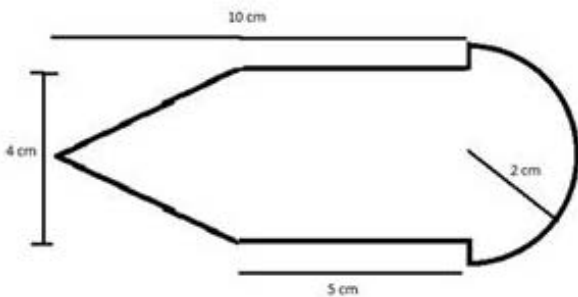
Options :

1. ✘ 43.88 cm²
2. ✔ 36.28 cm²
3. ✘ 77.8 cm²
4. ✘ 123.98 cm²

Question Number : 141 Question Id : 7368154789 Question Type : MCQ Option Shuffling : Yes Display Question Number : Yes Single Line Question Option : No Option Orientation : Vertical

Correct : 1 Wrong : 0.25

दी गई आकृति का क्षेत्रफल ज्ञात करें:



Options :

1. ✘ 43.88 वर्ग से.मी.
2. ✔ 36.28 वर्ग से.मी.
3. ✘ 77.8 वर्ग से.मी.
4. ✘ 123.98 वर्ग से.मी.

Correct : 1 Wrong : 0.25

88 cm³ of gold has converted into a wire of 2 mm diameter. What will be the length of the wire?

Options :

1. ✘ 34 m
2. ✘ 44 m
3. ✔ 28 m
4. ✘ 38 m

Question Number : 142 Question Id : 7368154790 Question Type : MCQ Option Shuffling : Yes Display Question Number : Yes
Single Line Question Option : No Option Orientation : Vertical

Correct : 1 Wrong : 0.25

88 घन से.मी. सोने को 2 मि.मी. व्यास वाले की एक तार में परिवर्तित किया जाता है। तार की लंबाई कितनी होगी?

Options :

1. ✘ 34 मी.
2. ✘ 44 मी.
3. ✔ 28 मी.
4. ✘ 38 मी.

Question Number : 143 Question Id : 7368154791 Question Type : MCQ Option Shuffling : Yes Display Question Number : Yes
Single Line Question Option : No Option Orientation : Vertical

Correct : 1 Wrong : 0.25

If slant height of a cone is 20 m and height is 16 m, what will be the area of its curved surface?

Options :

1. ✔ $240 \pi \text{ m}^2$
2. ✘ $140 \pi \text{ m}^2$
3. ✘ $196 \pi \text{ m}^2$
4. ✘ $342 \pi \text{ m}^2$

Question Number : 143 Question Id : 7368154791 Question Type : MCQ Option Shuffling : Yes Display Question Number : Yes
Single Line Question Option : No Option Orientation : Vertical

Correct : 1 Wrong : 0.25

यदि एक शंकु की तिरछी ऊंचाई (स्लांट हाइट) 20 मीटर और ऊंचाई 16 मीटर है, तो इसके वक्र सतह का क्षेत्रफल कितना होगा?

Options :

1. ✔ 240π वर्ग मी.
2. ✘ 140π वर्ग मी.
3. ✘ 196π वर्ग मी.

4. ✘ 342 π वर्ग मी.

Question Number : 144 Question Id : 7368154792 Question Type : MCQ Option Shuffling : Yes Display Question Number : Yes
Single Line Question Option : No Option Orientation : Vertical

Correct : 1 Wrong : 0.25

If PUZZLE is denoted as RWBBNG then ARMATURE will be denoted as

Options :

1. ✔ CTOCVWG
2. ✘ CTMNVWG
3. ✘ CRDEVFG
4. ✘ TTRDESVG

Question Number : 144 Question Id : 7368154792 Question Type : MCQ Option Shuffling : Yes Display Question Number : Yes
Single Line Question Option : No Option Orientation : Vertical

Correct : 1 Wrong : 0.25

यदि PUZZLE को RWBBNG लिखा जाता है, तो ARMATURE को किस तरह से लिखा जाएगा?

Options :

1. ✔ CTOCVWG
2. ✘ CTMNVWG
3. ✘ CRDEVFG
4. ✘ TTRDESVG

Question Number : 145 Question Id : 7368154793 Question Type : MCQ Option Shuffling : Yes Display Question Number : Yes
Single Line Question Option : No Option Orientation : Vertical

Correct : 1 Wrong : 0.25

If FIRE is denoted as GHSD then MANGO will be denoted as

Options :

1. ✘ NNPOE
2. ✘ RFDSE
3. ✘ UTSER
4. ✔ NYOFP

Question Number : 145 Question Id : 7368154793 Question Type : MCQ Option Shuffling : Yes Display Question Number : Yes
Single Line Question Option : No Option Orientation : Vertical

Correct : 1 Wrong : 0.25

यदि FIRE को GHSD लिखा जाता है, तो MANGO को किस तरह से लिखा जाएगा?

Options :

1. ✘ NNPOE
2. ✘ RFDSE
3. ✘ UTSER
4. ✔ NYOFP

Correct : 1 Wrong : 0.25

Your client is very irregular in payments of your projects. What will you do

Options :

1. ✘ Let it be.
2. ✘ Leave the project
3. ✘ Go and beat him up
4. ✔ Ask to the client about the reasons and tell him about its consequences

Question Number : 146 Question Id : 7368154794 Question Type : MCQ Option Shuffling : Yes Display Question Number : Yes
Single Line Question Option : No Option Orientation : Vertical

Correct : 1 Wrong : 0.25

आपका ग्राहक आपकी परियोजनाओं के भुगतान में बहुत अनियमित है। आप क्या करेंगे?

Options :

1. ✘ कुछ नहीं करेंगे
2. ✘ परियोजना छोड़ देंगे
3. ✘ जाकर उसे मरेंगे
4. ✔ कारणों के बारे में ग्राहक से पूछकर उसके परिणामों के बारे में उसे बतायेंगे

Question Number : 147 Question Id : 7368154795 Question Type : MCQ Option Shuffling : Yes Display Question Number : Yes
Single Line Question Option : No Option Orientation : Vertical

Correct : 1 Wrong : 0.25

Find the missing term of the series.

130,135,178,.....,234,247

Options :

1. ✘ 180
2. ✘ 201
3. ✔ 187
4. ✘ 196

Question Number : 147 Question Id : 7368154795 Question Type : MCQ Option Shuffling : Yes Display Question Number : Yes
Single Line Question Option : No Option Orientation : Vertical

Correct : 1 Wrong : 0.25

रिक्त संख्या ज्ञात करें:

130,135,178, _____,234,247

Options :

1. ✘ 180
2. ✘ 201
3. ✔ 187

4. ✘ 196

Question Number : 148 Question Id : 7368154796 Question Type : MCQ Option Shuffling : Yes Display Question Number : Yes
Single Line Question Option : No Option Orientation : Vertical

Correct : 1 Wrong : 0.25

Find the missing term of the series.

1,2,6,24,.....,720

Options :

1. ✘ 78

2. ✘ 48

3. ✘ 124

4. ✔ 120

Question Number : 148 Question Id : 7368154796 Question Type : MCQ Option Shuffling : Yes Display Question Number : Yes
Single Line Question Option : No Option Orientation : Vertical

Correct : 1 Wrong : 0.25

श्रंखला में रिक्त संख्या ज्ञात करें:

1,2,6,24, ____, 720

Options :

1. ✘ 78

2. ✘ 48

3. ✘ 124

4. ✔ 120

Question Number : 149 Question Id : 7368154797 Question Type : MCQ Option Shuffling : Yes Display Question Number : Yes
Single Line Question Option : No Option Orientation : Vertical

Correct : 1 Wrong : 0.25

Find the value of A?

$A^2+4567=9987$

Options :

1. ✔ 73.62

2. ✘ 34.67

3. ✘ 44.32

4. ✘ 89.07

Question Number : 149 Question Id : 7368154797 Question Type : MCQ Option Shuffling : Yes Display Question Number : Yes
Single Line Question Option : No Option Orientation : Vertical

Correct : 1 Wrong : 0.25

A का मान ज्ञात करें?

$A^2+4567=9987$

Options :

1. ✔ 73.62

2. ✘ 34.67

3. ✘ 44.32

4. ✘ 89.07

Question Number : 150 Question Id : 7368154798 Question Type : MCQ Option Shuffling : Yes Display Question Number : Yes
Single Line Question Option : No Option Orientation : Vertical

Correct : 1 Wrong : 0.25

If quotient is 345, divisor is 8876 and remainder is 9 then what will be the dividend?

Options :

1. ✘ 4500923

2. ✔ 3062229

3. ✘ 7896654

4. ✘ 9860002

Question Number : 150 Question Id : 7368154798 Question Type : MCQ Option Shuffling : Yes Display Question Number : Yes
Single Line Question Option : No Option Orientation : Vertical

Correct : 1 Wrong : 0.25

यदि भागफल 345 है, भाजक 8876 है और शेष 9 है, तो लाभांश क्या होगा?

Options :

1. ✘ 4500923

2. ✔ 3062229

3. ✘ 7896654

4. ✘ 9860002

General Awareness

Section Id :	73681594
Section Number :	4
Section type :	Online
Mandatory or Optional:	Mandatory
Number of Questions:	50
Number of Questions to be attempted:	50
Section Marks:	50
Display Number Panel:	Yes
Group All Questions:	No

Sub-Section Number:	1
Sub-Section Id:	736815142
Question Shuffling Allowed :	Yes

Question Number : 151 Question Id : 7368154799 Question Type : MCQ Option Shuffling : Yes Display Question Number : Yes
Single Line Question Option : No Option Orientation : Vertical

Correct : 1 Wrong : 0.25

Which article of Indian Constitution gives special status to the state of Jammu & Kashmir?

Options :

1. ✘ Article 254

2. ✘ Article 301
3. ✘ Article 202
4. ✔ Article 370

Question Number : 151 Question Id : 7368154799 Question Type : MCQ Option Shuffling : Yes Display Question Number : Yes
Single Line Question Option : No Option Orientation : Vertical

Correct : 1 Wrong : 0.25

भारतीय संविधान के किस अनुच्छेद में जम्मू एवं कश्मीर राज्य को विशेष दर्जा प्रदान किया गया है?

Options :

1. ✘ अनुच्छेद 254
2. ✘ अनुच्छेद 301
3. ✘ अनुच्छेद 202
4. ✔ अनुच्छेद 370

Question Number : 152 Question Id : 7368154800 Question Type : MCQ Option Shuffling : Yes Display Question Number : Yes
Single Line Question Option : No Option Orientation : Vertical

Correct : 1 Wrong : 0.25

44th Amendment act of Indian constitution deleted which one of the following rights?

Options :

1. ✘ Right against exploitation
2. ✘ Right to speak
3. ✔ Right to property
4. ✘ Right to information

Question Number : 152 Question Id : 7368154800 Question Type : MCQ Option Shuffling : Yes Display Question Number : Yes
Single Line Question Option : No Option Orientation : Vertical

Correct : 1 Wrong : 0.25

भारतीय संविधान के 44वें संशोधन ने निम्नलिखित में से कौन से अधिकार को समाप्त कर दिया है?

Options :

1. ✘ शोषण के विरुद्ध अधिकार
2. ✘ बोलने का अधिकार
3. ✔ सम्पत्ति का अधिकार
4. ✘ सूचना का अधिकार

Question Number : 153 Question Id : 7368154801 Question Type : MCQ Option Shuffling : Yes Display Question Number : Yes
Single Line Question Option : No Option Orientation : Vertical

Correct : 1 Wrong : 0.25

The constitution of India was adopted by the constituent assembly in the year

Options :

1. ✘ 1950
2. ✔ 1949
3. ✘ 1948
4. ✘ 1947

Question Number : 153 Question Id : 7368154801 Question Type : MCQ Option Shuffling : Yes Display Question Number : Yes
Single Line Question Option : No Option Orientation : Vertical

Correct : 1 Wrong : 0.25

संविधान सभा द्वारा भारत के संविधान को किस वर्ष में अपनाया गया था?

Options :

1. ✘ 1950
2. ✔ 1949
3. ✘ 1948
4. ✘ 1947

Question Number : 154 Question Id : 7368154802 Question Type : MCQ Option Shuffling : Yes Display Question Number : Yes
Single Line Question Option : No Option Orientation : Vertical

Correct : 1 Wrong : 0.25

The Panchayat Raj in rural areas and Municipality in urban areas were introduced by which amendment acts of Indian Constitution?

Options :

1. ✔ 73rd & 74th
2. ✘ 45th & 46th
3. ✘ 50th & 51st
4. ✘ 23rd & 24th

Question Number : 154 Question Id : 7368154802 Question Type : MCQ Option Shuffling : Yes Display Question Number : Yes
Single Line Question Option : No Option Orientation : Vertical

Correct : 1 Wrong : 0.25

भारत संविधान के किस संशोधन द्वारा ग्रामीण क्षेत्रों में पंचायती राज्य तथा शहरी क्षेत्रों में नगर-निगम अधिनियम पेश किया गया था?

Options :

1. ✔ 73वां एवं 74वां
2. ✘ 45वां एवं 46वां
3. ✘ 50वां एवं 51वां
4. ✘ 23वां एवं 24वां

Question Number : 155 Question Id : 7368154803 Question Type : MCQ Option Shuffling : Yes Display Question Number : Yes
Single Line Question Option : No Option Orientation : Vertical

Correct : 1 Wrong : 0.25

Who drafted the preamble of Indian Constitution?

Options :

1. ✓ Jawaharlal Nehru
2. ✗ Dr.B.R.Ambedkar
3. ✗ Sarvepalli Radhakrishnan
4. ✗ Lal Bahadur Shastri

Question Number : 155 Question Id : 7368154803 Question Type : MCQ Option Shuffling : Yes Display Question Number : Yes
Single Line Question Option : No Option Orientation : Vertical

Correct : 1 Wrong : 0.25

भारतीय संविधान की प्रस्तावना को किसने प्रारूपित किया था?

Options :

1. ✓ जवाहर लाल नेहरू
2. ✗ डॉ. बी. आर. अम्बेडकर
3. ✗ सर्वपल्ली राधाकृष्णन
4. ✗ लाल बहादुर शास्त्री

Question Number : 156 Question Id : 7368154804 Question Type : MCQ Option Shuffling : Yes Display Question Number : Yes
Single Line Question Option : No Option Orientation : Vertical

Correct : 1 Wrong : 0.25

Grammy Awards are given off for excellence in?

Options :

1. ✗ Cricket
2. ✓ Music
3. ✗ Literature
4. ✗ Painting

Question Number : 156 Question Id : 7368154804 Question Type : MCQ Option Shuffling : Yes Display Question Number : Yes
Single Line Question Option : No Option Orientation : Vertical

Correct : 1 Wrong : 0.25

ग्रैमी पुरस्कार किस क्षेत्र में उत्कृष्टता के लिए प्रदान किए जाते हैं?

Options :

1. ✗ क्रिकेट
2. ✓ संगीत
3. ✗ साहित्य
4. ✗ चित्रकला

Question Number : 157 Question Id : 7368154805 Question Type : MCQ Option Shuffling : Yes Display Question Number : Yes
Single Line Question Option : No Option Orientation : Vertical

Correct : 1 Wrong : 0.25

Who among the following received International Gandhi Peace Prize?

Options :

1. ✘ Dalai Lama
2. ✘ Mother Teresa
3. ✔ Nelson Mandela
4. ✘ Barrack Obama

Question Number : 157 Question Id : 7368154805 Question Type : MCQ Option Shuffling : Yes Display Question Number : Yes
Single Line Question Option : No Option Orientation : Vertical

Correct : 1 Wrong : 0.25

निम्नलिखित में से किस को अन्तरराष्ट्रीय - गांधी शांति पुरस्कार दिया गया है?

Options :

1. ✘ दलाई लामा
2. ✘ मदर टेरेसा
3. ✔ नेल्सन मंडेला
4. ✘ बराक ओबामा

Question Number : 158 Question Id : 7368154806 Question Type : MCQ Option Shuffling : Yes Display Question Number : Yes
Single Line Question Option : No Option Orientation : Vertical

Correct : 1 Wrong : 0.25

Who among the following is the youngest recipient of Bharat Ratna Award?

Options :

1. ✘ Malala
2. ✘ C.Rajagopalchari
3. ✘ Lal Bahadur shastri
4. ✔ Sachin Tendulkar

Question Number : 158 Question Id : 7368154806 Question Type : MCQ Option Shuffling : Yes Display Question Number : Yes
Single Line Question Option : No Option Orientation : Vertical

Correct : 1 Wrong : 0.25

निम्नलिखित में से किसे सबसे कम आयु में भारत रत्न पुरस्कार से सम्मानित किया गया है?

Options :

1. ✘ मलाला
2. ✘ सी. राजगोपालचारी
3. ✘ लाल बहादुर शास्त्री
4. ✔ सचिन तेन्दुलकर

Question Number : 159 Question Id : 7368154807 Question Type : MCQ Option Shuffling : Yes Display Question Number : Yes
Single Line Question Option : No Option Orientation : Vertical

Correct : 1 Wrong : 0.25

Who is the first recipient of Indira Gandhi peace prize?

Options :

1. ✓ Rajiv Gandhi
2. ✗ Mother Teresa
3. ✗ Mikhail Gorbachev
4. ✗ Nelson Mandela

Note: For this question, discrepancy is found in question/answer. Full Marks is being awarded to all candidates.

Question Number : 159 Question Id : 7368154807 Question Type : MCQ Option Shuffling : Yes Display Question Number : Yes
Single Line Question Option : No Option Orientation : Vertical

Correct : 1 Wrong : 0.25

सर्वप्रथम इंदिरा गांधी शांति पुरस्कार किसे दिया गया है?

Options :

1. ✓ राजीव गांधी
2. ✗ मदर टेरेसा
3. ✗ मिखैल गोरबाचेव
4. ✗ नेल्सन मंडेला

Note: For this question, discrepancy is found in question/answer. Full Marks is being awarded to all candidates.

Question Number : 160 Question Id : 7368154808 Question Type : MCQ Option Shuffling : Yes Display Question Number : Yes
Single Line Question Option : No Option Orientation : Vertical

Correct : 1 Wrong : 0.25

Which of the following is not an award related to Sports and Games?

Options :

1. ✓ Ashok Chakra Award
2. ✗ Dhronacharya Award
3. ✗ Arjuna Award
4. ✗ Dhyanchand Award

Question Number : 160 Question Id : 7368154808 Question Type : MCQ Option Shuffling : Yes Display Question Number : Yes
Single Line Question Option : No Option Orientation : Vertical

Correct : 1 Wrong : 0.25

निम्नलिखित में से कौन सा पुरस्कार, क्रीड़ा एवं खेल से सम्बन्धित नहीं है?

Options :

1. ✓ अशोक चक्र पुरस्कार
2. ✗ द्रोणाचार्य पुरस्कार
3. ✗ अर्जुन पुरस्कार
4. ✗ ध्यानचन्द पुरस्कार

Question Number : 161 Question Id : 7368154809 Question Type : MCQ Option Shuffling : Yes Display Question Number : Yes
Single Line Question Option : No Option Orientation : Vertical

Correct : 1 Wrong : 0.25

Who is the author of the book 'DEV DAS'?

Options :

1. ✓ Sarat Chandra Chatterjee
2. ✗ Khushwant Singh
3. ✗ R.K.Narayanan
4. ✗ Satyajit Ray

Question Number : 161 Question Id : 7368154809 Question Type : MCQ Option Shuffling : Yes Display Question Number : Yes
Single Line Question Option : No Option Orientation : Vertical

Correct : 1 Wrong : 0.25

'देवदास' पुस्तक के लेखक कौन हैं?

Options :

1. ✓ सरत चन्द्र चटर्जी
2. ✗ खुशवंत सिंह
3. ✗ आर.के. नारायणन
4. ✗ सत्यजीत रे

Question Number : 162 Question Id : 7368154810 Question Type : MCQ Option Shuffling : Yes Display Question Number : Yes
Single Line Question Option : No Option Orientation : Vertical

Correct : 1 Wrong : 0.25

'अर्थशास्त्र' पुस्तक के लेखक कौन हैं?

Options :

1. ✗ विष्णु शर्मा
2. ✗ कालीदास
3. ✓ कौटिल्य
4. ✗ तुलसीदास

Question Number : 162 Question Id : 7368154810 Question Type : MCQ Option Shuffling : Yes Display Question Number : Yes
Single Line Question Option : No Option Orientation : Vertical

Correct : 1 Wrong : 0.25

Who is the author of the book 'Arthashastra'?

Options :

1. ✗ Vishnu Sharma
2. ✗ Kalidas
3. ✓ Kautilya
4. ✗ Tulsidas

Question Number : 163 Question Id : 7368154811 Question Type : MCQ Option Shuffling : Yes Display Question Number : Yes
Single Line Question Option : No Option Orientation : Vertical

Correct : 1 Wrong : 0.25

Who wrote the famous book 'Anandmath'?

Options :

1. ✘ Sarat Chandra
2. ✘ Lal Bahadur Shastri
3. ✘ Vishnu Sharma
4. ✔ Bankim Chandra Chattopadhyay

Question Number : 163 Question Id : 7368154811 Question Type : MCQ Option Shuffling : Yes Display Question Number : Yes
Single Line Question Option : No Option Orientation : Vertical

Correct : 1 Wrong : 0.25

'आन्नद मठ' नामक प्रसिद्ध पुस्तक के लेखक कौन हैं?

Options :

1. ✘ सरत चन्द्र
2. ✘ लाल बहादुर शास्त्री
3. ✘ विष्णु शर्मा
4. ✔ बंकिमचन्द्र चटोपाध्याय

Question Number : 164 Question Id : 7368154812 Question Type : MCQ Option Shuffling : Yes Display Question Number : Yes
Single Line Question Option : No Option Orientation : Vertical

Correct : 1 Wrong : 0.25

Which former Prime Minister of India translated the famous Telugu book 'Veyi Padagalu' with the name 'SAHASRA PHAN'?

Options :

1. ✘ Dewe Gowda
2. ✘ Rajiv Gandhi
3. ✔ P.V.Narasimha Rao
4. ✘ Atal Bihari Vajpayee

Question Number : 164 Question Id : 7368154812 Question Type : MCQ Option Shuffling : Yes Display Question Number : Yes
Single Line Question Option : No Option Orientation : Vertical

Correct : 1 Wrong : 0.25

कौन से भूतपूर्व भारतीय प्रधानमंत्री ने 'वेई पदगलू' नामक प्रसिद्ध तमिल पुस्तक को 'सहस्र फण' नाम से अनुवाद किया?

Options :

1. ✘ देवे गौड़ा
2. ✘ राजीव गांधी

3. ✓ पी.वी. नरसिंहा राव

4. ✗ अटल बिहारी वाजपेयी

Question Number : 165 Question Id : 7368154813 Question Type : MCQ Option Shuffling : Yes Display Question Number : Yes
Single Line Question Option : No Option Orientation : Vertical

Correct : 1 Wrong : 0.25

The famous book "WINGS OF FIRE" is written by

Options :

1. ✓ Abdul Kalam

2. ✗ Atal Bihari Vajpayee

3. ✗ Kasturi Rangan

4. ✗ J.C.Bose

Question Number : 165 Question Id : 7368154813 Question Type : MCQ Option Shuffling : Yes Display Question Number : Yes
Single Line Question Option : No Option Orientation : Vertical

Correct : 1 Wrong : 0.25

'विंग्स ऑफ फायर' नामक प्रसिद्ध पुस्तक के लेखक कौन हैं?

Options :

1. ✓ अब्दुल कलाम

2. ✗ अटल बिहारी वाजपेयी

3. ✗ कस्तूरी रंगन

4. ✗ जे. सी. बोस

Question Number : 166 Question Id : 7368154814 Question Type : MCQ Option Shuffling : Yes Display Question Number : Yes
Single Line Question Option : No Option Orientation : Vertical

Correct : 1 Wrong : 0.25

In which Indian State the festival 'Chandani Padva' is celebrated?

Options :

1. ✗ Assam

2. ✓ Gujarat

3. ✗ Maharashtra

4. ✗ Chattisgarh

Question Number : 166 Question Id : 7368154814 Question Type : MCQ Option Shuffling : Yes Display Question Number : Yes
Single Line Question Option : No Option Orientation : Vertical

Correct : 1 Wrong : 0.25

भारत के किस राज्य में 'चांदनी पड़वा' नामक उत्सव मनाया जाता है?

Options :

1. ✗ असम

2. ✓ गुजरात

3. ✘ महाराष्ट्र
4. ✘ छत्तीसगढ़

Question Number : 167 Question Id : 7368154815 Question Type : MCQ Option Shuffling : Yes Display Question Number : Yes
Single Line Question Option : No Option Orientation : Vertical

Correct : 1 Wrong : 0.25

From which Indian State 'Sattriya' dance is originated?

Options :

1. ✔ Assam
2. ✘ Kerala
3. ✘ Rajasthan
4. ✘ Goa

Question Number : 167 Question Id : 7368154815 Question Type : MCQ Option Shuffling : Yes Display Question Number : Yes
Single Line Question Option : No Option Orientation : Vertical

Correct : 1 Wrong : 0.25

भारत के किस राज्य से 'सत्रिया' नृत्य का उद्गम हुआ है?

Options :

1. ✔ असम
2. ✘ केरल
3. ✘ राजस्थान
4. ✘ गोवा

Question Number : 168 Question Id : 7368154816 Question Type : MCQ Option Shuffling : Yes Display Question Number : Yes
Single Line Question Option : No Option Orientation : Vertical

Correct : 1 Wrong : 0.25

The harvest festival of Indian State Punjab is called?

Options :

1. ✘ Basant Panchami
2. ✔ Lohri
3. ✘ Pongal
4. ✘ Gudi Padva

Question Number : 168 Question Id : 7368154816 Question Type : MCQ Option Shuffling : Yes Display Question Number : Yes
Single Line Question Option : No Option Orientation : Vertical

Correct : 1 Wrong : 0.25

भारत के पंजाब राज्य में फसल उत्सव को क्या कहते हैं?

Options :

1. ✘ बसंत पंचमी
2. ✔ लोहरी
3. ✘ पोंगल

4. ✘ गुड़ी पड़वा

Question Number : 169 Question Id : 7368154817 Question Type : MCQ Option Shuffling : Yes Display Question Number : Yes
Single Line Question Option : No Option Orientation : Vertical

Correct : 1 Wrong : 0.25

In terms of Indian politics 'MLC' stands for?

Options :

1. ✘ Multi Legislative Counsellor
2. ✘ Member of Legislative Cabinet
3. ✘ Member of Law Council
4. ✔ Member of Legislative Council

Question Number : 169 Question Id : 7368154817 Question Type : MCQ Option Shuffling : Yes Display Question Number : Yes
Single Line Question Option : No Option Orientation : Vertical

Correct : 1 Wrong : 0.25

भारतीय राजनीति में 'एम.एल.सी.' शब्द का अर्थ क्या है?

Options :

1. ✘ बहु विधान उपबोधक (मल्टी लेजिस्लेटिव काउंसलर)
2. ✘ विधान मंत्रिमंडल सदस्य (मेम्बर ऑफ लेजिस्लेटिव कैबिनेट)
3. ✘ विधि परिषद सदस्य (मेम्बर ऑफ लॉ काउंसिल)
4. ✔ विधान परिषद सदस्य (मेम्बर ऑफ लेजिस्लेटिव काउंसिल)

Question Number : 170 Question Id : 7368154818 Question Type : MCQ Option Shuffling : Yes Display Question Number : Yes
Single Line Question Option : No Option Orientation : Vertical

Correct : 1 Wrong : 0.25

In case of a 'tie' between two contestants in general elections, who has the authority to break the tie?

Options :

1. ✘ Chief Justice of Supreme Court
2. ✘ Prime Minister
3. ✔ President
4. ✘ Governor of the State

Question Number : 170 Question Id : 7368154818 Question Type : MCQ Option Shuffling : Yes Display Question Number : Yes
Single Line Question Option : No Option Orientation : Vertical

Correct : 1 Wrong : 0.25

आम चुनावों में दो उम्मीदवारों के बीच 'बराबरी' की स्थिति को समाप्त करने का अधिकार किसके पास है?

Options :

1. ✘ सर्वोच्च न्यायालय के मुख्य न्यायाधीश

2. ✘ प्रधानमंत्री
3. ✔ राष्ट्रपति
4. ✘ राज्य के राज्यपाल

Question Number : 171 Question Id : 7368154819 Question Type : MCQ Option Shuffling : Yes Display Question Number : Yes
Single Line Question Option : No Option Orientation : Vertical

Correct : 1 Wrong : 0.25

Who acts as a Chancellor for State universities?

Options :

1. ✔ Governor
2. ✘ High Court Judge
3. ✘ Chief Minister
4. ✘ Education Minister

Question Number : 171 Question Id : 7368154819 Question Type : MCQ Option Shuffling : Yes Display Question Number : Yes
Single Line Question Option : No Option Orientation : Vertical

Correct : 1 Wrong : 0.25

निम्नलिखित में से कौन - राज्य विश्वविद्यालयों के कुलाधिपति की भूमिका निभाते हैं?

Options :

1. ✔ राज्यपाल
2. ✘ उच्च न्यायालय के न्यायमूर्ति
3. ✘ मुख्यमंत्री
4. ✘ शिक्षामंत्री

Question Number : 172 Question Id : 7368154820 Question Type : MCQ Option Shuffling : Yes Display Question Number : Yes
Single Line Question Option : No Option Orientation : Vertical

Correct : 1 Wrong : 0.25

Who is the longest serving Chief Minister for an Indian State?

Options :

1. ✘ Mamta Banerjee
2. ✘ Sucheta Kriplani
3. ✔ Jyoti Basu
4. ✘ Mulayam Singh Yadav

Question Number : 172 Question Id : 7368154820 Question Type : MCQ Option Shuffling : Yes Display Question Number : Yes
Single Line Question Option : No Option Orientation : Vertical

Correct : 1 Wrong : 0.25

भारत के किस राज्य में मुख्यमंत्री पद पर सबसे लम्बे समय तक कौन कार्यरत रहा है?

Options :

1. ✘ ममता बैनर्जी

2. ✘ सुचेता कृपलानी
3. ✔ ज्योति बसु
4. ✘ मुलायम सिंह यादव

Question Number : 173 Question Id : 7368154821 Question Type : MCQ Option Shuffling : Yes Display Question Number : Yes
Single Line Question Option : No Option Orientation : Vertical

Correct : 1 Wrong : 0.25

The state dance of Kerala is:

Options :

1. ✘ Kathak
2. ✘ Kuchipudi
3. ✔ Kathakali
4. ✘ Bharata Natyam

Question Number : 173 Question Id : 7368154821 Question Type : MCQ Option Shuffling : Yes Display Question Number : Yes
Single Line Question Option : No Option Orientation : Vertical

Correct : 1 Wrong : 0.25

केरल का राज्य नृत्य है :

Options :

1. ✘ कथक
2. ✘ कुचीपुड़ी
3. ✔ कथाकली
4. ✘ भरत नाट्यम

Question Number : 174 Question Id : 7368154822 Question Type : MCQ Option Shuffling : Yes Display Question Number : Yes
Single Line Question Option : No Option Orientation : Vertical

Correct : 1 Wrong : 0.25

Who among the following is the first woman Chief Minister for an Indian State?

Options :

1. ✘ Mayawati
2. ✘ Mamta Banerjee
3. ✘ Jayalalitha
4. ✔ Sucheta Kriplani

Question Number : 174 Question Id : 7368154822 Question Type : MCQ Option Shuffling : Yes Display Question Number : Yes
Single Line Question Option : No Option Orientation : Vertical

Correct : 1 Wrong : 0.25

निम्नलिखित में से कौन भारत के किस राज्य की सर्वप्रथम मुख्यमंत्री महिला हैं?

Options :

1. ✘ मायावती

2. ✘ ममता बैनर्जी
3. ✘ जयललिता
4. ✔ सुचेता कृपलानी

Question Number : 175 Question Id : 7368154823 Question Type : MCQ Option Shuffling : Yes Display Question Number : Yes
Single Line Question Option : No Option Orientation : Vertical

Correct : 1 Wrong : 0.25

Who is popularly known as 'Hockey Wizard'?

Options :

1. ✔ Dhyan Chand
2. ✘ Rajiv Bhatia
3. ✘ Vikram Singh
4. ✘ Arjit Ghosh

Question Number : 175 Question Id : 7368154823 Question Type : MCQ Option Shuffling : Yes Display Question Number : Yes
Single Line Question Option : No Option Orientation : Vertical

Correct : 1 Wrong : 0.25

निम्नलिखित में से कौन - 'हॉकी के जादूगर' के नाम से प्रसिद्ध हैं?

Options :

1. ✔ ध्यानचंद
2. ✘ राजीव भाटिया
3. ✘ विक्रम सिंह
4. ✘ अर्जित घोष

Question Number : 176 Question Id : 7368154824 Question Type : MCQ Option Shuffling : Yes Display Question Number : Yes
Single Line Question Option : No Option Orientation : Vertical

Correct : 1 Wrong : 0.25

Who is the first captain for Indian National Cricket Team?

Options :

1. ✘ Bishan Singh Bedi
2. ✔ C.K.Naidu
3. ✘ Kapil Dev
4. ✘ Mohinder Amarnath

Question Number : 176 Question Id : 7368154824 Question Type : MCQ Option Shuffling : Yes Display Question Number : Yes
Single Line Question Option : No Option Orientation : Vertical

Correct : 1 Wrong : 0.25

भारत के राष्ट्रीय क्रिकेट दल के सर्वप्रथम कप्तान कौन हैं?

Options :

1. ✘ बिशन सिंह बेदी

2. ✓ सी.के. नायडू
3. ✗ कपिल देव
4. ✗ मोहिंदर अमरनाथ

Question Number : 177 Question Id : 7368154825 Question Type : MCQ Option Shuffling : Yes Display Question Number : Yes
Single Line Question Option : No Option Orientation : Vertical

Correct : 1 Wrong : 0.25

Which one of the following is the most newly formed State of India?

Options :

1. ✓ Telangana
2. ✗ Chhattisgarh
3. ✗ Jharkhand
4. ✗ Uttarakhand

Question Number : 177 Question Id : 7368154825 Question Type : MCQ Option Shuffling : Yes Display Question Number : Yes
Single Line Question Option : No Option Orientation : Vertical

Correct : 1 Wrong : 0.25

निम्नलिखित में से कौन - भारत का सबसे नवीनतम निर्मित राज्य है?

Options :

1. ✓ तेलंगाना
2. ✗ छत्तीसगढ़
3. ✗ झारखंड
4. ✗ उत्तराखंड

Question Number : 178 Question Id : 7368154826 Question Type : MCQ Option Shuffling : Yes Display Question Number : Yes
Single Line Question Option : No Option Orientation : Vertical

Correct : 1 Wrong : 0.25

The author of the book 'Akbarnama' is?

Options :

1. ✗ Shah Jahan
2. ✗ Alauddin Khilji
3. ✗ Samudra Gupta
4. ✓ Abul Fazl

Question Number : 178 Question Id : 7368154826 Question Type : MCQ Option Shuffling : Yes Display Question Number : Yes
Single Line Question Option : No Option Orientation : Vertical

Correct : 1 Wrong : 0.25

'अकबरनामा' पुस्तक के लेखक कौन हैं?

Options :

1. ✗ शाहजहां

2. ✘ अलाउद्दीन खिलजी
3. ✘ समुद्र गुप्त
4. ✔ अबुल फज़ल

Question Number : 179 Question Id : 7368154827 Question Type : MCQ Option Shuffling : Yes Display Question Number : Yes
Single Line Question Option : No Option Orientation : Vertical

Correct : 1 Wrong : 0.25

The State Governors are appointed by?

Options :

1. ✔ President
2. ✘ Chief Justice of India
3. ✘ Prime Minister
4. ✘ Chief Minister

Question Number : 179 Question Id : 7368154827 Question Type : MCQ Option Shuffling : Yes Display Question Number : Yes
Single Line Question Option : No Option Orientation : Vertical

Correct : 1 Wrong : 0.25

राज्य के राज्यपाल की नियुक्ति कौन करता है?

Options :

1. ✔ राष्ट्रपति
2. ✘ भारत के मुख्य न्यायाधीश
3. ✘ प्रधानमंत्री
4. ✘ मुख्यमंत्री

Question Number : 180 Question Id : 7368154828 Question Type : MCQ Option Shuffling : Yes Display Question Number : Yes
Single Line Question Option : No Option Orientation : Vertical

Correct : 1 Wrong : 0.25

The headquarters of World Bank is situated in?

Options :

1. ✘ Chicago
2. ✔ Washington DC
3. ✘ New Delhi
4. ✘ Canberra

Question Number : 180 Question Id : 7368154828 Question Type : MCQ Option Shuffling : Yes Display Question Number : Yes
Single Line Question Option : No Option Orientation : Vertical

Correct : 1 Wrong : 0.25

विश्वबैंक का मुख्यालय कहाँ पर स्थित है?

Options :

1. ✘ शिकागो

2. ✓ वाशिगटन डी.सी.

3. ✗ नई दिल्ली

4. ✗ कैनबेरा

Question Number : 181 Question Id : 7368154829 Question Type : MCQ Option Shuffling : Yes Display Question Number : Yes
Single Line Question Option : No Option Orientation : Vertical

Correct : 1 Wrong : 0.25

Which one of the following is not a Union territory?

Options :

1. ✗ Pondicherry

2. ✗ Chandigarh

3. ✓ Hyderabad

4. ✗ New Delhi

Question Number : 181 Question Id : 7368154829 Question Type : MCQ Option Shuffling : Yes Display Question Number : Yes
Single Line Question Option : No Option Orientation : Vertical

Correct : 1 Wrong : 0.25

निम्नलिखित में कौनसा एक केन्द्र शासित प्रदेश नहीं है?

Options :

1. ✗ पाण्डिचेरी

2. ✗ चंडीगढ़

3. ✓ हैदराबाद

4. ✗ नई दिल्ली

Question Number : 182 Question Id : 7368154830 Question Type : MCQ Option Shuffling : Yes Display Question Number : Yes
Single Line Question Option : No Option Orientation : Vertical

Correct : 1 Wrong : 0.25

Which one of the following is set up to promote exports and reduce imports?

Options :

1. ✓ EXIM Bank

2. ✗ NABARD

3. ✗ RBI

4. ✗ National Development Council

Question Number : 182 Question Id : 7368154830 Question Type : MCQ Option Shuffling : Yes Display Question Number : Yes
Single Line Question Option : No Option Orientation : Vertical

Correct : 1 Wrong : 0.25

निम्नलिखित में से किसकी स्थापना, निर्यात को बढ़ावा देने एवं आयात को कम करने के लिए की गई है?

Options :

1. ✓ एक्जिम बैंक
2. ✗ नाबार्ड
3. ✗ भारतीय रिजर्व बैंक
4. ✗ राष्ट्रीय विकास परिषद

Question Number : 183 Question Id : 7368154831 Question Type : MCQ Option Shuffling : Yes Display Question Number : Yes
Single Line Question Option : No Option Orientation : Vertical

Correct : 1 Wrong : 0.25

भारत के सर्वप्रथम कानून मंत्री कौन थे?

Options :

1. ✗ जवाहर लाल नेहरू
2. ✗ सी. राजगोपालचारी
3. ✗ लाल बहादुर शास्त्री
4. ✓ डॉ. बी. आर. अम्बेडकर

Question Number : 183 Question Id : 7368154831 Question Type : MCQ Option Shuffling : Yes Display Question Number : Yes
Single Line Question Option : No Option Orientation : Vertical

Correct : 1 Wrong : 0.25

The first Law Minister of India was:

Options :

1. ✗ Jawaharlal Nehru
2. ✗ C.Rajgopal Chary
3. ✗ Lal Bahadur Shastri
4. ✓ Dr.B.R.Ambedkar

Question Number : 184 Question Id : 7368154832 Question Type : MCQ Option Shuffling : Yes Display Question Number : Yes
Single Line Question Option : No Option Orientation : Vertical

Correct : 1 Wrong : 0.25

Which Indian State has English as official language?

Options :

1. ✗ Karnataka
2. ✗ Maharashtra
3. ✗ West Bengal
4. ✓ Nagaland

Question Number : 184 Question Id : 7368154832 Question Type : MCQ Option Shuffling : Yes Display Question Number : Yes
Single Line Question Option : No Option Orientation : Vertical

Correct : 1 Wrong : 0.25

भारत के किस राज्य की अधिकारिक भाषा अंग्रेजी है?

Options :

1. ✘ कर्नाटक
2. ✘ महाराष्ट्र
3. ✘ पश्चिम बंगाल
4. ✔ नागालैण्ड

Question Number : 185 Question Id : 7368154833 Question Type : MCQ Option Shuffling : Yes Display Question Number : Yes
Single Line Question Option : No Option Orientation : Vertical

Correct : 1 Wrong : 0.25

Who is the present Captain of Indian football team?

Options :

1. ✔ Sunil Chhetri
2. ✘ Baichung Bhutia
3. ✘ Sarvesh Yadav
4. ✘ Gaurav Singh

Question Number : 185 Question Id : 7368154833 Question Type : MCQ Option Shuffling : Yes Display Question Number : Yes
Single Line Question Option : No Option Orientation : Vertical

Correct : 1 Wrong : 0.25

भारत के वर्तमान फुटबाल दल के कप्तान कौन हैं?

Options :

1. ✔ सुनील चेत्री
2. ✘ बाईचुंग भूटिया
3. ✘ सर्वेश यादव
4. ✘ गौरव सिंह

Question Number : 186 Question Id : 7368154834 Question Type : MCQ Option Shuffling : Yes Display Question Number : Yes
Single Line Question Option : No Option Orientation : Vertical

Correct : 1 Wrong : 0.25

Which of the following places in India has largest coal reserves?

Options :

1. ✘ Meerut
2. ✘ Mathura
3. ✘ Rajkot
4. ✔ Raniganj

Question Number : 186 Question Id : 7368154834 Question Type : MCQ Option Shuffling : Yes Display Question Number : Yes
Single Line Question Option : No Option Orientation : Vertical

Correct : 1 Wrong : 0.25

निम्नलिखित में से भारत में किस स्थान पर कोयले का सबसे अधिक भंडार है?

Options :

1. ✘ मेरठ
2. ✘ मथुरा
3. ✘ राजकोट
4. ✔ रानीगंज

Question Number : 187 Question Id : 7368154835 Question Type : MCQ Option Shuffling : Yes Display Question Number : Yes
Single Line Question Option : No Option Orientation : Vertical

Correct : 1 Wrong : 0.25

The idea of preamble in Constitution of India is borrowed from:

Options :

1. ✔ USA Constitution
2. ✘ Spanish Constitution
3. ✘ British Constitution
4. ✘ South African Constitution

Question Number : 187 Question Id : 7368154835 Question Type : MCQ Option Shuffling : Yes Display Question Number : Yes
Single Line Question Option : No Option Orientation : Vertical

Correct : 1 Wrong : 0.25

भारत के संविधान में प्रस्तावना का विचार कहाँ से लिया गया है?

Options :

1. ✔ यू.एस.ए. संविधान
2. ✘ स्पैनिश संविधान
3. ✘ ब्रिटिश संविधान
4. ✘ दक्षिण अफ्रीकी संविधान

Question Number : 188 Question Id : 7368154836 Question Type : MCQ Option Shuffling : Yes Display Question Number : Yes
Single Line Question Option : No Option Orientation : Vertical

Correct : 1 Wrong : 0.25

Which of the following Indian universities completed 100 years on February 13th 2016?

Options :

1. ✘ Nalanda University
2. ✔ Banaras Hindu University
3. ✘ Delhi University
4. ✘ Aligarh Muslim University

Question Number : 188 Question Id : 7368154836 Question Type : MCQ Option Shuffling : Yes Display Question Number : Yes
Single Line Question Option : No Option Orientation : Vertical

Correct : 1 Wrong : 0.25

निम्नलिखित भारतीय विश्वविद्यालयों में से किसने 13 फरवरी 2016 को 100 वर्ष पूरे किये हैं?

Options :

1. ✘ नालंदा विश्वविद्यालय
2. ✔ बनारस हिंदू विश्वविद्यालय
3. ✘ दिल्ली विश्वविद्यालय
4. ✘ अलीगढ़ मुस्लिम विश्वविद्यालय

Question Number : 189 Question Id : 7368154837 Question Type : MCQ Option Shuffling : Yes Display Question Number : Yes
Single Line Question Option : No Option Orientation : Vertical

Correct : 1 Wrong : 0.25

In Gupta period, the official language of was:

Options :

1. ✔ Sanskrit
2. ✘ Persian
3. ✘ Arabic
4. ✘ Hindi

Question Number : 189 Question Id : 7368154837 Question Type : MCQ Option Shuffling : Yes Display Question Number : Yes
Single Line Question Option : No Option Orientation : Vertical

Correct : 1 Wrong : 0.25

निम्नलिखित में से कौनसी भाषा, गुप्त काल की अधिकारिक भाषा थी:

Options :

1. ✔ संस्कृत
2. ✘ फारसी
3. ✘ अरबी
4. ✘ हिंदी

Question Number : 190 Question Id : 7368154838 Question Type : MCQ Option Shuffling : Yes Display Question Number : Yes
Single Line Question Option : No Option Orientation : Vertical

Correct : 1 Wrong : 0.25

Who was the first medieval ruler to introduce Ministry of Agriculture?

Options :

1. ✘ Sher Shah
2. ✘ Alauddin Khilji
3. ✘ Babar
4. ✔ Mohammed Bin Tuglaq

Correct : 1 Wrong : 0.25

कृषि मंत्रालय का आरम्भ करने वाले सर्वप्रथम मध्यकालीन शासक कौन थे?

Options :

1. ✘ शेरशाह
2. ✘ अलाउद्दीन खिलजी
3. ✘ बाबर
4. ✔ मोहम्मद बिन तुगलक

Question Number : 191 Question Id : 7368154839 Question Type : MCQ Option Shuffling : Yes Display Question Number : Yes
Single Line Question Option : No Option Orientation : Vertical

Correct : 1 Wrong : 0.25

In India, the major forest product is:

Options :

1. ✘ Redwood
2. ✘ Sandalwood
3. ✔ Fuel Wood
4. ✘ Rubber

Question Number : 191 Question Id : 7368154839 Question Type : MCQ Option Shuffling : Yes Display Question Number : Yes
Single Line Question Option : No Option Orientation : Vertical

Correct : 1 Wrong : 0.25

भारत में सबसे प्रमुख वन उत्पादन है :

Options :

1. ✘ रेडवुड
2. ✘ चंदन की लकड़ी
3. ✔ जलाऊ लकड़ी
4. ✘ रबड़

Question Number : 192 Question Id : 7368154840 Question Type : MCQ Option Shuffling : Yes Display Question Number : Yes
Single Line Question Option : No Option Orientation : Vertical

Correct : 1 Wrong : 0.25

Which Indian State sends maximum members to the Rajya Sabha?

Options :

1. ✔ Uttar Pradesh
2. ✘ Andhra Pradesh
3. ✘ West Bengal
4. ✘ Maharashtra

Correct : 1 Wrong : 0.25

भारत के किस राज्य से राज्य सभा में अधिकतम सदस्य जाते हैं?

Options :

1. ✓ उत्तर प्रदेश
2. ✗ आंध्र प्रदेश
3. ✗ पश्चिम बंगाल
4. ✗ महाराष्ट्र

Question Number : 193 Question Id : 7368154841 Question Type : MCQ Option Shuffling : Yes Display Question Number : Yes
Single Line Question Option : No Option Orientation : Vertical

Correct : 1 Wrong : 0.25

In which Indian city, the first ever Municipal Corporation was set up?

Options :

1. ✗ Rajkot
2. ✗ Calcutta
3. ✗ Bombay
4. ✓ Madras

Question Number : 193 Question Id : 7368154841 Question Type : MCQ Option Shuffling : Yes Display Question Number : Yes
Single Line Question Option : No Option Orientation : Vertical

Correct : 1 Wrong : 0.25

भारत के किस शहर में, सर्वप्रथम नगर निगम की स्थापना की गई थी?

Options :

1. ✗ राजकोट
2. ✗ कलकत्ता
3. ✗ बम्बई
4. ✓ मद्रास

Question Number : 194 Question Id : 7368154842 Question Type : MCQ Option Shuffling : Yes Display Question Number : Yes
Single Line Question Option : No Option Orientation : Vertical

Correct : 1 Wrong : 0.25

Which place among the following receives highest rainfall in the world?

Options :

1. ✓ Cherrapunji
2. ✗ Imphal
3. ✗ Gangtok
4. ✗ Kohima

Correct : 1 Wrong : 0.25

दुनिया में निम्नलिखित में से किस स्थान पर सबसे अधिक बारिश होती है?

Options :

1. ✓ चैरापूँजी
2. ✗ इफाल
3. ✗ गंगटोक
4. ✗ कोहिमा

Question Number : 195 Question Id : 7368154843 Question Type : MCQ Option Shuffling : Yes Display Question Number : Yes
Single Line Question Option : No Option Orientation : Vertical

Correct : 1 Wrong : 0.25

Before Suresh Prabhu, who was the railway minister of India?

Options :

1. ✓ Sadananda Gowda
2. ✗ Uma Bharti
3. ✗ Mamta Banerjee
4. ✗ Laloo Prasad Yadav

Question Number : 195 Question Id : 7368154843 Question Type : MCQ Option Shuffling : Yes Display Question Number : Yes
Single Line Question Option : No Option Orientation : Vertical

Correct : 1 Wrong : 0.25

सुरेश प्रभु से पहले, भारत के रेलवे मंत्री कौन थे?

Options :

1. ✓ सदानन्द गौड़ा
2. ✗ उमा भारती
3. ✗ ममता बैनर्जी
4. ✗ लालू प्रसाद यादव

Question Number : 196 Question Id : 7368154844 Question Type : MCQ Option Shuffling : Yes Display Question Number : Yes
Single Line Question Option : No Option Orientation : Vertical

Correct : 1 Wrong : 0.25

Who among the following has never been a captain for Indian Cricket Team?

Options :

1. ✗ Mohammed Azharuddin
2. ✓ VVS Laxman
3. ✗ Saurav Ganguly
4. ✗ Sachin Tendulkar

Correct : 1 Wrong : 0.25

निम्नलिखित में से कौन, कभी भी भारतीय क्रिकेट दल का कप्तान नहीं रहा है?

Options :

1. ✘ मोहम्मद अजहरुद्दीन
2. ✔ वी.वी.एस. लक्ष्मण
3. ✘ सौरव गांगुली
4. ✘ सचिन तेन्दुलकर

Question Number : 197 Question Id : 7368154845 Question Type : MCQ Option Shuffling : Yes Display Question Number : Yes
Single Line Question Option : No Option Orientation : Vertical

Correct : 1 Wrong : 0.25

Black revolution in India is associated with production of?

Options :

1. ✘ Black Gram
2. ✘ Charcoal
3. ✘ Diamonds
4. ✔ Crude Petroleum

Question Number : 197 Question Id : 7368154845 Question Type : MCQ Option Shuffling : Yes Display Question Number : Yes
Single Line Question Option : No Option Orientation : Vertical

Correct : 1 Wrong : 0.25

भारत में अश्वेत क्रांति (ब्लैक रिवोल्यूशन) किस चीज के उत्पादन से सम्बन्धित थी?

Options :

1. ✘ काला चना
2. ✘ लकड़ी का कोयला
3. ✘ हीरा
4. ✔ कच्चा पेट्रोलियम

Question Number : 198 Question Id : 7368154846 Question Type : MCQ Option Shuffling : Yes Display Question Number : Yes
Single Line Question Option : No Option Orientation : Vertical

Correct : 1 Wrong : 0.25

Khaziranga Sanctuary in Assam is famous for:

Options :

1. ✘ Tigers
2. ✔ Rhinoceros
3. ✘ Snakes
4. ✘ Zebra

Correct : 1 Wrong : 0.25

असम में काजीरंगा अभयारण्य किस चीज के लिए प्रसिद्ध है?

Options :

1. ✘ शेर
2. ✔ गैंडा
3. ✘ सांप
4. ✘ ज़ेबरा

Question Number : 199 Question Id : 7368154847 Question Type : MCQ Option Shuffling : Yes Display Question Number : Yes
Single Line Question Option : No Option Orientation : Vertical

Correct : 1 Wrong : 0.25

The highest Coffee producing state in India is:

Options :

1. ✘ Kerala
2. ✘ Tamil Nadu
3. ✔ Karnataka
4. ✘ Goa

Question Number : 199 Question Id : 7368154847 Question Type : MCQ Option Shuffling : Yes Display Question Number : Yes
Single Line Question Option : No Option Orientation : Vertical

Correct : 1 Wrong : 0.25

भारत के किस राज्य में कॉफी का सबसे अधिक उत्पादन होता है?

Options :

1. ✘ केरल
2. ✘ तमिलनाडु
3. ✔ कर्नाटक
4. ✘ गोवा

Question Number : 200 Question Id : 7368154848 Question Type : MCQ Option Shuffling : Yes Display Question Number : Yes
Single Line Question Option : No Option Orientation : Vertical

Correct : 1 Wrong : 0.25

Before the drafting Committee, who proposed the preamble of Indian Constitution?

Options :

1. ✘ Dr.B.R. Ambedkar
2. ✘ Lal Bahadur Shastri
3. ✘ Mahatma Gandhi
4. ✔ Jawaharlal Nehru

Question Number : 200 Question Id : 7368154848 Question Type : MCQ Option Shuffling : Yes Display Question Number : Yes
Single Line Question Option : No Option Orientation : Vertical

भारतीय संविधान की प्रस्तावना को प्रारूपण समिति के सामने किसने प्रस्तावित किया था?

Options :

1. ✘ डॉ. बी. आर. अम्बेडकर
2. ✘ लाल बहादुर शास्त्री
3. ✘ महात्मा गांधी
4. ✔ जवाहर लाल नेहरू